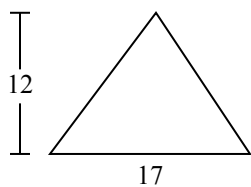




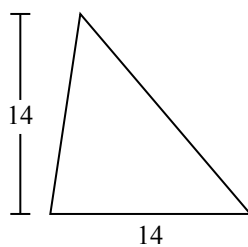
Tìm diện tích hình các tam giác. Đơn vị không theo tỉ lệ.

Câu trả lời

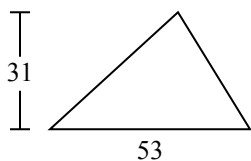
1)



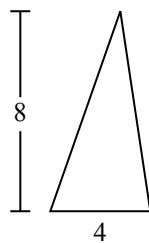
2)



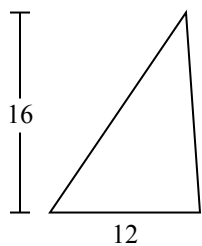
3)



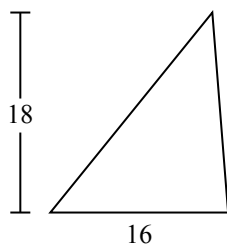
4)



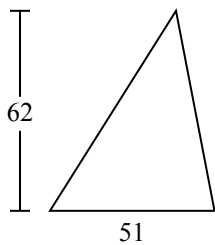
5)



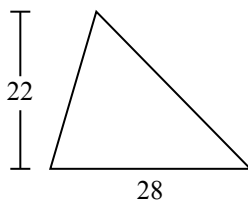
6)



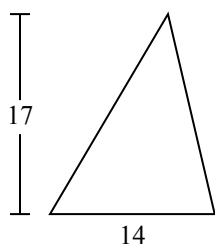
7)



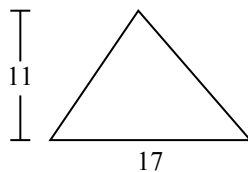
8)



9)



10)

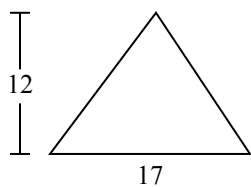


- 1. _____
- 2. _____
- 3. _____
- 4. _____
- 5. _____
- 6. _____
- 7. _____
- 8. _____
- 9. _____
- 10. _____

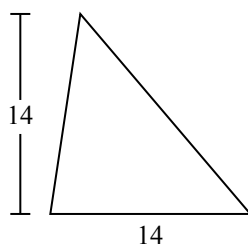


Tìm diện tích hình các tam giác. Đơn vị không theo tỉ lệ.

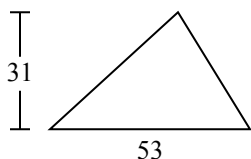
1)



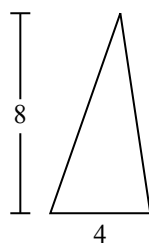
2)



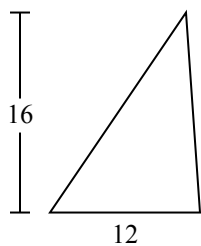
3)



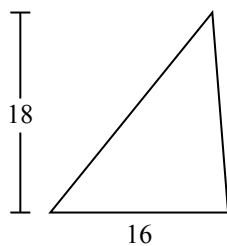
4)



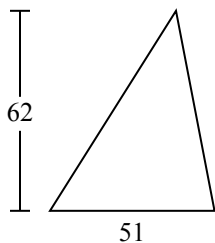
5)



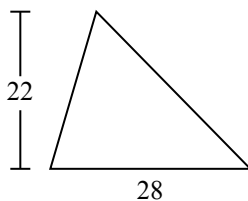
6)



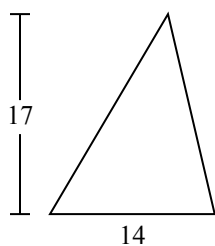
7)



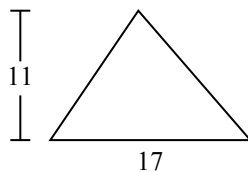
8)



9)



10)



Câu trả lời

1. **102**

2. **98**

3. **821,5**

4. **16**

5. **96**

6. **144**

7. **1.581**

8. **308**

9. **119**

10. **93,5**

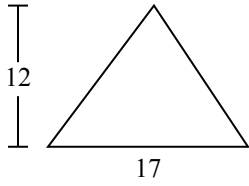


Tìm diện tích hình các tam giác. Đơn vị không theo tỉ lệ.

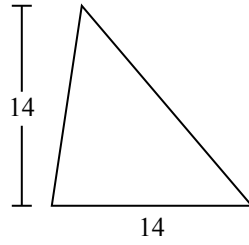
Câu trả lời

102	1.581	308	144	16
119	821,5	98	96	

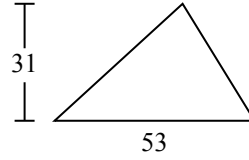
1)



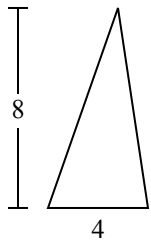
2)



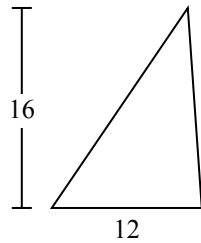
3)



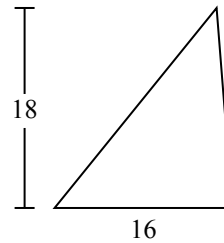
4)



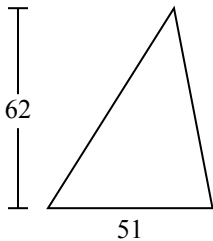
5)



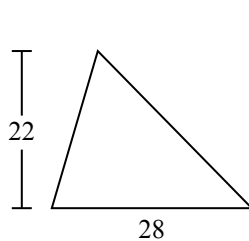
6)



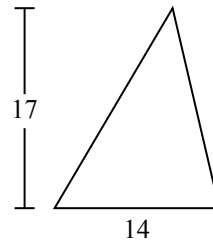
7)



8)



9)



1. _____
2. _____
3. _____
4. _____
5. _____
6. _____
7. _____
8. _____
9. _____