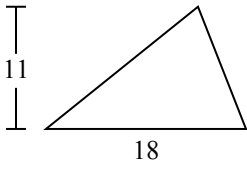




Tìm diện tích hình các tam giác. Đơn vị không theo tỉ lệ.

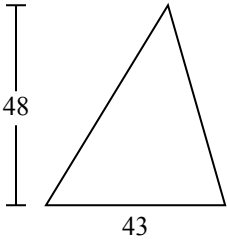
1)



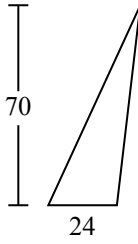
2)



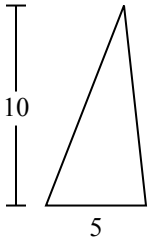
3)



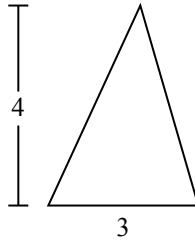
4)



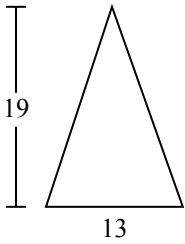
5)



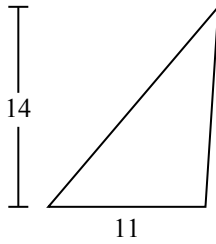
6)



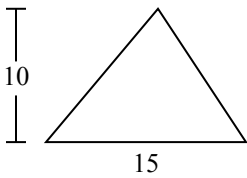
7)



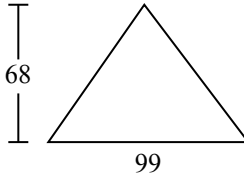
8)



9)



10)



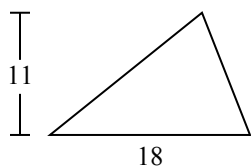
Câu trả lời

1. _____
2. _____
3. _____
4. _____
5. _____
6. _____
7. _____
8. _____
9. _____
10. _____



Tìm diện tích hình các tam giác. Đơn vị không theo tỉ lệ.

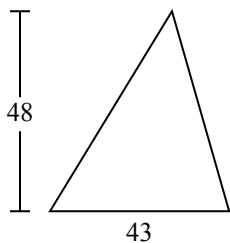
1)



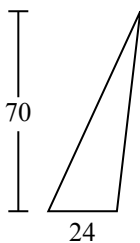
2)



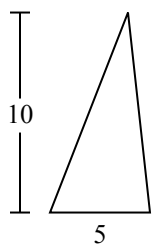
3)



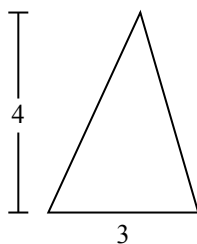
4)



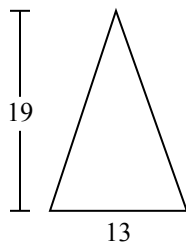
5)



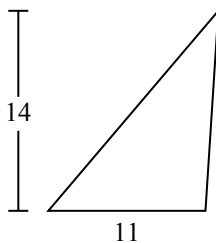
6)



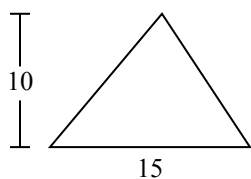
7)



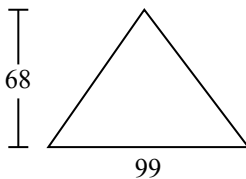
8)



9)



10)



Câu trả lời

1. 99

2. 7

3. 1.032

4. 840

5. 25

6. 6

7. 123,5

8. 77

9. 75

10. 3.366



Tìm diện tích hình các tam giác. Đơn vị không theo tỉ lệ.

Câu trả lời

77

6

99

1.032

25

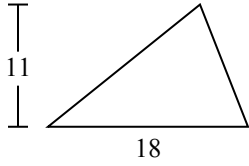
840

75

123,5

7

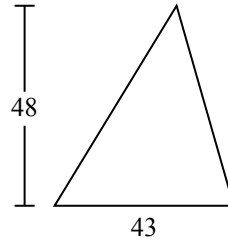
1)



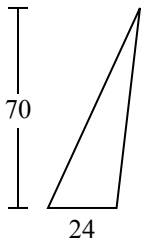
2)



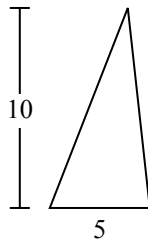
3)



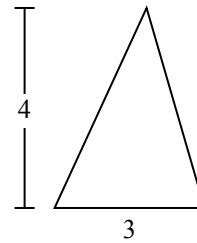
4)



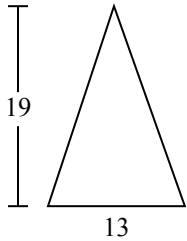
5)



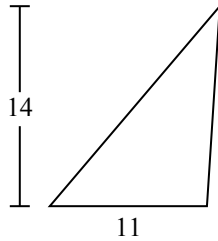
6)



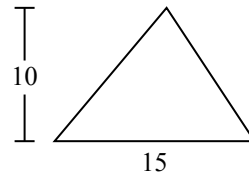
7)



8)



9)



1. _____
2. _____
3. _____
4. _____
5. _____
6. _____
7. _____
8. _____
9. _____