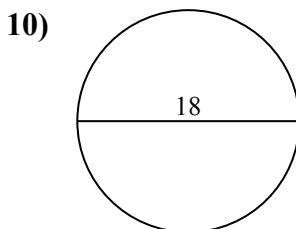
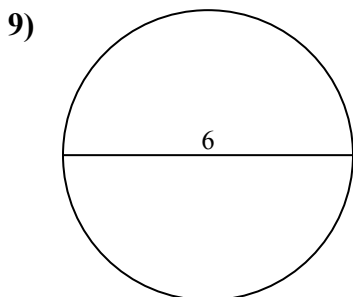
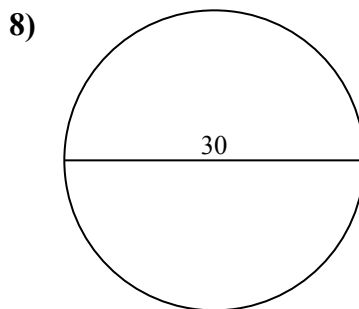
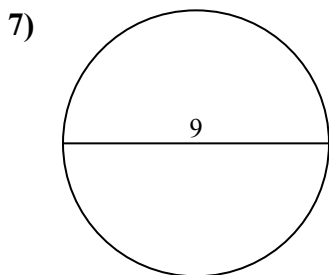
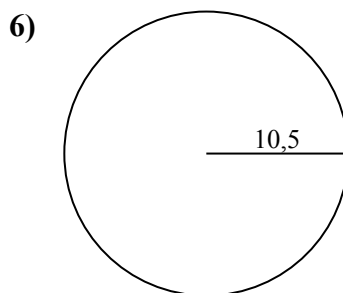
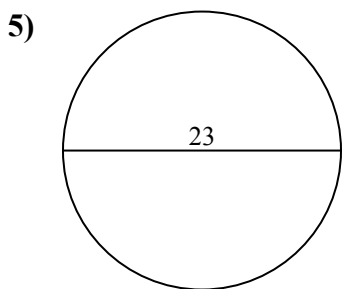
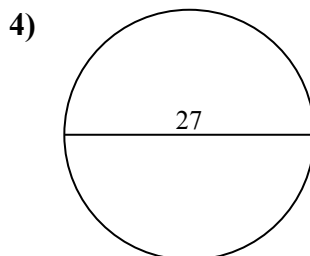
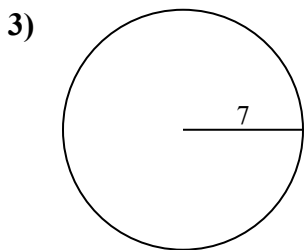
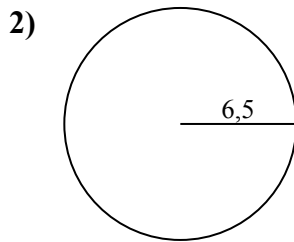
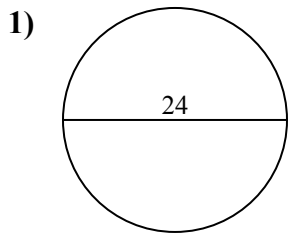




Tìm diện tích của mỗi hình tròn. Các hình tròn không đúng tỉ lệ.

**Câu trả lời**

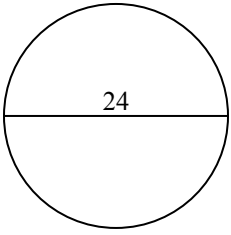


- 1. \_\_\_\_\_
- 2. \_\_\_\_\_
- 3. \_\_\_\_\_
- 4. \_\_\_\_\_
- 5. \_\_\_\_\_
- 6. \_\_\_\_\_
- 7. \_\_\_\_\_
- 8. \_\_\_\_\_
- 9. \_\_\_\_\_
- 10. \_\_\_\_\_

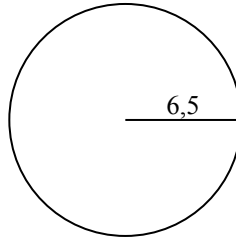


Tìm diện tích của mỗi hình tròn. Các hình tròn không đúng tỉ lệ.

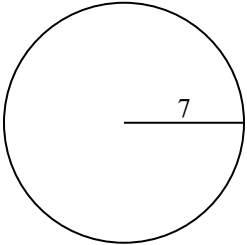
1)



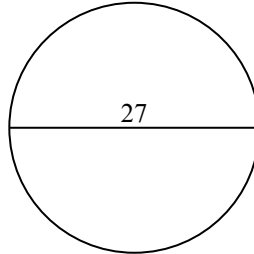
2)



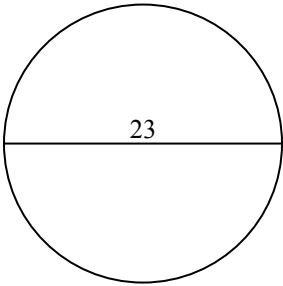
3)



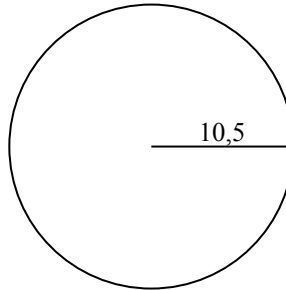
4)



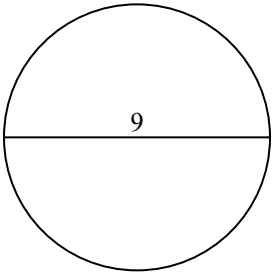
5)



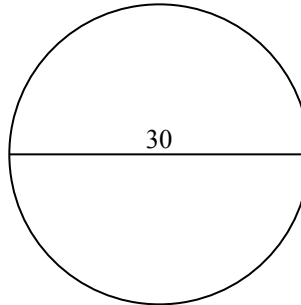
6)



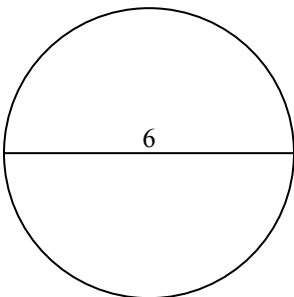
7)



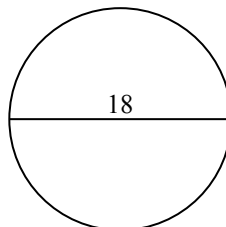
8)



9)



10)

**Câu trả lời**1. 452,42. 132,73. 153,94. 572,65. 415,56. 346,47. 63,68. 706,99. 28,310. 254,5

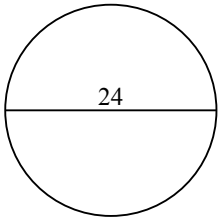


Tìm diện tích của mỗi hình tròn. Các hình tròn không đúng tỉ lệ.

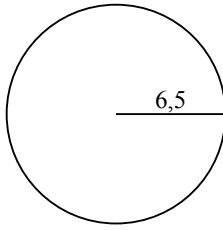
63,6	132,7	28,3	706,9	452,4
415,5	153,9	572,6	346,4	

**Câu trả lời**

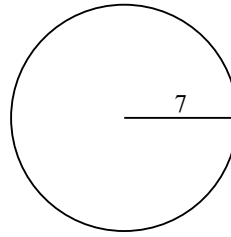
1)



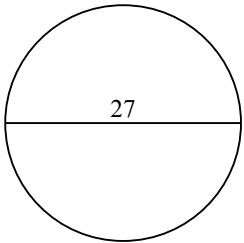
2)



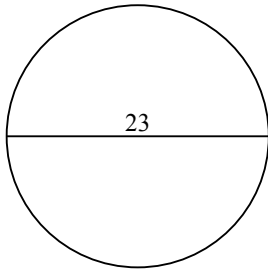
3)



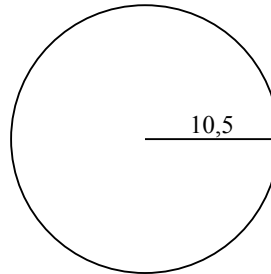
4)



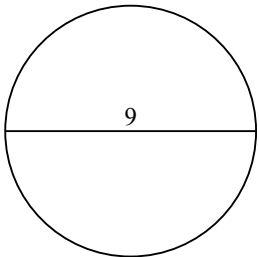
5)



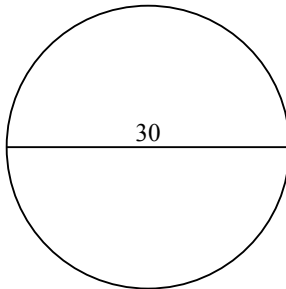
6)



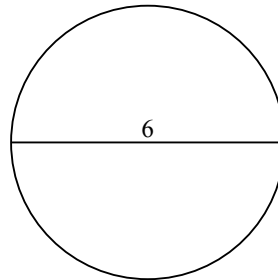
7)



8)



9)



- 1. \_\_\_\_\_
- 2. \_\_\_\_\_
- 3. \_\_\_\_\_
- 4. \_\_\_\_\_
- 5. \_\_\_\_\_
- 6. \_\_\_\_\_
- 7. \_\_\_\_\_
- 8. \_\_\_\_\_
- 9. \_\_\_\_\_