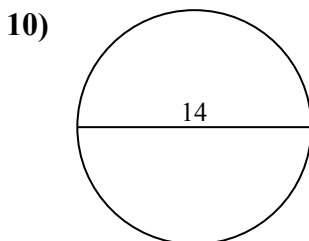
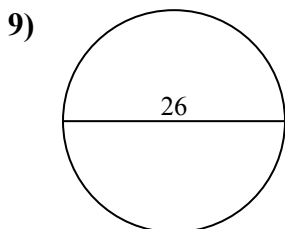
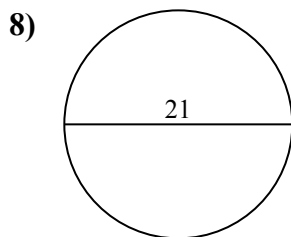
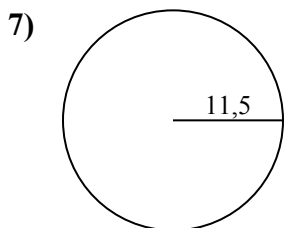
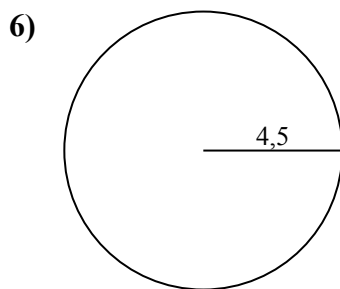
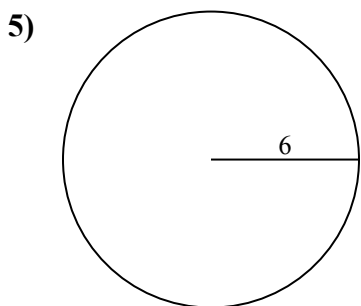
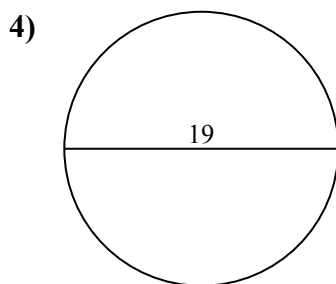
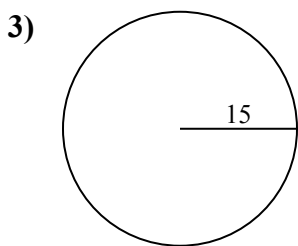
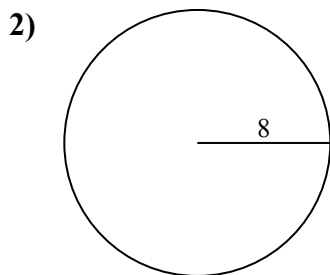
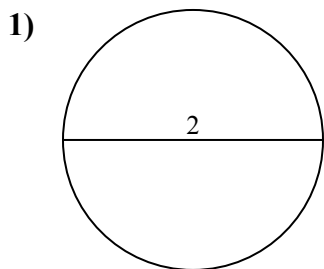




Tìm diện tích của mỗi hình tròn. Các hình tròn không đúng tỉ lệ.

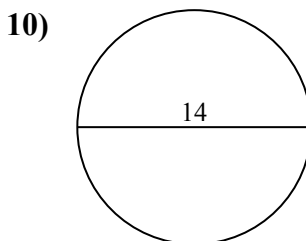
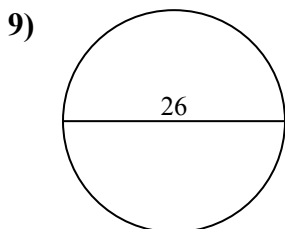
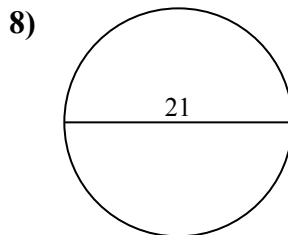
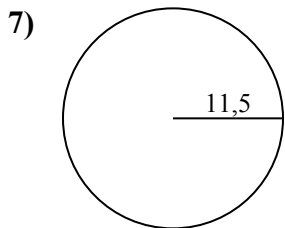
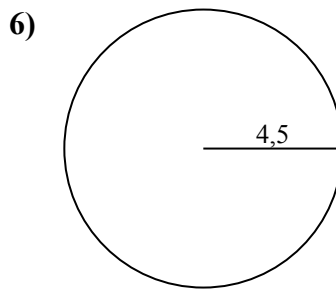
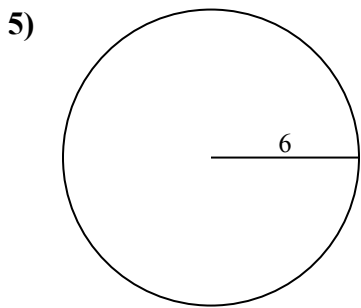
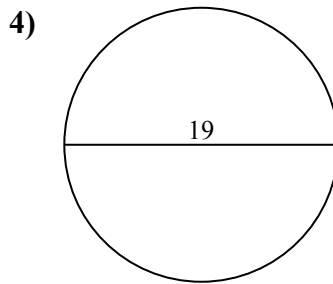
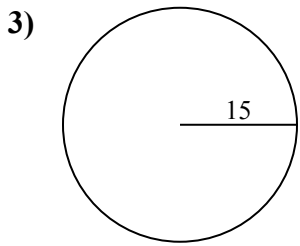
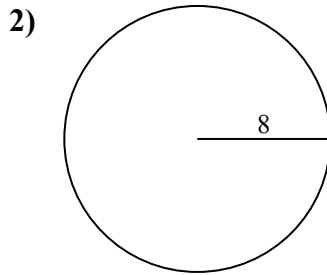
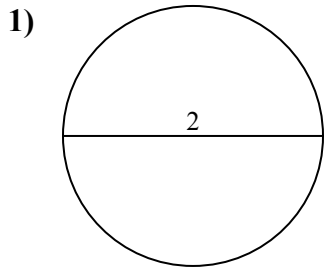
Câu trả lời



- 1. _____
- 2. _____
- 3. _____
- 4. _____
- 5. _____
- 6. _____
- 7. _____
- 8. _____
- 9. _____
- 10. _____



Tìm diện tích của mỗi hình tròn. Các hình tròn không đúng tỉ lệ.



Câu trả lời

1. 3,1

2. 201,1

3. 706,9

4. 283,5

5. 113,1

6. 63,6

7. 415,5

8. 346,4

9. 530,9

10. 153,9

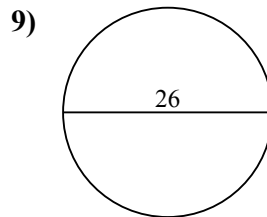
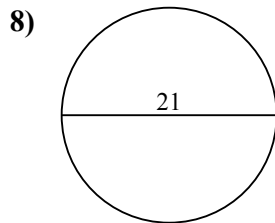
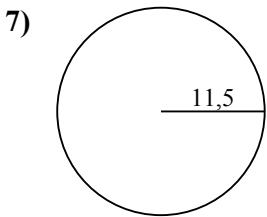
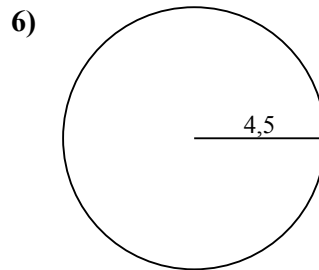
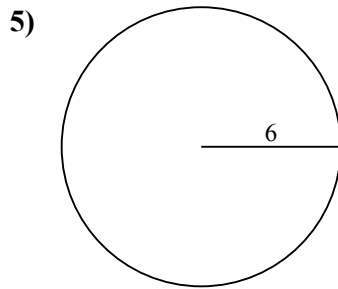
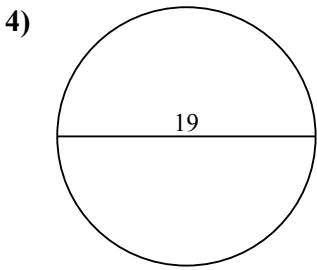
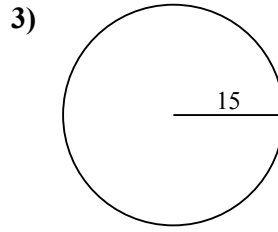
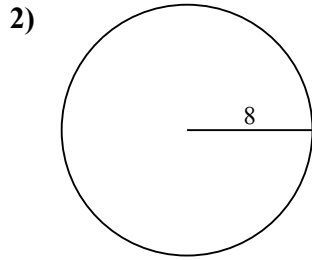
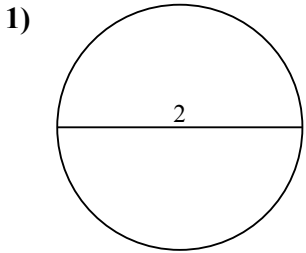


Tìm diện tích của mỗi hình tròn. Các hình tròn không đúng tỉ lệ.

201,1	3,1	283,5	346,4	63,6
706,9	113,1	530,9	415,5	

Câu trả lời

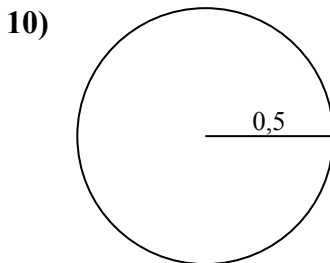
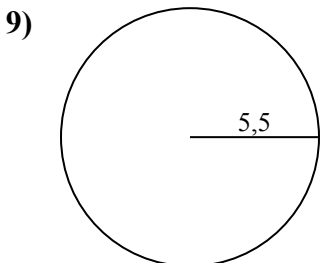
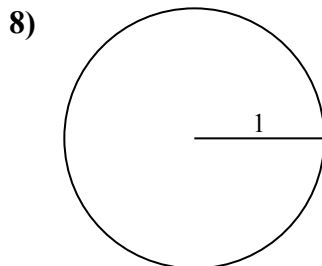
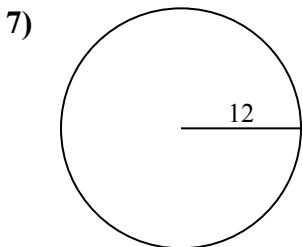
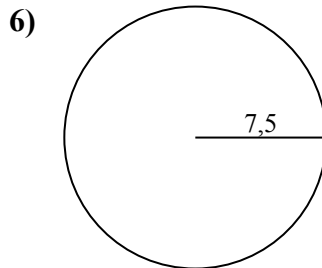
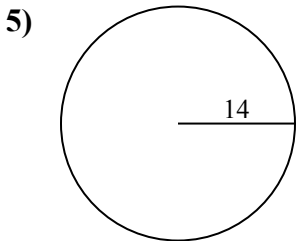
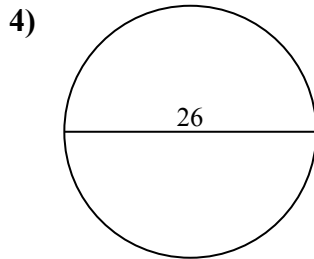
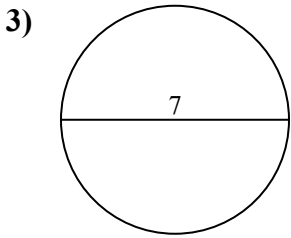
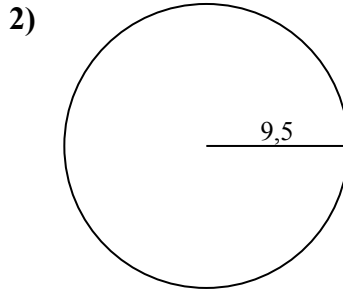
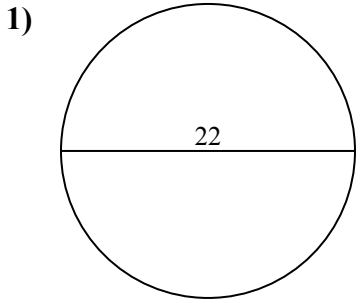
1. _____
2. _____
3. _____
4. _____
5. _____
6. _____
7. _____
8. _____
9. _____





Tìm diện tích của mỗi hình tròn. Các hình tròn không đúng tỉ lệ.

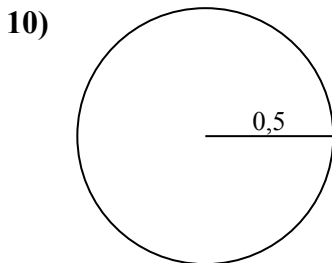
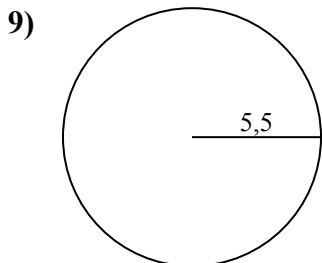
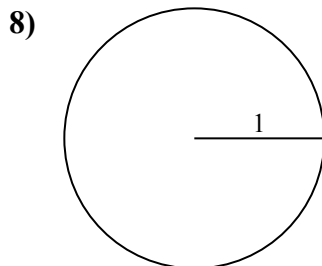
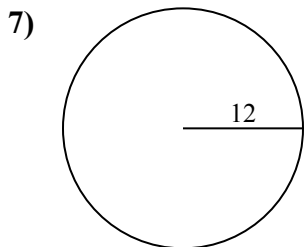
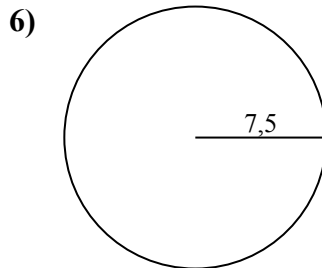
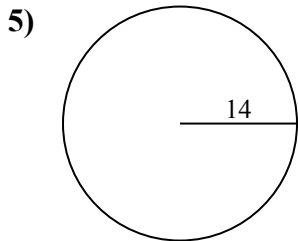
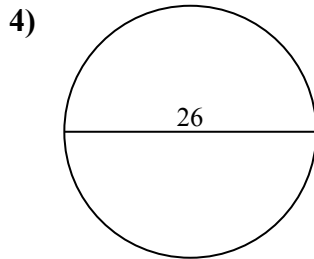
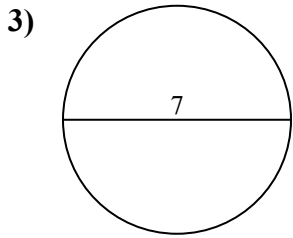
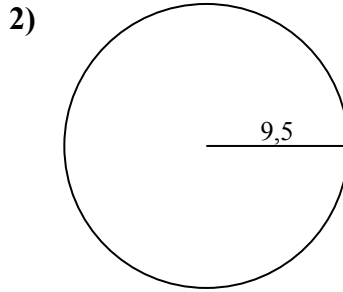
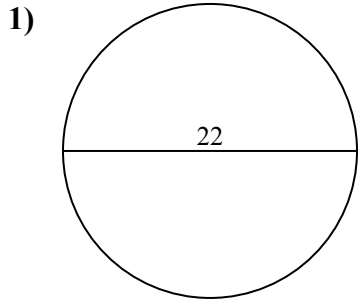
Câu trả lời



- 1. _____
- 2. _____
- 3. _____
- 4. _____
- 5. _____
- 6. _____
- 7. _____
- 8. _____
- 9. _____
- 10. _____



Tìm diện tích của mỗi hình tròn. Các hình tròn không đúng tỉ lệ.



Câu trả lời

1. 380,1
2. 283,5
3. 38,5
4. 530,9
5. 615,8
6. 176,7
7. 452,4
8. 3,1
9. 95
10. 0,8

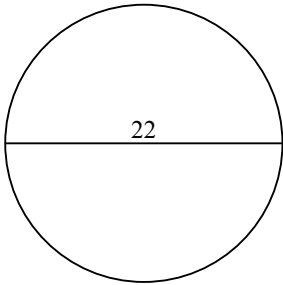


Tìm diện tích của mỗi hình tròn. Các hình tròn không đúng tỉ lệ.

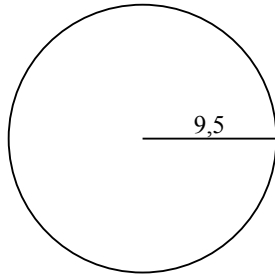
176,7	38,5	530,9	283,5	95
615,8	3,1	452,4	380,1	

Câu trả lời

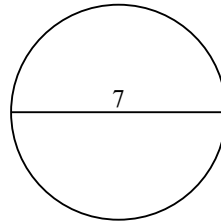
1)



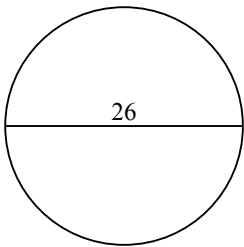
2)



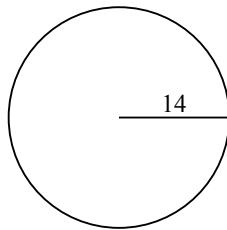
3)



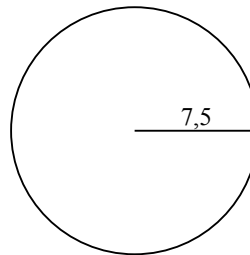
4)



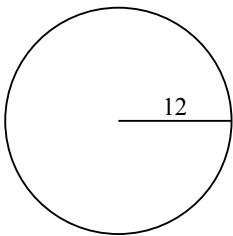
5)



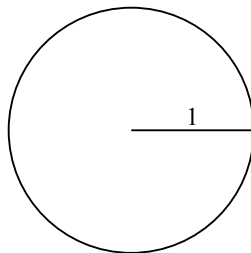
6)



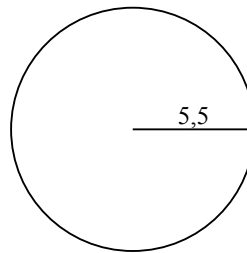
7)



8)



9)



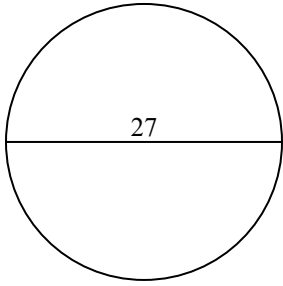
1. _____
2. _____
3. _____
4. _____
5. _____
6. _____
7. _____
8. _____
9. _____



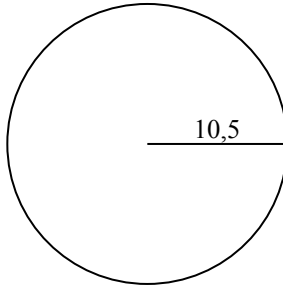
Tìm diện tích của mỗi hình tròn. Các hình tròn không đúng tỉ lệ.

Câu trả lời

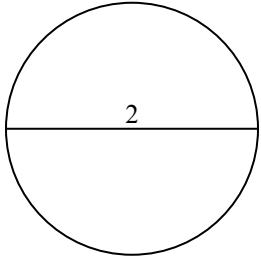
1)



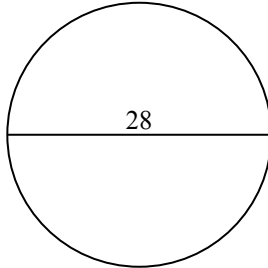
2)



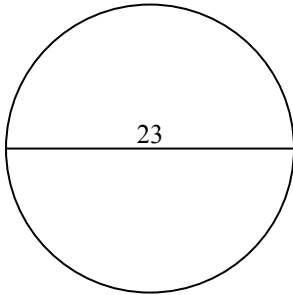
3)



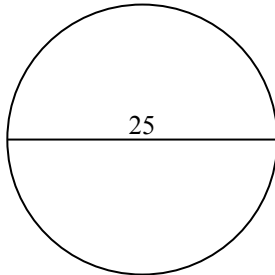
4)



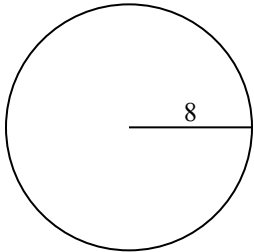
5)



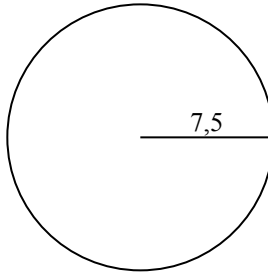
6)



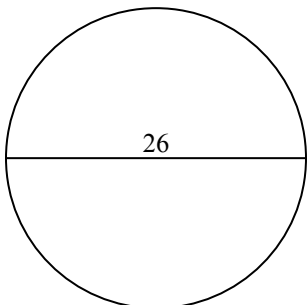
7)



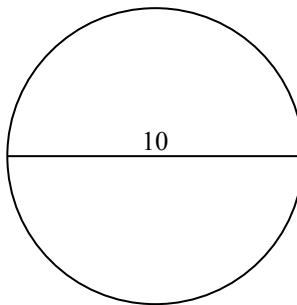
8)



9)



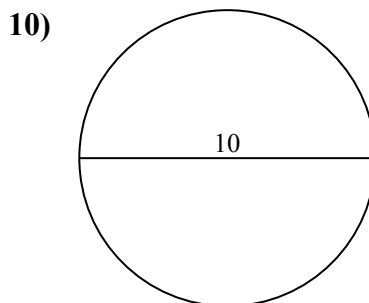
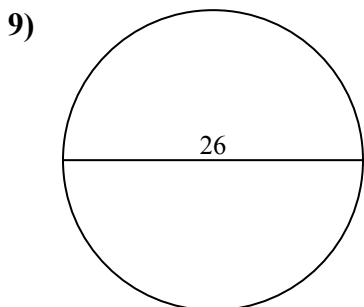
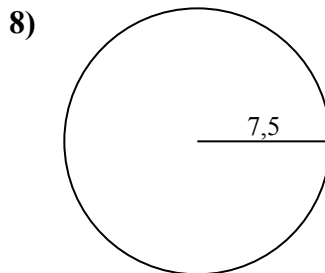
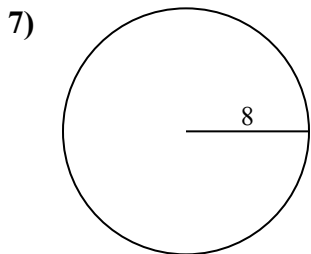
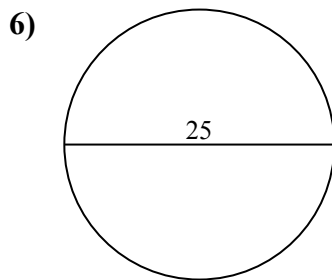
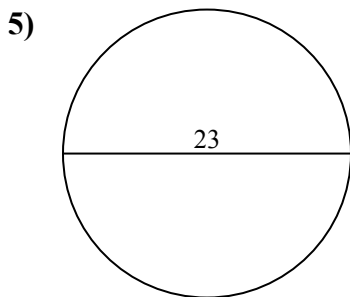
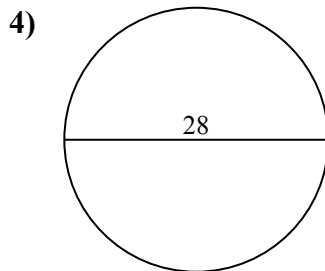
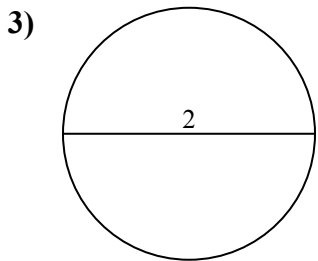
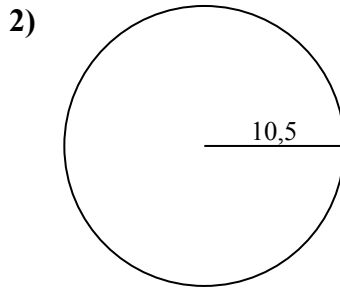
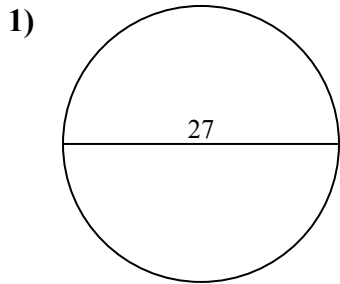
10)



- 1. _____
- 2. _____
- 3. _____
- 4. _____
- 5. _____
- 6. _____
- 7. _____
- 8. _____
- 9. _____
- 10. _____



Tìm diện tích của mỗi hình tròn. Các hình tròn không đúng tỉ lệ.



Câu trả lời

1. 572,6
2. 346,4
3. 3,1
4. 615,8
5. 415,5
6. 490,9
7. 201,1
8. 176,7
9. 530,9
10. 78,5

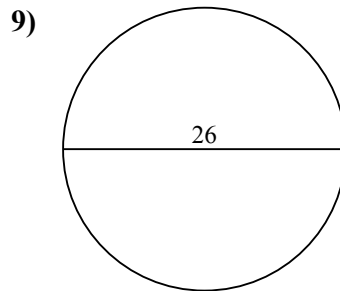
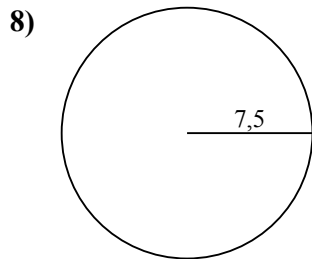
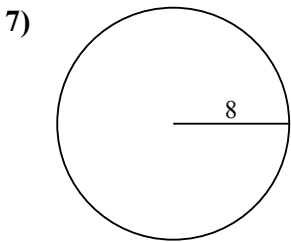
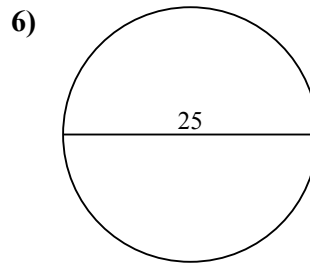
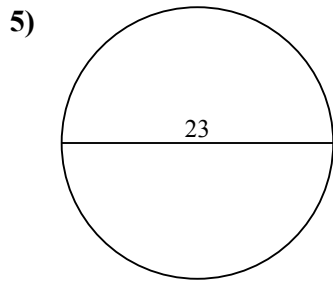
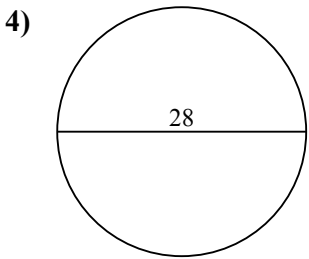
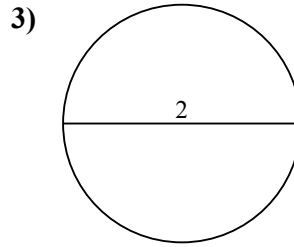
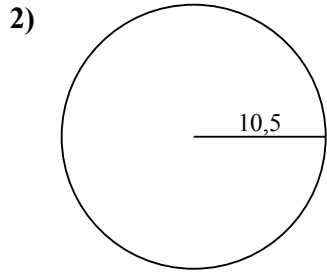
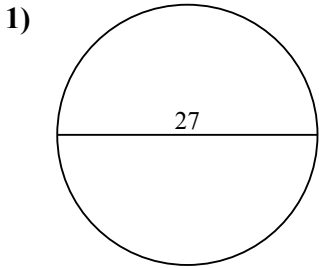


Tìm diện tích của mỗi hình tròn. Các hình tròn không đúng tỉ lệ.

530,9	3,1	615,8	201,1	490,9
572,6	415,5	176,7	346,4	

Câu trả lời

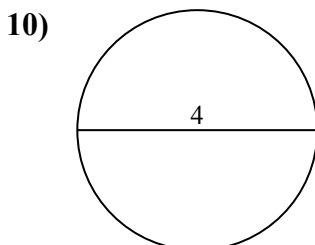
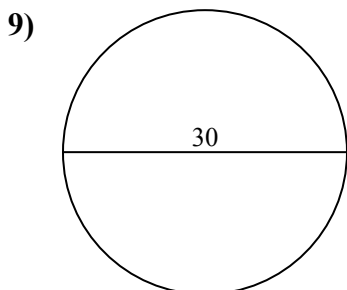
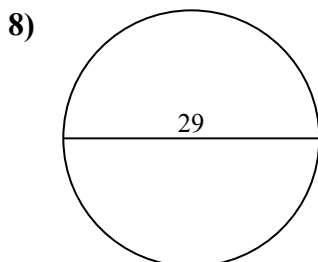
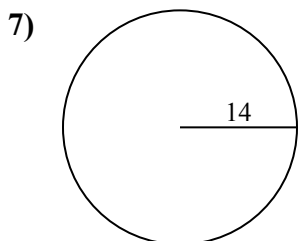
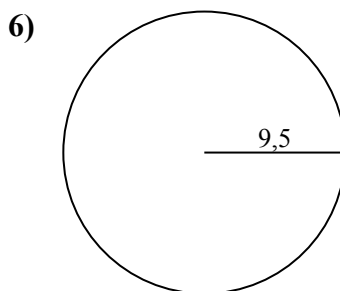
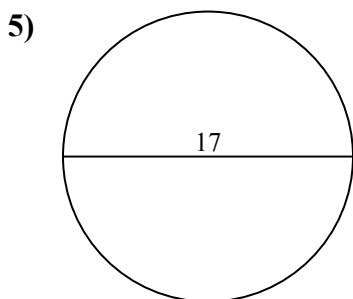
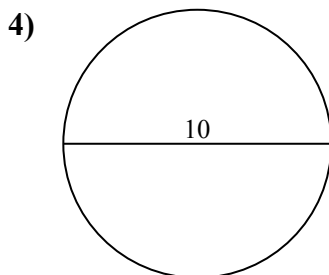
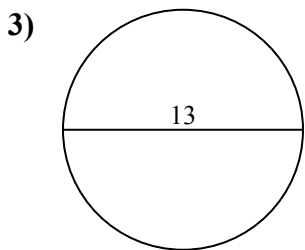
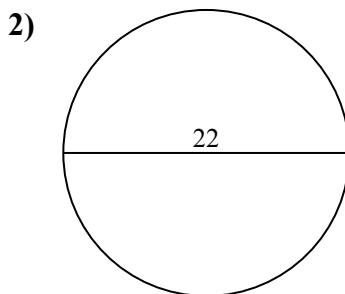
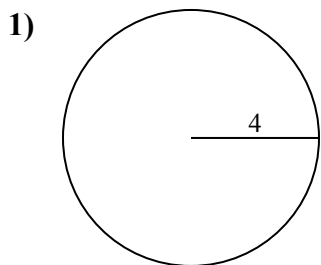
1. _____
2. _____
3. _____
4. _____
5. _____
6. _____
7. _____
8. _____
9. _____





Tìm diện tích của mỗi hình tròn. Các hình tròn không đúng tỉ lệ.

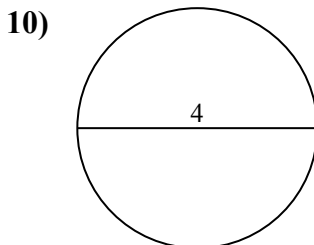
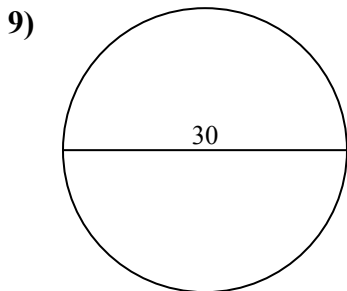
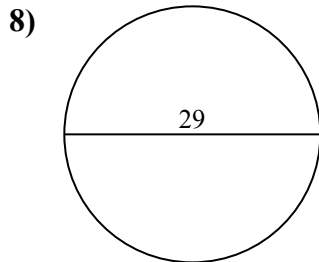
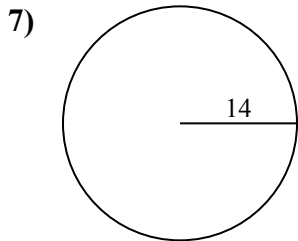
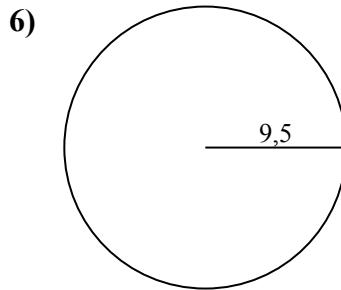
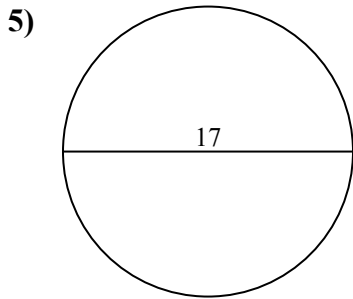
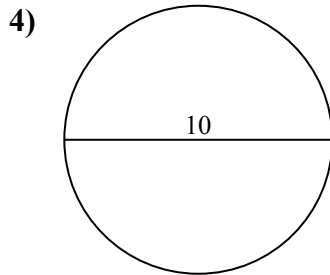
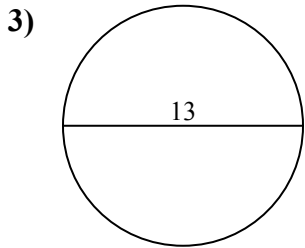
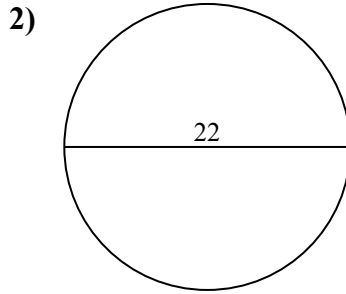
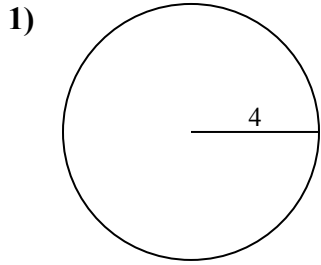
Câu trả lời



- 1. _____
- 2. _____
- 3. _____
- 4. _____
- 5. _____
- 6. _____
- 7. _____
- 8. _____
- 9. _____
- 10. _____



Tìm diện tích của mỗi hình tròn. Các hình tròn không đúng tỉ lệ.



Câu trả lời

1. 50,3
2. 380,1
3. 132,7
4. 78,5
5. 227
6. 283,5
7. 615,8
8. 660,5
9. 706,9
10. 12,6



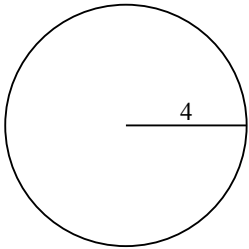
Tìm diện tích của mỗi hình tròn. Các hình tròn không đúng tỉ lệ.

78,5	227	660,5	615,8	380,1
283,5	132,7	50,3	706,9	

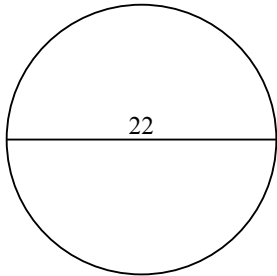
Câu trả lời

1. _____
2. _____
3. _____
4. _____
5. _____
6. _____
7. _____
8. _____
9. _____

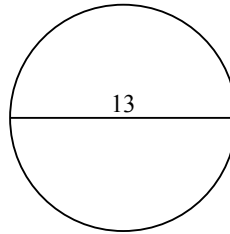
1)



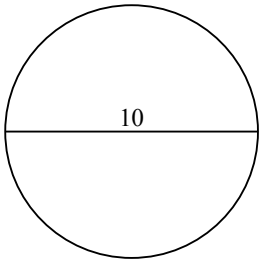
2)



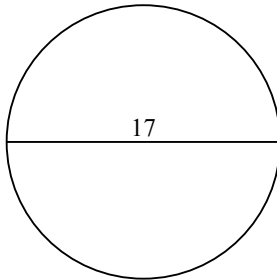
3)



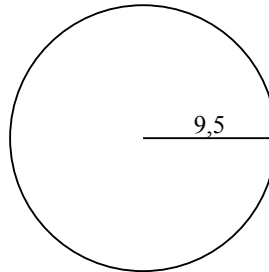
4)



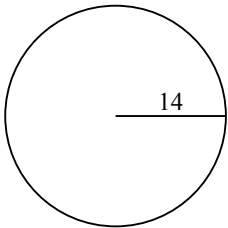
5)



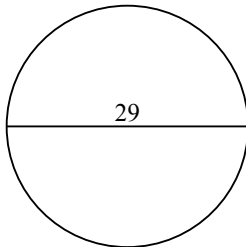
6)



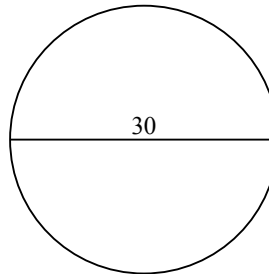
7)



8)



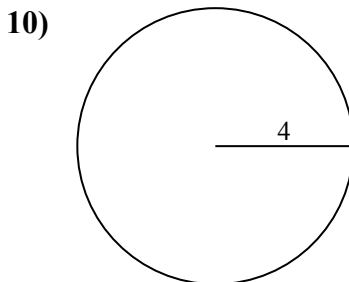
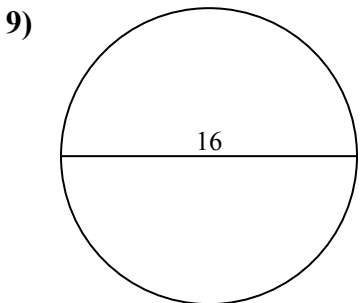
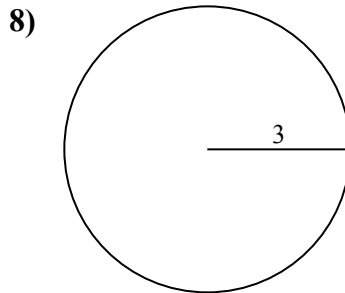
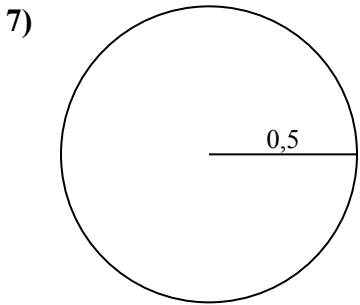
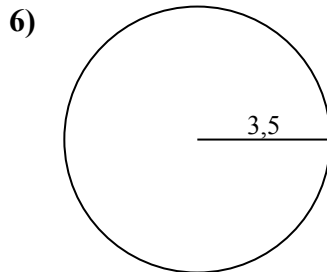
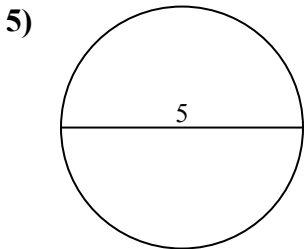
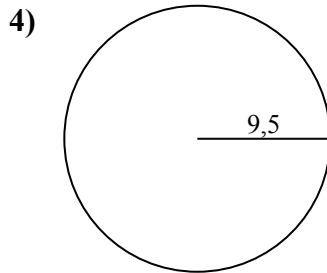
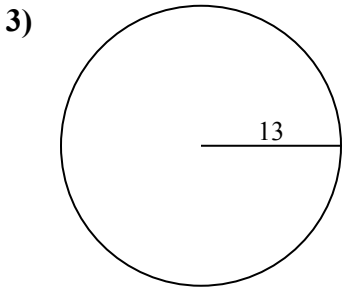
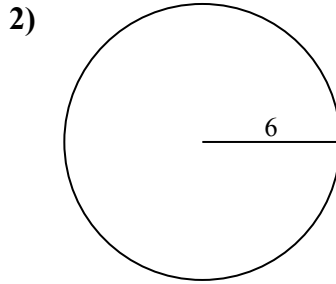
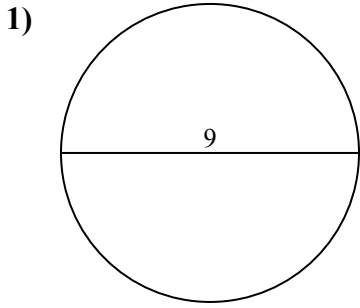
9)





Tìm diện tích của mỗi hình tròn. Các hình tròn không đúng tỉ lệ.

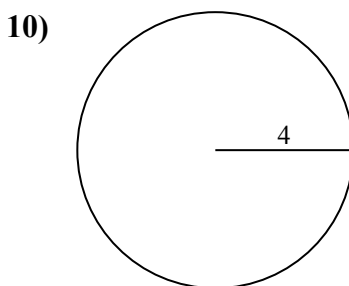
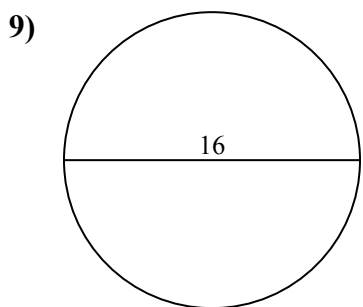
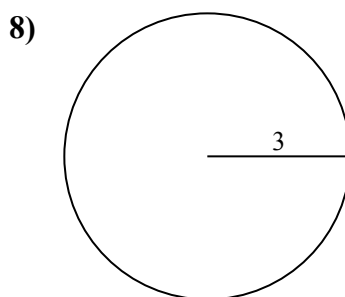
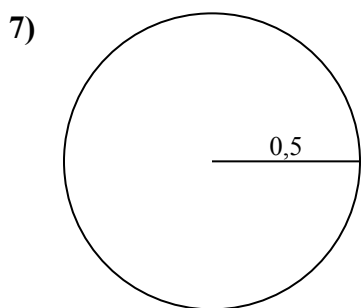
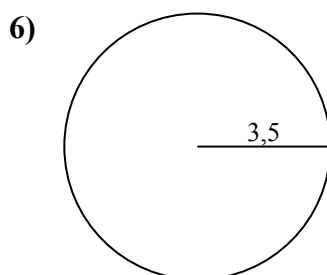
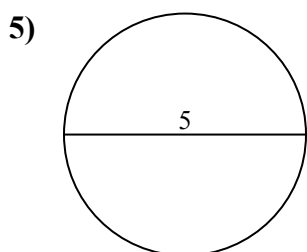
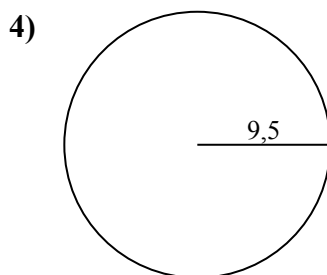
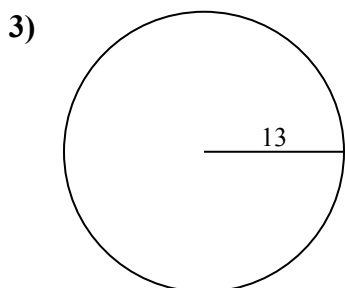
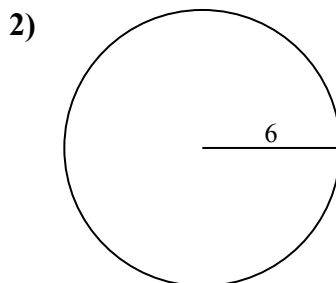
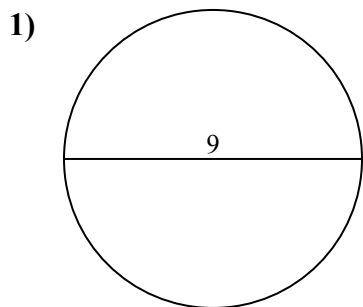
Câu trả lời



- 1. _____
- 2. _____
- 3. _____
- 4. _____
- 5. _____
- 6. _____
- 7. _____
- 8. _____
- 9. _____
- 10. _____



Tìm diện tích của mỗi hình tròn. Các hình tròn không đúng tỉ lệ.



Câu trả lời

1. 63,6

2. 113,1

3. 530,9

4. 283,5

5. 19,6

6. 38,5

7. 0,8

8. 28,3

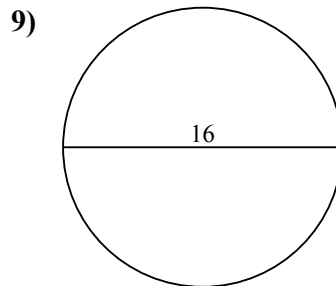
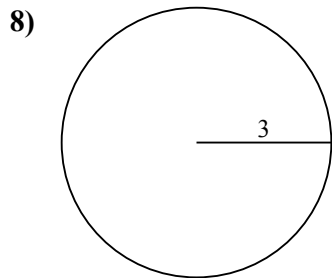
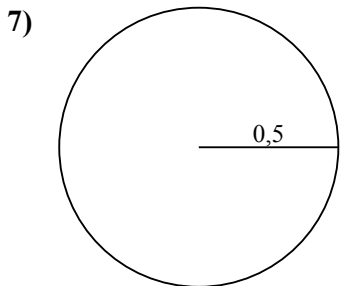
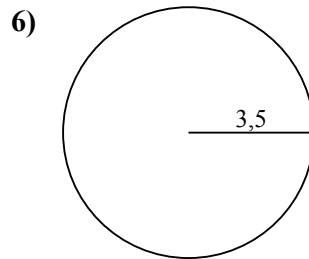
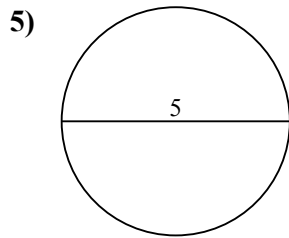
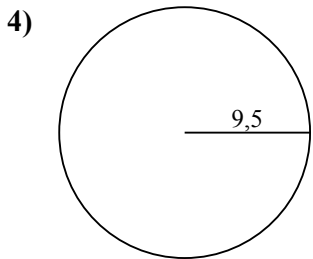
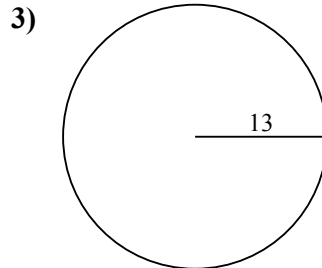
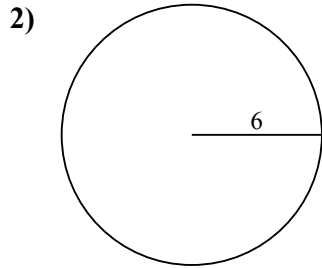
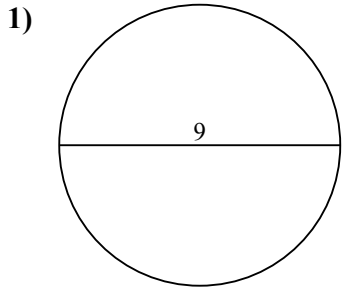
9. 201,1

10. 50,3



Tìm diện tích của mỗi hình tròn. Các hình tròn không đúng tỉ lệ.

28,3	113,1	201,1	38,5	283,5
0,8	19,6	63,6	530,9	



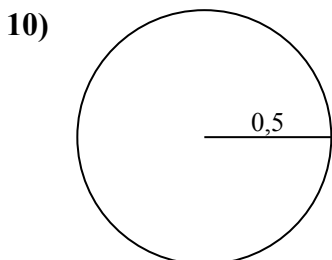
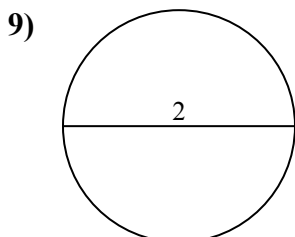
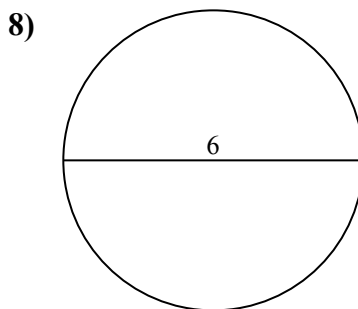
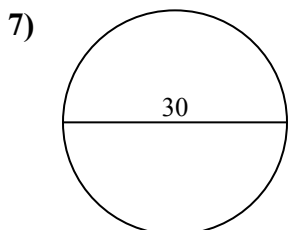
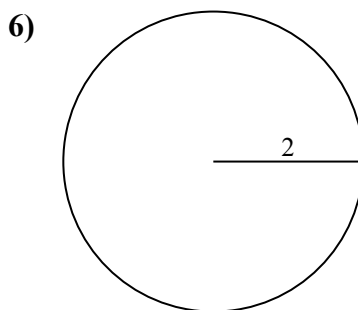
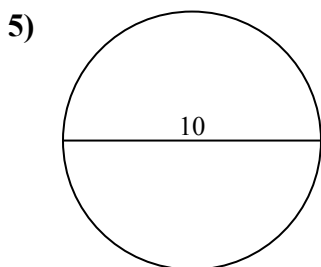
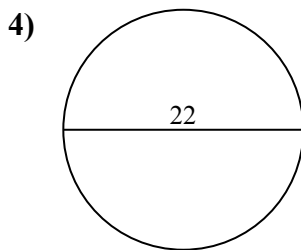
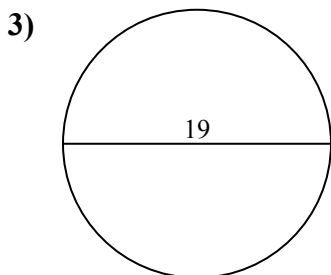
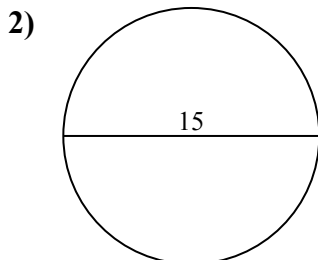
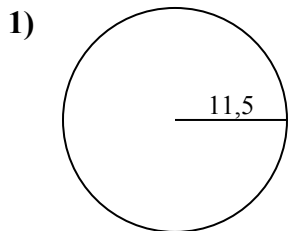
Câu trả lời

1. _____
2. _____
3. _____
4. _____
5. _____
6. _____
7. _____
8. _____
9. _____



Tìm diện tích của mỗi hình tròn. Các hình tròn không đúng tỉ lệ.

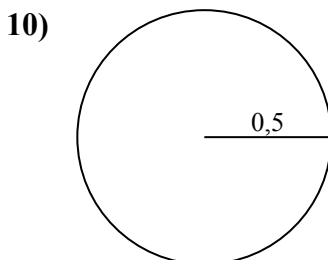
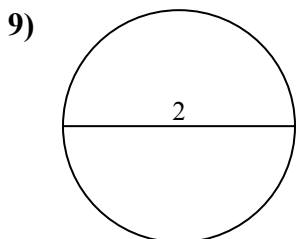
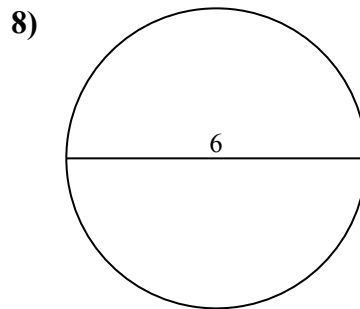
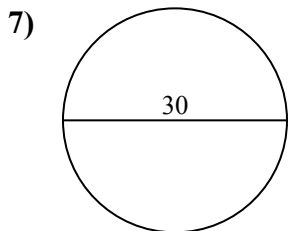
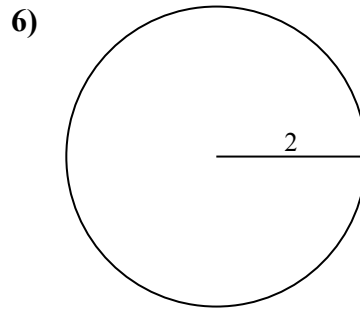
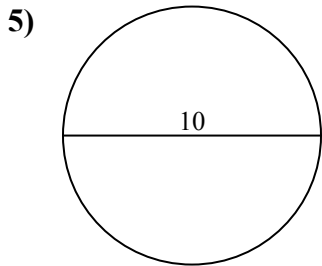
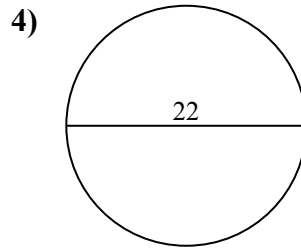
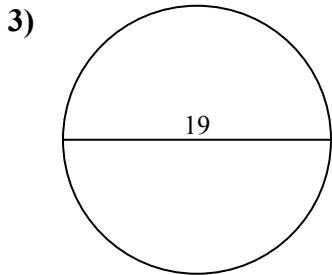
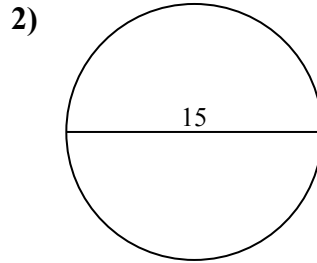
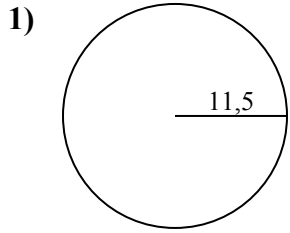
Câu trả lời



- 1. _____
- 2. _____
- 3. _____
- 4. _____
- 5. _____
- 6. _____
- 7. _____
- 8. _____
- 9. _____
- 10. _____



Tìm diện tích của mỗi hình tròn. Các hình tròn không đúng tỉ lệ.

**Câu trả lời**1. 415,52. 176,73. 283,54. 380,15. 78,56. 12,67. 706,98. 28,39. 3,110. 0,8

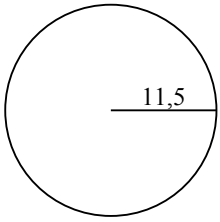


Tìm diện tích của mỗi hình tròn. Các hình tròn không đúng tỉ lệ.

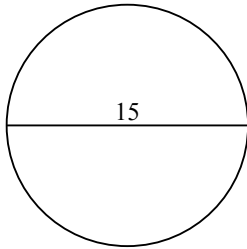
283,5	176,7	415,5	3,1	78,5
380,1	706,9	28,3	12,6	

Câu trả lời

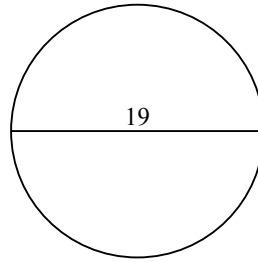
1)



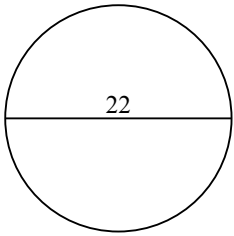
2)



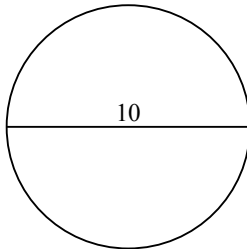
3)



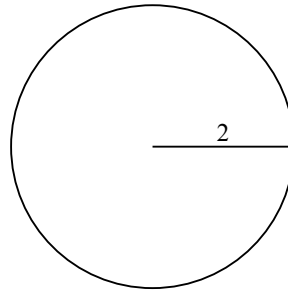
4)



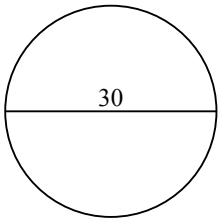
5)



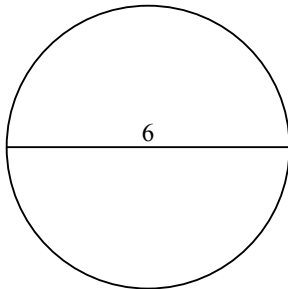
6)



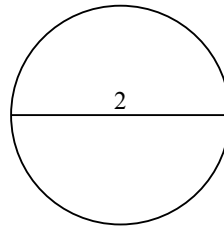
7)



8)



9)

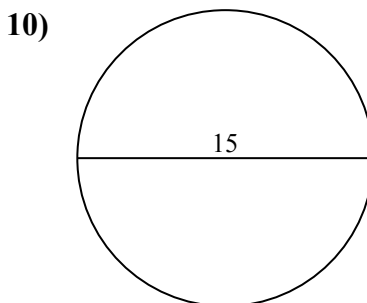
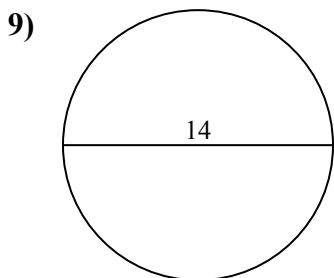
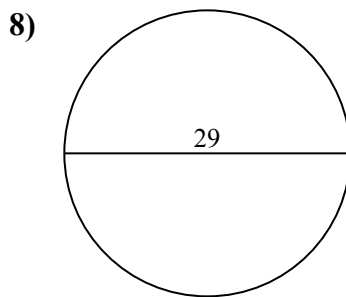
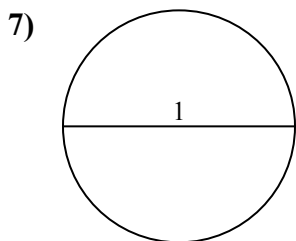
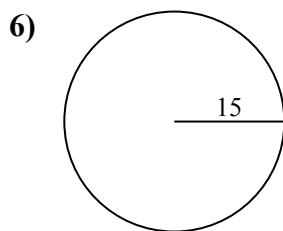
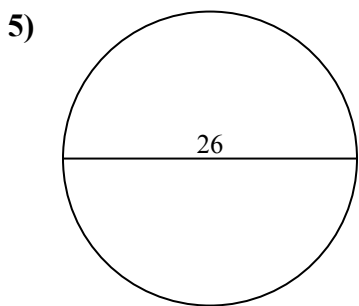
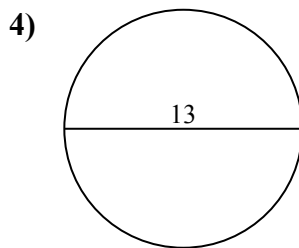
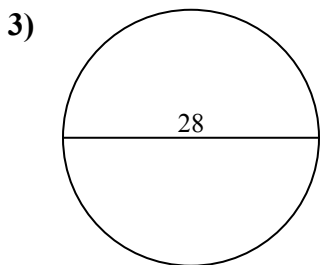
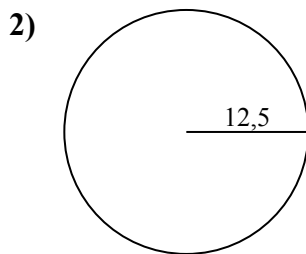
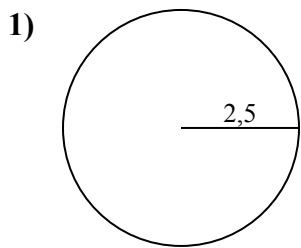


1. _____
2. _____
3. _____
4. _____
5. _____
6. _____
7. _____
8. _____
9. _____



Tìm diện tích của mỗi hình tròn. Các hình tròn không đúng tỉ lệ.

Câu trả lời

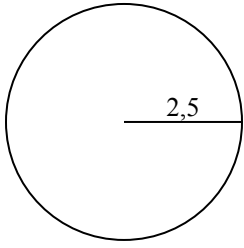


- 1. _____
- 2. _____
- 3. _____
- 4. _____
- 5. _____
- 6. _____
- 7. _____
- 8. _____
- 9. _____
- 10. _____

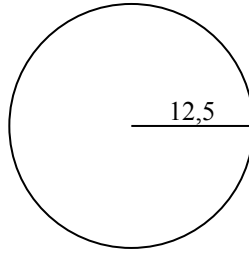


Tìm diện tích của mỗi hình tròn. Các hình tròn không đúng tỉ lệ.

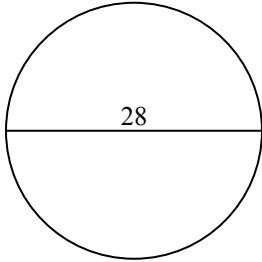
1)



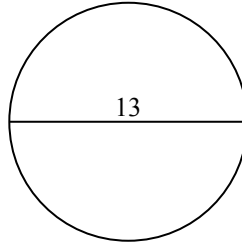
2)



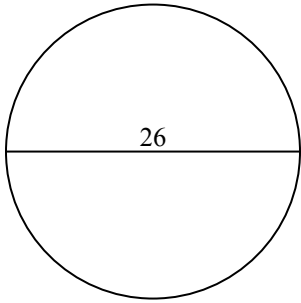
3)



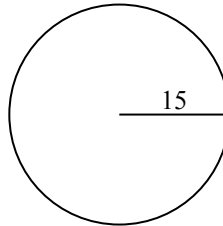
4)



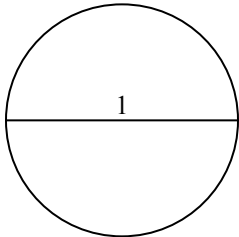
5)



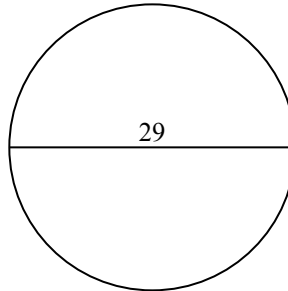
6)



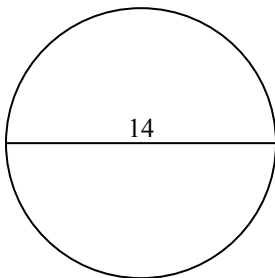
7)



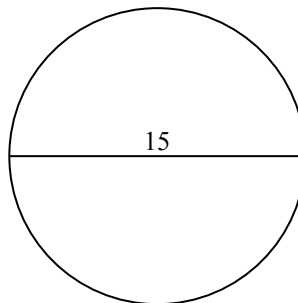
8)



9)



10)



Câu trả lời

1. 19,6

2. 490,9

3. 615,8

4. 132,7

5. 530,9

6. 706,9

7. 0,8

8. 660,5

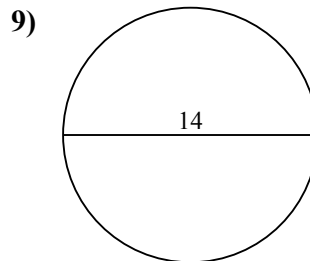
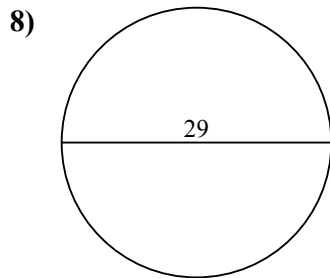
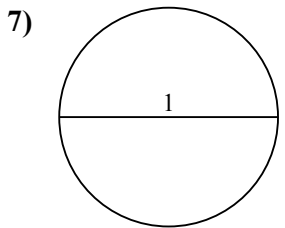
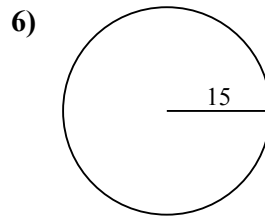
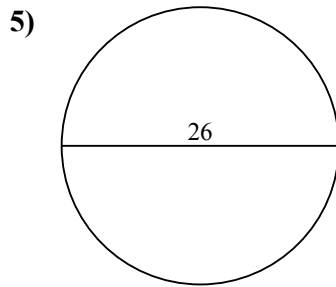
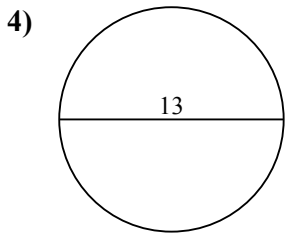
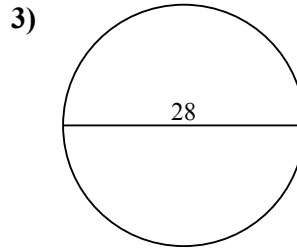
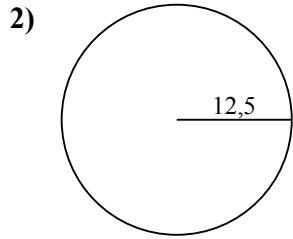
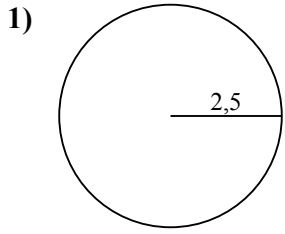
9. 153,9

10. 176,7



Tìm diện tích của mỗi hình tròn. Các hình tròn không đúng tỉ lệ.

490,9	615,8	706,9	132,7	153,9
19,6	530,9	0,8	660,5	



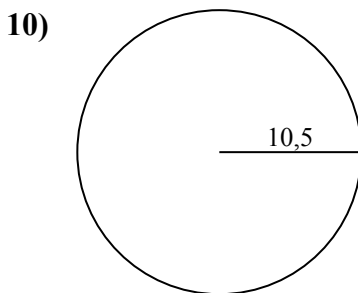
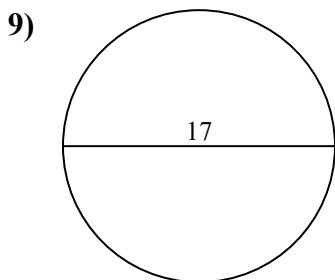
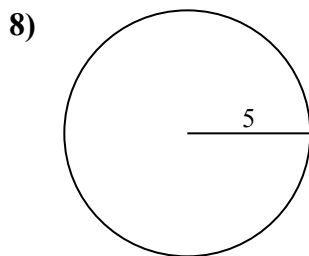
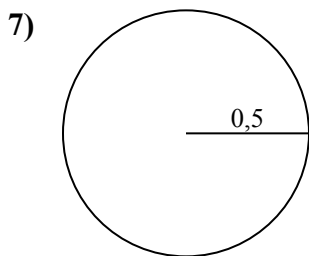
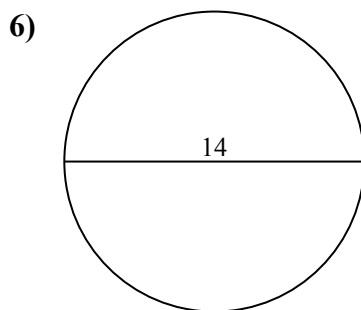
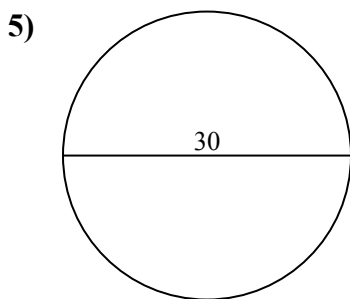
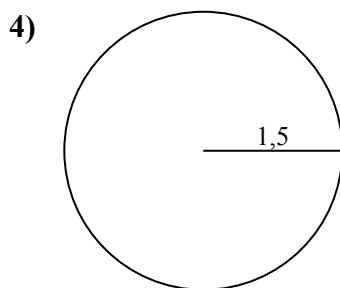
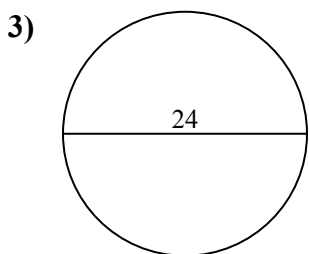
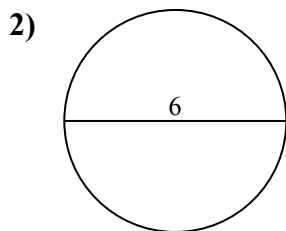
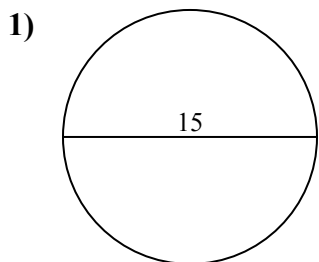
Câu trả lời

1. _____
2. _____
3. _____
4. _____
5. _____
6. _____
7. _____
8. _____
9. _____



Tìm diện tích của mỗi hình tròn. Các hình tròn không đúng tỉ lệ.

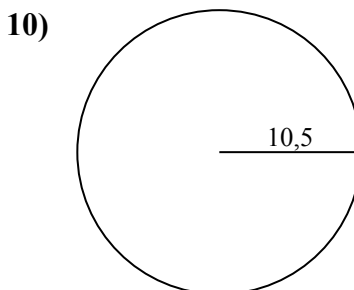
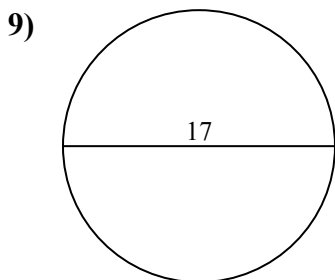
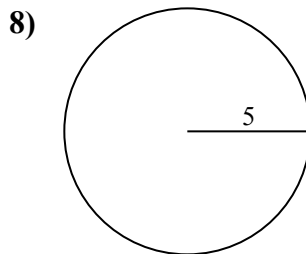
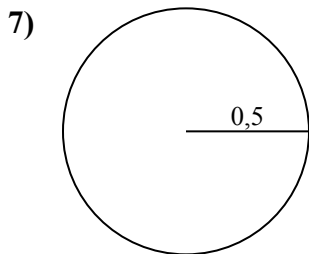
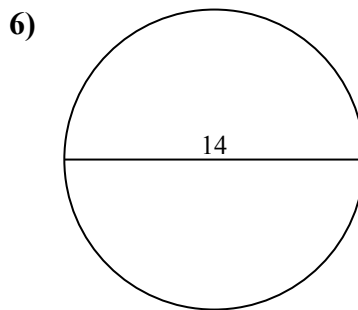
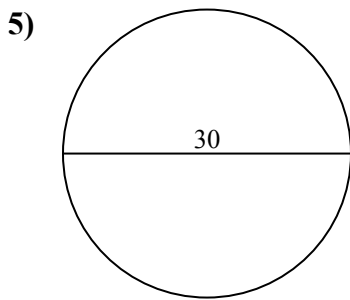
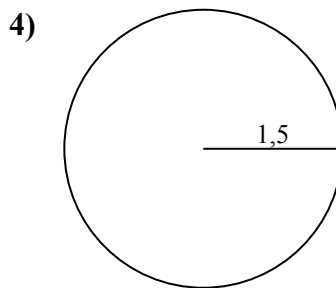
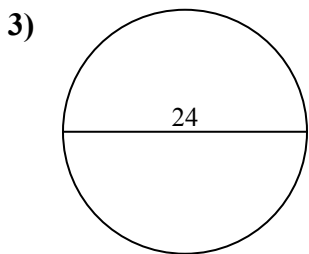
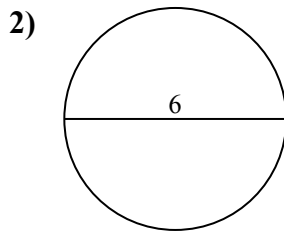
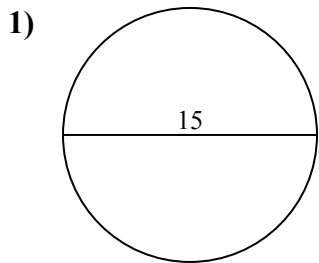
Câu trả lời



- 1. _____
- 2. _____
- 3. _____
- 4. _____
- 5. _____
- 6. _____
- 7. _____
- 8. _____
- 9. _____
- 10. _____



Tìm diện tích của mỗi hình tròn. Các hình tròn không đúng tỉ lệ.

**Câu trả lời**

1. 176,7
2. 28,3
3. 452,4
4. 7,1
5. 706,9
6. 153,9
7. 0,8
8. 78,5
9. 227
10. 346,4

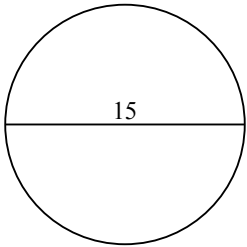


Tìm diện tích của mỗi hình tròn. Các hình tròn không đúng tỉ lệ.

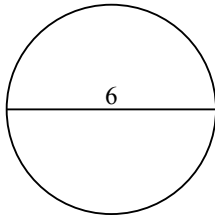
452,4	0,8	153,9	7,1	227
28,3	78,5	706,9	176,7	

Câu trả lời

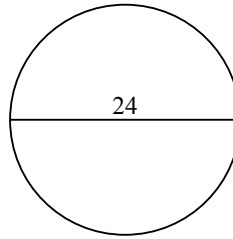
1)



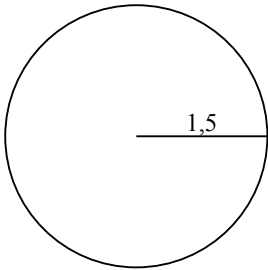
2)



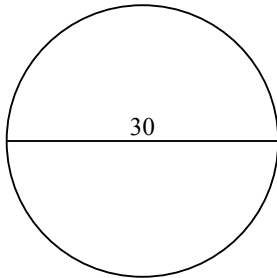
3)



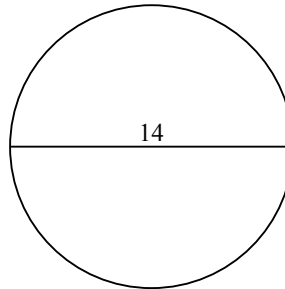
4)



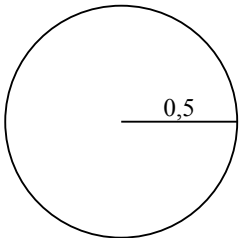
5)



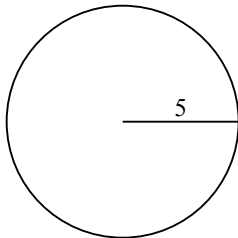
6)



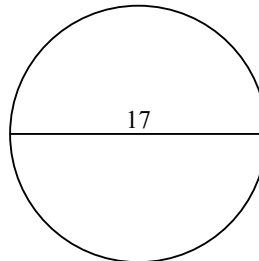
7)



8)



9)

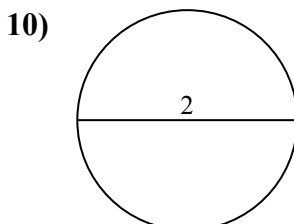
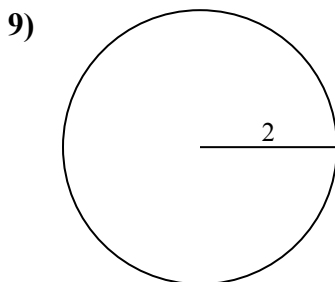
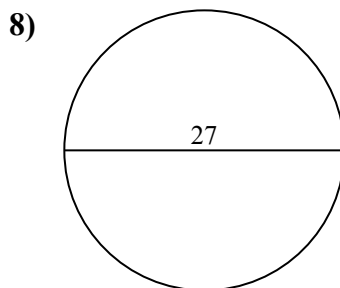
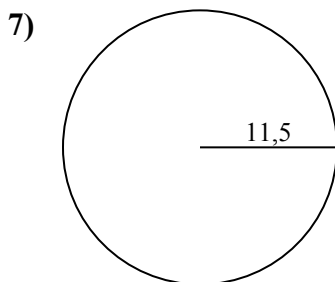
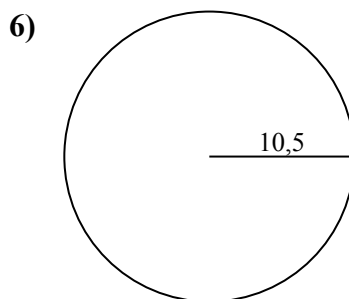
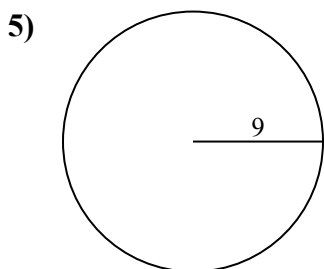
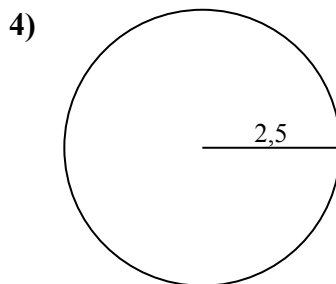
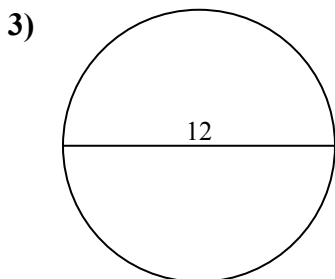
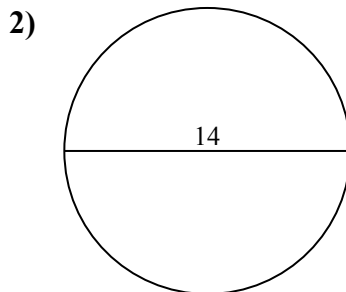
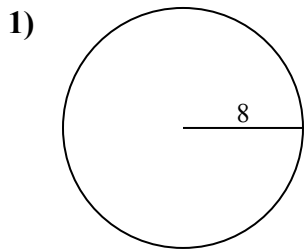


1. _____
2. _____
3. _____
4. _____
5. _____
6. _____
7. _____
8. _____
9. _____



Tìm diện tích của mỗi hình tròn. Các hình tròn không đúng tỉ lệ.

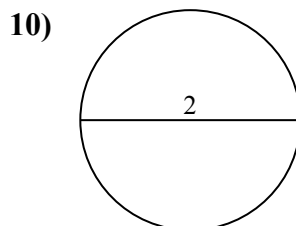
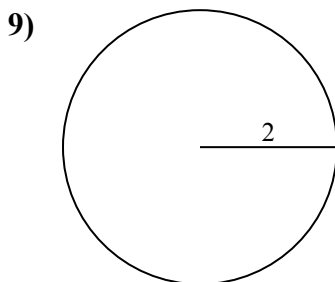
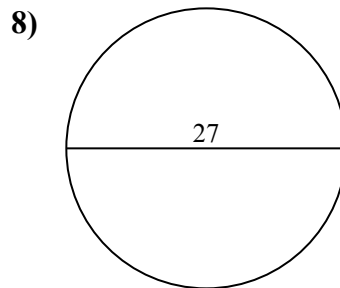
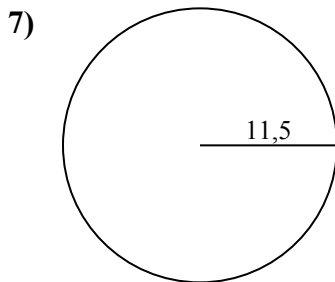
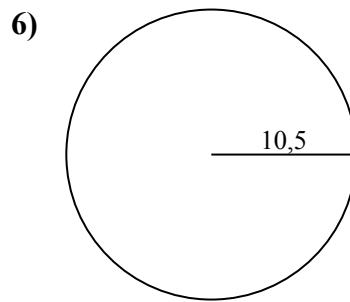
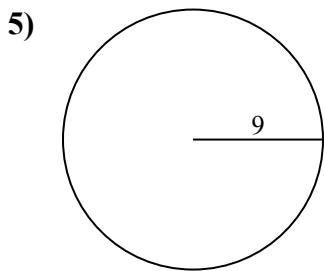
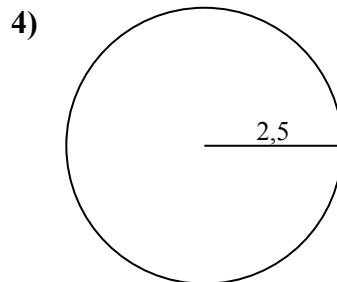
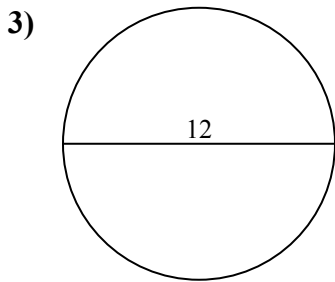
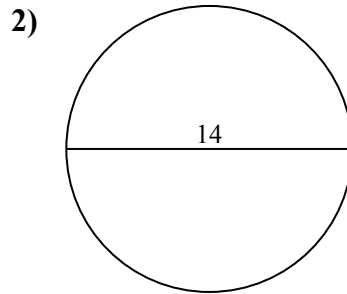
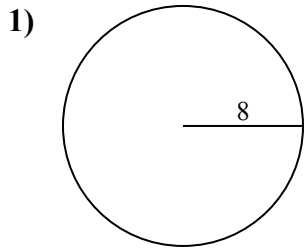
Câu trả lời



- 1. _____
- 2. _____
- 3. _____
- 4. _____
- 5. _____
- 6. _____
- 7. _____
- 8. _____
- 9. _____
- 10. _____



Tìm diện tích của mỗi hình tròn. Các hình tròn không đúng tỉ lệ.

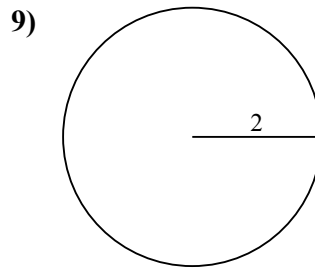
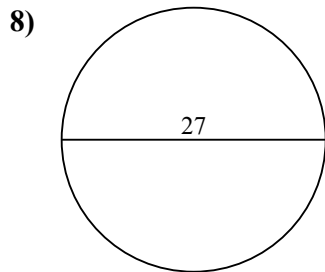
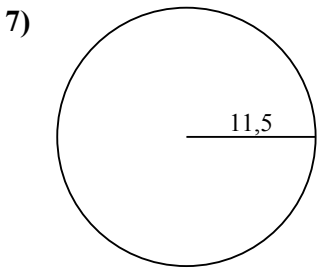
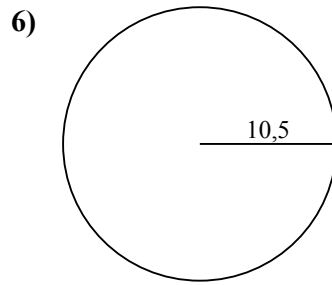
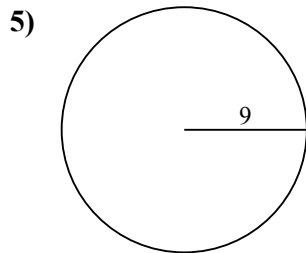
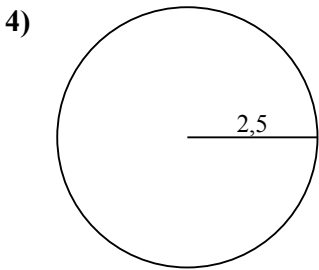
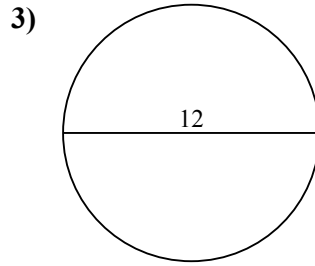
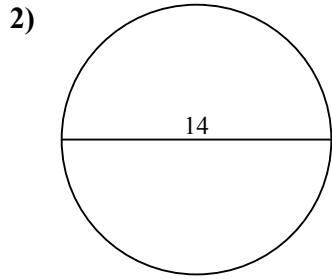
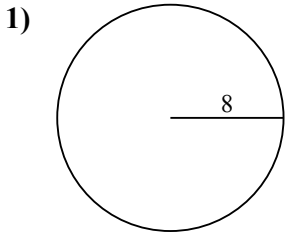
**Câu trả lời**1. 201,12. 153,93. 113,14. 19,65. 254,56. 346,47. 415,58. 572,69. 12,610. 3,1



Tìm diện tích của mỗi hình tròn. Các hình tròn không đúng tỉ lệ.

572,6	113,1	415,5	12,6	346,4
201,1	153,9	254,5	19,6	

Câu trả lời

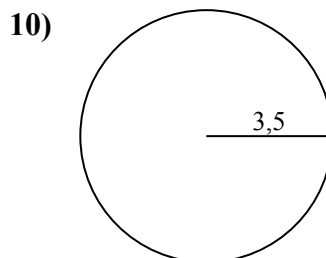
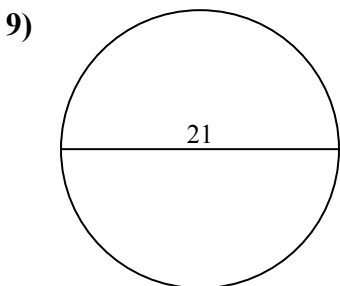
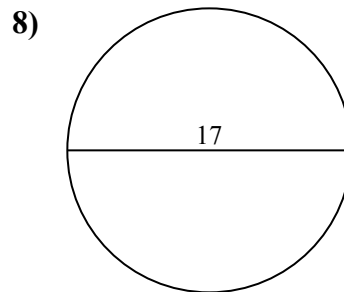
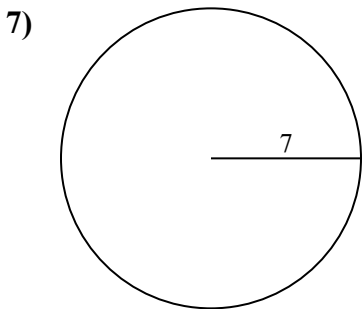
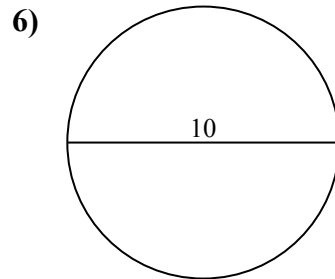
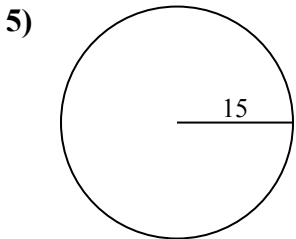
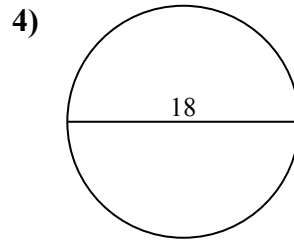
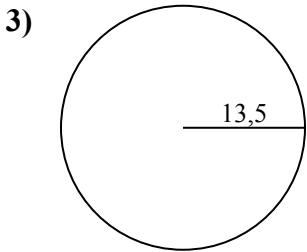
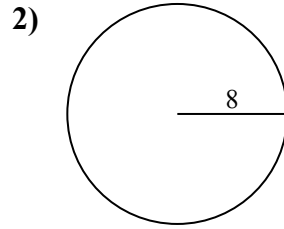
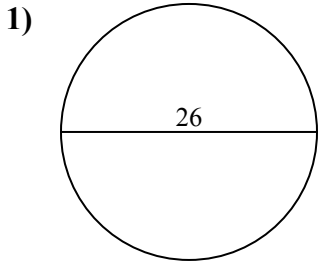


1. _____
2. _____
3. _____
4. _____
5. _____
6. _____
7. _____
8. _____
9. _____



Tìm diện tích của mỗi hình tròn. Các hình tròn không đúng tỉ lệ.

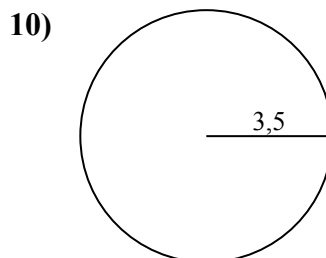
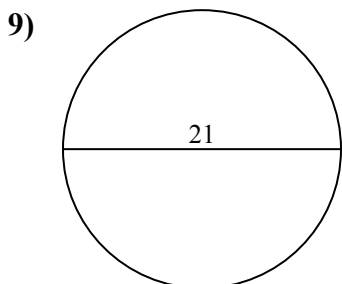
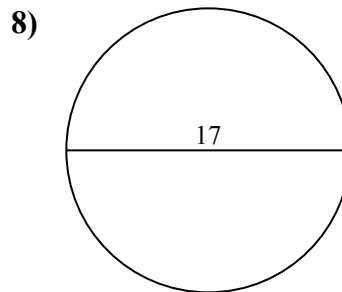
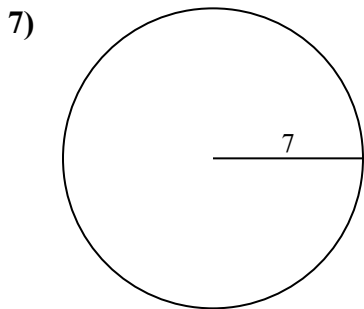
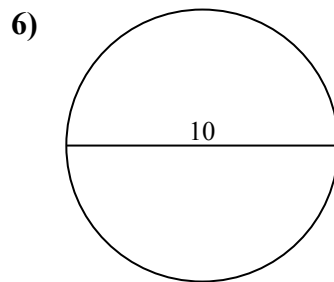
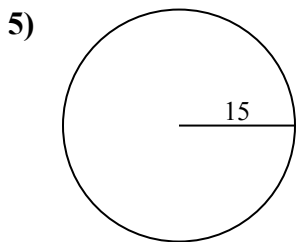
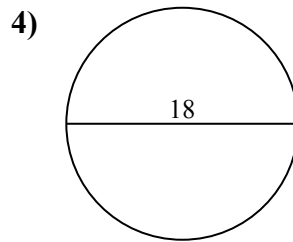
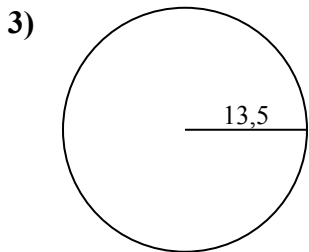
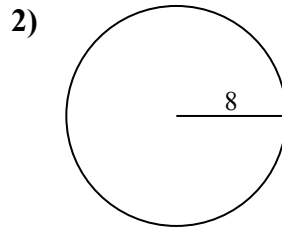
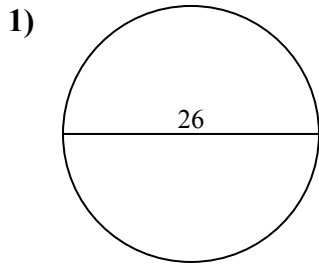
Câu trả lời



- 1. _____
- 2. _____
- 3. _____
- 4. _____
- 5. _____
- 6. _____
- 7. _____
- 8. _____
- 9. _____
- 10. _____



Tìm diện tích của mỗi hình tròn. Các hình tròn không đúng tỉ lệ.

**Câu trả lời**1. 530,92. 201,13. 572,64. 254,55. 706,96. 78,57. 153,98. 2279. 346,410. 38,5



Tìm diện tích của mỗi hình tròn. Các hình tròn không đúng tỉ lệ.

572,6	78,5	227	346,4	530,9
153,9	201,1	706,9	254,5	

Câu trả lời

1. _____
2. _____
3. _____
4. _____
5. _____
6. _____
7. _____
8. _____
9. _____

