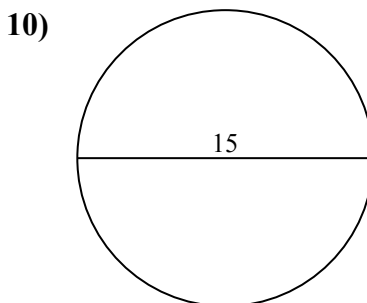
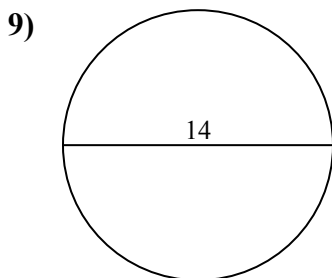
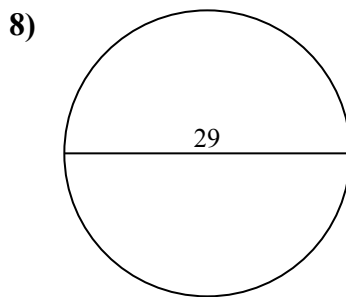
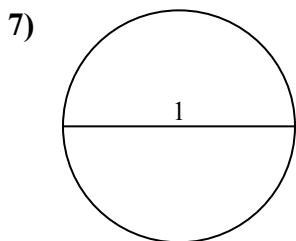
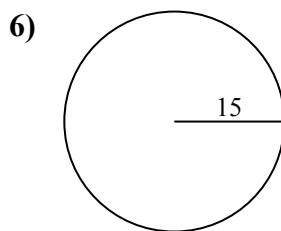
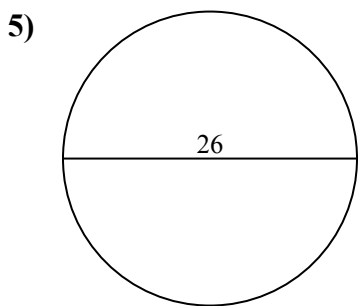
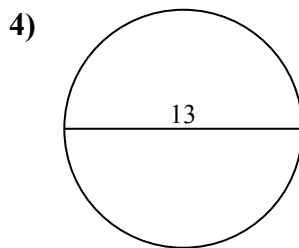
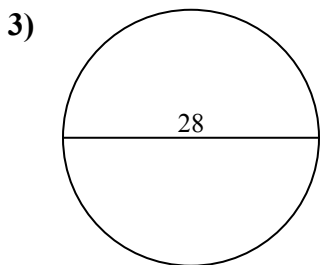
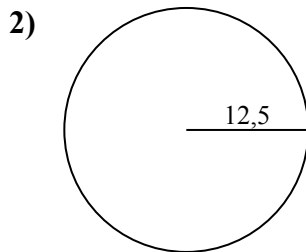
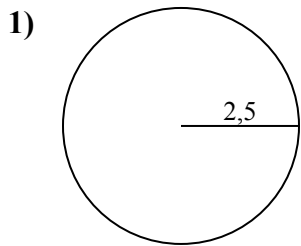




Tìm diện tích của mỗi hình tròn. Các hình tròn không đúng tỉ lệ.

Câu trả lời

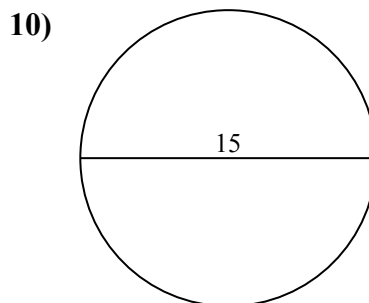
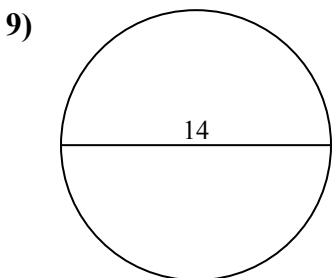
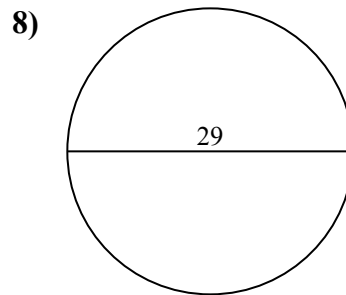
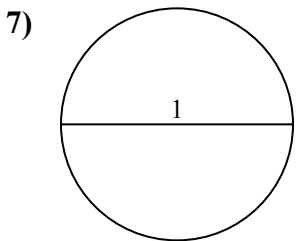
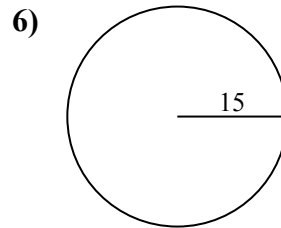
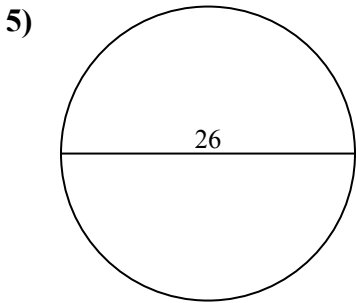
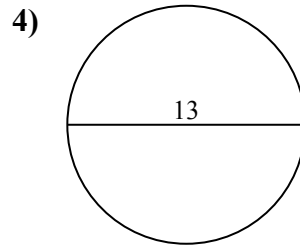
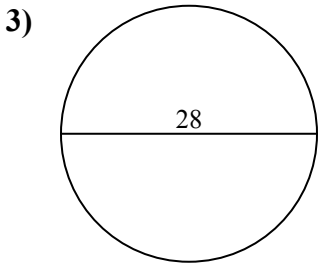
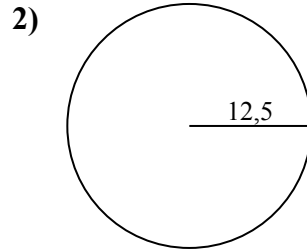
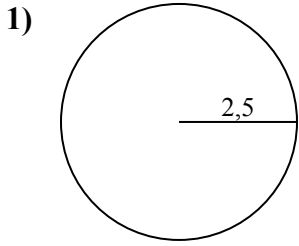


- 1. _____
- 2. _____
- 3. _____
- 4. _____
- 5. _____
- 6. _____
- 7. _____
- 8. _____
- 9. _____
- 10. _____



Tìm diện tích của mỗi hình tròn. Các hình tròn không đúng tỉ lệ.

Câu trả lời

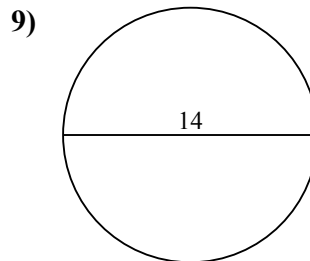
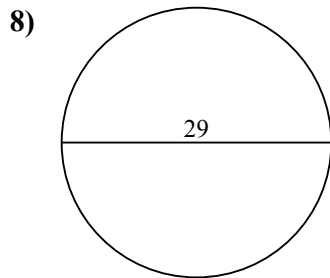
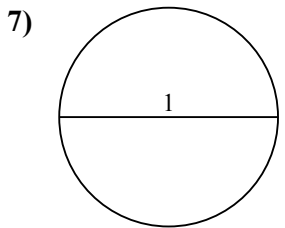
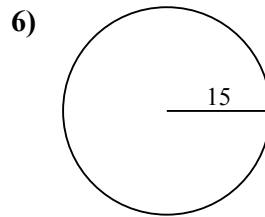
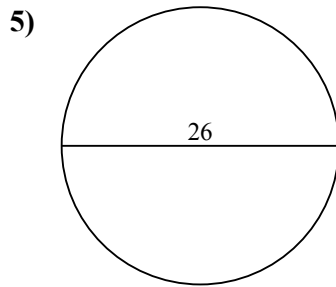
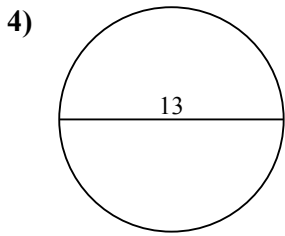
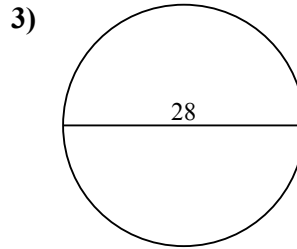
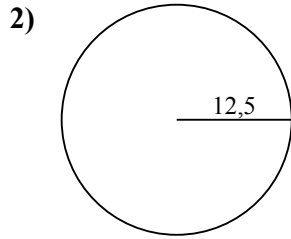
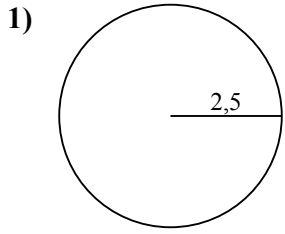


1. 19,6
2. 490,9
3. 615,8
4. 132,7
5. 530,9
6. 706,9
7. 0,8
8. 660,5
9. 153,9
10. 176,7



Tìm diện tích của mỗi hình tròn. Các hình tròn không đúng tỉ lệ.

490,9	615,8	706,9	132,7	153,9
19,6	530,9	0,8	660,5	



Câu trả lời

1. _____
2. _____
3. _____
4. _____
5. _____
6. _____
7. _____
8. _____
9. _____