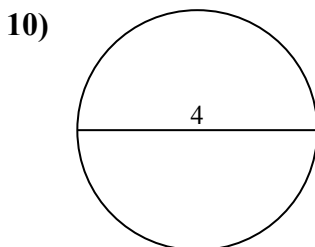
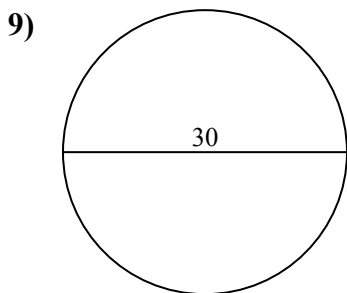
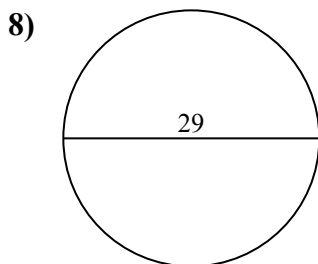
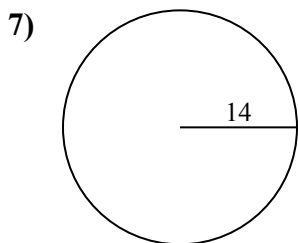
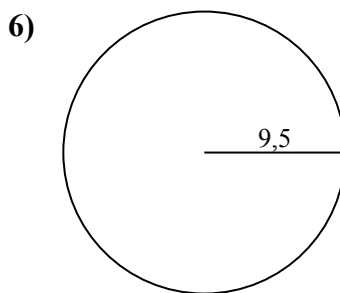
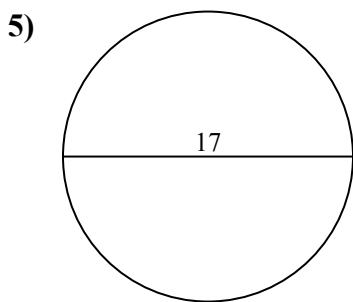
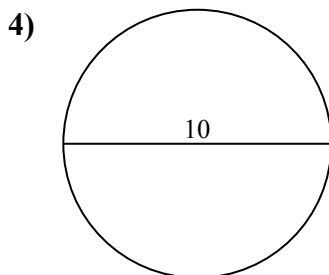
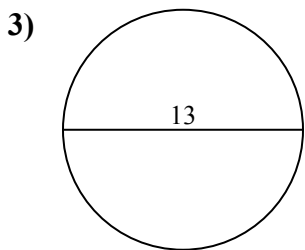
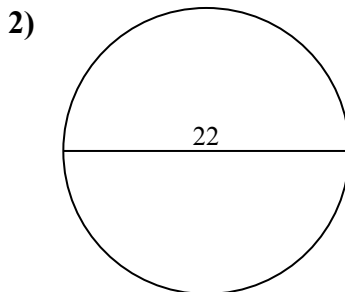
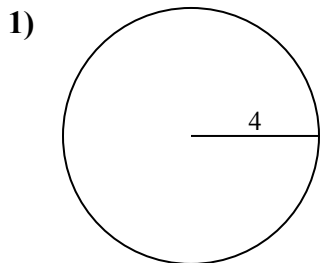




Tìm diện tích của mỗi hình tròn. Các hình tròn không đúng tỉ lệ.

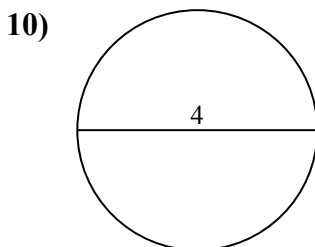
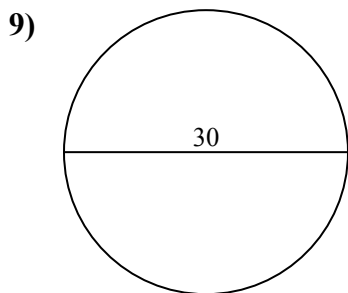
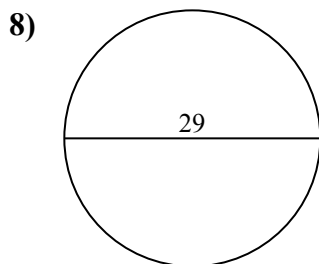
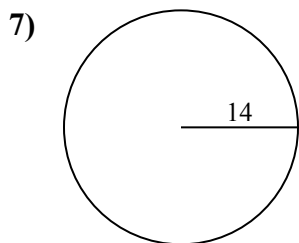
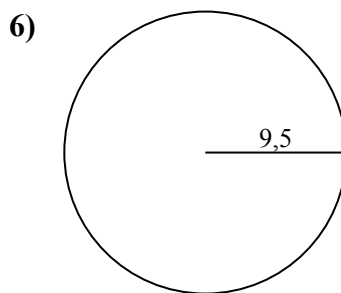
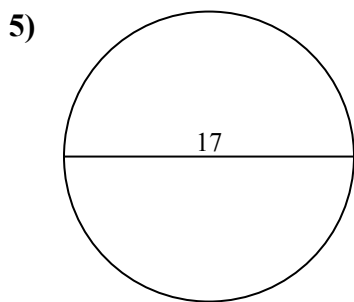
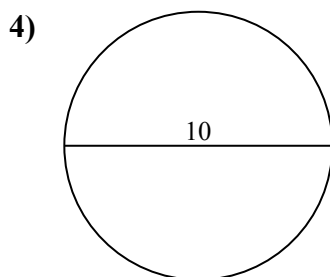
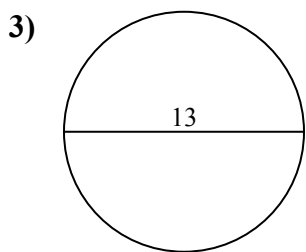
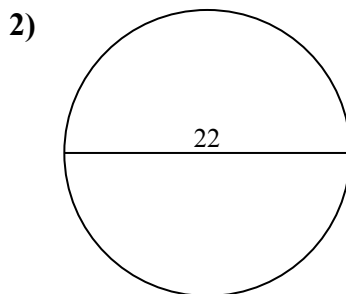
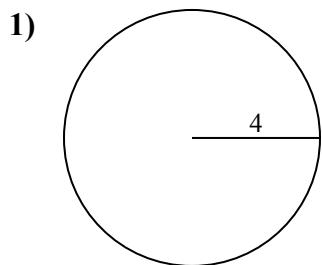
Câu trả lời



- 1. _____
- 2. _____
- 3. _____
- 4. _____
- 5. _____
- 6. _____
- 7. _____
- 8. _____
- 9. _____
- 10. _____



Tìm diện tích của mỗi hình tròn. Các hình tròn không đúng tỉ lệ.

**Câu trả lời**1. 50,32. 380,13. 132,74. 78,55. 2276. 283,57. 615,88. 660,59. 706,910. 12,6



Tìm diện tích của mỗi hình tròn. Các hình tròn không đúng tỉ lệ.

78,5	227	660,5	615,8	380,1
283,5	132,7	50,3	706,9	

Câu trả lời

1. _____
2. _____
3. _____
4. _____
5. _____
6. _____
7. _____
8. _____
9. _____

