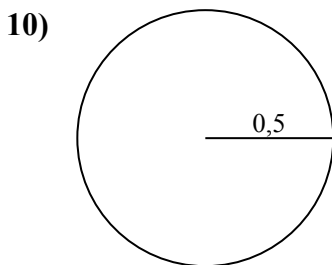
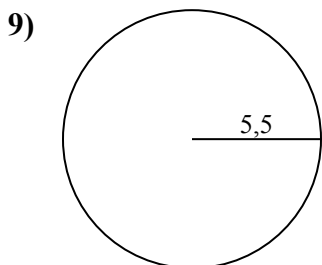
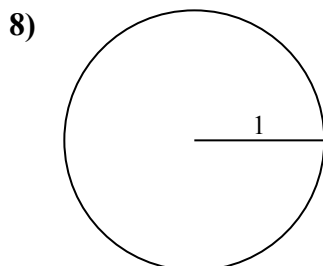
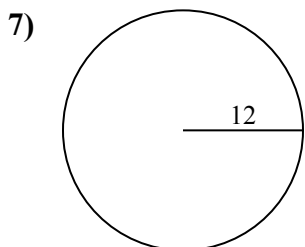
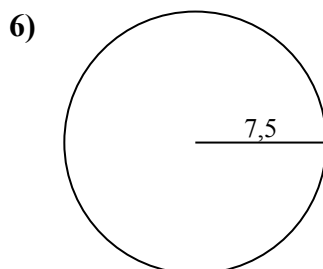
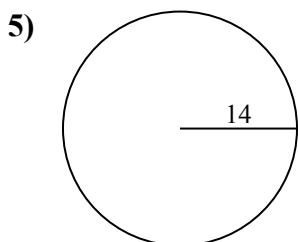
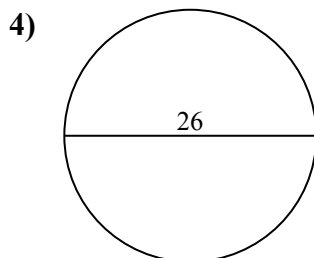
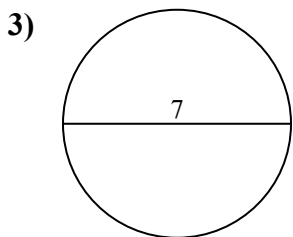
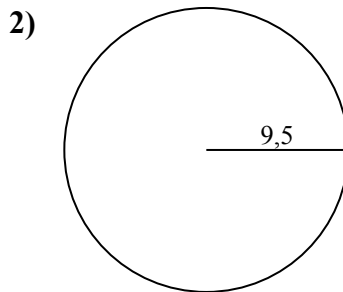
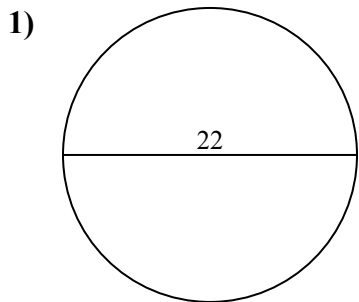




Tìm diện tích của mỗi hình tròn. Các hình tròn không đúng tỉ lệ.

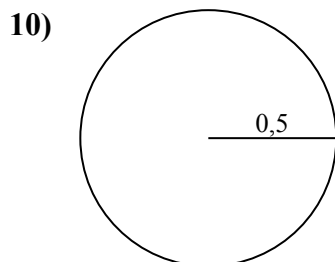
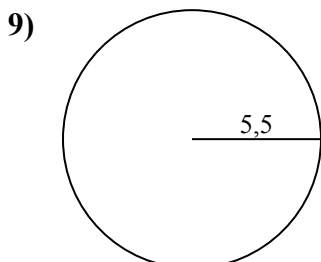
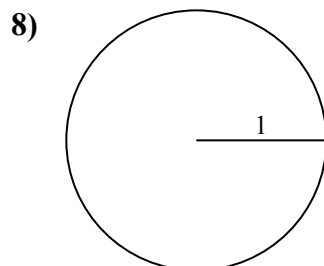
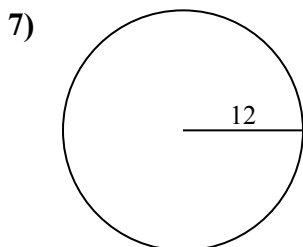
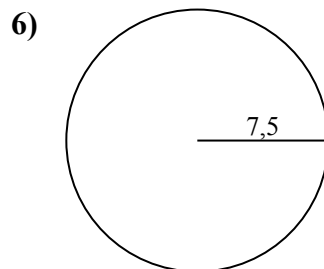
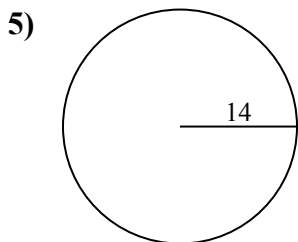
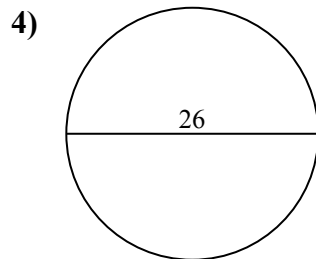
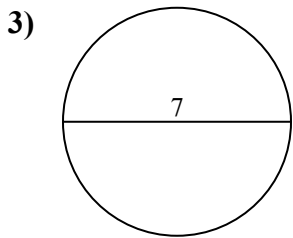
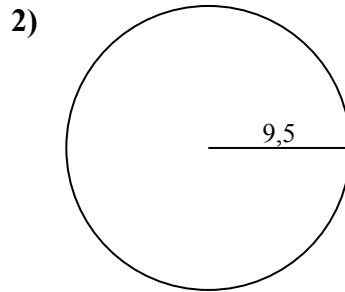
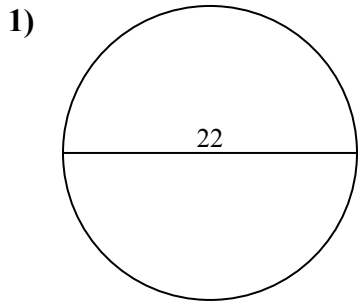
Câu trả lời



- 1. _____
- 2. _____
- 3. _____
- 4. _____
- 5. _____
- 6. _____
- 7. _____
- 8. _____
- 9. _____
- 10. _____



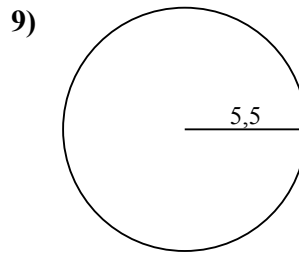
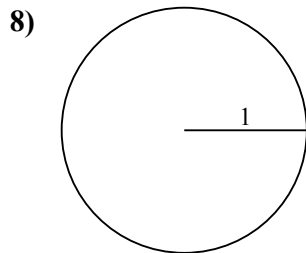
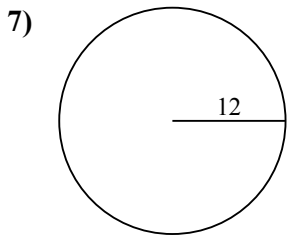
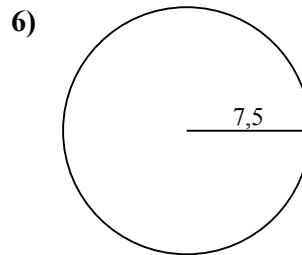
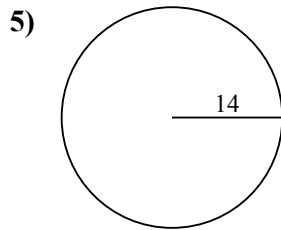
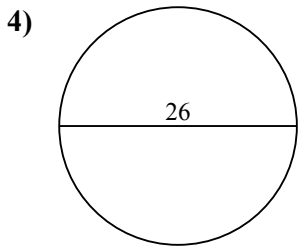
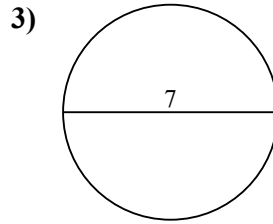
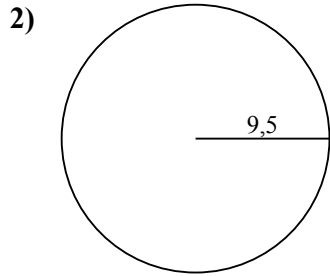
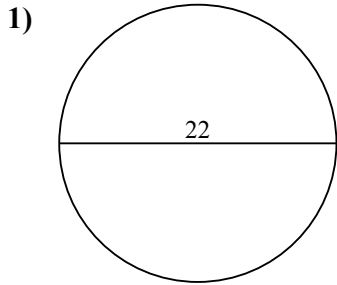
Tìm diện tích của mỗi hình tròn. Các hình tròn không đúng tỉ lệ.

Câu trả lời1. 380,12. 283,53. 38,54. 530,95. 615,86. 176,77. 452,48. 3,19. 9510. 0,8



Tìm diện tích của mỗi hình tròn. Các hình tròn không đúng tỉ lệ.

176,7	38,5	530,9	283,5	95
615,8	3,1	452,4	380,1	



Câu trả lời

1. _____
2. _____
3. _____
4. _____
5. _____
6. _____
7. _____
8. _____
9. _____