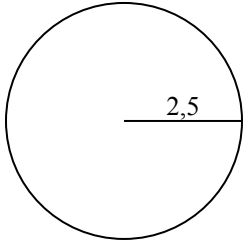


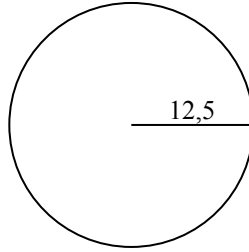


Tìm diện tích và chu vi của mỗi hình tròn. Các hình tròn không đúng tỉ lệ.

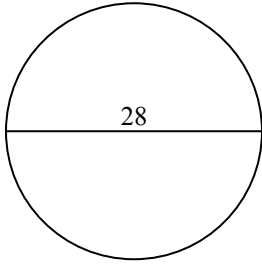
1)



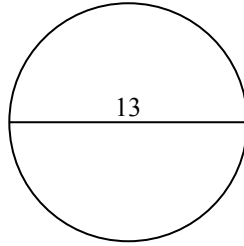
2)



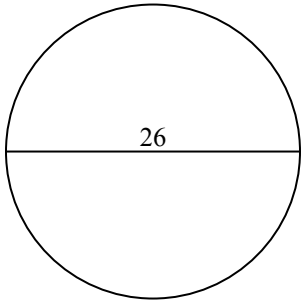
3)



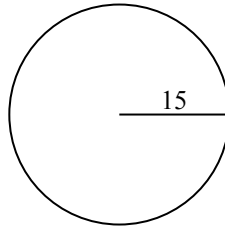
4)



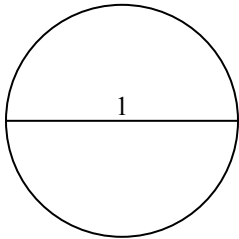
5)



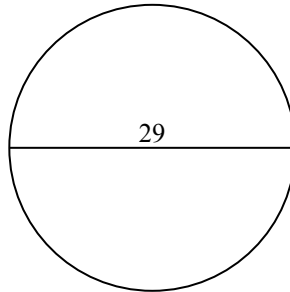
6)



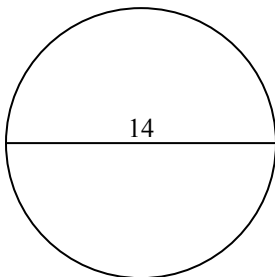
7)



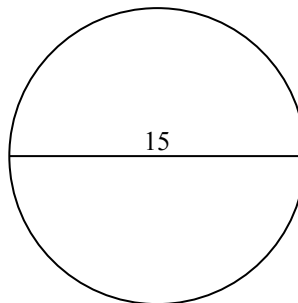
8)



9)



10)



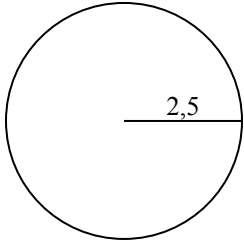
**Câu trả lời**

- 1. \_\_\_\_\_
- 2. \_\_\_\_\_
- 3. \_\_\_\_\_
- 4. \_\_\_\_\_
- 5. \_\_\_\_\_
- 6. \_\_\_\_\_
- 7. \_\_\_\_\_
- 8. \_\_\_\_\_
- 9. \_\_\_\_\_
- 10. \_\_\_\_\_

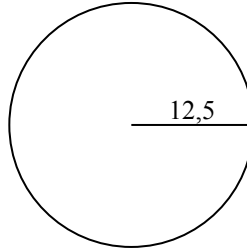


Tìm diện tích và chu vi của mỗi hình tròn. Các hình tròn không đúng tỉ lệ.

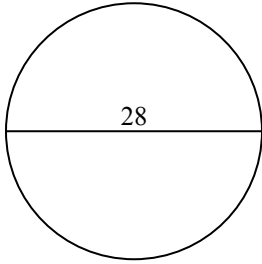
1)



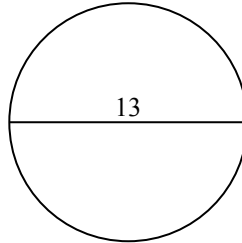
2)



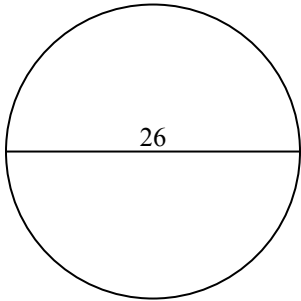
3)



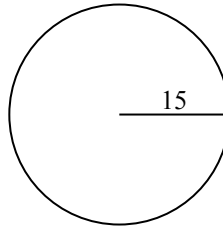
4)



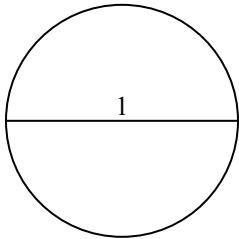
5)



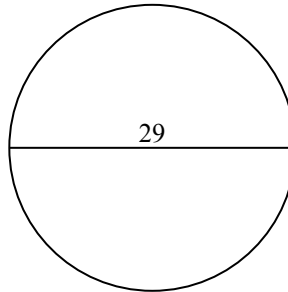
6)



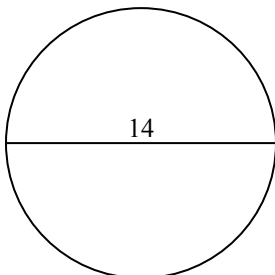
7)



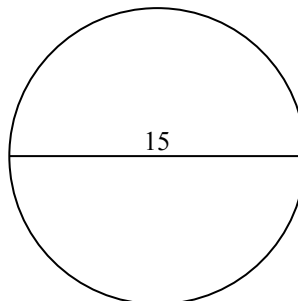
8)



9)



10)



**Câu trả lời**

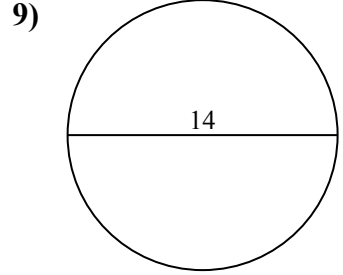
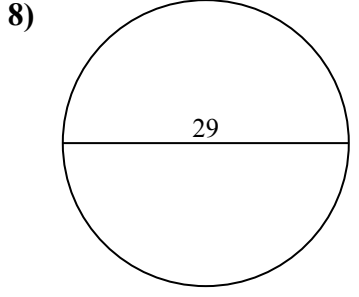
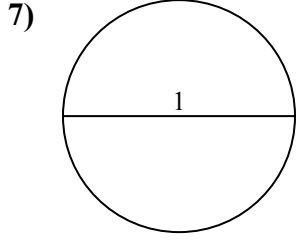
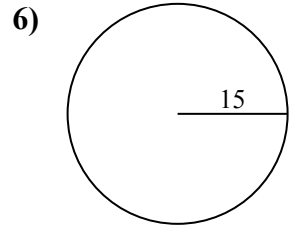
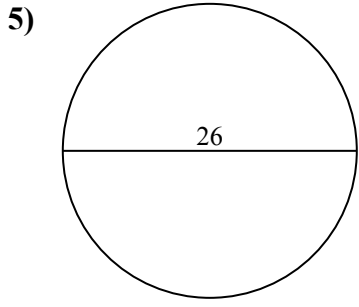
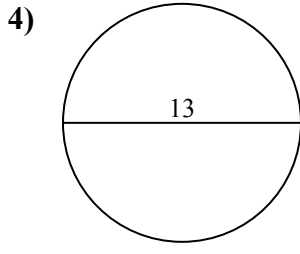
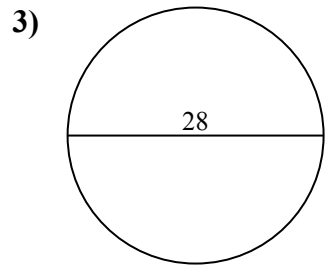
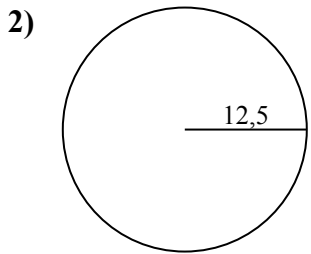
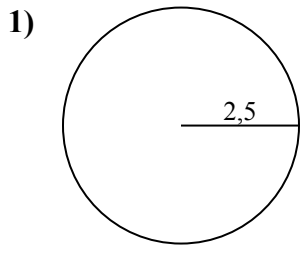
1.	<u>19,6</u>	<u>15,7</u>
2.	<u>490,9</u>	<u>78,5</u>
3.	<u>615,8</u>	<u>88</u>
4.	<u>132,7</u>	<u>40,8</u>
5.	<u>530,9</u>	<u>81,7</u>
6.	<u>706,9</u>	<u>94,2</u>
7.	<u>0,8</u>	<u>3,1</u>
8.	<u>660,5</u>	<u>91,1</u>
9.	<u>153,9</u>	<u>44</u>
10.	<u>176,7</u>	<u>47,1</u>



Tìm diện tích và chu vi của mỗi hình tròn. Các hình tròn không đúng tỉ lệ.

**Câu trả lời**

490,9	78,5	15,7	88	530,9
0,8	153,9	44	660,5	3,1
615,8	81,7	94,2	91,1	19,6
706,9	132,7	40,8		



1. \_\_\_\_\_
2. \_\_\_\_\_
3. \_\_\_\_\_
4. \_\_\_\_\_
5. \_\_\_\_\_
6. \_\_\_\_\_
7. \_\_\_\_\_
8. \_\_\_\_\_
9. \_\_\_\_\_