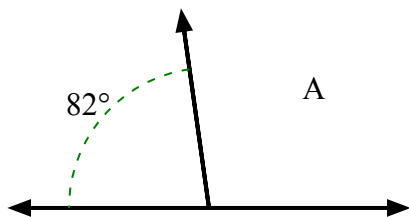




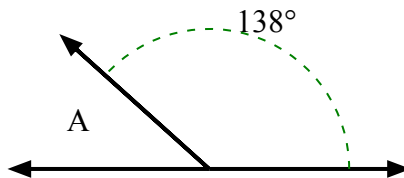
Tìm giá trị của 'A' trong tập hợp các góc phụ nhau.

Câu trả lời

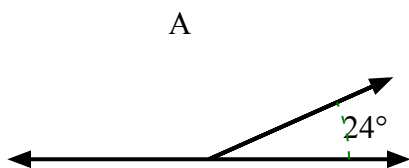
1)



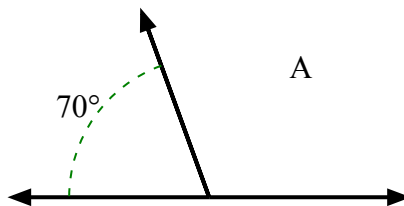
2)



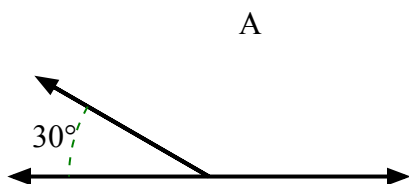
3)



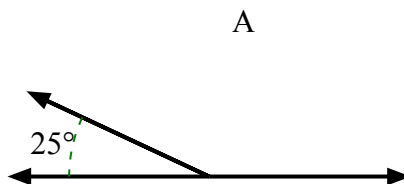
4)



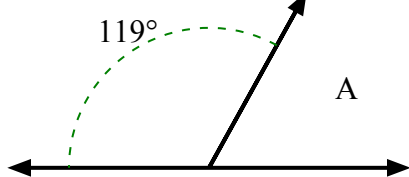
5)



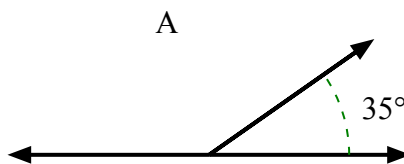
6)



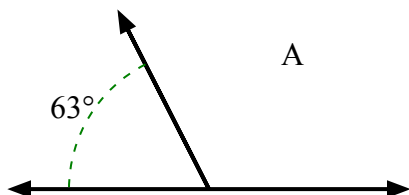
7)



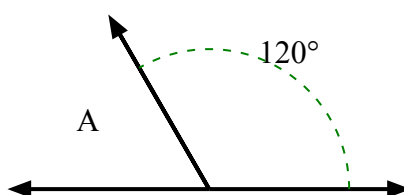
8)



9)



10)



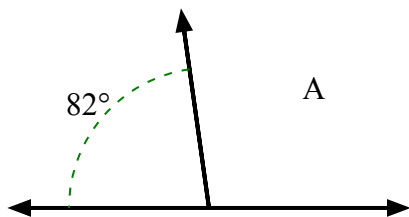
1. _____
2. _____
3. _____
4. _____
5. _____
6. _____
7. _____
8. _____
9. _____
10. _____



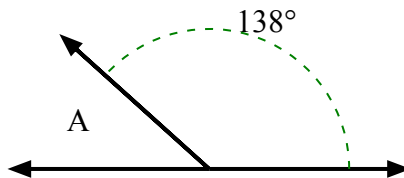
Tìm giá trị của 'A' trong tập hợp các góc phụ nhau.

Câu trả lời

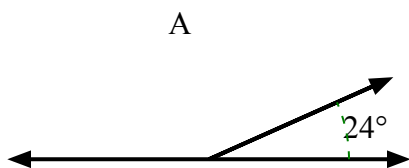
1)



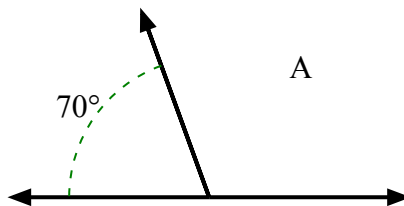
2)



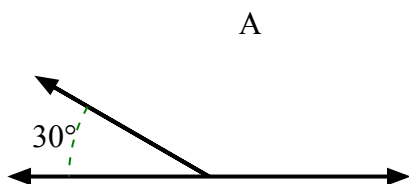
3)



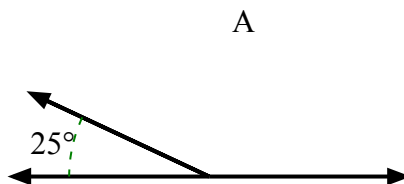
4)



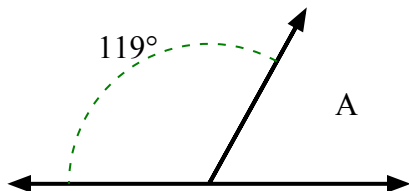
5)



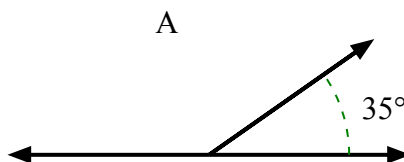
6)



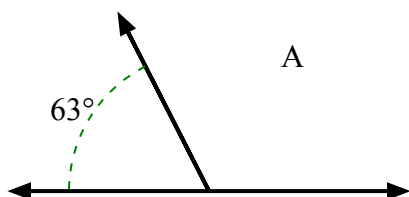
7)



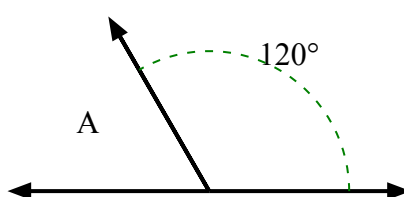
8)



9)



10)

1. **98°**2. **42°**3. **156°**4. **110°**5. **150°**6. **155°**7. **61°**8. **145°**9. **117°**10. **60°**