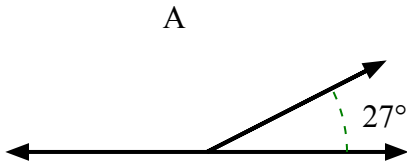




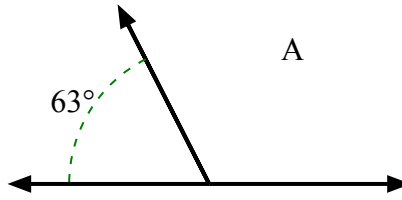
Tìm giá trị của 'A' trong tập hợp các góc phụ nhau.

**Câu trả lời**

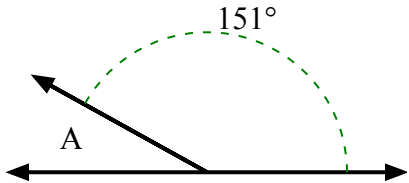
1)



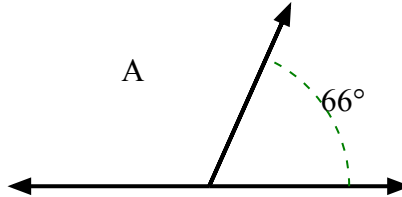
2)



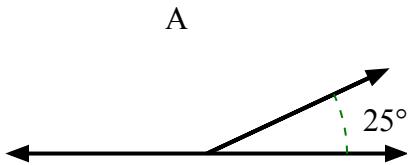
3)



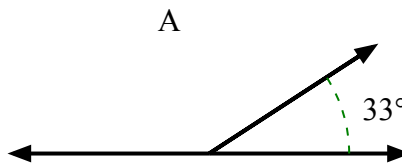
4)



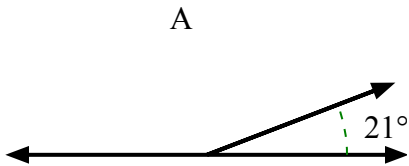
5)



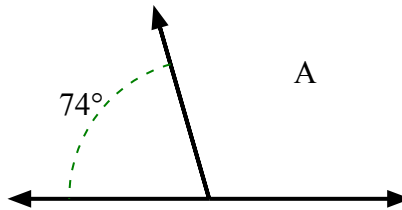
6)



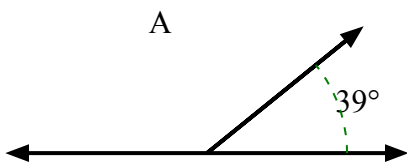
7)



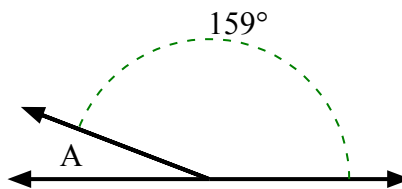
8)



9)



10)



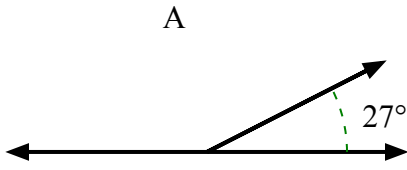
1. \_\_\_\_\_
2. \_\_\_\_\_
3. \_\_\_\_\_
4. \_\_\_\_\_
5. \_\_\_\_\_
6. \_\_\_\_\_
7. \_\_\_\_\_
8. \_\_\_\_\_
9. \_\_\_\_\_
10. \_\_\_\_\_



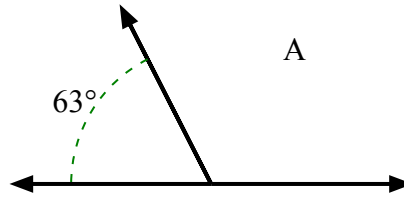
Tìm giá trị của 'A' trong tập hợp các góc phụ nhau.

**Câu trả lời**

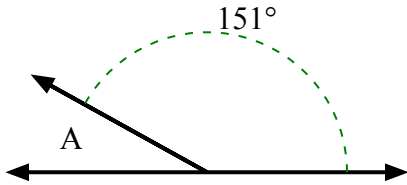
1)



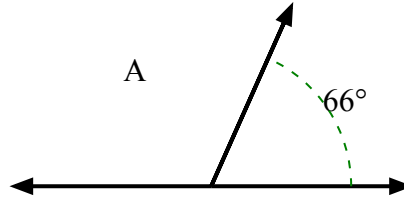
2)



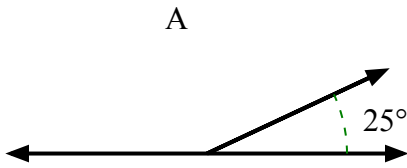
3)



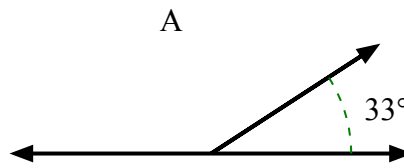
4)



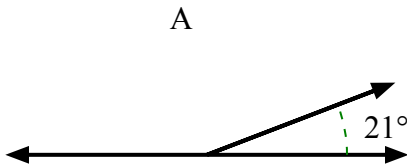
5)



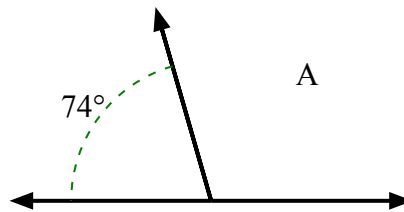
6)



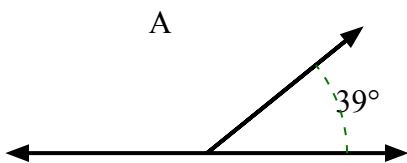
7)



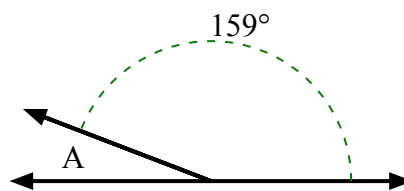
8)



9)



10)



1. **153°**

2. **117°**

3. **29°**

4. **114°**

5. **155°**

6. **147°**

7. **159°**

8. **106°**

9. **141°**

10. **21°**