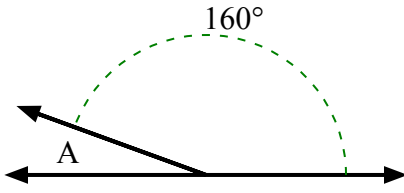




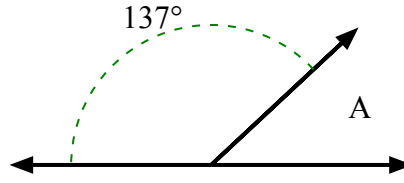
Tìm giá trị của 'A' trong tập hợp các góc phụ nhau.

Câu trả lời

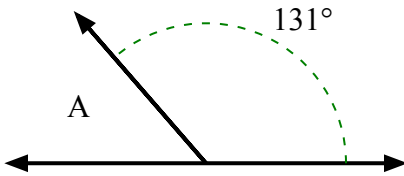
1)



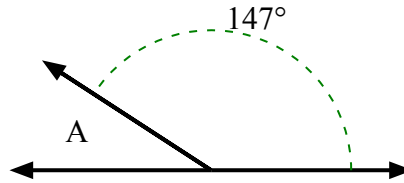
2)



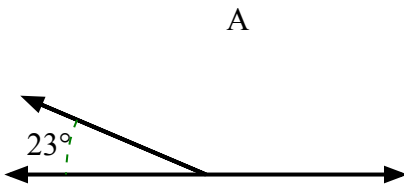
3)



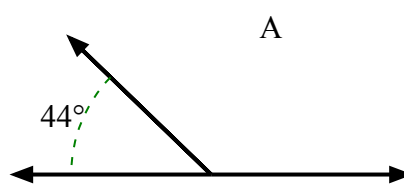
4)



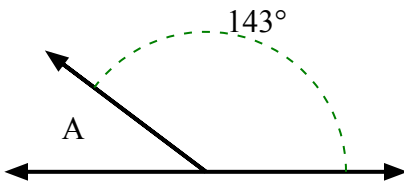
5)



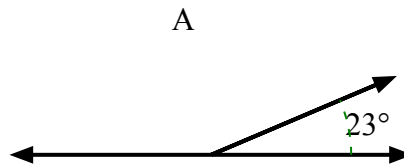
6)



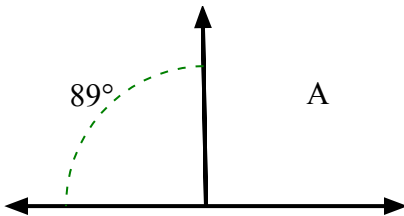
7)



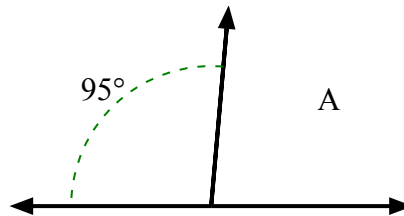
8)



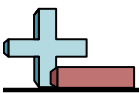
9)



10)



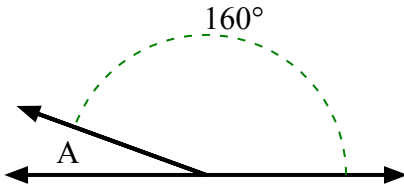
1. _____
2. _____
3. _____
4. _____
5. _____
6. _____
7. _____
8. _____
9. _____
10. _____



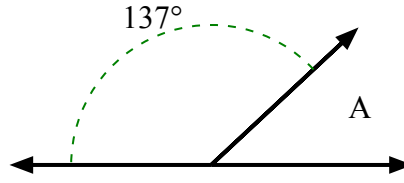
Tìm giá trị của 'A' trong tập hợp các góc phụ nhau.

Câu trả lời

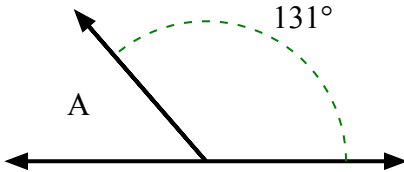
1)



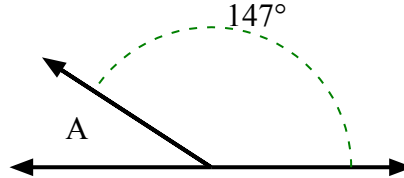
2)



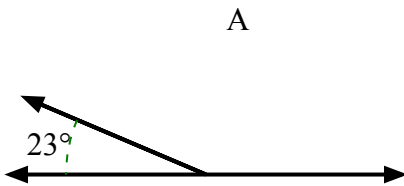
3)



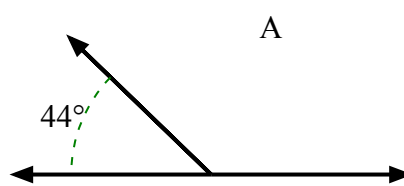
4)



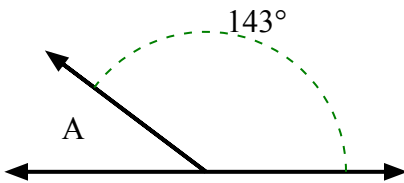
5)



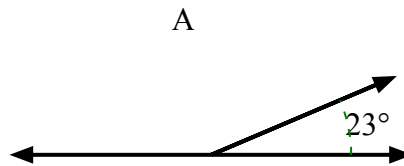
6)



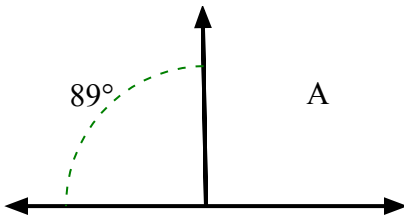
7)



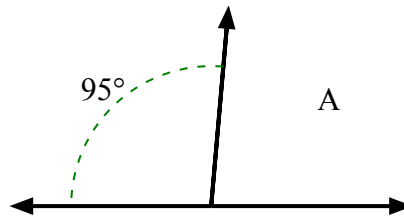
8)



9)



10)



1. **20°**

2. **43°**

3. **49°**

4. **33°**

5. **157°**

6. **136°**

7. **37°**

8. **157°**

9. **91°**

10. **85°**