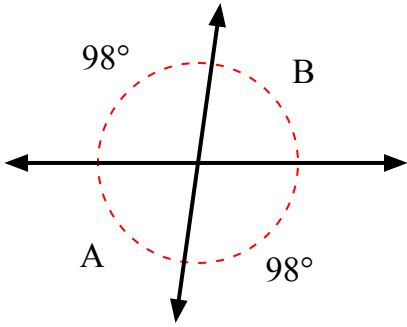


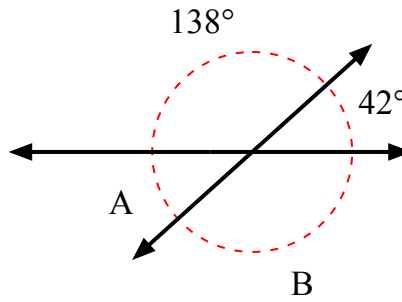


Tìm giá trị của góc 'A' và góc 'B'.

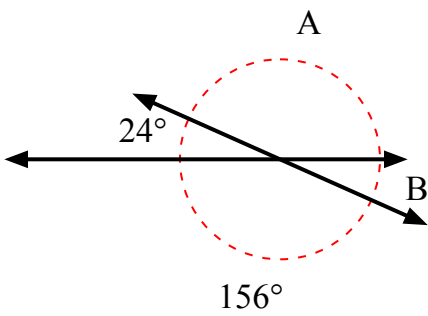
1)



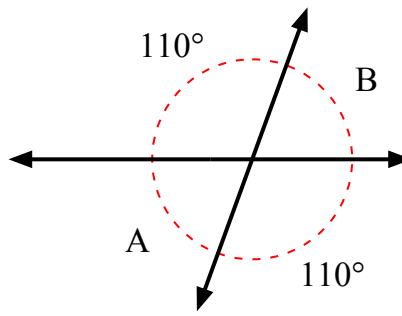
2)



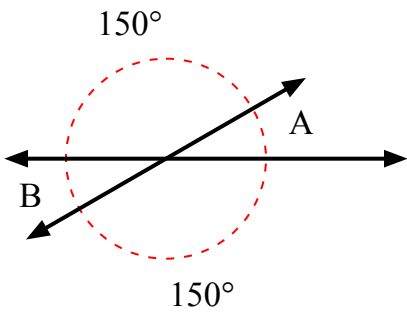
3)



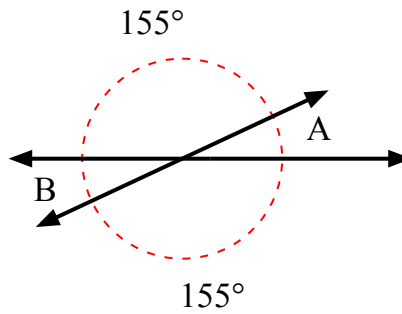
4)



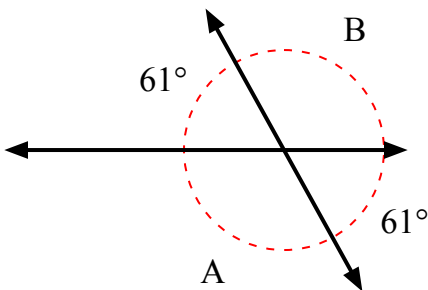
5)



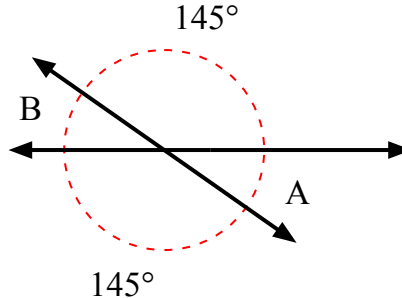
6)



7)



8)



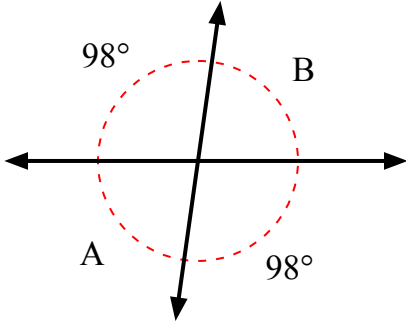
**Câu trả lời**

1. \_\_\_\_\_
2. \_\_\_\_\_
3. \_\_\_\_\_
4. \_\_\_\_\_
5. \_\_\_\_\_
6. \_\_\_\_\_
7. \_\_\_\_\_
8. \_\_\_\_\_

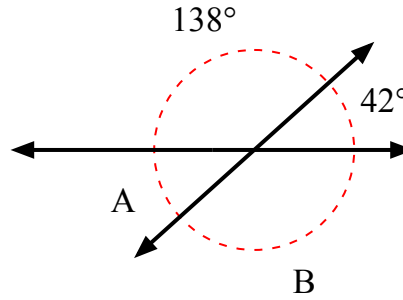


Tìm giá trị của góc 'A' và góc 'B'.

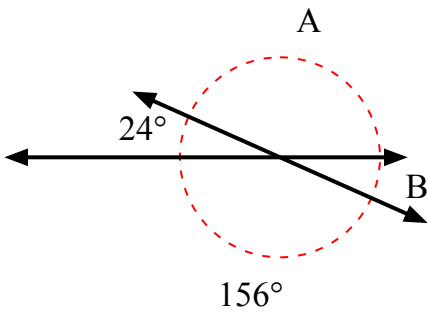
1)



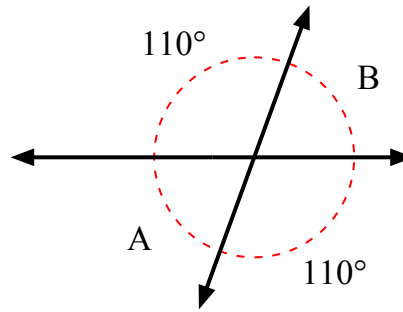
2)



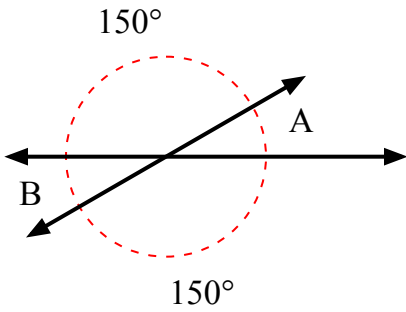
3)



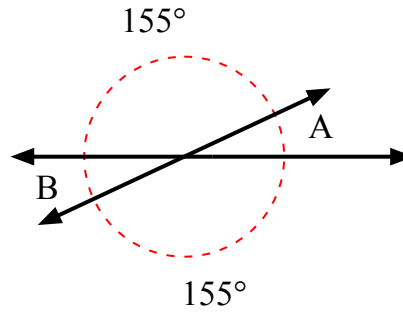
4)



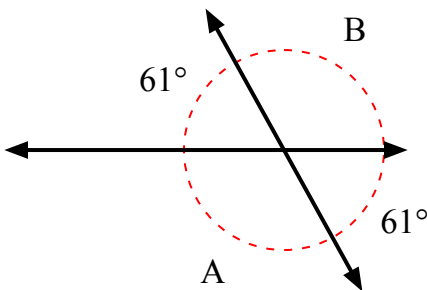
5)



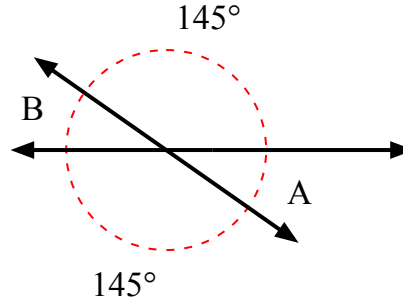
6)



7)



8)



**Câu trả lời**

1.	<b>82°</b>	<b>82°</b>
2.	<b>42°</b>	<b>138°</b>
3.	<b>156°</b>	<b>24°</b>
4.	<b>70°</b>	<b>70°</b>
5.	<b>30°</b>	<b>30°</b>
6.	<b>25°</b>	<b>25°</b>
7.	<b>119°</b>	<b>119°</b>
8.	<b>35°</b>	<b>35°</b>