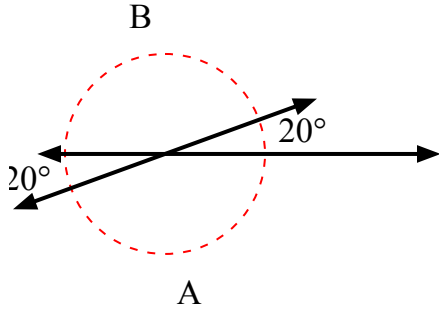


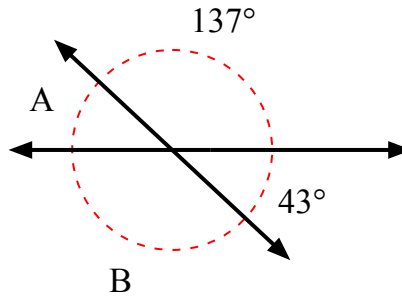


Tìm giá trị của góc 'A' và góc 'B'.

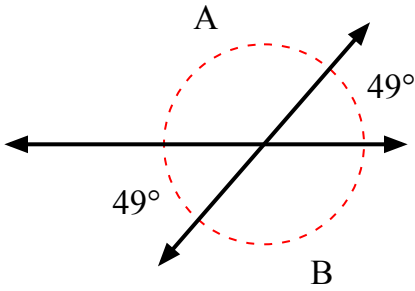
1)



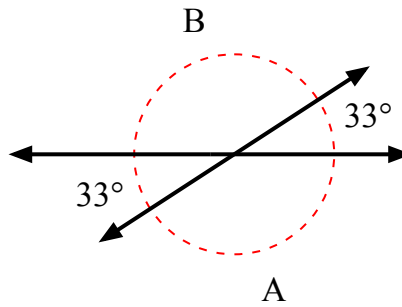
2)



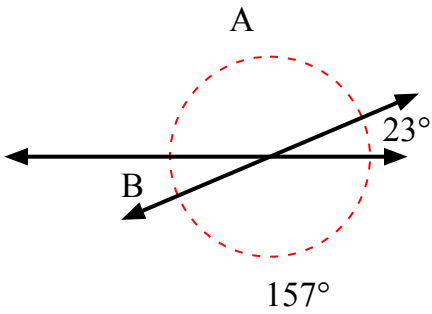
3)



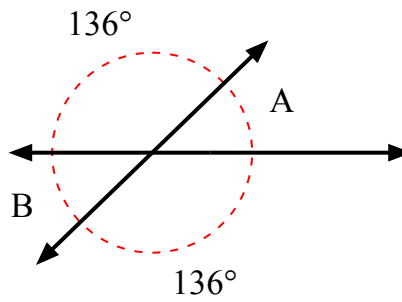
4)



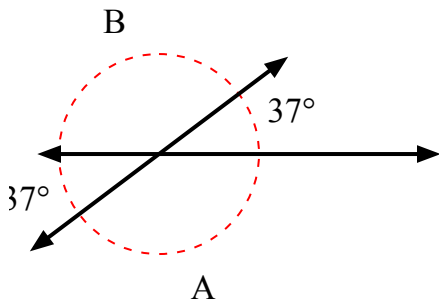
5)



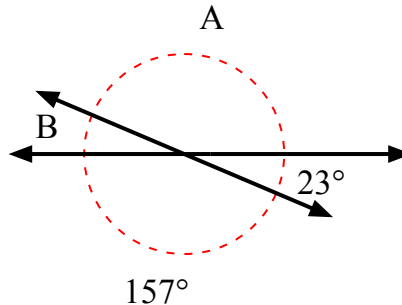
6)



7)



8)



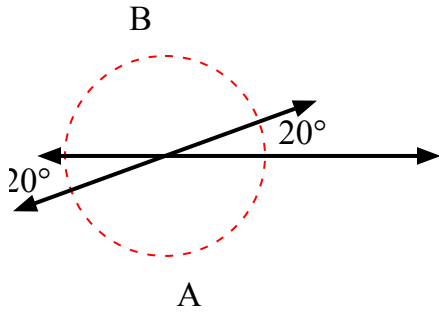
Câu trả lời

1. \_\_\_\_\_
2. \_\_\_\_\_
3. \_\_\_\_\_
4. \_\_\_\_\_
5. \_\_\_\_\_
6. \_\_\_\_\_
7. \_\_\_\_\_
8. \_\_\_\_\_

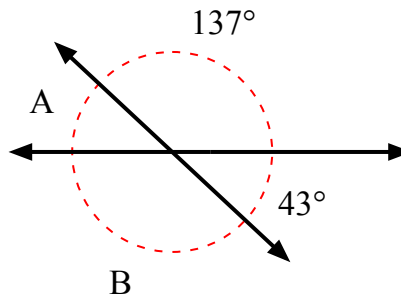


Tìm giá trị của góc 'A' và góc 'B'.

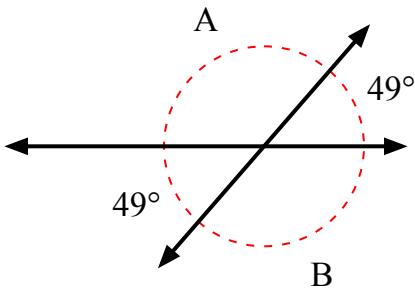
1)



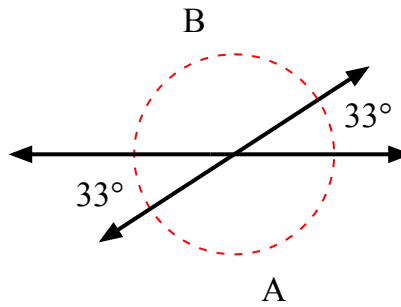
2)



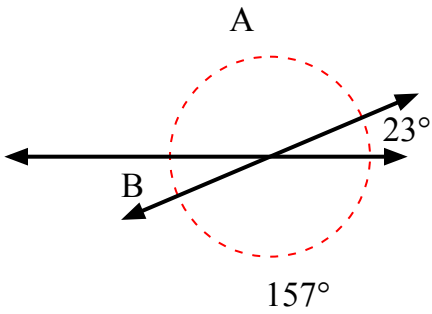
3)



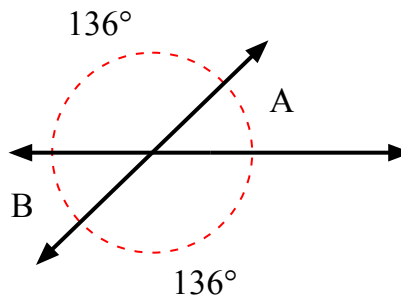
4)



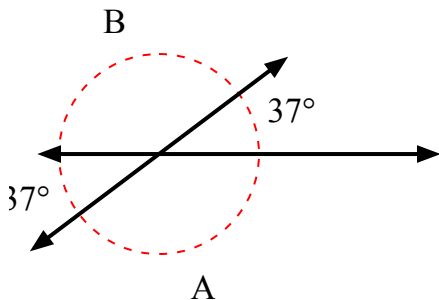
5)



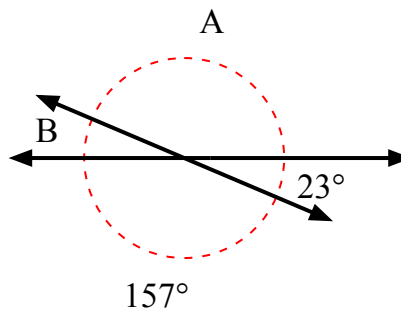
6)



7)



8)



**Câu trả lời**

1.	<b>160°</b>	<b>160°</b>
2.	<b>43°</b>	<b>137°</b>
3.	<b>131°</b>	<b>131°</b>
4.	<b>147°</b>	<b>147°</b>
5.	<b>157°</b>	<b>23°</b>
6.	<b>44°</b>	<b>44°</b>
7.	<b>143°</b>	<b>143°</b>
8.	<b>157°</b>	<b>23°</b>