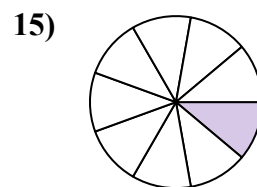
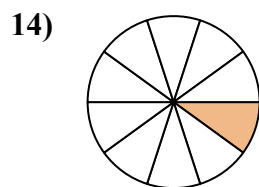
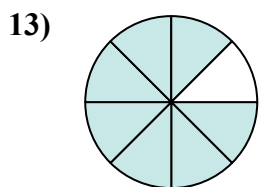
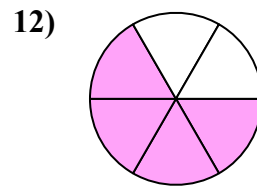
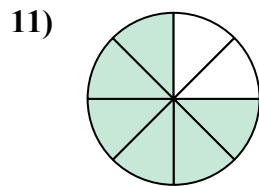
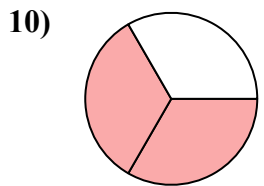
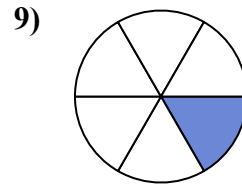
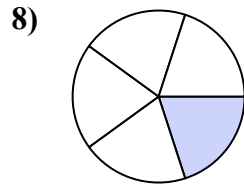
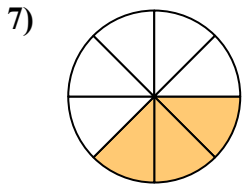
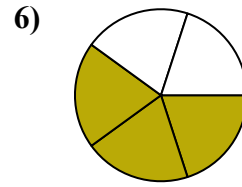
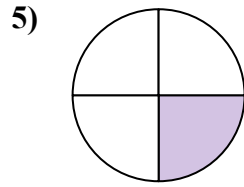
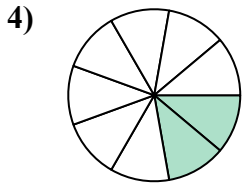
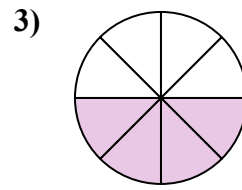
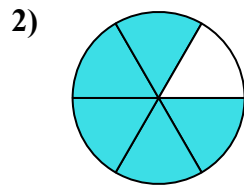
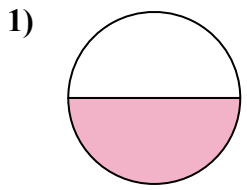




Tìm góc (tính bằng độ) của phần bóng mờ của hình tròn.

Câu trả lời

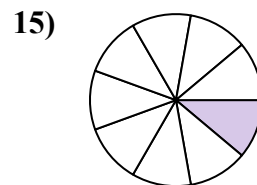
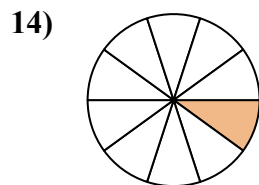
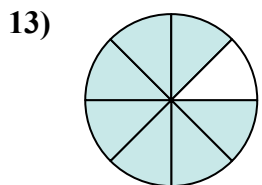
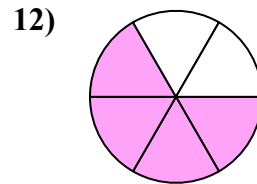
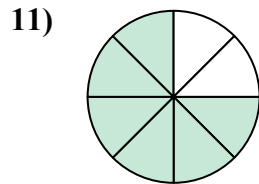
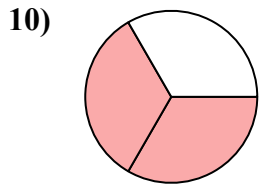
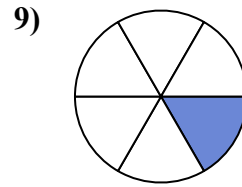
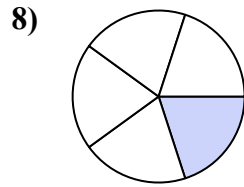
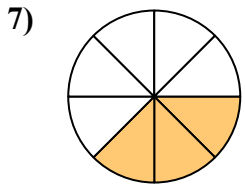
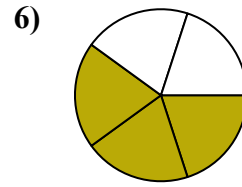
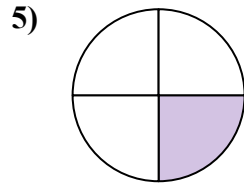
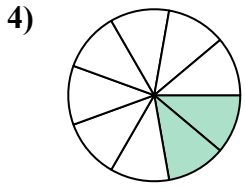
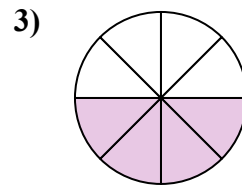
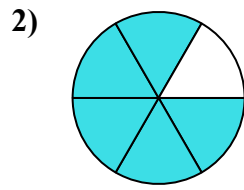
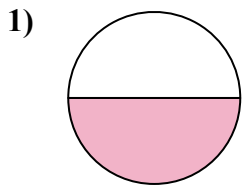


1. _____
2. _____
3. _____
4. _____
5. _____
6. _____
7. _____
8. _____
9. _____
10. _____
11. _____
12. _____
13. _____
14. _____
15. _____



Tìm góc (tính bằng độ) của phần bóng mờ của hình tròn.

Câu trả lời



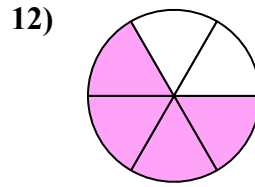
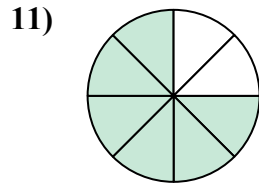
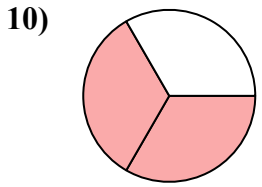
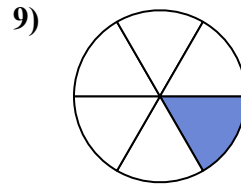
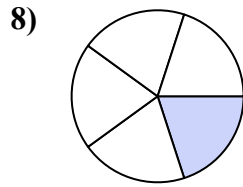
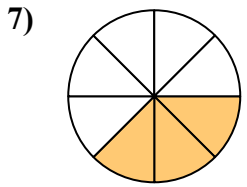
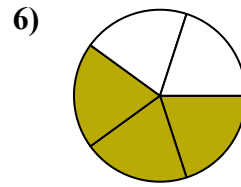
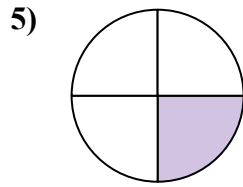
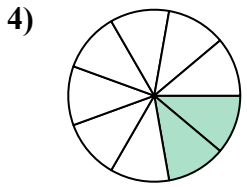
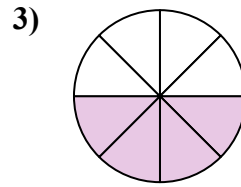
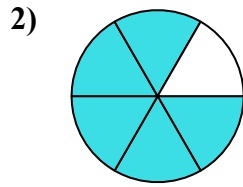
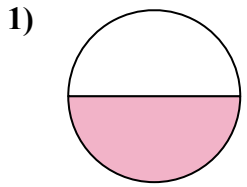
1. 180
2. 300
3. 180
4. 80
5. 90
6. 216
7. 135
8. 72
9. 60
10. 240
11. 270
12. 240
13. 315
14. 36
15. 40



Tìm góc (tính bằng độ) của phần bóng mờ của hình tròn.

135	72	80	60	90
216	270	240	180	180
240	300			

Câu trả lời

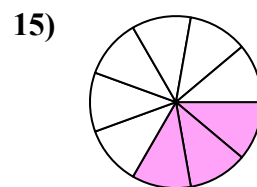
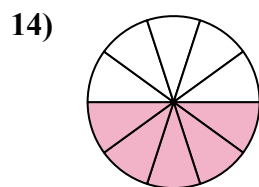
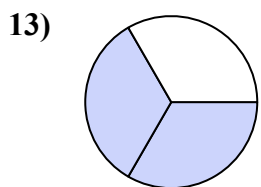
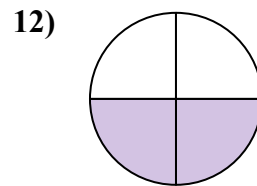
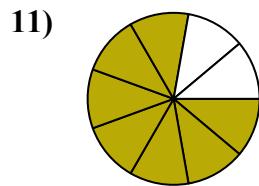
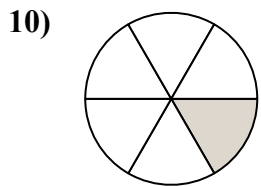
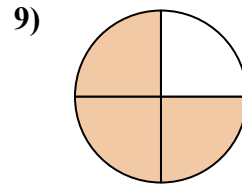
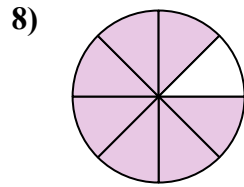
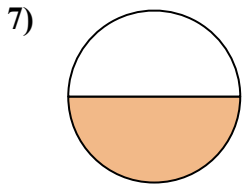
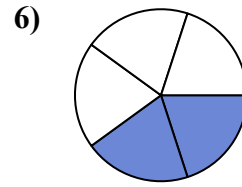
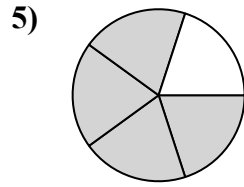
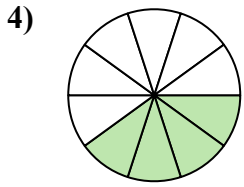
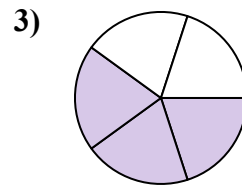
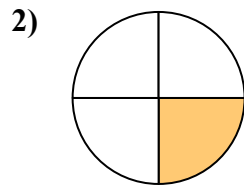
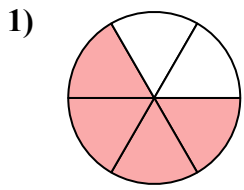


1. _____
2. _____
3. _____
4. _____
5. _____
6. _____
7. _____
8. _____
9. _____
10. _____
11. _____
12. _____



Tìm góc (tính bằng độ) của phần bóng mờ của hình tròn.

Câu trả lời

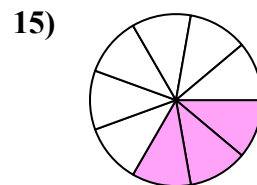
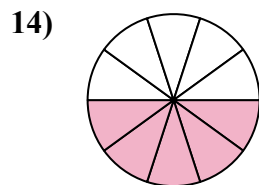
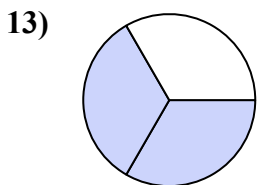
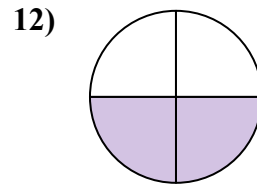
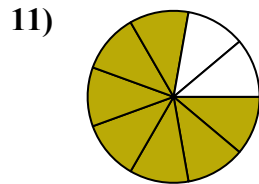
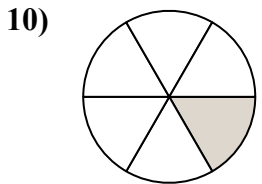
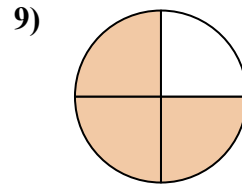
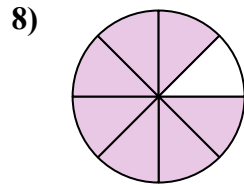
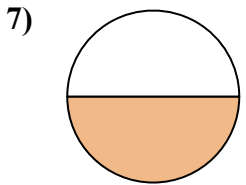
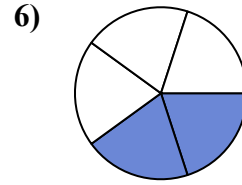
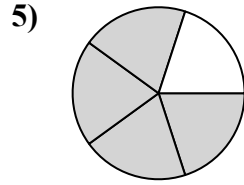
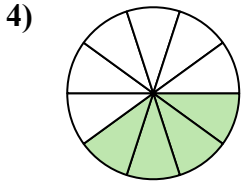
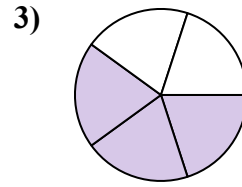
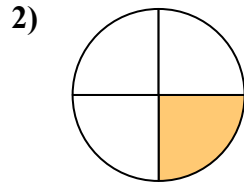
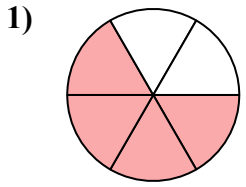


1. _____
2. _____
3. _____
4. _____
5. _____
6. _____
7. _____
8. _____
9. _____
10. _____
11. _____
12. _____
13. _____
14. _____
15. _____



Tìm góc (tính bằng độ) của phần bóng mờ của hình tròn.

Câu trả lời



1. 240

2. 90

3. 216

4. 144

5. 288

6. 144

7. 180

8. 315

9. 270

10. 60

11. 280

12. 180

13. 240

14. 180

15. 120

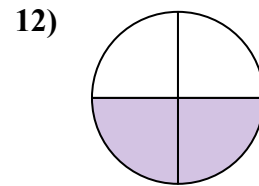
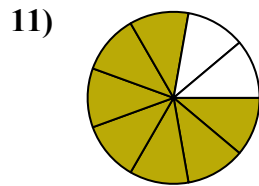
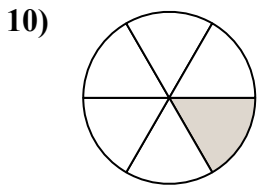
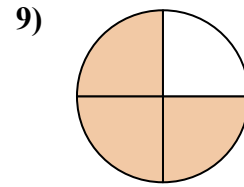
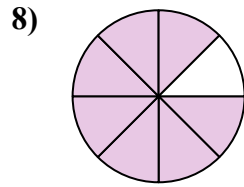
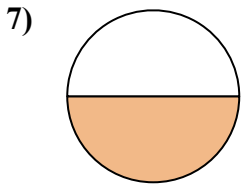
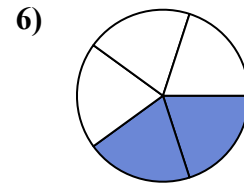
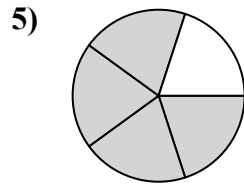
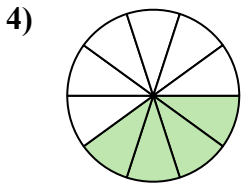
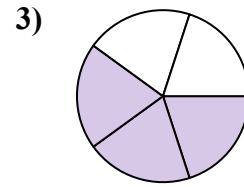
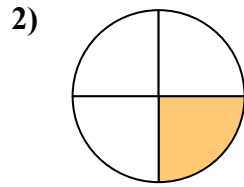
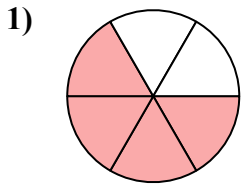


Tìm góc (tính bằng độ) của phần bóng mờ của hình tròn.

288	216	315	144	280
60	90	240	144	270
180	180			

Câu trả lời

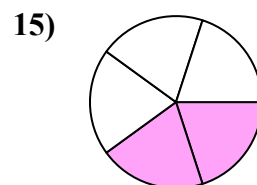
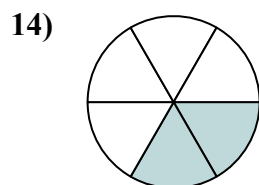
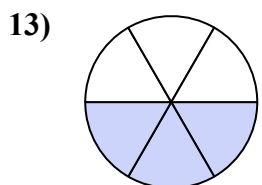
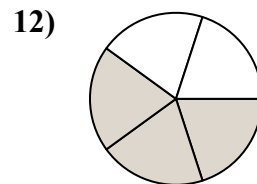
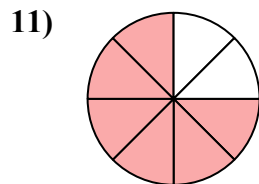
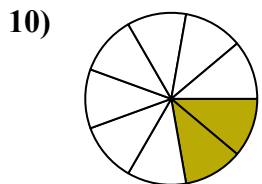
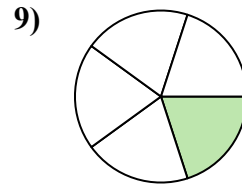
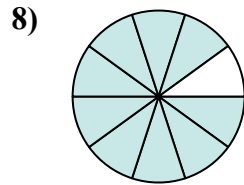
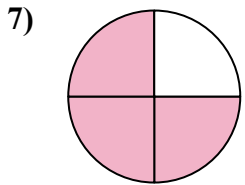
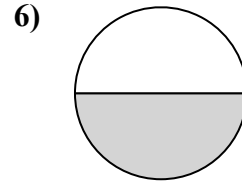
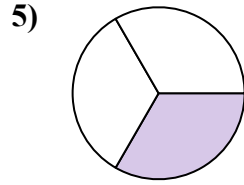
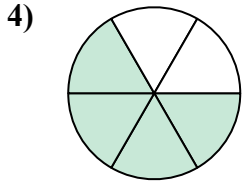
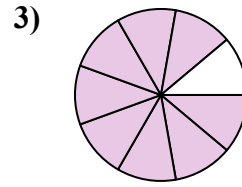
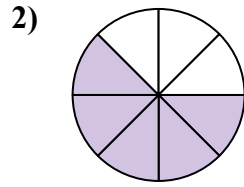
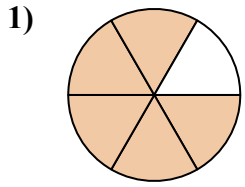
1. _____
2. _____
3. _____
4. _____
5. _____
6. _____
7. _____
8. _____
9. _____
10. _____
11. _____
12. _____





Tìm góc (tính bằng độ) của phần bóng mờ của hình tròn.

Câu trả lời

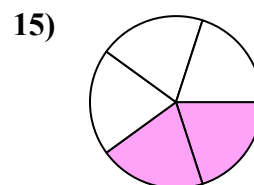
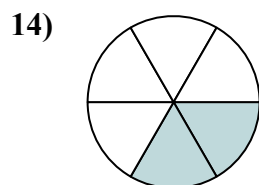
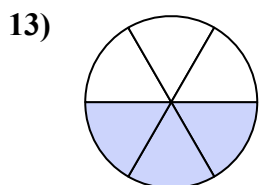
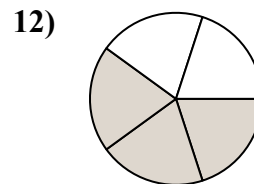
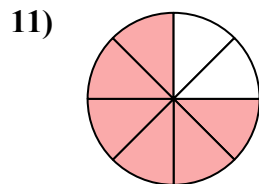
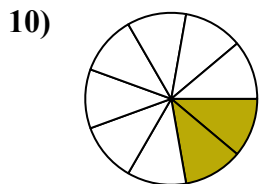
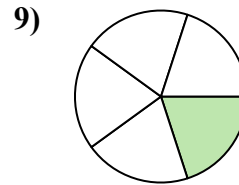
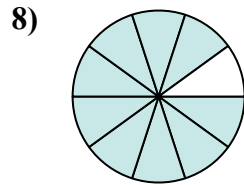
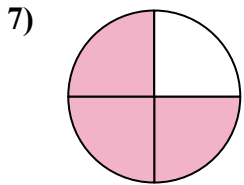
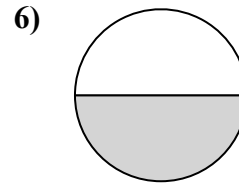
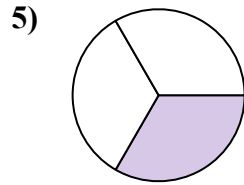
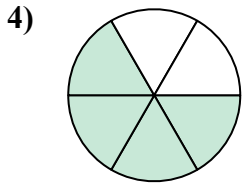
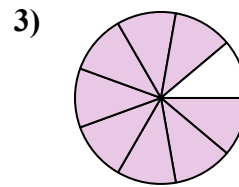
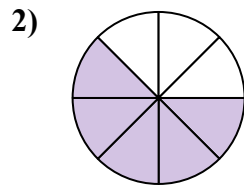
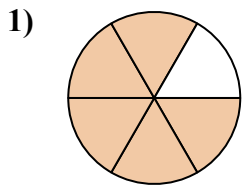


1. _____
2. _____
3. _____
4. _____
5. _____
6. _____
7. _____
8. _____
9. _____
10. _____
11. _____
12. _____
13. _____
14. _____
15. _____



Tìm góc (tính bằng độ) của phần bóng mờ của hình tròn.

Câu trả lời



1. 300

2. 225

3. 320

4. 240

5. 120

6. 180

7. 270

8. 324

9. 72

10. 80

11. 270

12. 216

13. 180

14. 120

15. 144



Tìm góc (tính bằng độ) của phần bóng mờ của hình tròn.

Câu trả lời

270

180

216

72

320

80

240

225

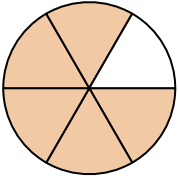
300

120

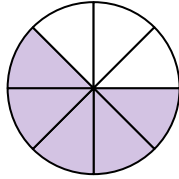
270

324

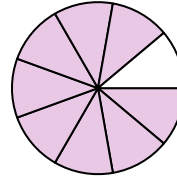
1)



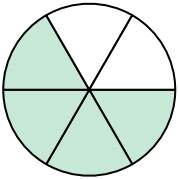
2)



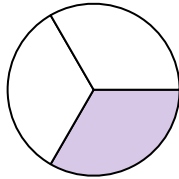
3)



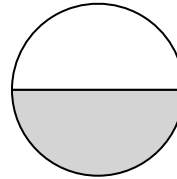
4)



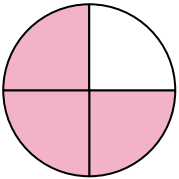
5)



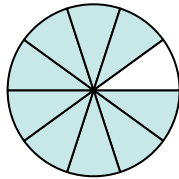
6)



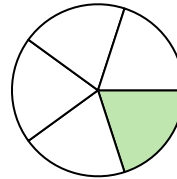
7)



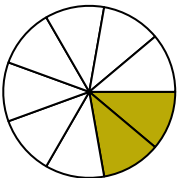
8)



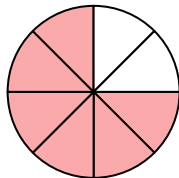
9)



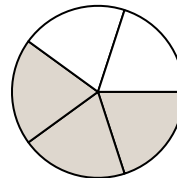
10)



11)



12)



1. _____

2. _____

3. _____

4. _____

5. _____

6. _____

7. _____

8. _____

9. _____

10. _____

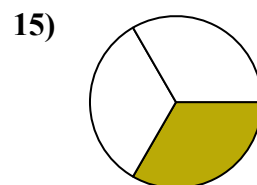
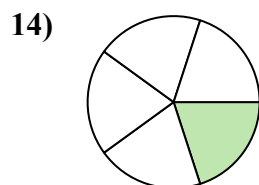
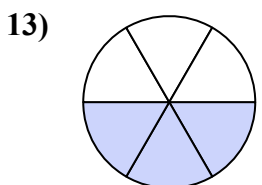
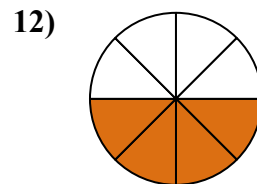
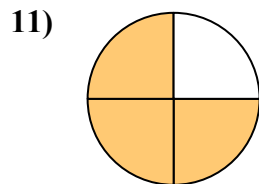
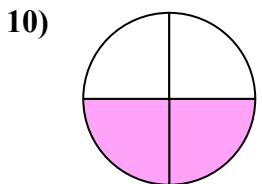
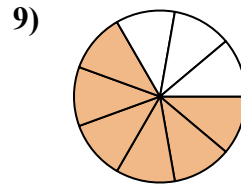
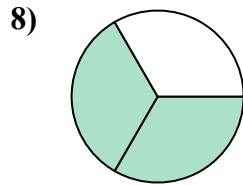
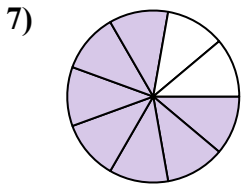
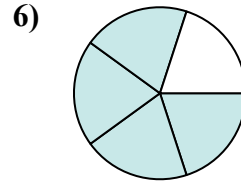
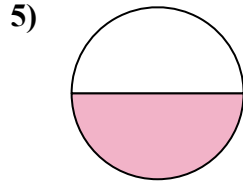
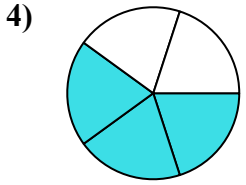
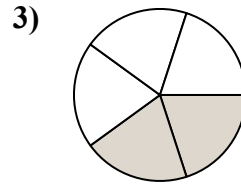
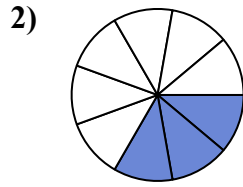
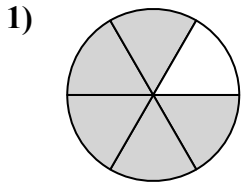
11. _____

12. _____



Tìm góc (tính bằng độ) của phần bóng mờ của hình tròn.

Câu trả lời

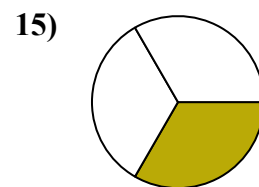
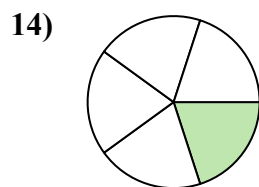
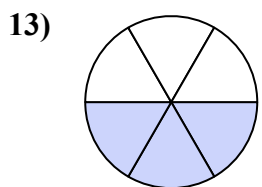
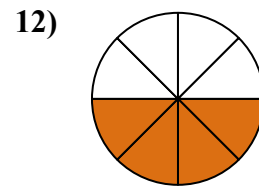
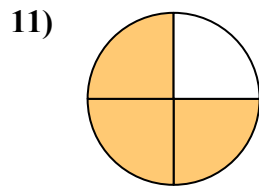
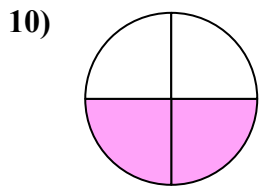
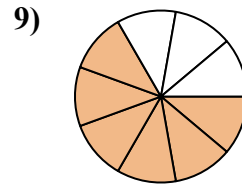
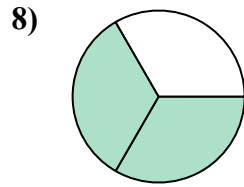
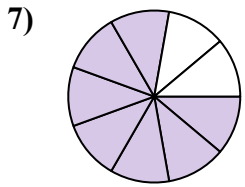
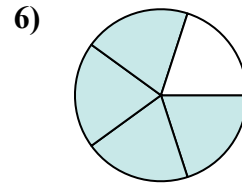
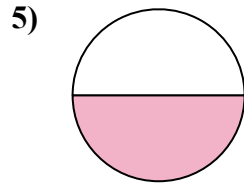
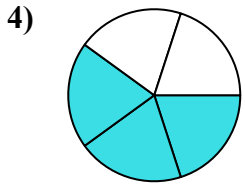
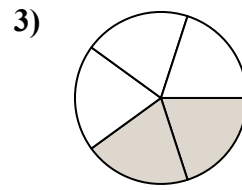
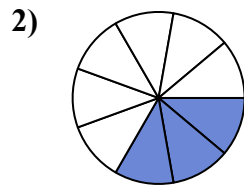
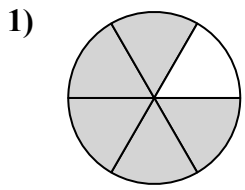


1. _____
2. _____
3. _____
4. _____
5. _____
6. _____
7. _____
8. _____
9. _____
10. _____
11. _____
12. _____
13. _____
14. _____
15. _____



Tìm góc (tính bằng độ) của phần bóng mờ của hình tròn.

Câu trả lời



1. 300
2. 120
3. 144
4. 216
5. 180
6. 288
7. 280
8. 240
9. 240
10. 180
11. 270
12. 180
13. 180
14. 72
15. 120

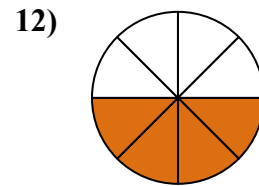
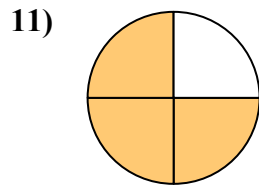
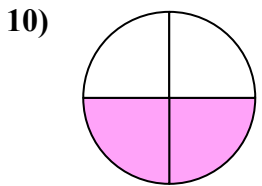
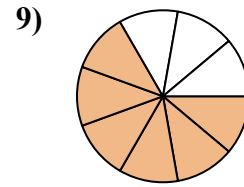
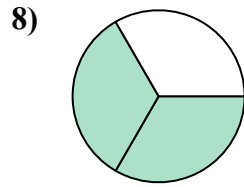
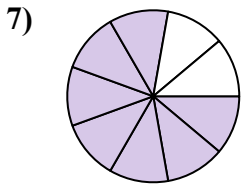
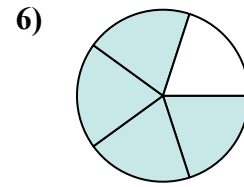
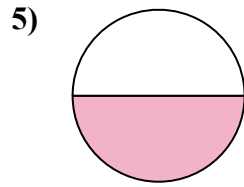
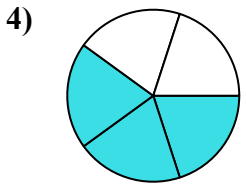
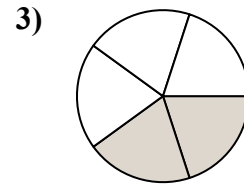
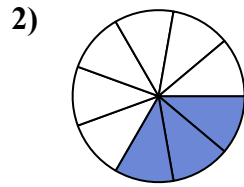
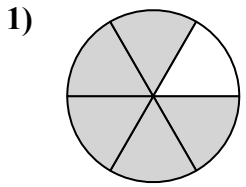


Tìm góc (tính bằng độ) của phần bóng mờ của hình tròn.

240	180	180	240	270
120	144	288	280	300
216	180			

Câu trả lời

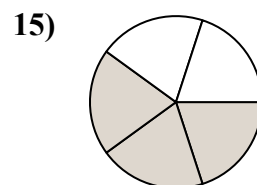
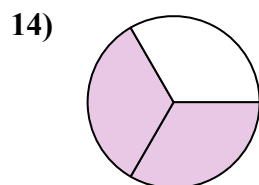
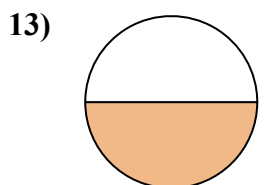
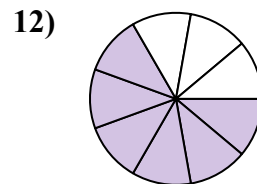
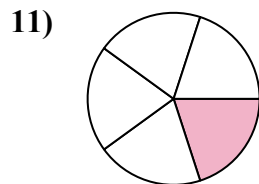
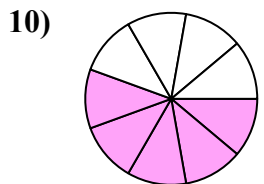
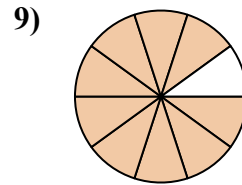
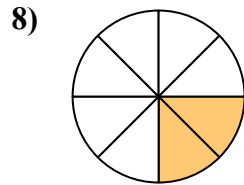
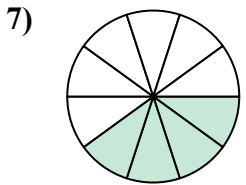
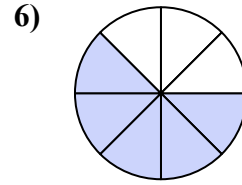
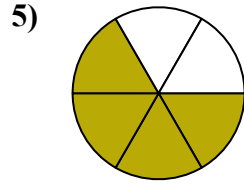
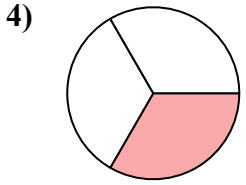
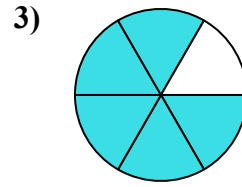
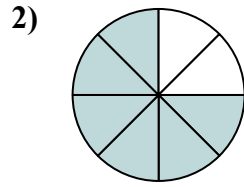
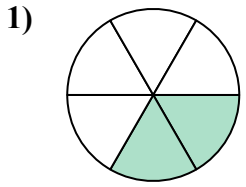
1. _____
2. _____
3. _____
4. _____
5. _____
6. _____
7. _____
8. _____
9. _____
10. _____
11. _____
12. _____





Tìm góc (tính bằng độ) của phần bóng mờ của hình tròn.

Câu trả lời

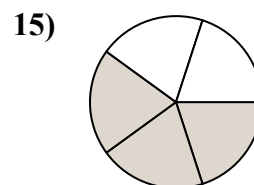
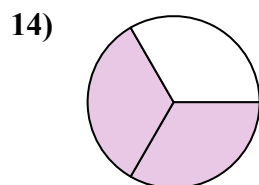
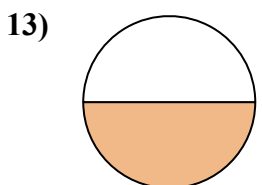
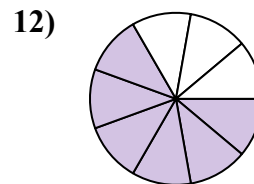
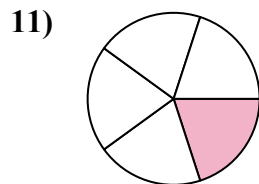
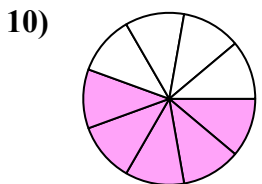
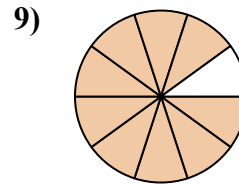
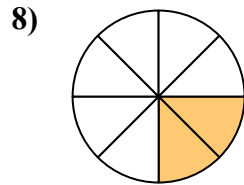
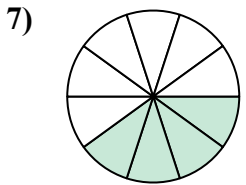
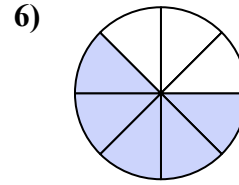
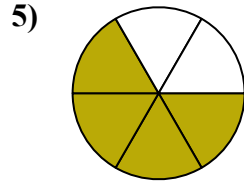
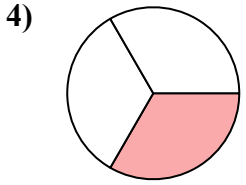
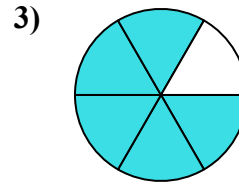
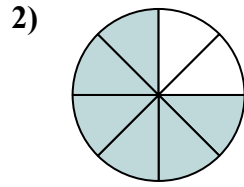
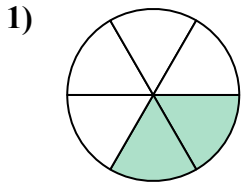


1. _____
2. _____
3. _____
4. _____
5. _____
6. _____
7. _____
8. _____
9. _____
10. _____
11. _____
12. _____
13. _____
14. _____
15. _____



Tìm góc (tính bằng độ) của phần bóng mờ của hình tròn.

Câu trả lời



1. 120

2. 270

3. 300

4. 120

5. 240

6. 225

7. 144

8. 90

9. 324

10. 200

11. 72

12. 240

13. 180

14. 240

15. 216

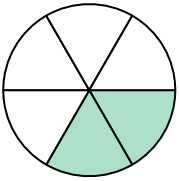


Tìm góc (tính bằng độ) của phần bóng mờ của hình tròn.

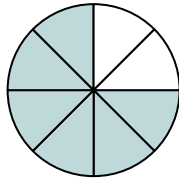
144	120	120	270	200
240	240	90	72	225
324	300			

Câu trả lời

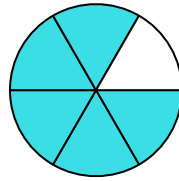
1)



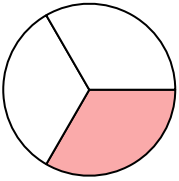
2)



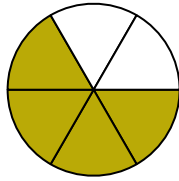
3)



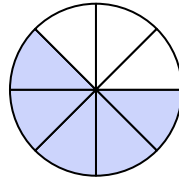
4)



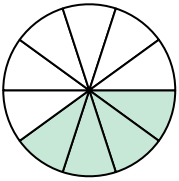
5)



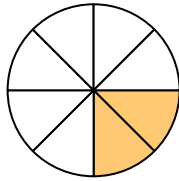
6)



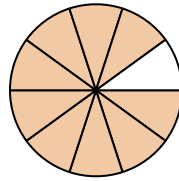
7)



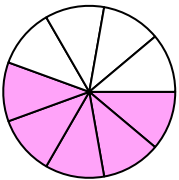
8)



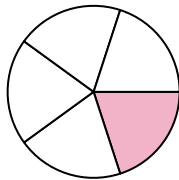
9)



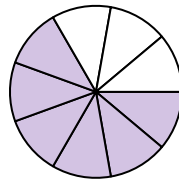
10)



11)



12)

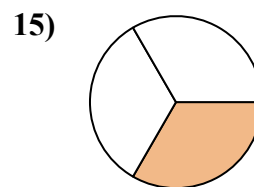
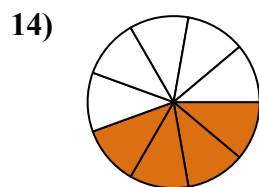
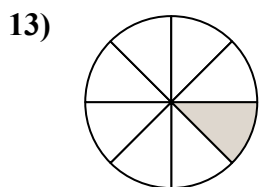
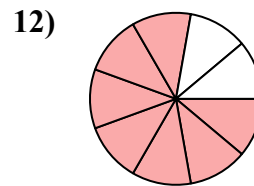
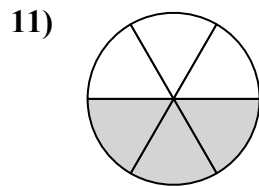
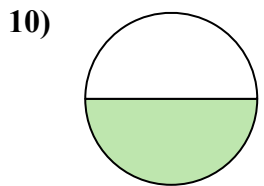
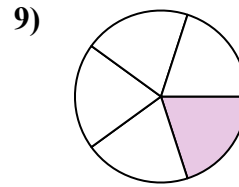
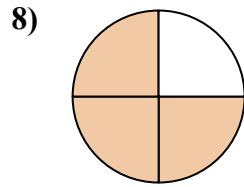
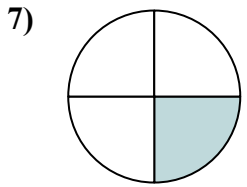
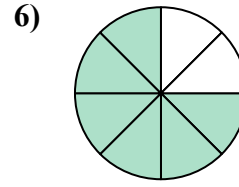
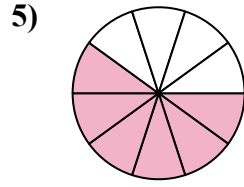
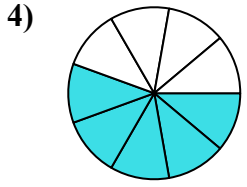
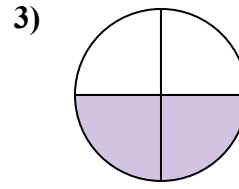
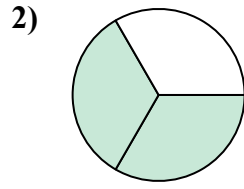
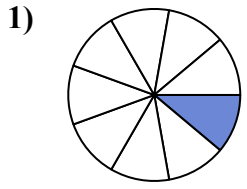


1. _____
2. _____
3. _____
4. _____
5. _____
6. _____
7. _____
8. _____
9. _____
10. _____
11. _____
12. _____



Tìm góc (tính bằng độ) của phần bóng mờ của hình tròn.

Câu trả lời

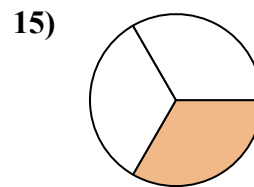
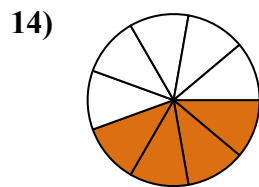
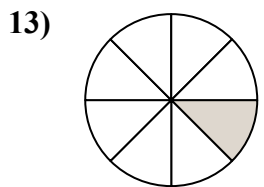
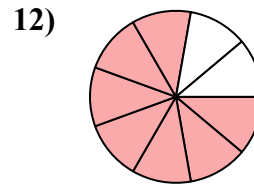
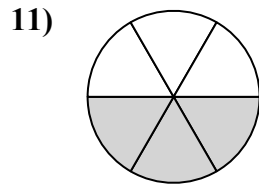
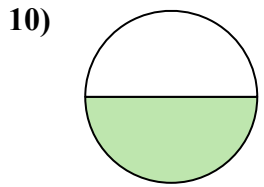
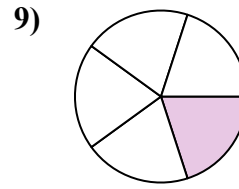
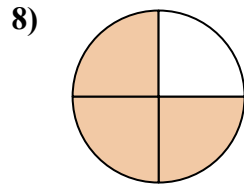
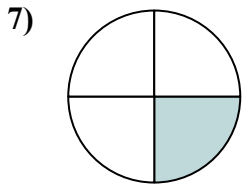
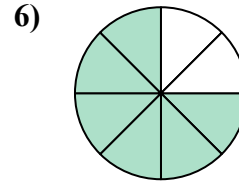
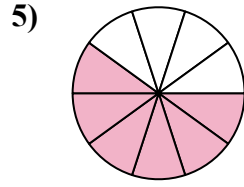
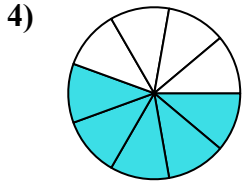
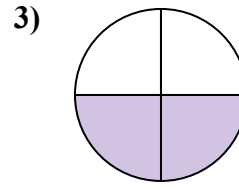
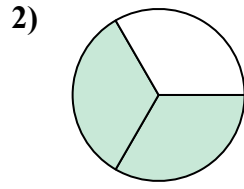
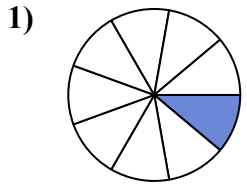


1. _____
2. _____
3. _____
4. _____
5. _____
6. _____
7. _____
8. _____
9. _____
10. _____
11. _____
12. _____
13. _____
14. _____
15. _____



Tìm góc (tính bằng độ) của phần bóng mờ của hình tròn.

Câu trả lời



1. 40
2. 240
3. 180
4. 200
5. 216
6. 270
7. 90
8. 270
9. 72
10. 180
11. 180
12. 280
13. 45
14. 160
15. 120



Tìm góc (tính bằng độ) của phần bóng mờ của hình tròn.

Câu trả lời

180

180

216

270

240

180

200

72

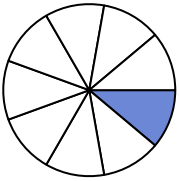
40

270

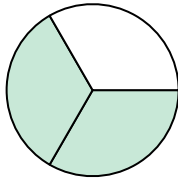
280

90

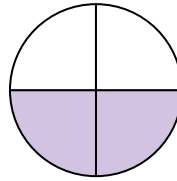
1)



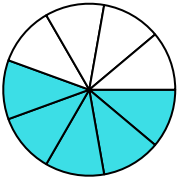
2)



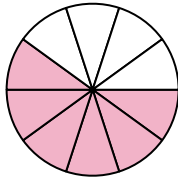
3)



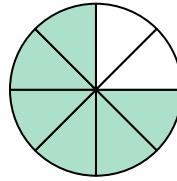
4)



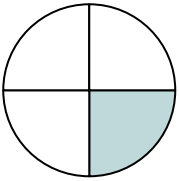
5)



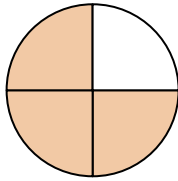
6)



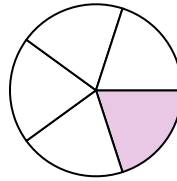
7)



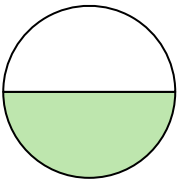
8)



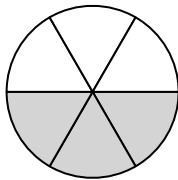
9)



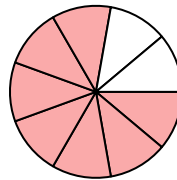
10)



11)



12)



1. _____

2. _____

3. _____

4. _____

5. _____

6. _____

7. _____

8. _____

9. _____

10. _____

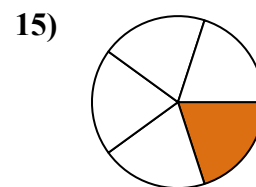
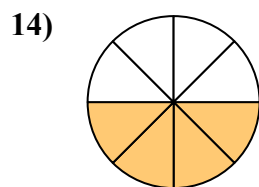
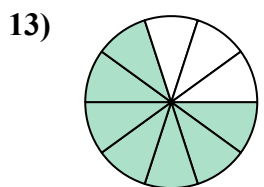
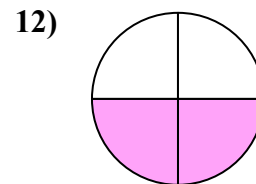
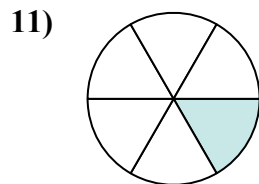
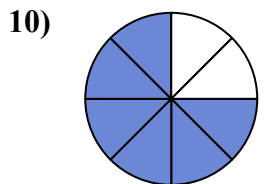
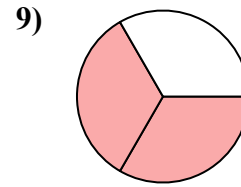
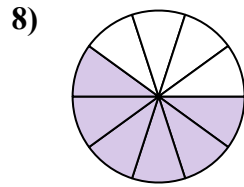
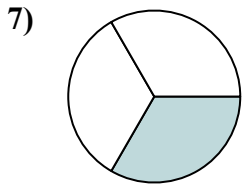
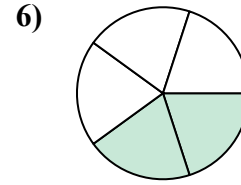
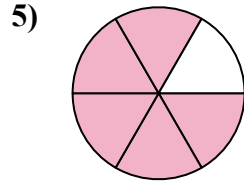
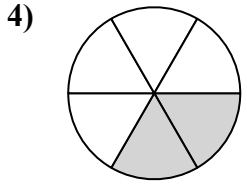
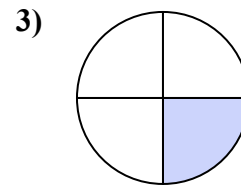
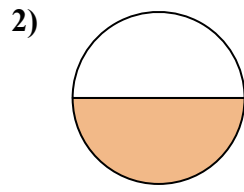
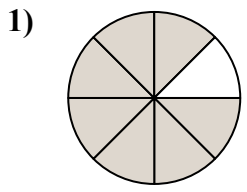
11. _____

12. _____



Tìm góc (tính bằng độ) của phần bóng mờ của hình tròn.

Câu trả lời

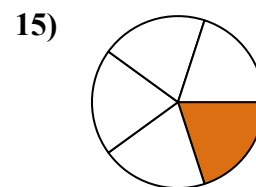
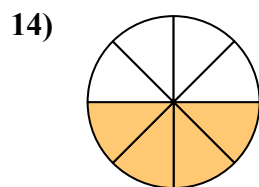
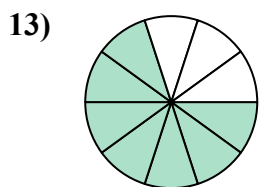
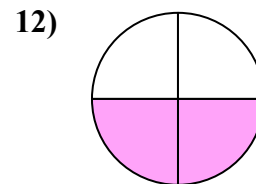
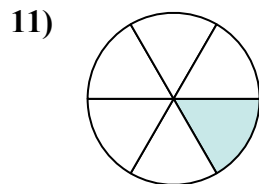
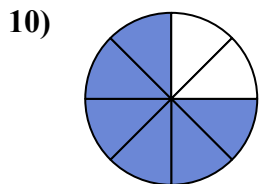
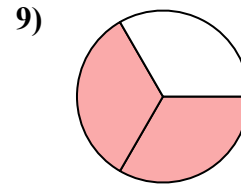
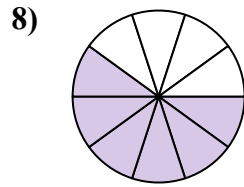
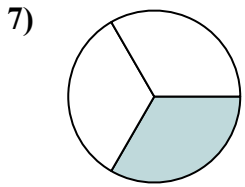
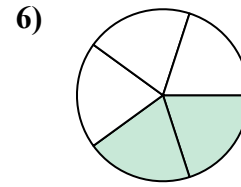
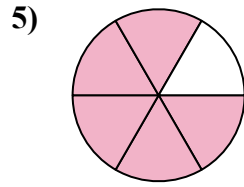
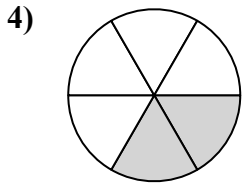
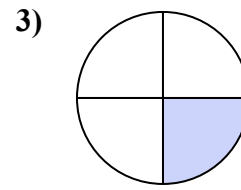
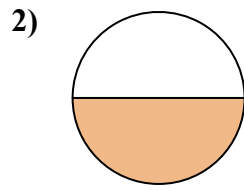
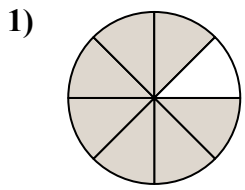


1. _____
2. _____
3. _____
4. _____
5. _____
6. _____
7. _____
8. _____
9. _____
10. _____
11. _____
12. _____
13. _____
14. _____
15. _____



Tìm góc (tính bằng độ) của phần bóng mờ của hình tròn.

Câu trả lời



1. 315

2. 180

3. 90

4. 120

5. 300

6. 144

7. 120

8. 216

9. 240

10. 270

11. 60

12. 180

13. 252

14. 180

15. 72

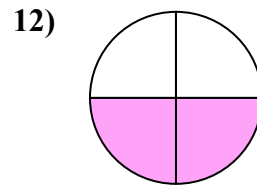
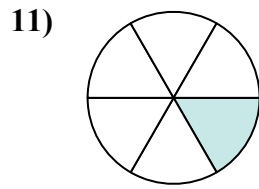
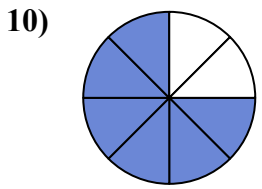
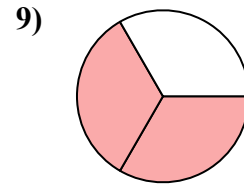
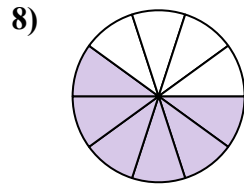
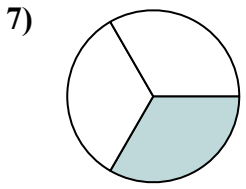
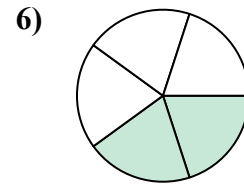
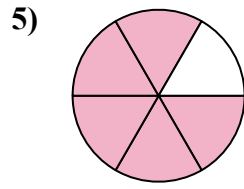
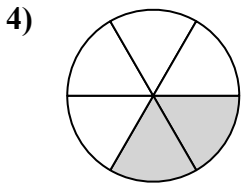
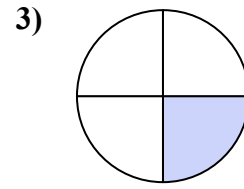
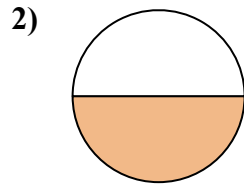
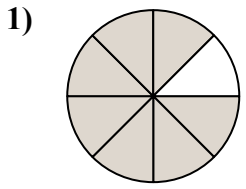


Tìm góc (tính bằng độ) của phần bóng mờ của hình tròn.

120	270	90	216	315
180	180	144	240	300
120	60			

Câu trả lời

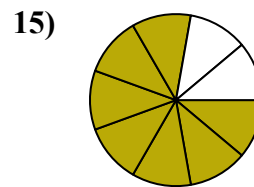
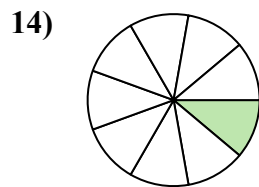
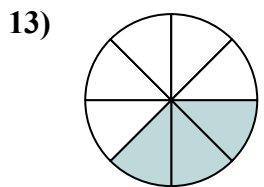
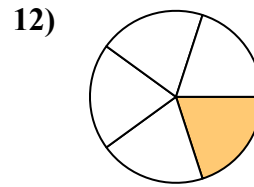
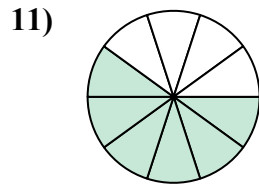
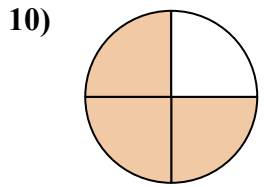
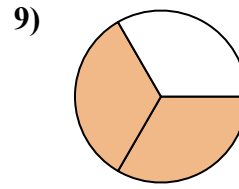
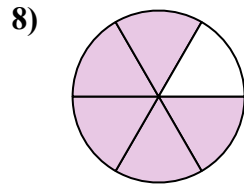
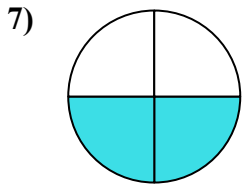
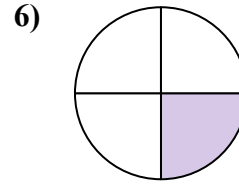
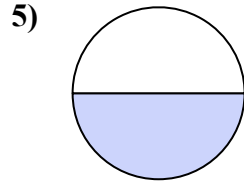
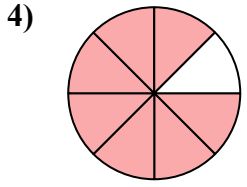
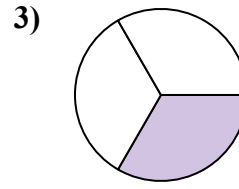
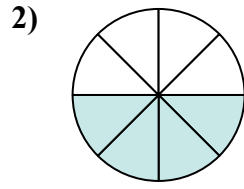
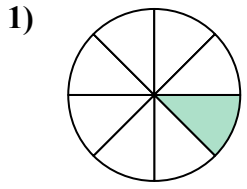
1. _____
2. _____
3. _____
4. _____
5. _____
6. _____
7. _____
8. _____
9. _____
10. _____
11. _____
12. _____





Tìm góc (tính bằng độ) của phần bóng mờ của hình tròn.

Câu trả lời

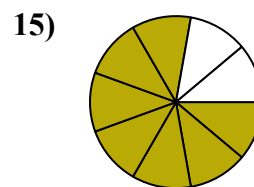
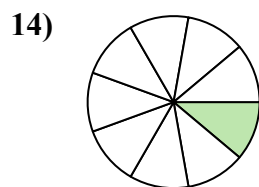
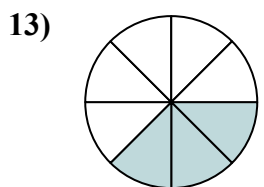
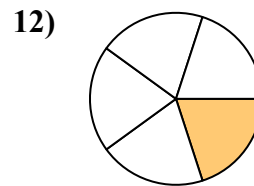
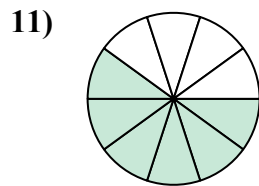
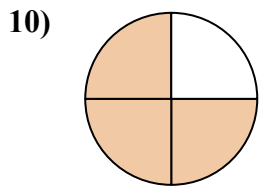
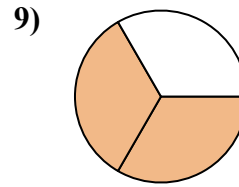
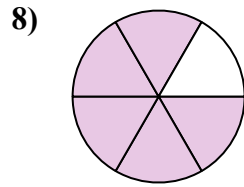
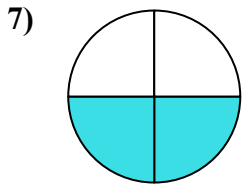
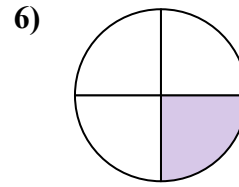
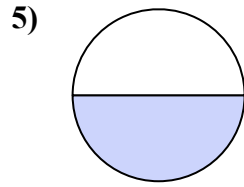
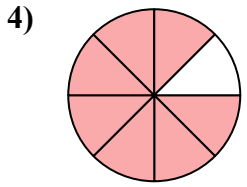
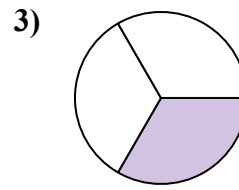
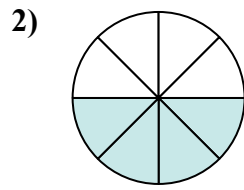
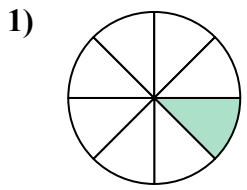


1. _____
2. _____
3. _____
4. _____
5. _____
6. _____
7. _____
8. _____
9. _____
10. _____
11. _____
12. _____
13. _____
14. _____
15. _____



Tìm góc (tính bằng độ) của phần bóng mờ của hình tròn.

Câu trả lời



1. 45
2. 180
3. 120
4. 315
5. 180
6. 90
7. 180
8. 300
9. 240
10. 270
11. 216
12. 72
13. 135
14. 40
15. 280

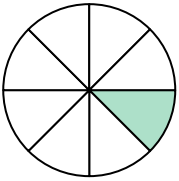


Tìm góc (tính bằng độ) của phần bóng mờ của hình tròn.

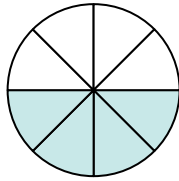
90	216	45	180	180
300	240	270	120	315
180	72			

Câu trả lời

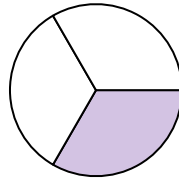
1)



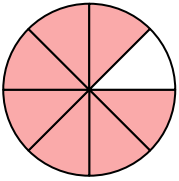
2)



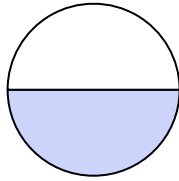
3)



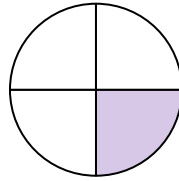
4)



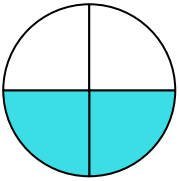
5)



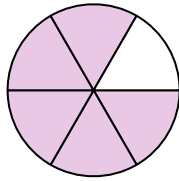
6)



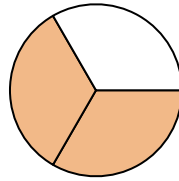
7)



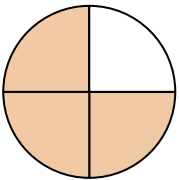
8)



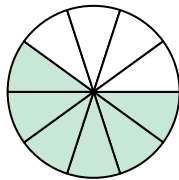
9)



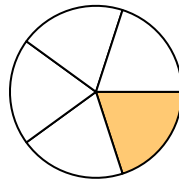
10)



11)



12)



1. _____

2. _____

3. _____

4. _____

5. _____

6. _____

7. _____

8. _____

9. _____

10. _____

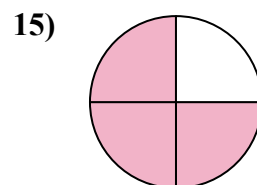
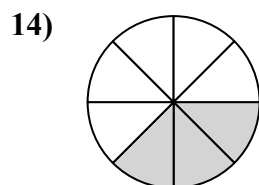
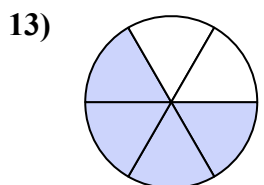
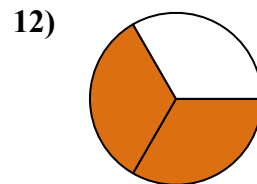
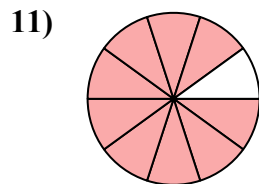
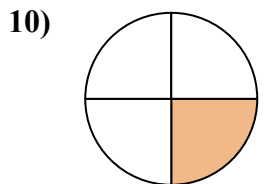
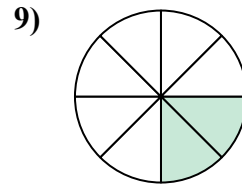
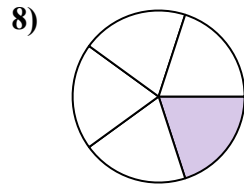
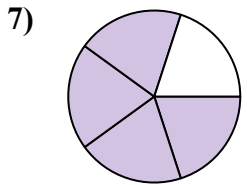
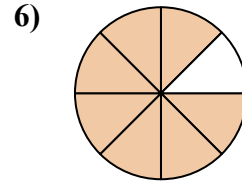
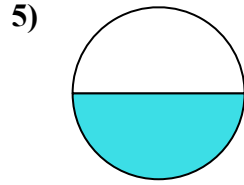
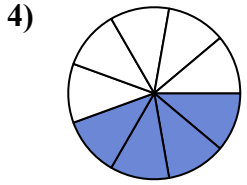
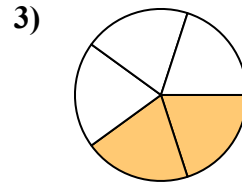
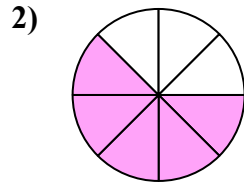
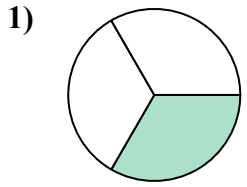
11. _____

12. _____



Tìm góc (tính bằng độ) của phần bóng mờ của hình tròn.

Câu trả lời

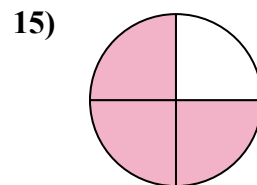
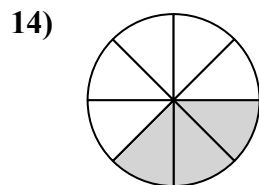
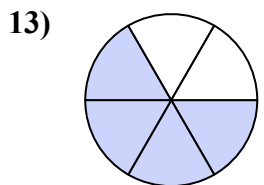
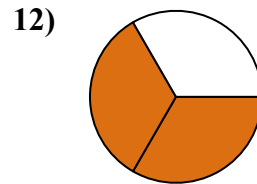
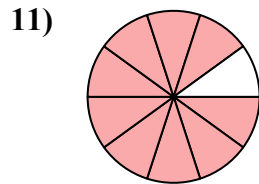
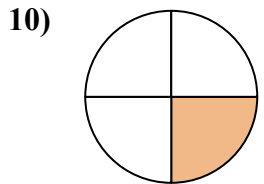
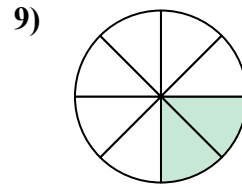
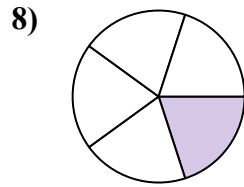
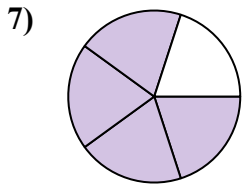
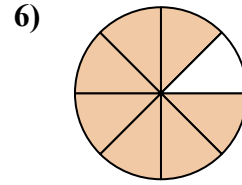
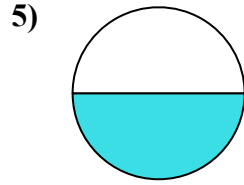
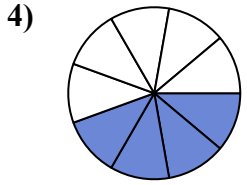
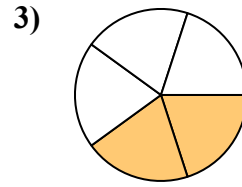
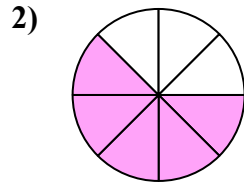
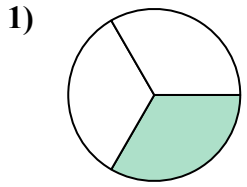


1. _____
2. _____
3. _____
4. _____
5. _____
6. _____
7. _____
8. _____
9. _____
10. _____
11. _____
12. _____
13. _____
14. _____
15. _____



Tìm góc (tính bằng độ) của phần bóng mờ của hình tròn.

Câu trả lời



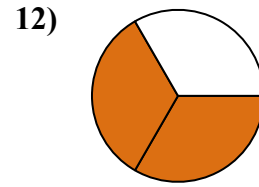
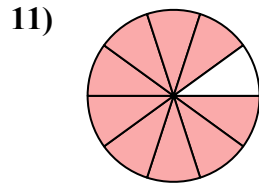
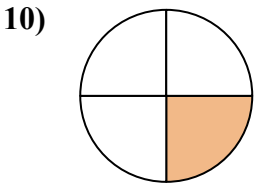
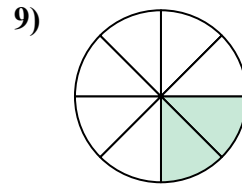
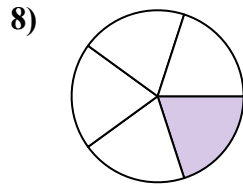
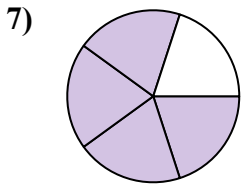
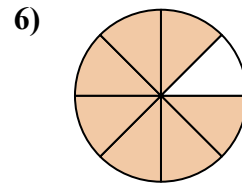
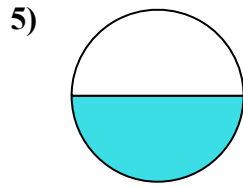
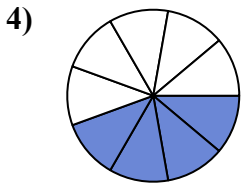
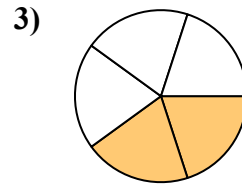
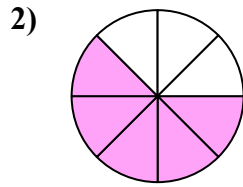
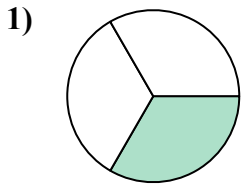
1. 120
2. 225
3. 144
4. 160
5. 180
6. 315
7. 288
8. 72
9. 90
10. 90
11. 324
12. 240
13. 240
14. 135
15. 270



Tìm góc (tính bằng độ) của phần bóng mờ của hình tròn.

Câu trả lời

315	120	240	72	90
225	324	160	180	288
90	144			

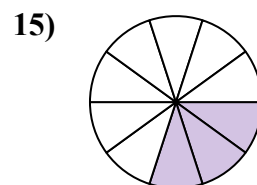
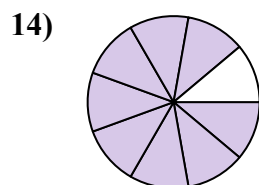
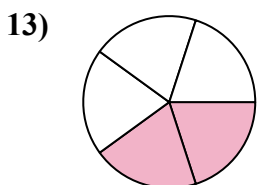
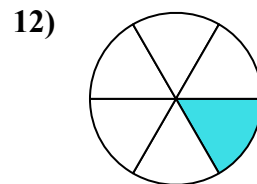
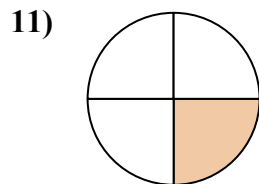
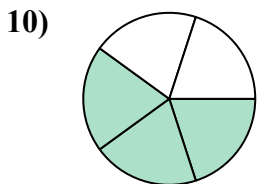
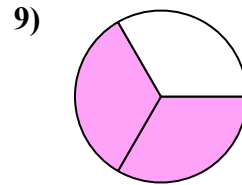
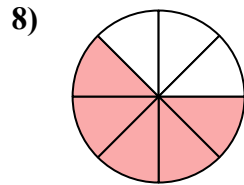
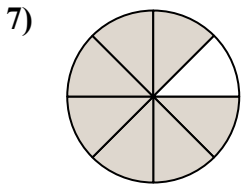
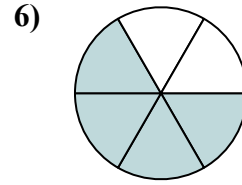
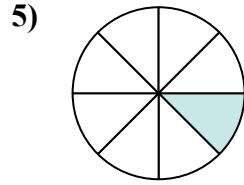
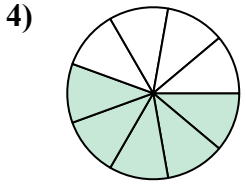
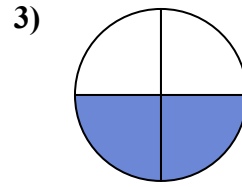
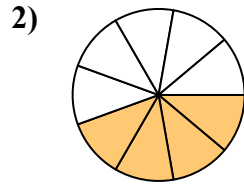
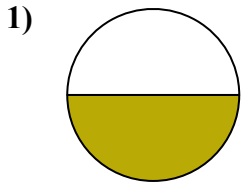


1. _____
2. _____
3. _____
4. _____
5. _____
6. _____
7. _____
8. _____
9. _____
10. _____
11. _____
12. _____



Tìm góc (tính bằng độ) của phần bóng mờ của hình tròn.

Câu trả lời

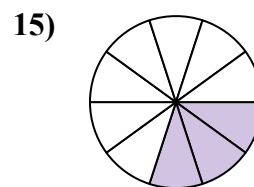
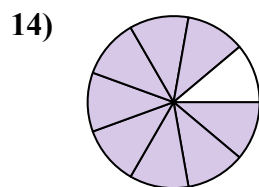
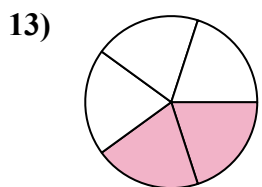
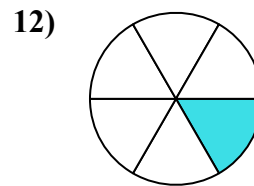
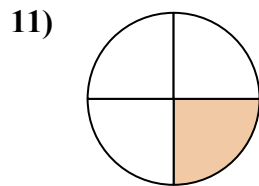
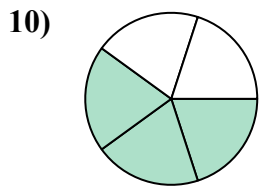
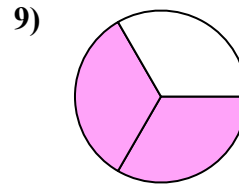
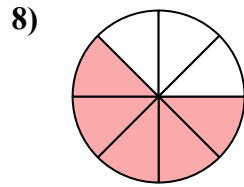
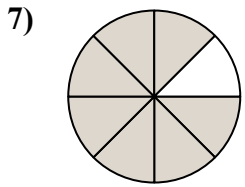
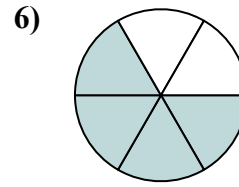
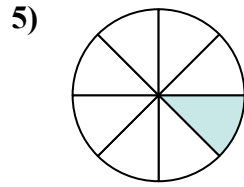
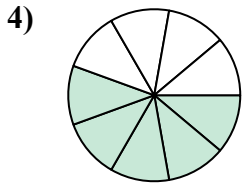
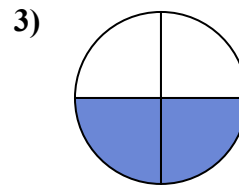
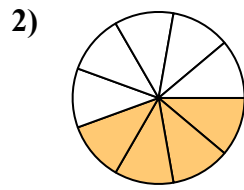
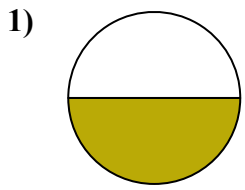


1. _____
2. _____
3. _____
4. _____
5. _____
6. _____
7. _____
8. _____
9. _____
10. _____
11. _____
12. _____
13. _____
14. _____
15. _____



Tìm góc (tính bằng độ) của phần bóng mờ của hình tròn.

Câu trả lời



1. 180

2. 160

3. 180

4. 200

5. 45

6. 240

7. 315

8. 225

9. 240

10. 216

11. 90

12. 60

13. 144

14. 320

15. 108

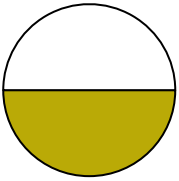


Tìm góc (tính bằng độ) của phần bóng mờ của hình tròn.

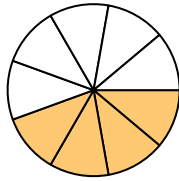
Câu trả lời

90	200	240	60	160
216	315	180	45	225
240	180			

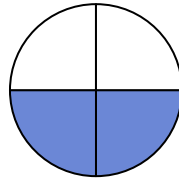
1)



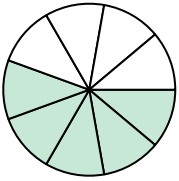
2)



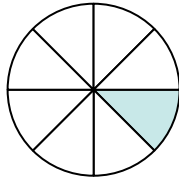
3)



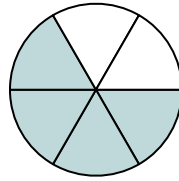
4)



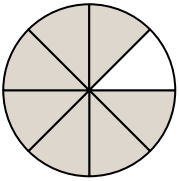
5)



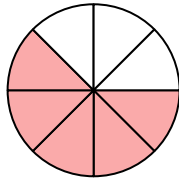
6)



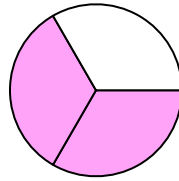
7)



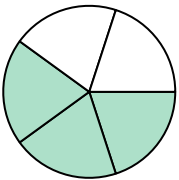
8)



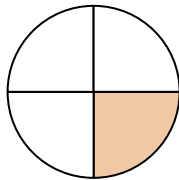
9)



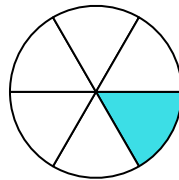
10)



11)



12)



1. _____
2. _____
3. _____
4. _____
5. _____
6. _____
7. _____
8. _____
9. _____
10. _____
11. _____
12. _____