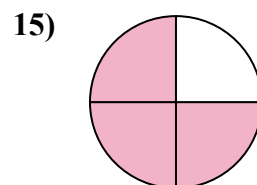
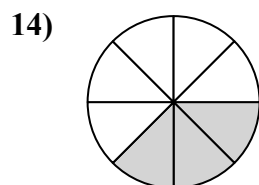
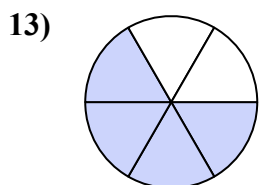
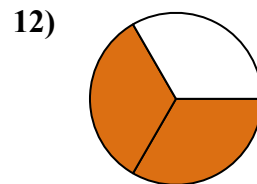
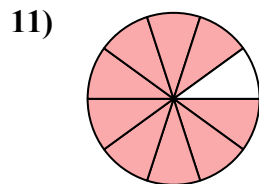
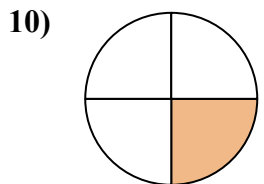
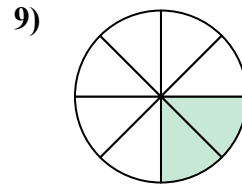
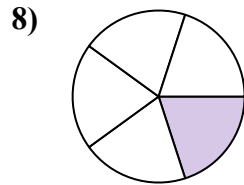
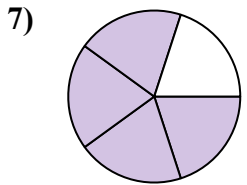
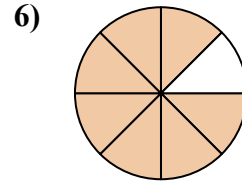
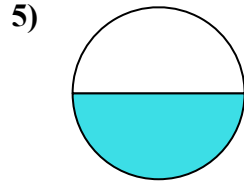
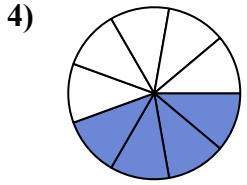
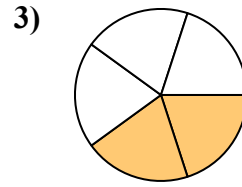
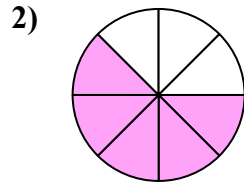
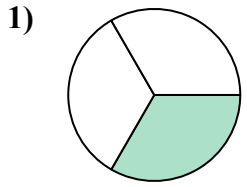




Tìm góc (tính bằng độ) của phần bóng mờ của hình tròn.

Câu trả lời

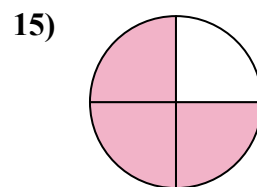
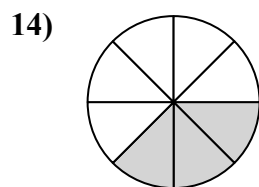
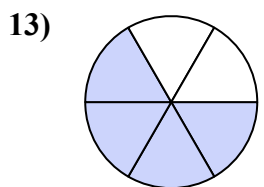
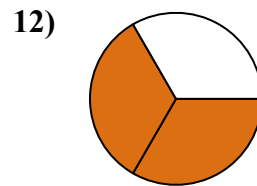
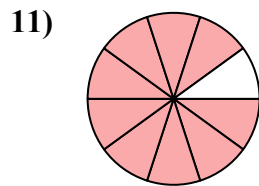
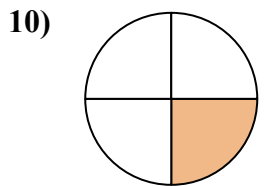
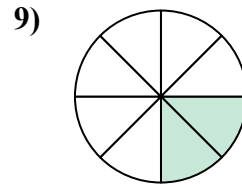
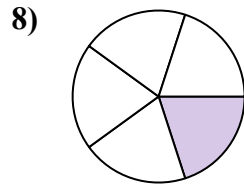
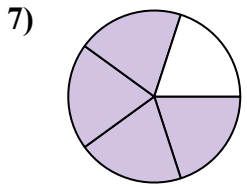
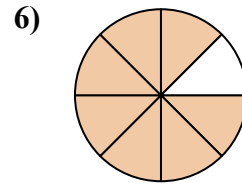
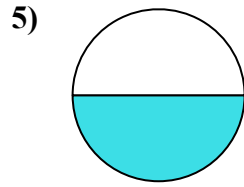
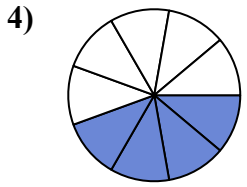
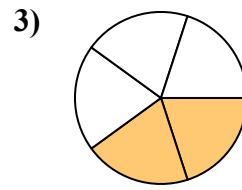
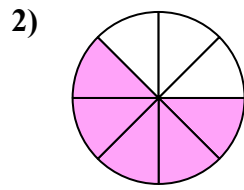
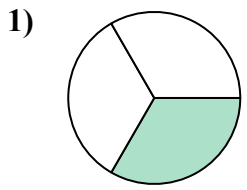


1. _____
2. _____
3. _____
4. _____
5. _____
6. _____
7. _____
8. _____
9. _____
10. _____
11. _____
12. _____
13. _____
14. _____
15. _____



Tìm góc (tính bằng độ) của phần bóng mờ của hình tròn.

Câu trả lời



1. 120
2. 225
3. 144
4. 160
5. 180
6. 315
7. 288
8. 72
9. 90
10. 90
11. 324
12. 240
13. 240
14. 135
15. 270



Tìm góc (tính bằng độ) của phần bóng mờ của hình tròn.

315	120	240	72	90
225	324	160	180	288
90	144			

Câu trả lời

1. _____
2. _____
3. _____
4. _____
5. _____
6. _____
7. _____
8. _____
9. _____
10. _____
11. _____
12. _____

