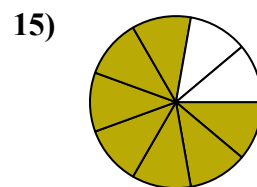
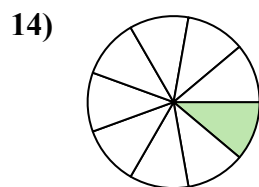
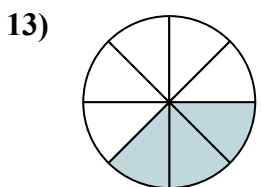
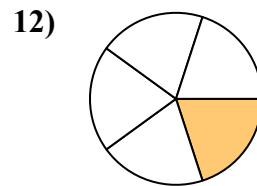
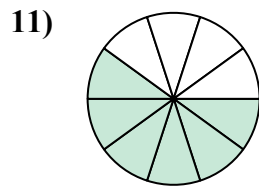
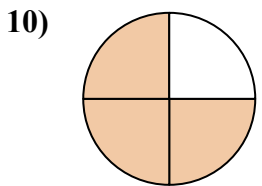
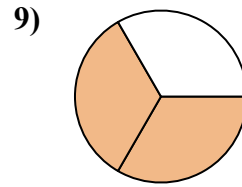
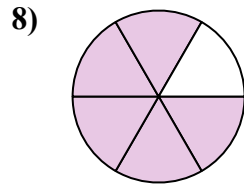
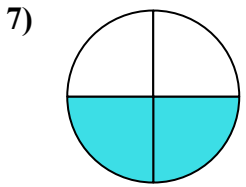
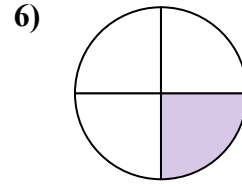
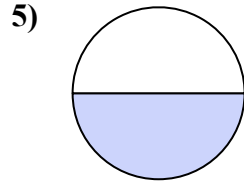
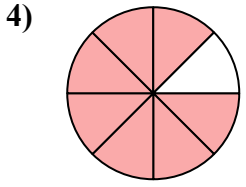
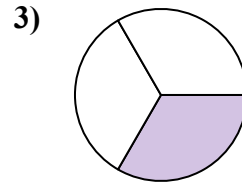
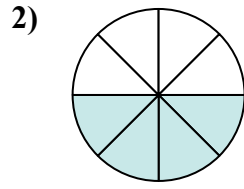
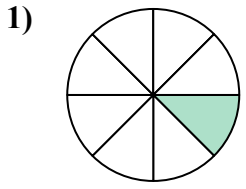




Tìm góc (tính bằng độ) của phần bóng mờ của hình tròn.

Câu trả lời

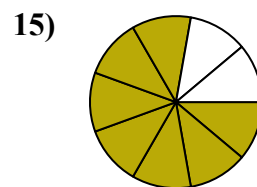
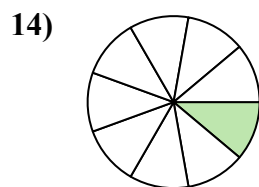
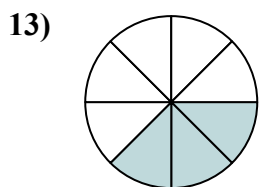
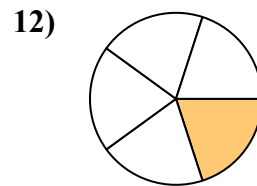
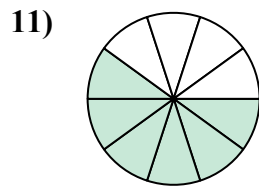
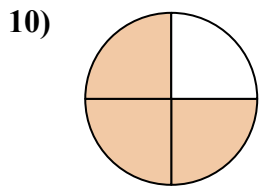
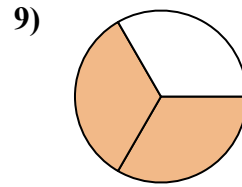
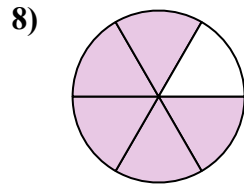
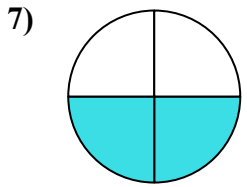
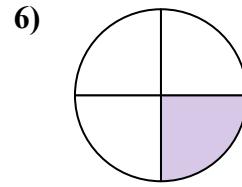
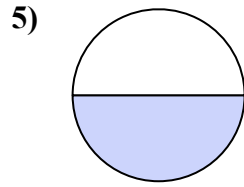
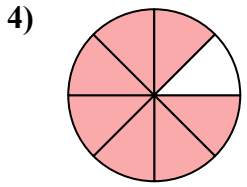
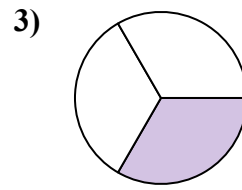
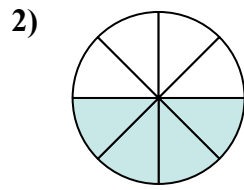
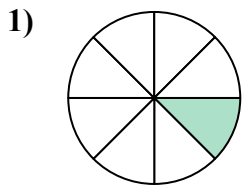


1. _____
2. _____
3. _____
4. _____
5. _____
6. _____
7. _____
8. _____
9. _____
10. _____
11. _____
12. _____
13. _____
14. _____
15. _____



Tìm góc (tính bằng độ) của phần bóng mờ của hình tròn.

Câu trả lời



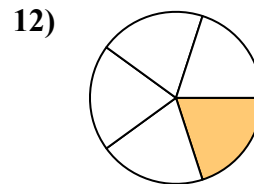
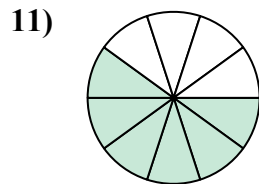
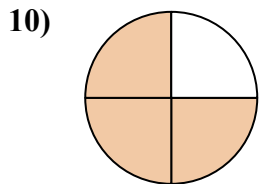
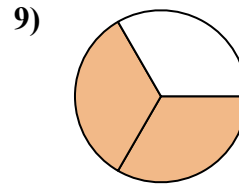
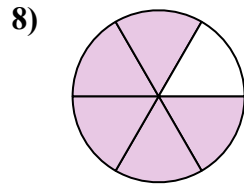
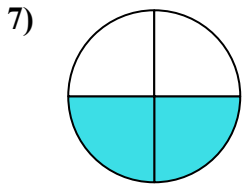
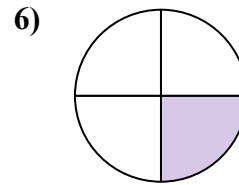
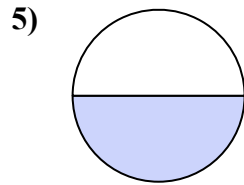
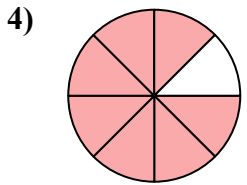
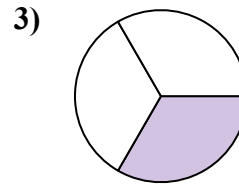
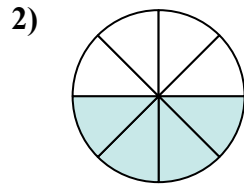
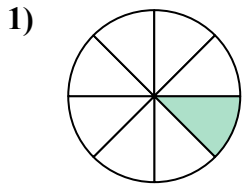
1. 45
2. 180
3. 120
4. 315
5. 180
6. 90
7. 180
8. 300
9. 240
10. 270
11. 216
12. 72
13. 135
14. 40
15. 280



Tìm góc (tính bằng độ) của phần bóng mờ của hình tròn.

90	216	45	180	180
300	240	270	120	315
180	72			

Câu trả lời



1. _____
2. _____
3. _____
4. _____
5. _____
6. _____
7. _____
8. _____
9. _____
10. _____
11. _____
12. _____