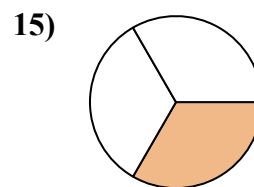
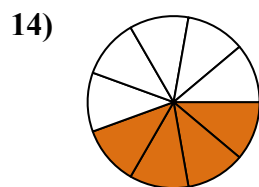
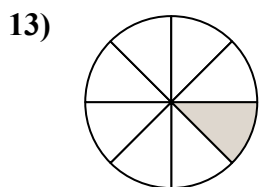
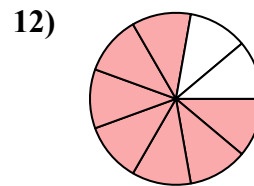
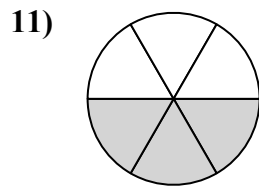
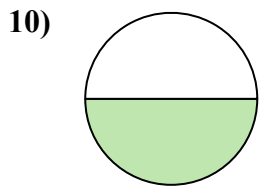
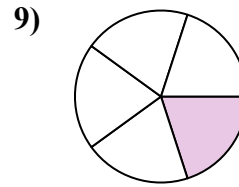
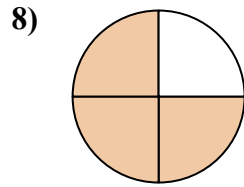
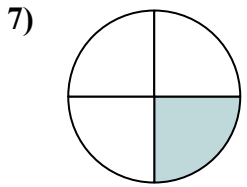
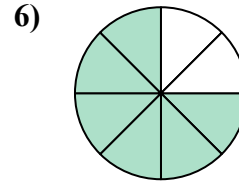
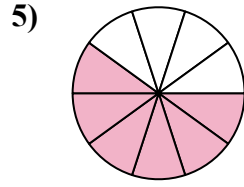
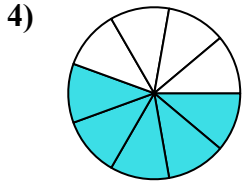
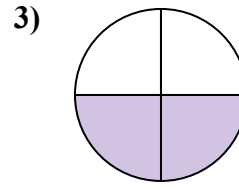
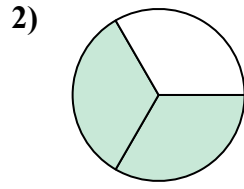
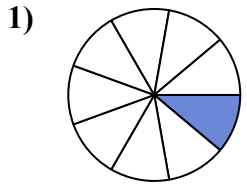




Tìm góc (tính bằng độ) của phần bóng mờ của hình tròn.

Câu trả lời

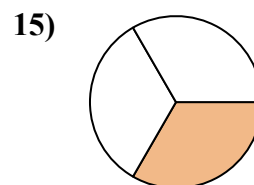
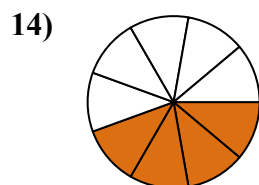
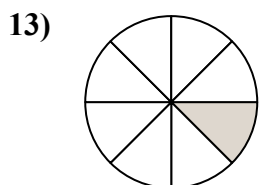
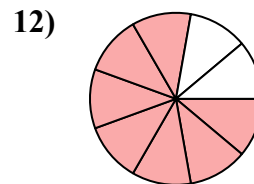
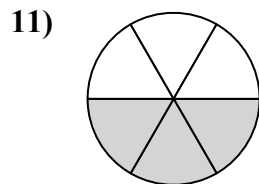
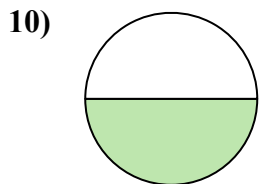
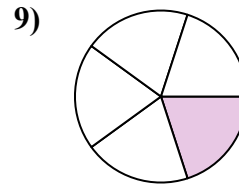
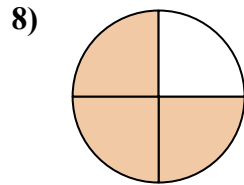
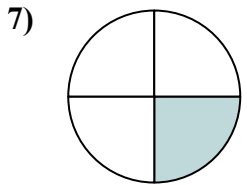
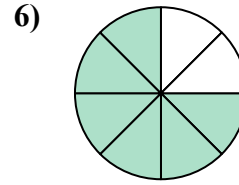
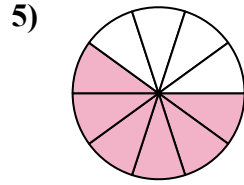
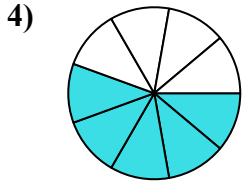
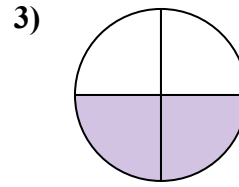
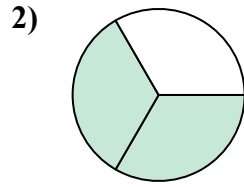
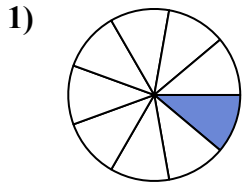


1. _____
2. _____
3. _____
4. _____
5. _____
6. _____
7. _____
8. _____
9. _____
10. _____
11. _____
12. _____
13. _____
14. _____
15. _____



Tìm góc (tính bằng độ) của phần bóng mờ của hình tròn.

Câu trả lời



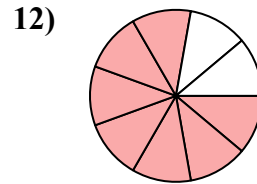
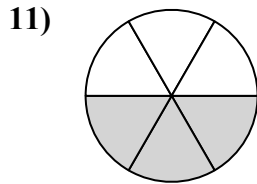
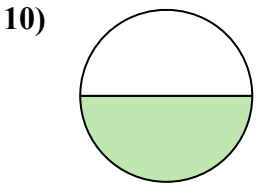
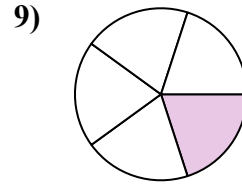
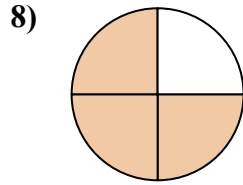
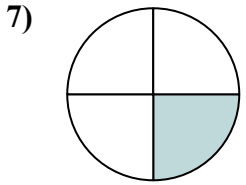
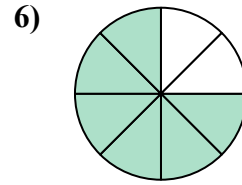
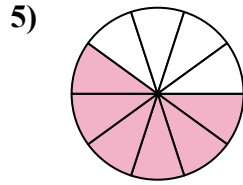
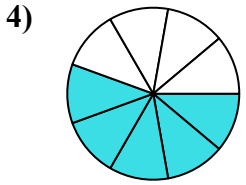
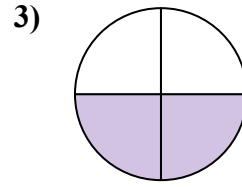
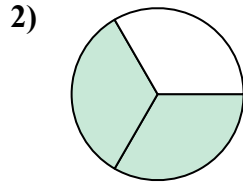
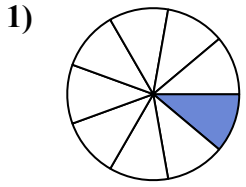
1. 40
2. 240
3. 180
4. 200
5. 216
6. 270
7. 90
8. 270
9. 72
10. 180
11. 180
12. 280
13. 45
14. 160
15. 120



Tìm góc (tính bằng độ) của phần bóng mờ của hình tròn.

Câu trả lời

180	180	216	270	240
180	200	72	40	270
280	90			



1. _____
2. _____
3. _____
4. _____
5. _____
6. _____
7. _____
8. _____
9. _____
10. _____
11. _____
12. _____