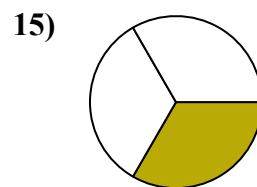
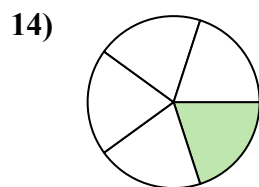
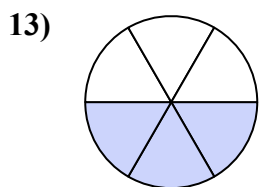
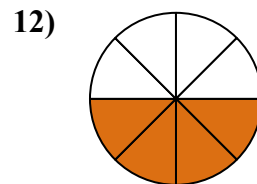
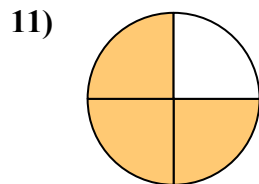
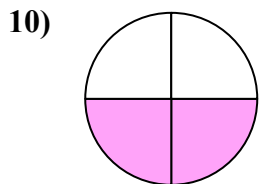
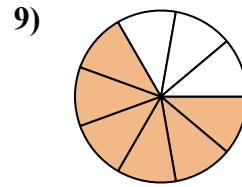
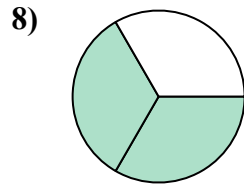
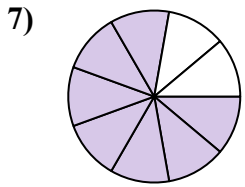
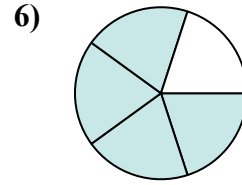
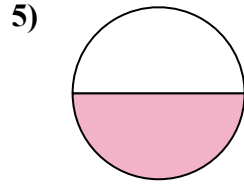
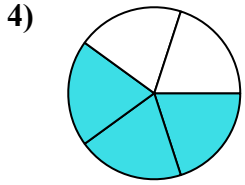
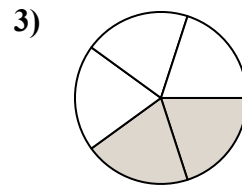
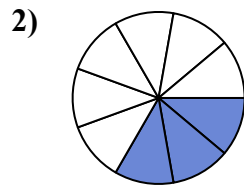
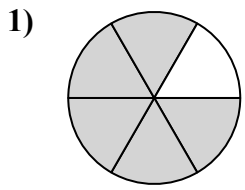




Tìm góc (tính bằng độ) của phần bóng mờ của hình tròn.

Câu trả lời

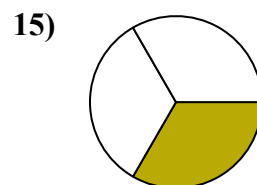
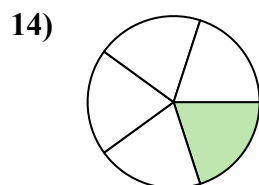
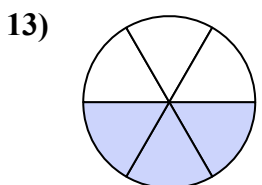
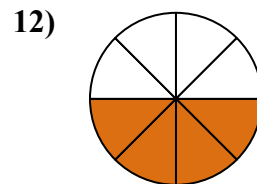
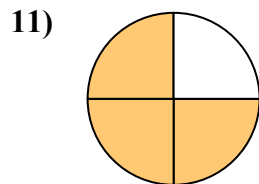
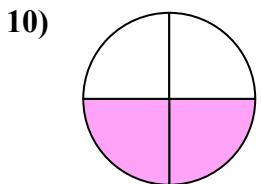
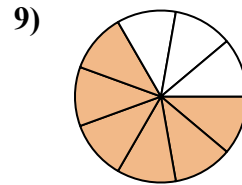
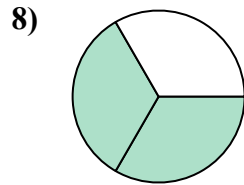
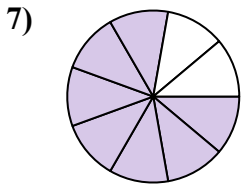
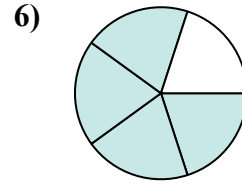
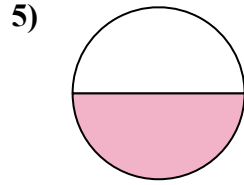
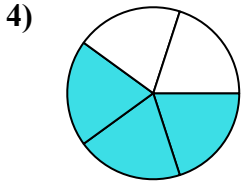
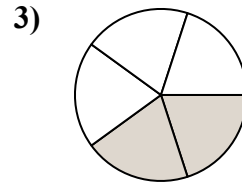
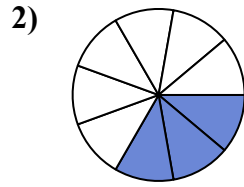
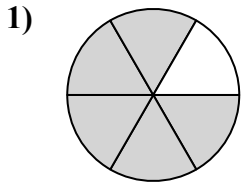


1. _____
2. _____
3. _____
4. _____
5. _____
6. _____
7. _____
8. _____
9. _____
10. _____
11. _____
12. _____
13. _____
14. _____
15. _____



Tìm góc (tính bằng độ) của phần bóng mờ của hình tròn.

Câu trả lời



1. 300

2. 120

3. 144

4. 216

5. 180

6. 288

7. 280

8. 240

9. 240

10. 180

11. 270

12. 180

13. 180

14. 72

15. 120



Tìm góc (tính bằng độ) của phần bóng mờ của hình tròn.

240	180	180	240	270
120	144	288	280	300
216	180			

Câu trả lời

1. _____
2. _____
3. _____
4. _____
5. _____
6. _____
7. _____
8. _____
9. _____
10. _____
11. _____
12. _____

