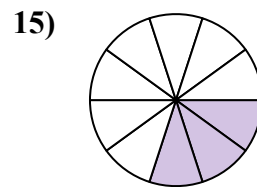
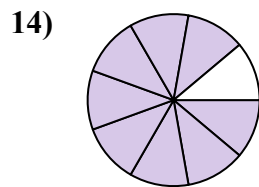
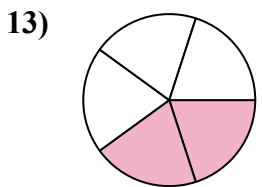
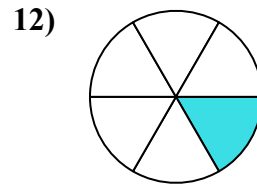
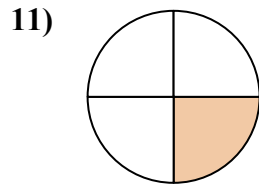
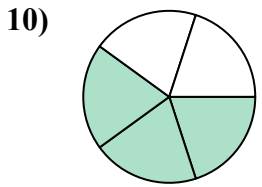
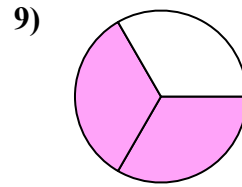
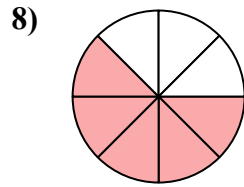
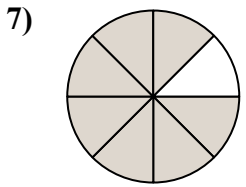
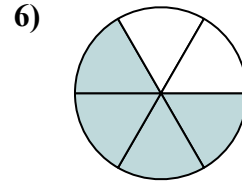
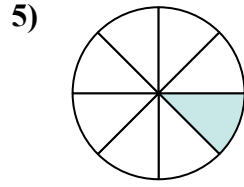
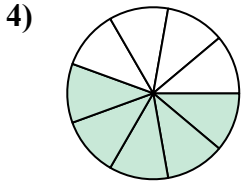
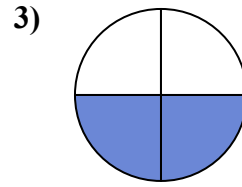
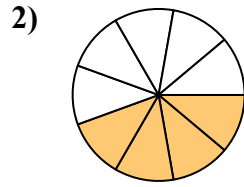
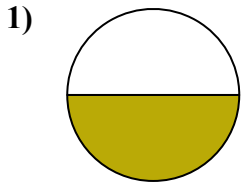




Tìm góc (tính bằng độ) của phần bóng mờ của hình tròn.

Câu trả lời

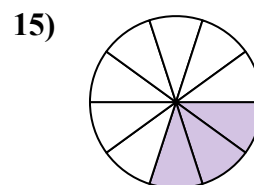
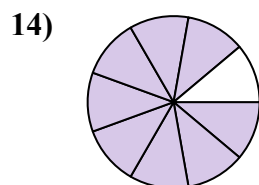
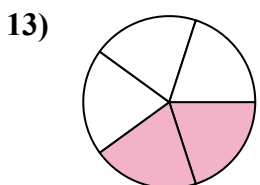
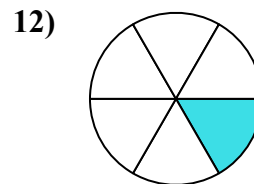
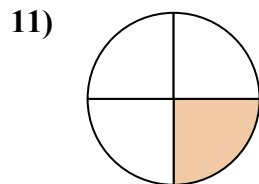
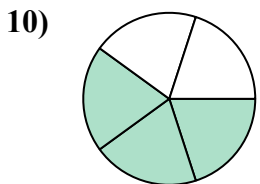
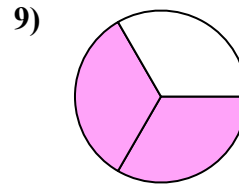
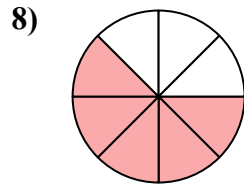
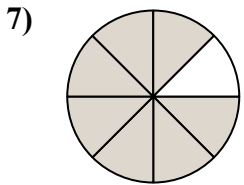
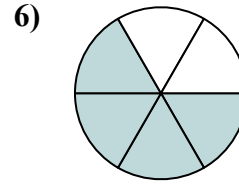
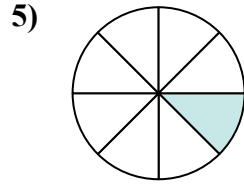
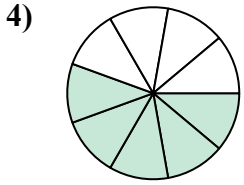
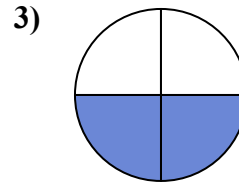
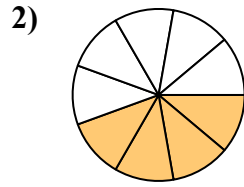
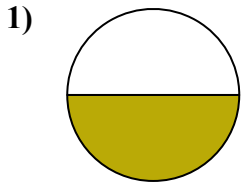


1. _____
2. _____
3. _____
4. _____
5. _____
6. _____
7. _____
8. _____
9. _____
10. _____
11. _____
12. _____
13. _____
14. _____
15. _____



Tìm góc (tính bằng độ) của phần bóng mờ của hình tròn.

Câu trả lời



1. 180
2. 160
3. 180
4. 200
5. 45
6. 240
7. 315
8. 225
9. 240
10. 216
11. 90
12. 60
13. 144
14. 320
15. 108



Tìm góc (tính bằng độ) của phần bóng mờ của hình tròn.

90	200	240	60	160
216	315	180	45	225
240	180			

Câu trả lời

1. _____
2. _____
3. _____
4. _____
5. _____
6. _____
7. _____
8. _____
9. _____
10. _____
11. _____
12. _____

