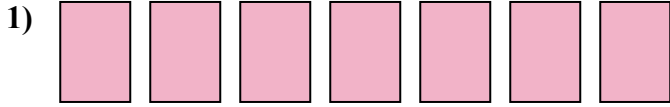


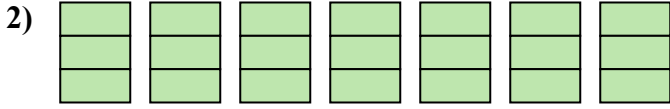


Viết số tiền được tô bóng dưới dạng phân số.

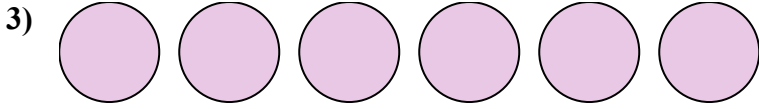
Câu trả lời



1. _____

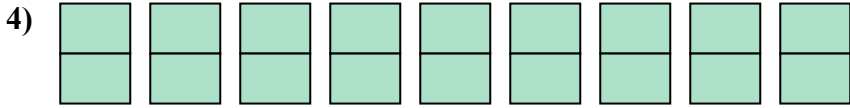


2. _____



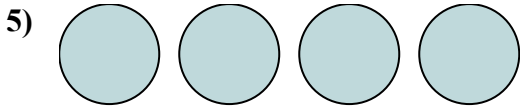
3. _____

4. _____

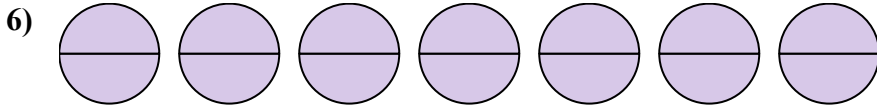


5. _____

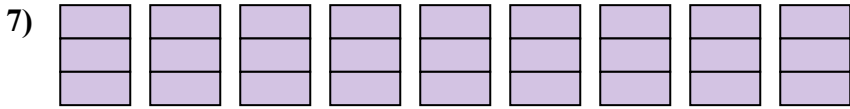
6. _____



7. _____




8. _____

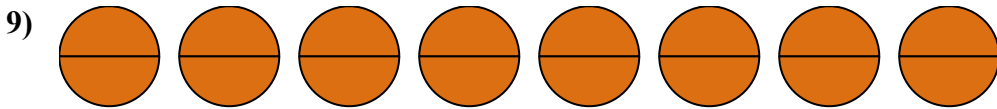


9. _____

10. _____

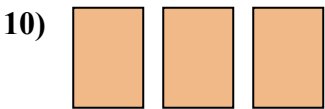


11. _____

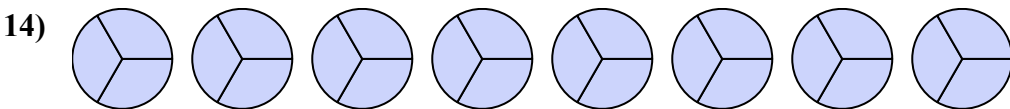
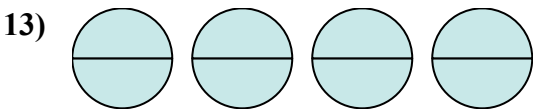
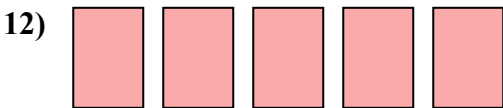
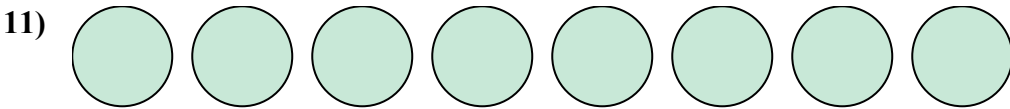


12. _____

13. _____

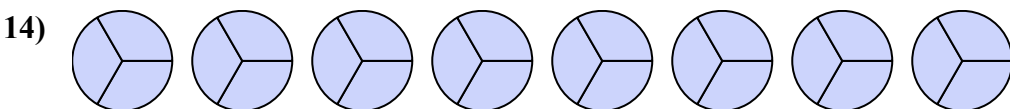
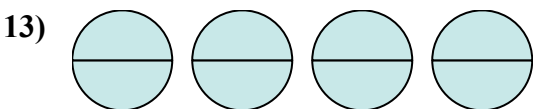
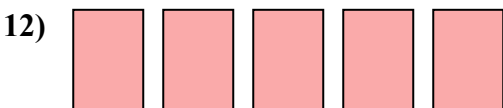
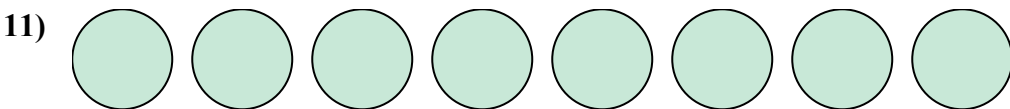
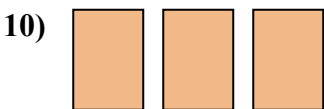
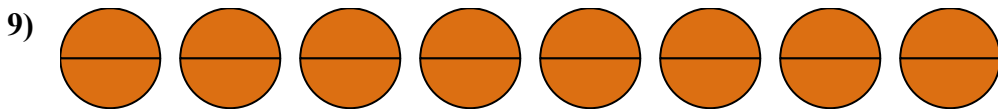
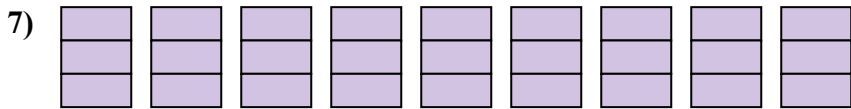
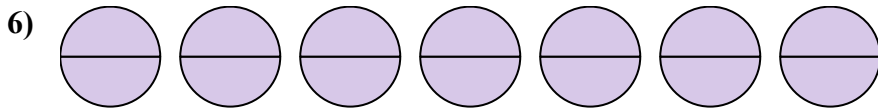
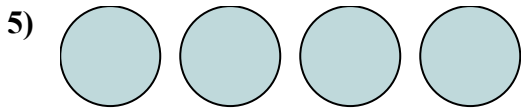
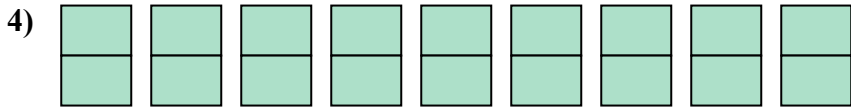
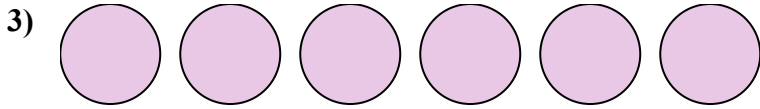
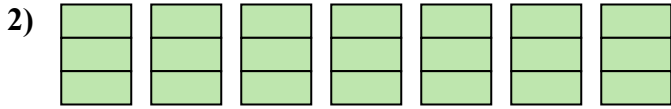
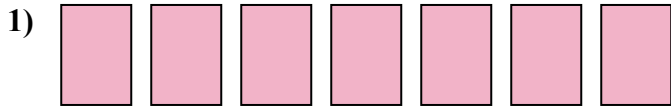


14. _____





Viết số tiền được tô bóng dưới dạng phân số.



Câu trả lời

1. $\frac{7}{2}$

2. $\frac{14}{3}$

3. $\frac{6}{2}$

4. $\frac{18}{2}$

5. $\frac{4}{2}$

6. $\frac{14}{2}$

7. $\frac{27}{3}$

8. $\frac{9}{2}$

9. $\frac{16}{2}$

10. $\frac{3}{2}$

11. $\frac{8}{2}$

12. $\frac{5}{2}$

13. $\frac{8}{2}$

14. $\frac{24}{3}$