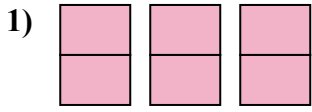





Viết số tiền được tô bóng dưới dạng phân số.

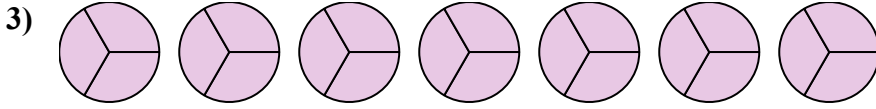
Câu trả lời



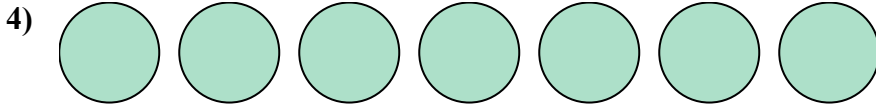
1. _____



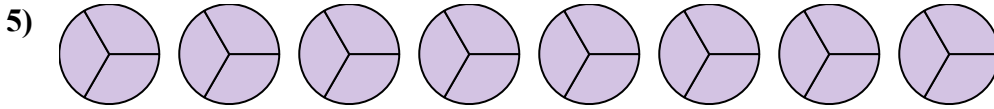
2. _____



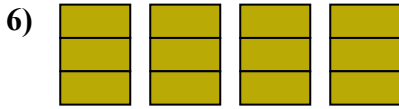
3. _____



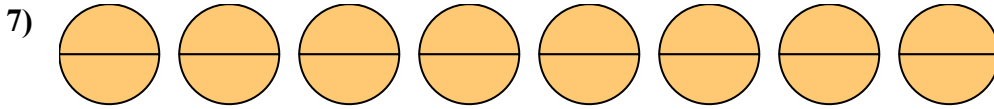
4. _____



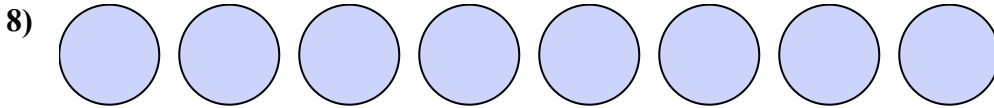
5. _____



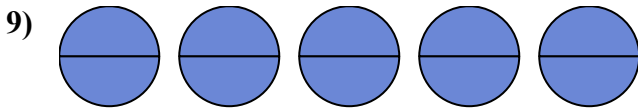
6. _____



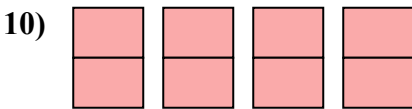
7. _____



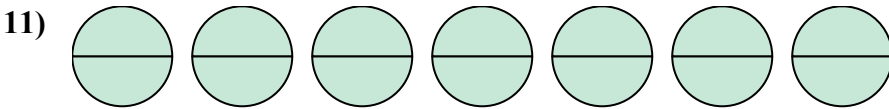
8. _____




9. _____




10. _____



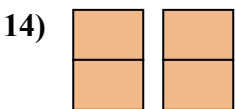
11. _____



12. _____



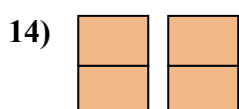
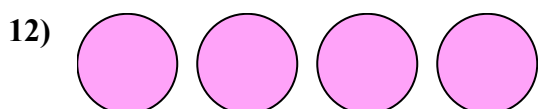
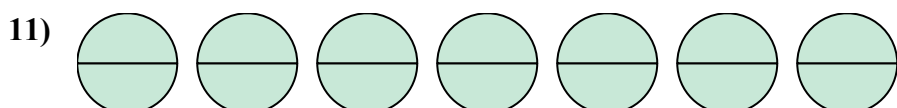
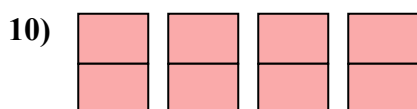
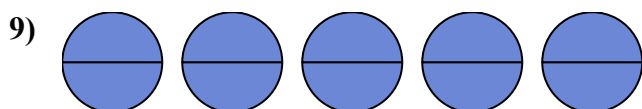
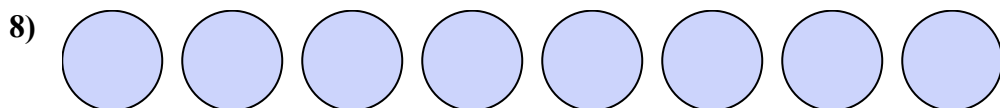
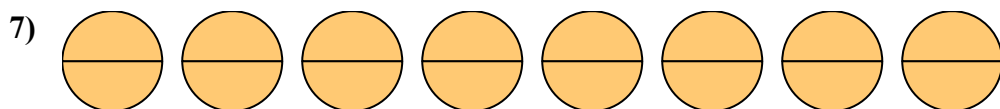
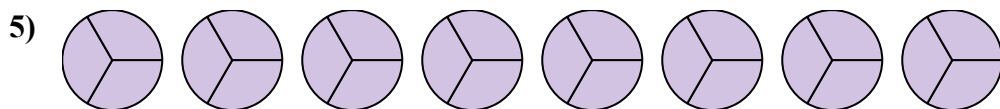
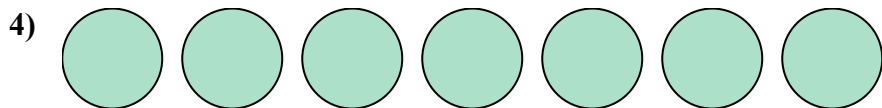
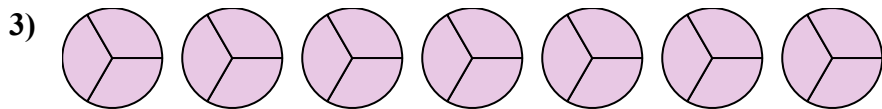
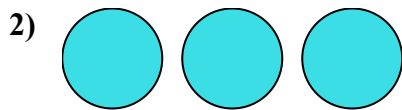
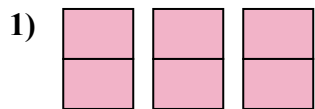
13. _____



14. _____



Viết số tiền được tô bóng dưới dạng phân số.



Câu trả lời

1. $\frac{6}{2}$

2. $\frac{3}{1}$

3. $\frac{21}{3}$

4. $\frac{7}{1}$

5. $\frac{24}{3}$

6. $\frac{12}{3}$

7. $\frac{16}{2}$

8. $\frac{8}{1}$

9. $\frac{10}{2}$

10. $\frac{8}{2}$

11. $\frac{14}{2}$

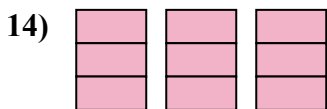
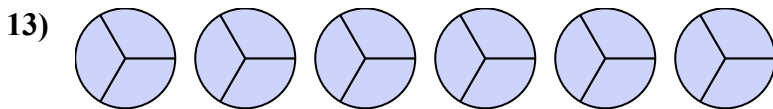
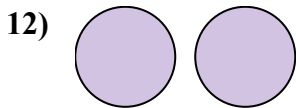
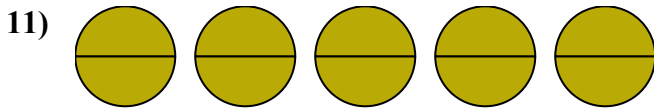
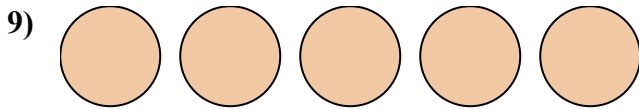
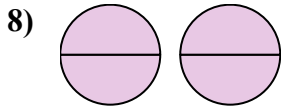
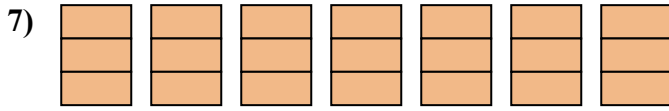
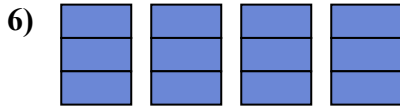
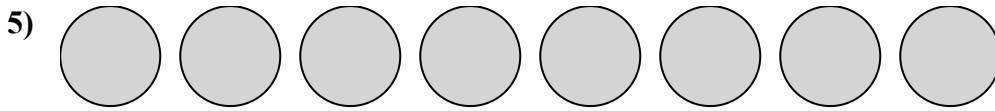
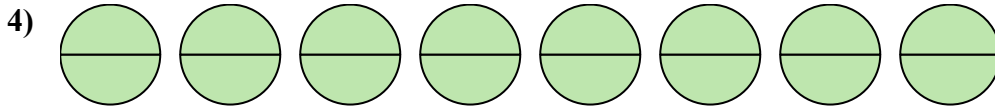
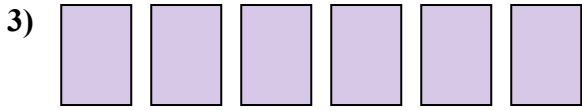
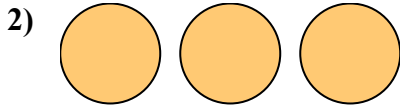
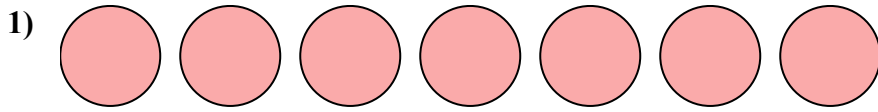
12. $\frac{4}{1}$

13. $\frac{6}{1}$

14. $\frac{4}{2}$



Viết số tiền được tô bóng dưới dạng phân số.



Câu trả lời

1. _____

2. _____

3. _____

4. _____

5. _____

6. _____

7. _____

8. _____

9. _____

10. _____

11. _____

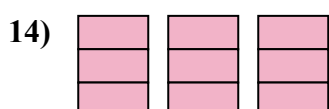
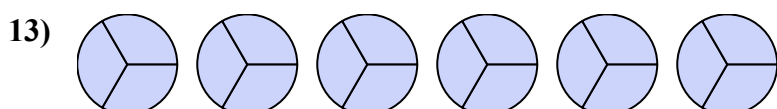
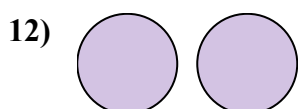
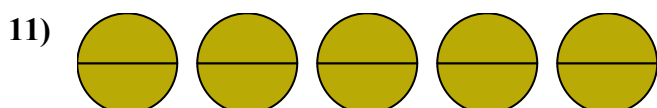
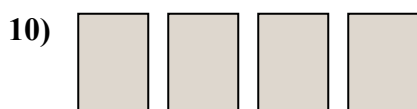
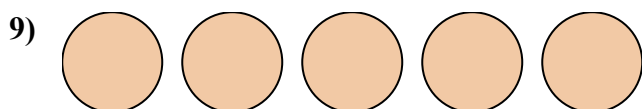
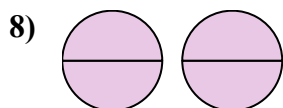
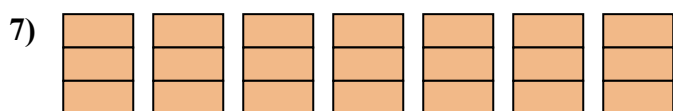
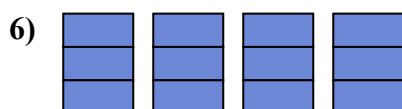
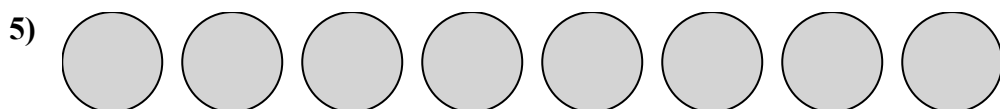
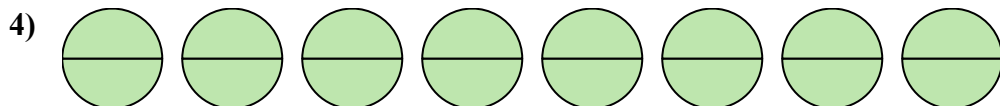

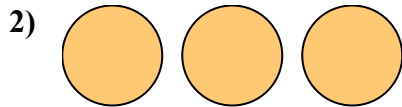
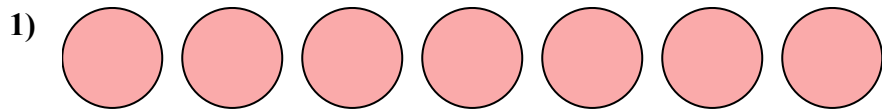
12. _____

13. _____

14. _____



Viết số tiền được tô bóng dưới dạng phân số.



Câu trả lời

1. $\frac{7}{3}$

2. $\frac{3}{2}$

3. $\frac{6}{4}$

4. $\frac{16}{2}$

5. $\frac{8}{2}$

6. $\frac{12}{3}$

7. $\frac{21}{3}$

8. $\frac{4}{2}$

9. $\frac{5}{1}$

10. $\frac{4}{1}$

11. $\frac{10}{2}$

12. $\frac{2}{1}$

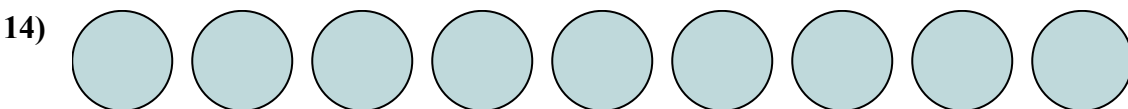
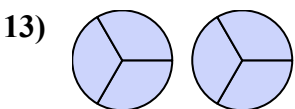
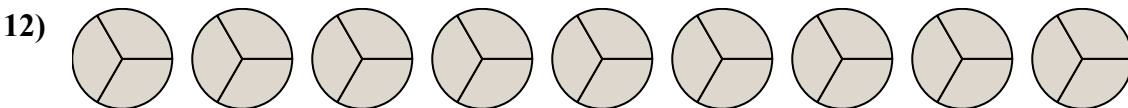
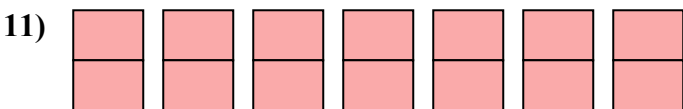
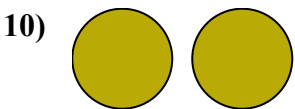
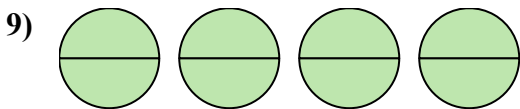
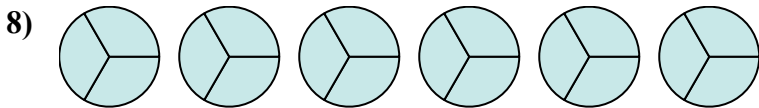
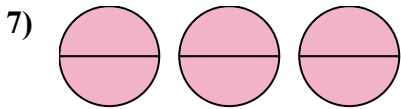

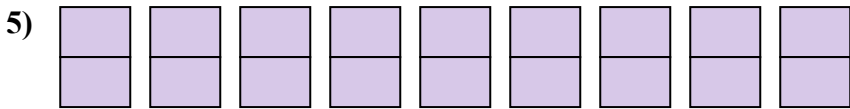
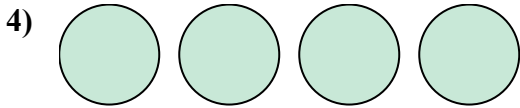
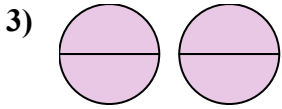
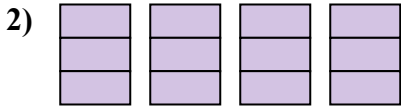
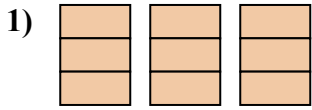
13. $\frac{18}{3}$

14. $\frac{9}{3}$



Viết số tiền được tô bóng dưới dạng phân số.

Câu trả lời



1. _____

2. _____

3. _____

4. _____

5. _____

6. _____

7. _____

8. _____

9. _____

10. _____

11. _____

12. _____

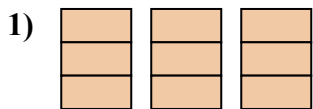
13. _____

14. _____

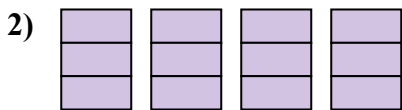


Viết số tiền được tô bóng dưới dạng phân số.

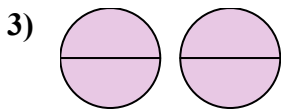
Câu trả lời



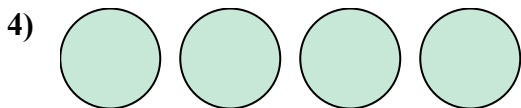
1. $\frac{9}{3}$



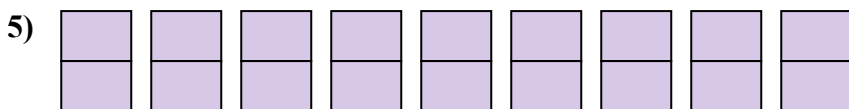
2. $\frac{12}{3}$



3. $\frac{4}{2}$



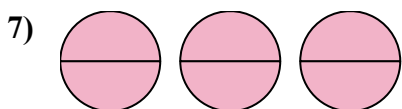
4. $\frac{4}{1}$



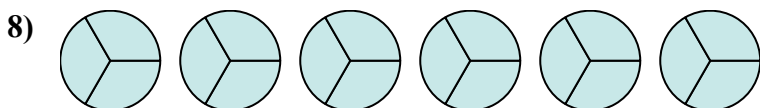
5. $\frac{18}{2}$



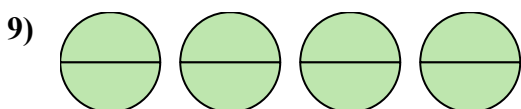
6. $\frac{6}{1}$




7. $\frac{6}{2}$



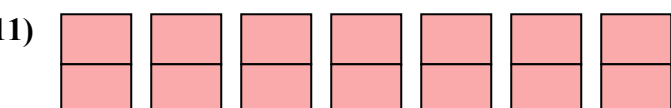
8. $\frac{18}{3}$



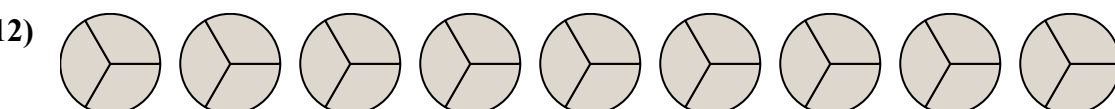
9. $\frac{8}{2}$



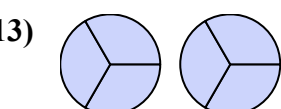
10. $\frac{2}{1}$



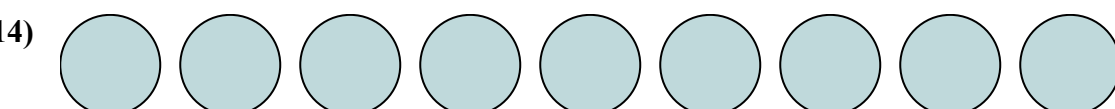
11. $\frac{14}{2}$



12. $\frac{27}{3}$



13. $\frac{6}{3}$

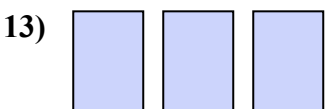
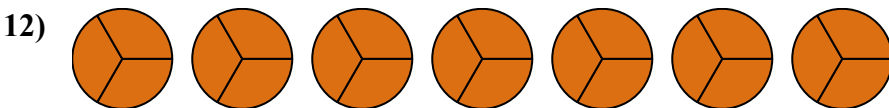
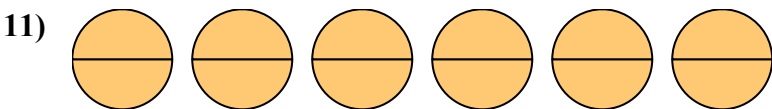
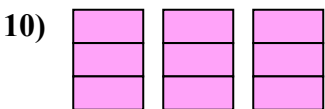
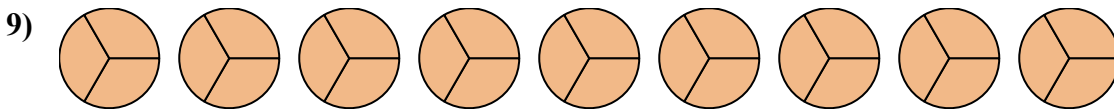
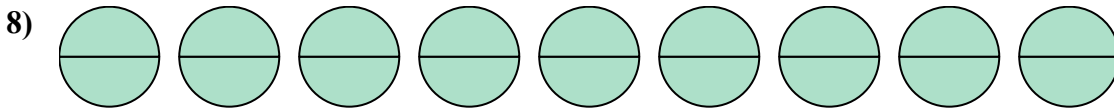
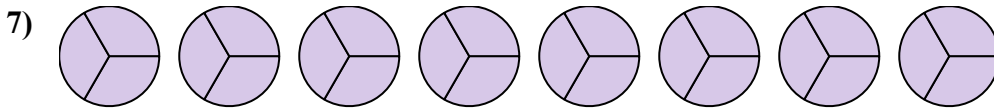
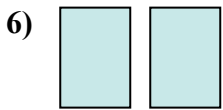
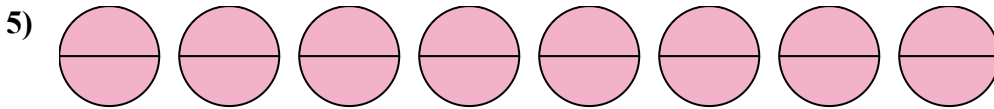

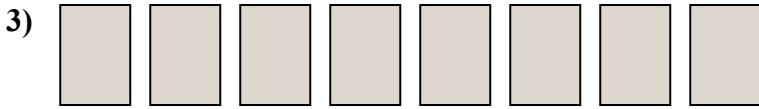
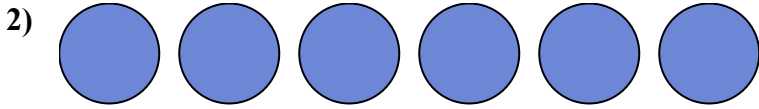
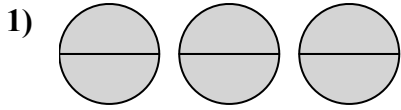


14. $\frac{9}{1}$



Viết số tiền được tô bóng dưới dạng phân số.

Câu trả lời

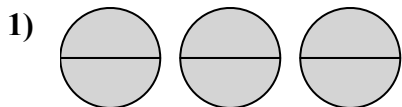


1. _____
2. _____
3. _____
4. _____
5. _____
6. _____
7. _____
8. _____
9. _____
10. _____
11. _____
12. _____
13. _____
14. _____

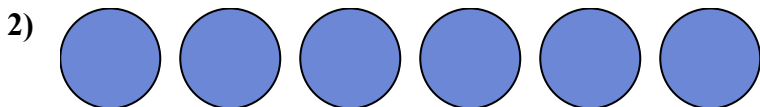


Viết số tiền được tô bóng dưới dạng phân số.

Câu trả lời




1. $\frac{6}{2}$



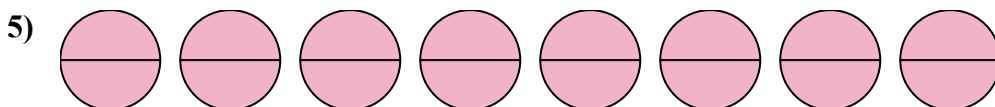
2. $\frac{6}{1}$



3. $\frac{8}{1}$



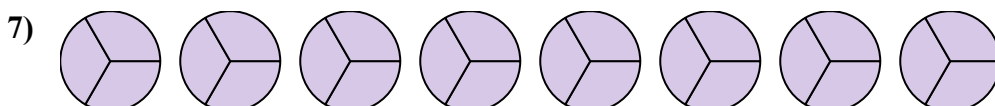
4. $\frac{4}{1}$



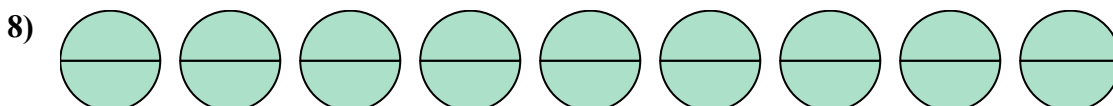
5. $\frac{16}{2}$



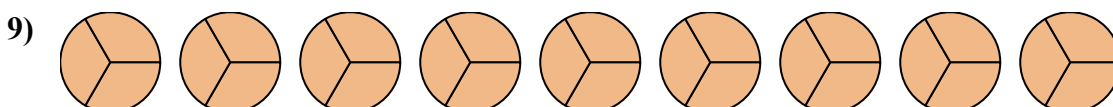
6. $\frac{2}{1}$



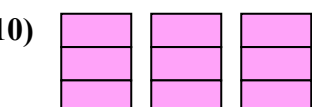
7. $\frac{24}{3}$



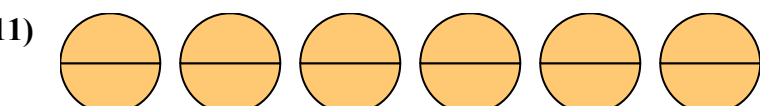
8. $\frac{18}{2}$



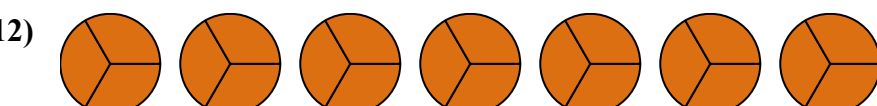
9. $\frac{27}{3}$



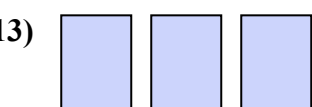
10. $\frac{9}{3}$



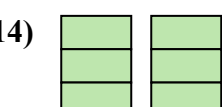
11. $\frac{12}{2}$



12. $\frac{21}{3}$



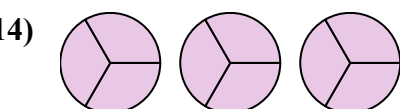
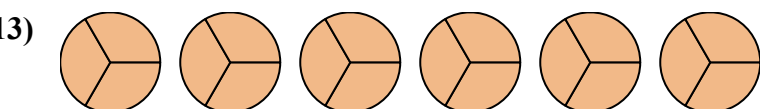

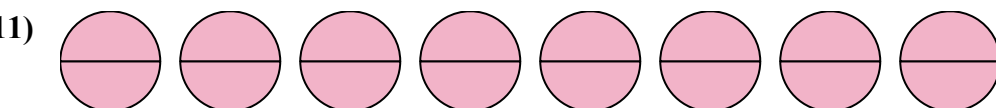
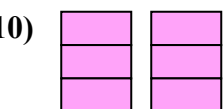
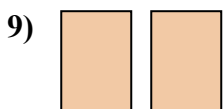
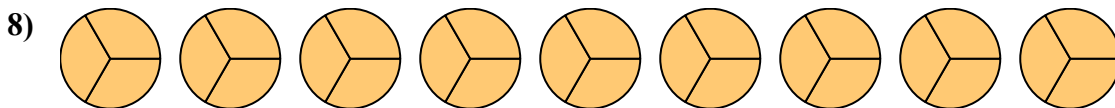
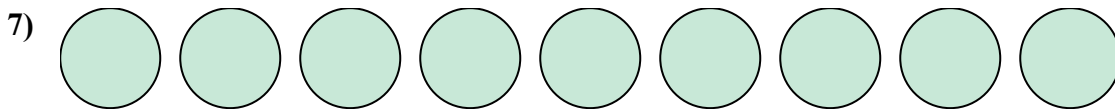

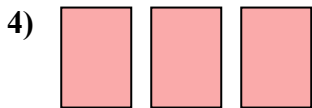
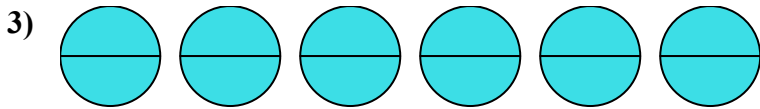
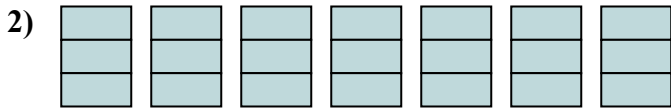
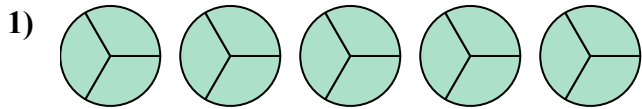
13. $\frac{3}{1}$



14. $\frac{6}{3}$



Viết số tiền được tô bóng dưới dạng phân số.

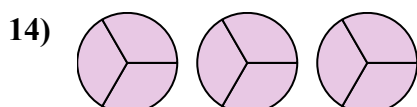
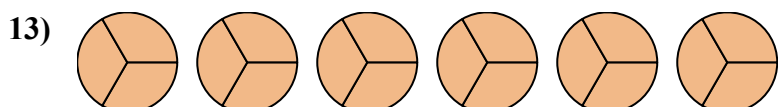
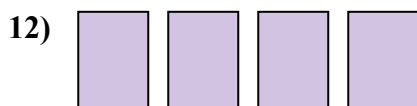
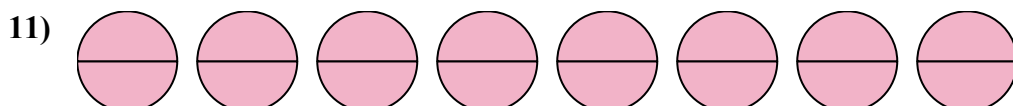
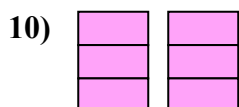
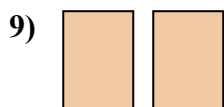
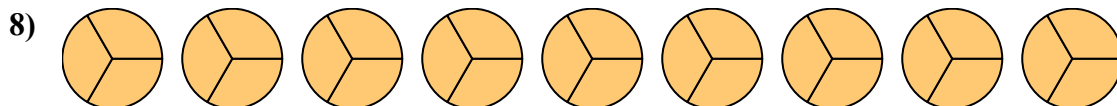
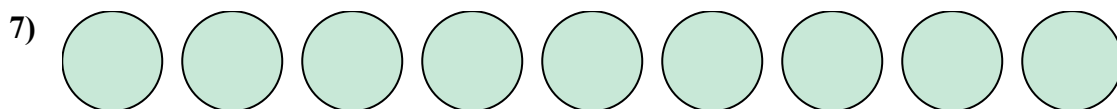
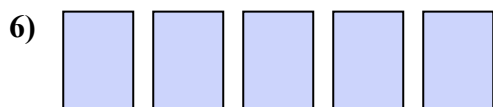

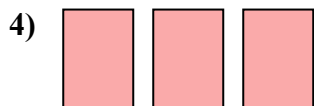
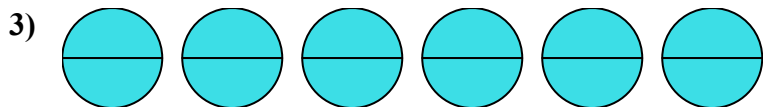
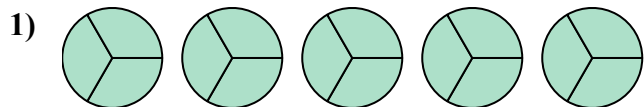


Câu trả lời

1. _____
2. _____
3. _____
4. _____
5. _____
6. _____
7. _____
8. _____
9. _____
10. _____
11. _____
12. _____
13. _____
14. _____



Viết số tiền được tô bóng dưới dạng phân số.



Câu trả lời

1. $\frac{15}{3}$

2. $\frac{21}{3}$

3. $\frac{12}{2}$

4. $\frac{3}{1}$

5. $\frac{4}{2}$

6. $\frac{5}{1}$

7. $\frac{9}{1}$

8. $\frac{27}{3}$

9. $\frac{2}{1}$

10. $\frac{6}{3}$

11. $\frac{16}{2}$

12. $\frac{4}{1}$

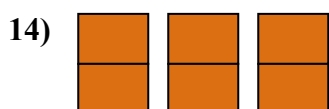
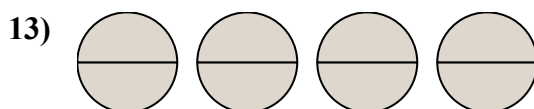
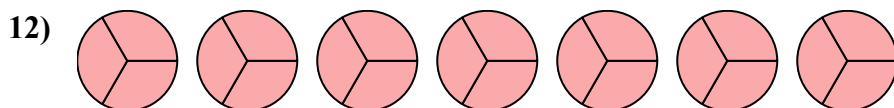
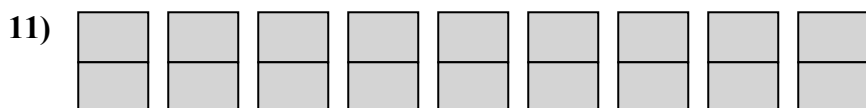
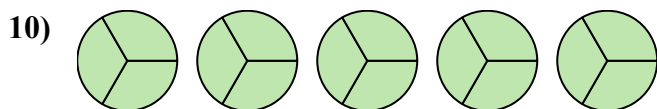
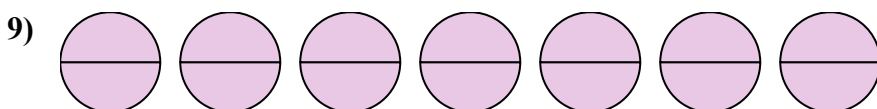
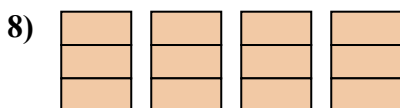
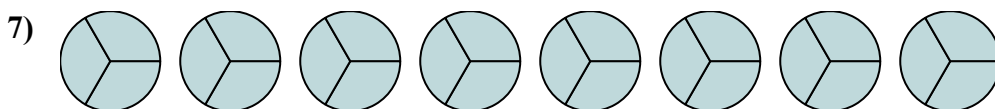
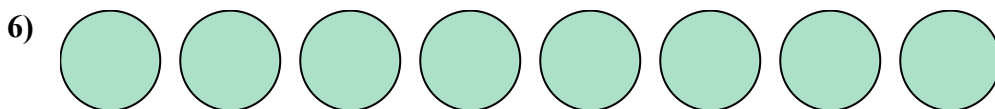
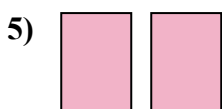
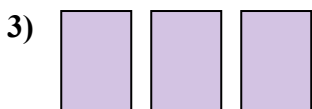
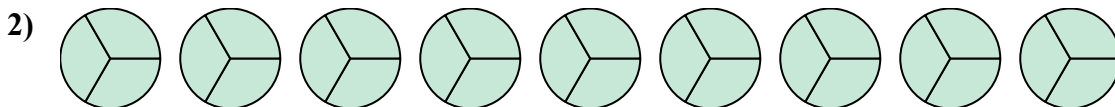
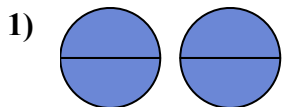
13. $\frac{18}{3}$

14. $\frac{9}{3}$

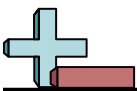


Viết số tiền được tô bóng dưới dạng phân số.

Câu trả lời

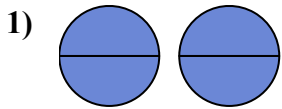


1. _____
2. _____
3. _____
4. _____
5. _____
6. _____
7. _____
8. _____
9. _____
10. _____
11. _____
12. _____
13. _____
14. _____

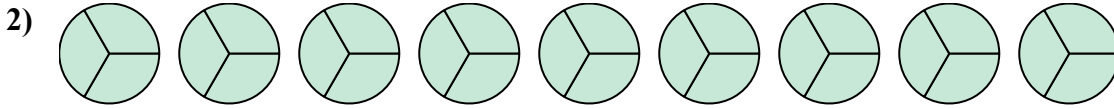


Viết số tiền được tô bóng dưới dạng phân số.

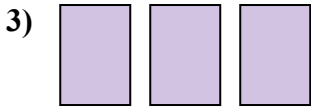
Câu trả lời




1. $\frac{4}{2}$



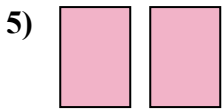
2. $\frac{27}{3}$



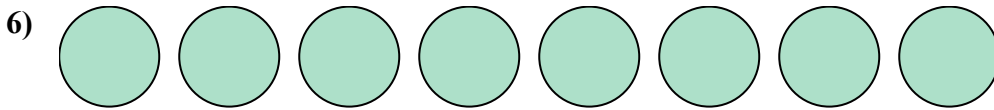
3. $\frac{3}{1}$



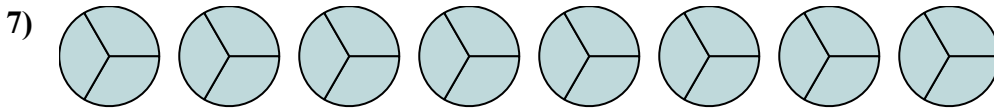
4. $\frac{7}{1}$



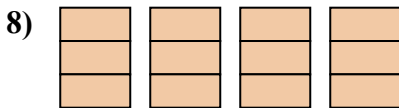
5. $\frac{2}{1}$



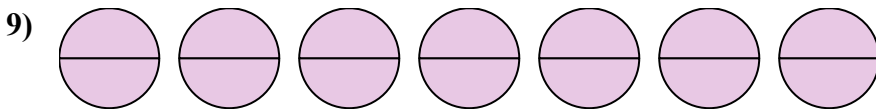
6. $\frac{8}{1}$



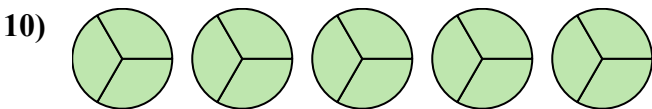
7. $\frac{24}{3}$



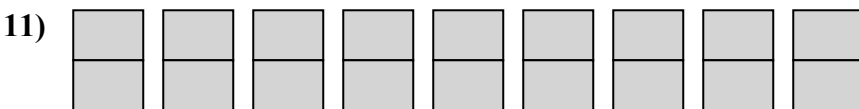
8. $\frac{12}{3}$



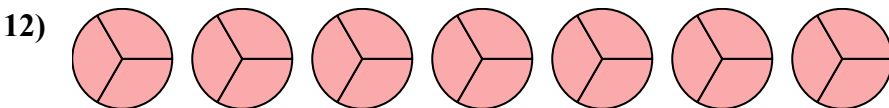
9. $\frac{14}{2}$



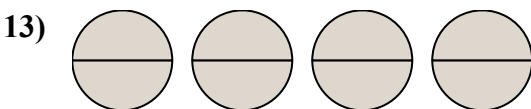
10. $\frac{15}{3}$



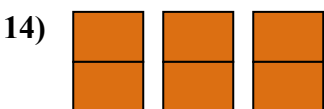
11. $\frac{18}{2}$



12. $\frac{21}{3}$



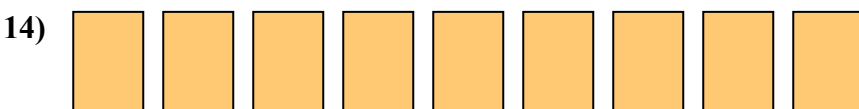
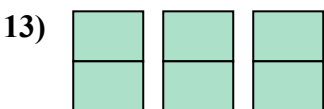
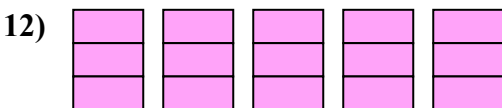
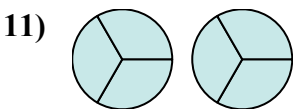
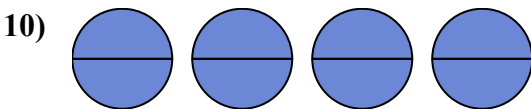
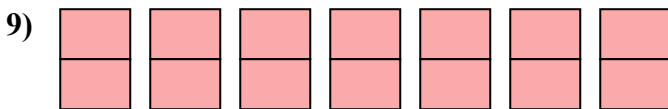
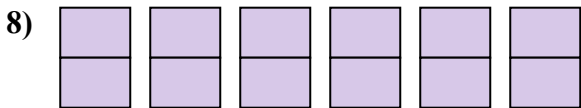
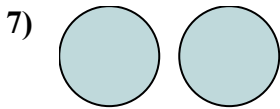
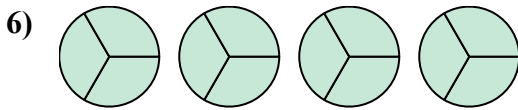
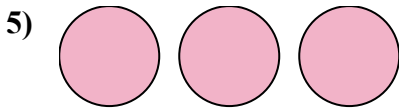

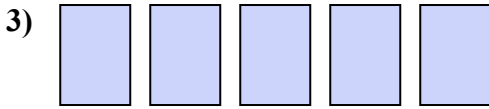
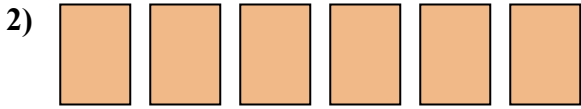
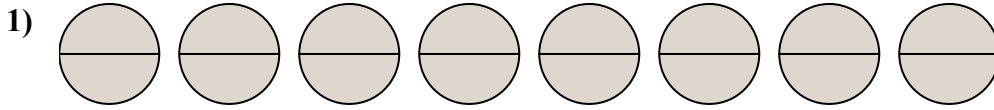
13. $\frac{8}{2}$



14. $\frac{6}{2}$



Viết số tiền được tô bóng dưới dạng phân số.



Câu trả lời

1. _____

2. _____

3. _____

4. _____

5. _____

6. _____

7. _____

8. _____

9. _____

10. _____

11. _____

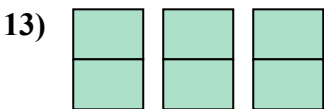
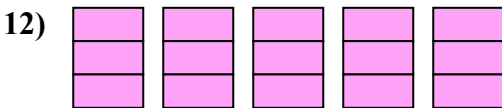
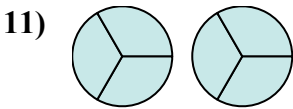
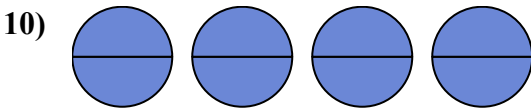
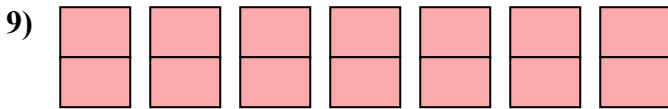
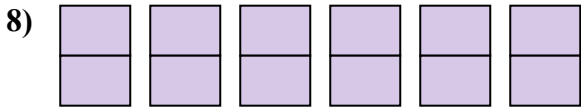
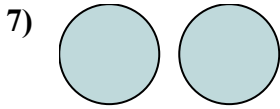
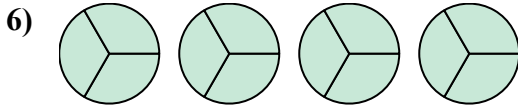
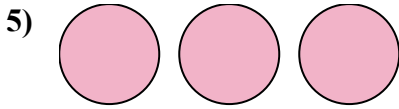

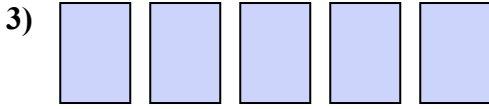
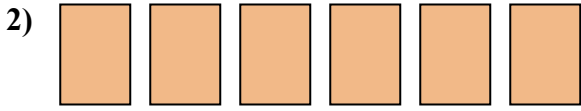
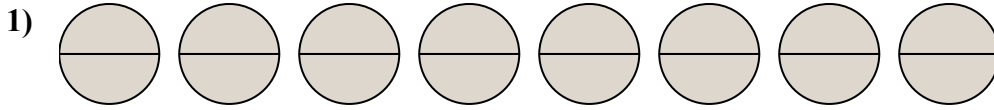
12. _____

13. _____

14. _____



Viết số tiền được tô bóng dưới dạng phân số.



Câu trả lời

1. $\frac{16}{2}$

2. $\frac{6}{1}$

3. $\frac{5}{1}$

4. $\frac{4}{1}$

5. $\frac{3}{1}$

6. $\frac{12}{3}$

7. $\frac{2}{1}$

8. $\frac{12}{2}$

9. $\frac{14}{2}$

10. $\frac{8}{2}$

11. $\frac{6}{3}$

12. $\frac{15}{3}$

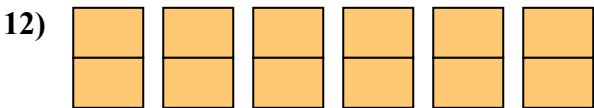
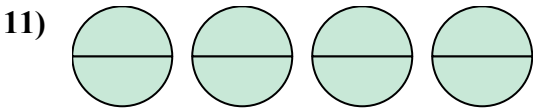
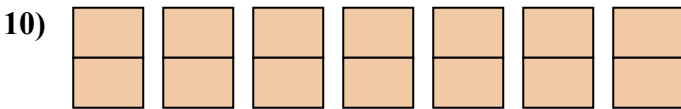
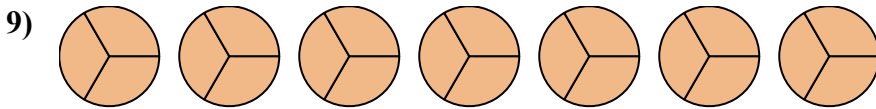
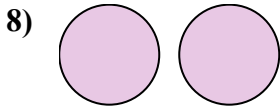
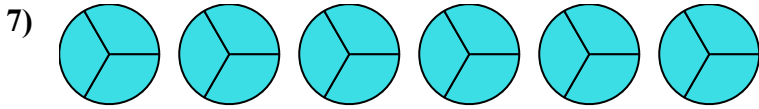
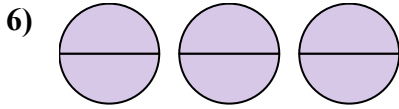
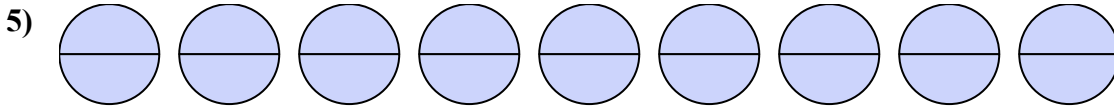
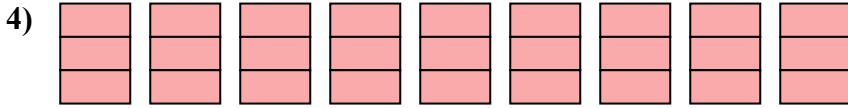
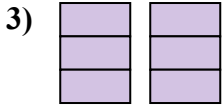
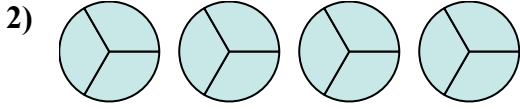
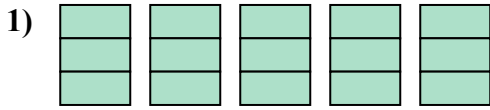
13. $\frac{6}{2}$

14. $\frac{9}{1}$



Viết số tiền được tô bóng dưới dạng phân số.

Câu trả lời



1. _____

2. _____

3. _____

4. _____

5. _____

6. _____

7. _____

8. _____

9. _____

10. _____

11. _____

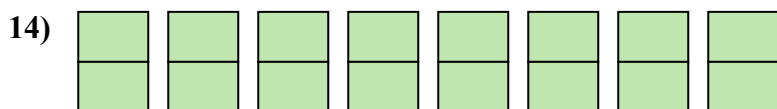
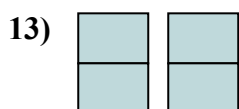
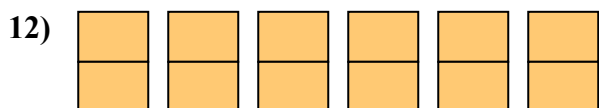
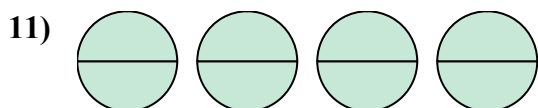
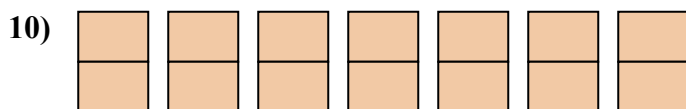
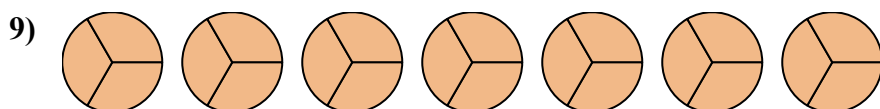
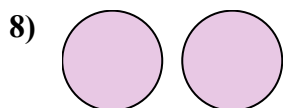
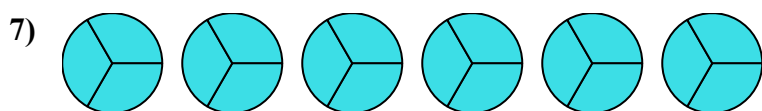
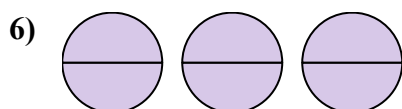
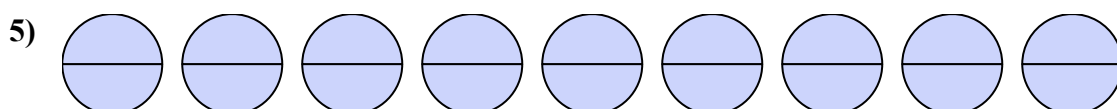
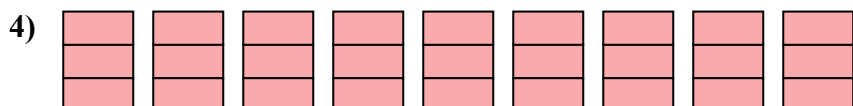
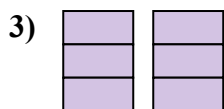
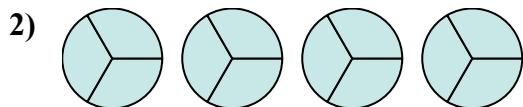
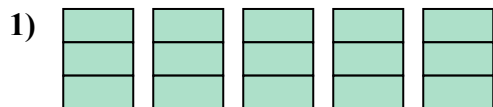
12. _____

13. _____

14. _____



Viết số tiền được tô bóng dưới dạng phân số.



Câu trả lời

1. $\frac{15}{3}$

2. $\frac{12}{3}$

3. $\frac{6}{3}$

4. $\frac{27}{3}$

5. $\frac{18}{2}$

6. $\frac{6}{2}$

7. $\frac{18}{3}$

8. $\frac{2}{1}$

9. $\frac{21}{3}$

10. $\frac{14}{2}$

11. $\frac{8}{2}$

12. $\frac{12}{2}$

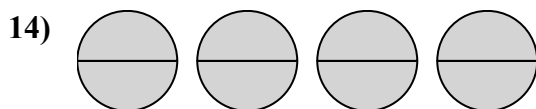
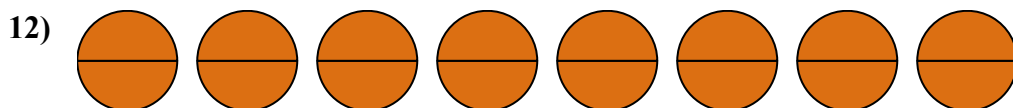
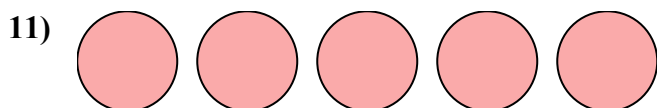
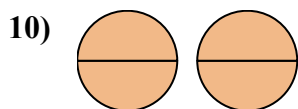
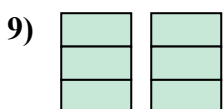
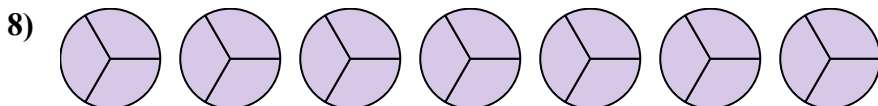
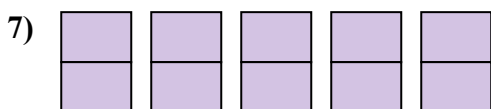
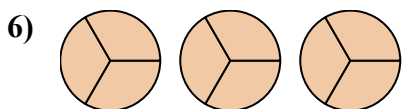
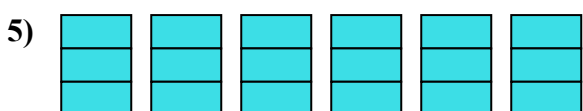
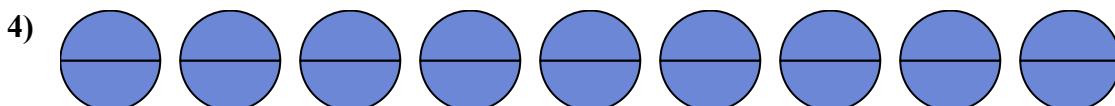
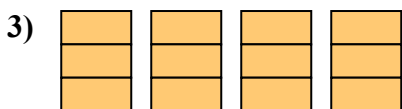
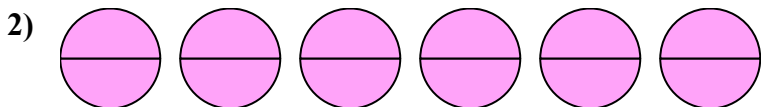

13. $\frac{4}{2}$

14. $\frac{16}{2}$



Viết số tiền được tô bóng dưới dạng phân số.

Câu trả lời



1. _____

2. _____

3. _____

4. _____

5. _____

6. _____

7. _____

8. _____

9. _____

10. _____

11. _____

12. _____

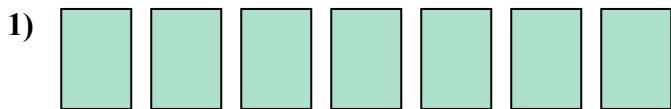
13. _____

14. _____

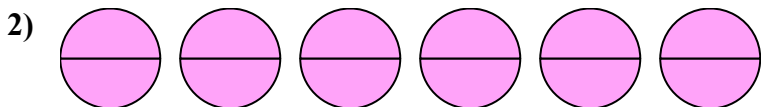


Viết số tiền được tô bóng dưới dạng phân số.

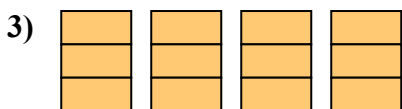
Câu trả lời



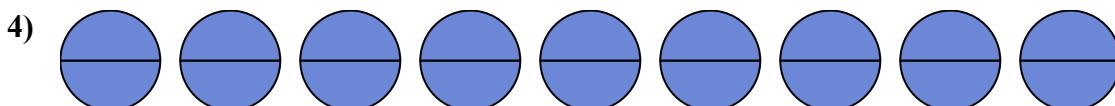
1. $\frac{7}{1}$



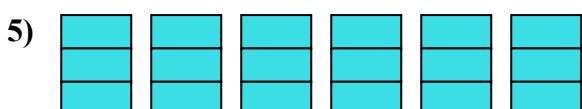
2. $\frac{12}{2}$



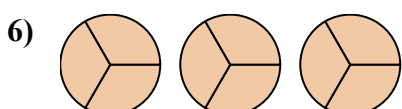
3. $\frac{12}{3}$



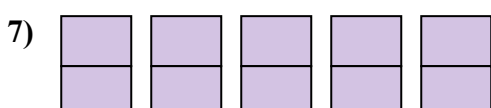
4. $\frac{18}{2}$



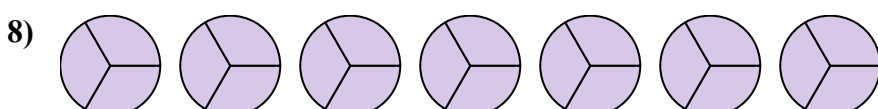
5. $\frac{18}{3}$



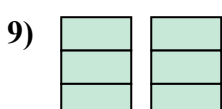
6. $\frac{9}{3}$



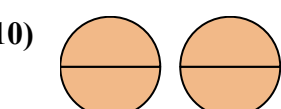
7. $\frac{10}{2}$



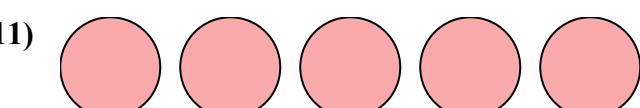
8. $\frac{21}{3}$



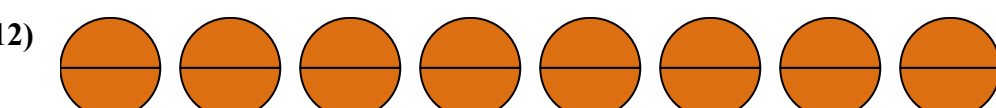
9. $\frac{6}{3}$



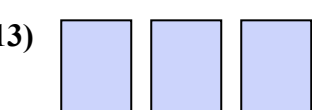
10. $\frac{4}{2}$



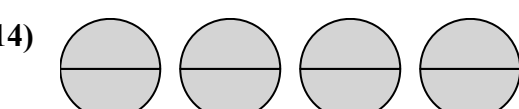
11. $\frac{5}{1}$



12. $\frac{16}{2}$



13. $\frac{3}{1}$




14. $\frac{8}{2}$

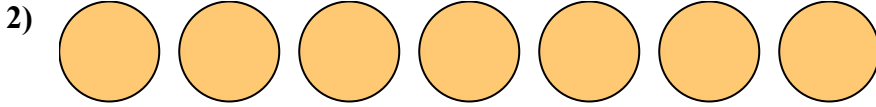


Viết số tiền được tô bóng dưới dạng phân số.


Câu trả lời



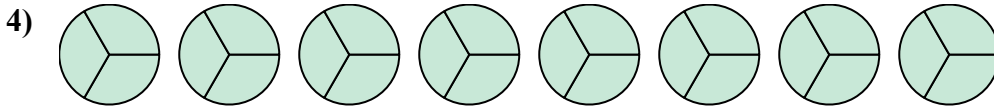
1. _____



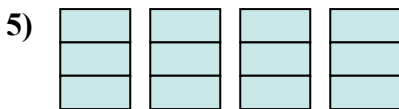
2. _____



3. _____



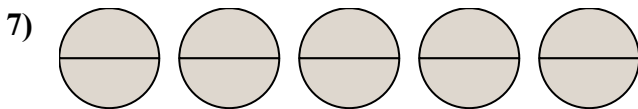
4. _____



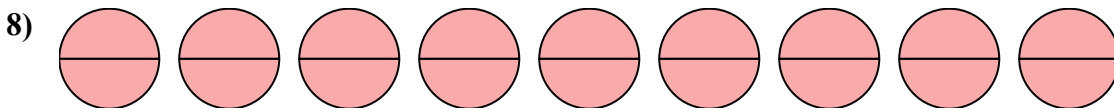
5. _____




6. _____



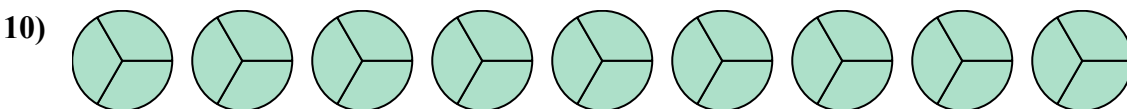
7. _____



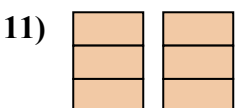
8. _____



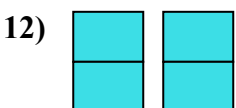
9. _____



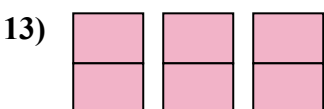
10. _____



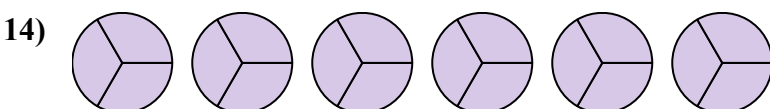
11. _____



12. _____



13. _____




14. _____

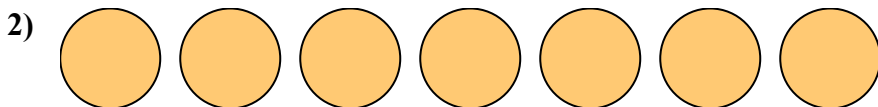


Viết số tiền được tô bóng dưới dạng phân số.


Câu trả lời



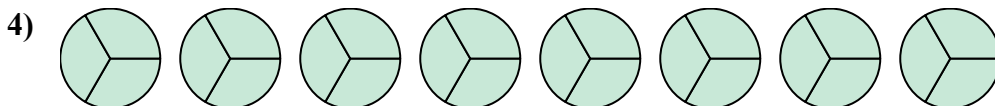
1. $\frac{12}{2}$



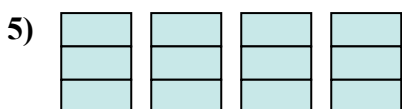
2. $\frac{7}{1}$



3. $\frac{4}{1}$



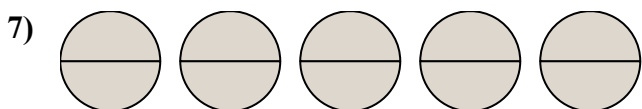
4. $\frac{24}{3}$



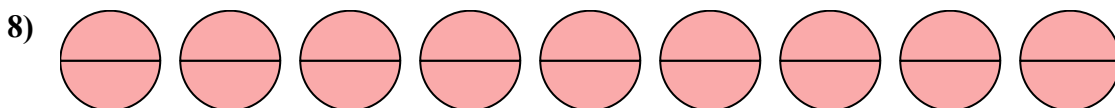
5. $\frac{12}{3}$




6. $\frac{6}{1}$



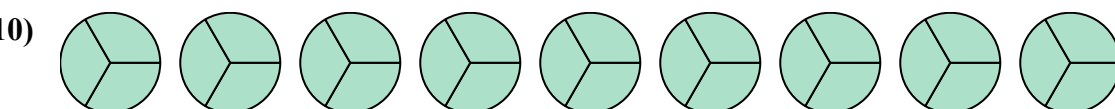
7. $\frac{10}{2}$



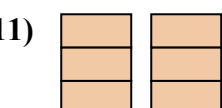
8. $\frac{18}{2}$



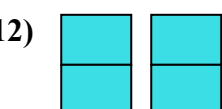
9. $\frac{3}{1}$



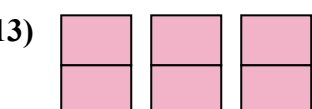
10. $\frac{27}{3}$



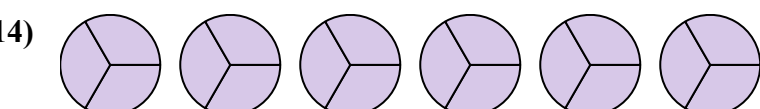
11. $\frac{6}{3}$



12. $\frac{4}{2}$



13. $\frac{6}{2}$



14. $\frac{18}{3}$