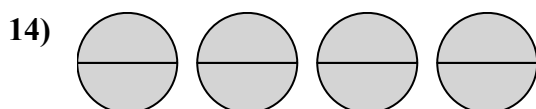
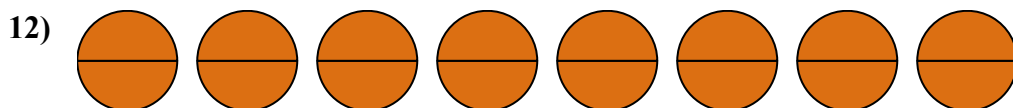
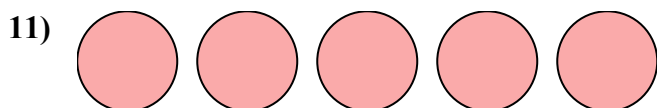
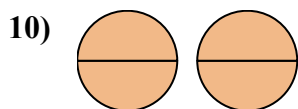
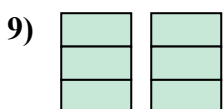
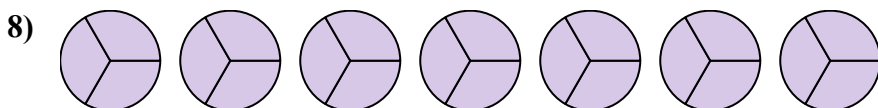
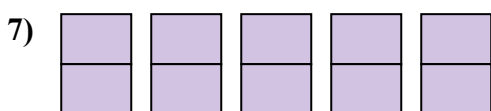
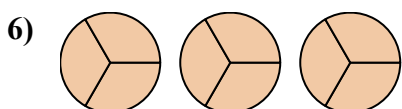
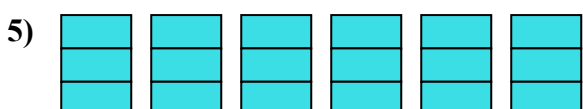
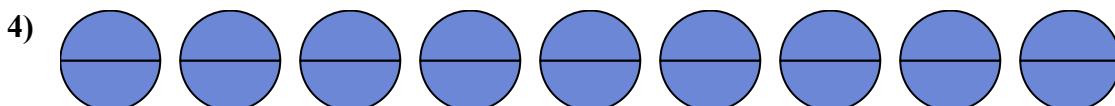
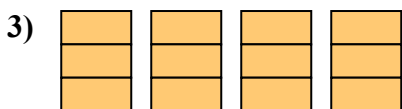
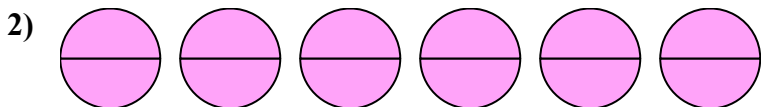
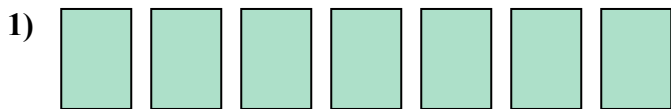




Viết số tiền được tô bóng dưới dạng phân số.

Câu trả lời

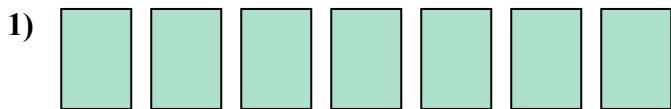


1. _____
2. _____
3. _____
4. _____
5. _____
6. _____
7. _____
8. _____
9. _____
10. _____
11. _____
12. _____
13. _____
14. _____

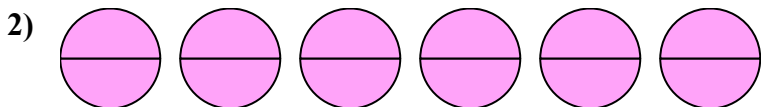


Viết số tiền được tô bóng dưới dạng phân số.

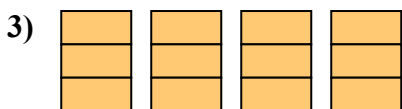
Câu trả lời



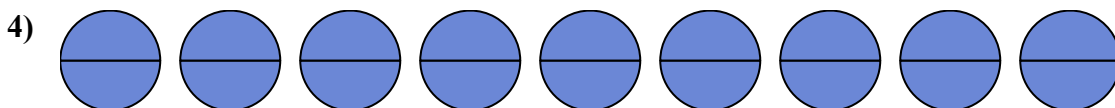
1. $\frac{7}{1}$



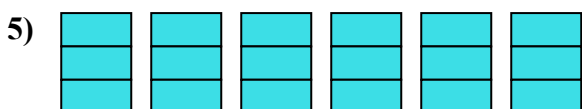
2. $\frac{12}{2}$



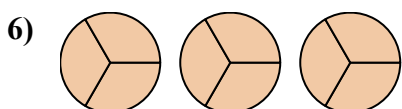
3. $\frac{12}{3}$



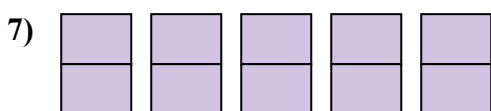
4. $\frac{18}{2}$



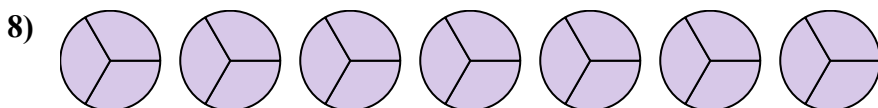
5. $\frac{18}{3}$



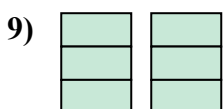
6. $\frac{9}{3}$



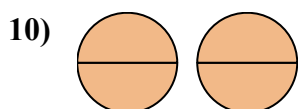
7. $\frac{10}{2}$



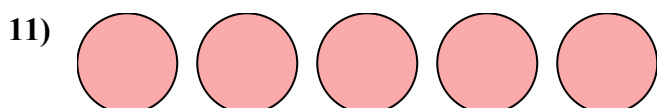
8. $\frac{21}{3}$



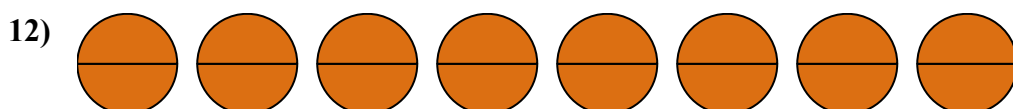
9. $\frac{6}{3}$



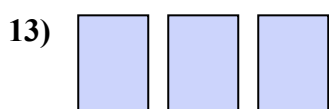
10. $\frac{4}{2}$



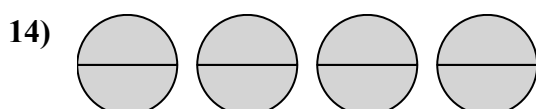
11. $\frac{5}{1}$



12. $\frac{16}{2}$



13. $\frac{3}{1}$



14. $\frac{8}{2}$