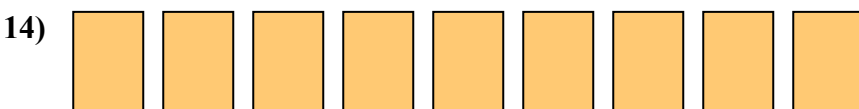
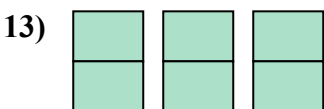
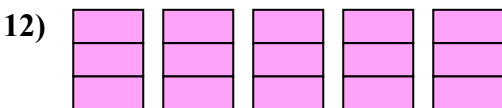
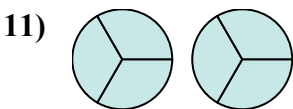
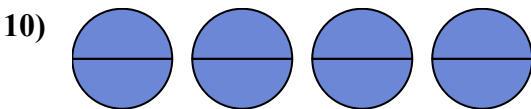
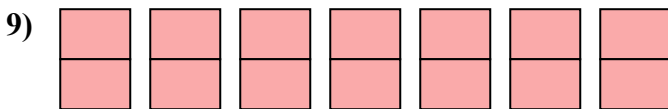
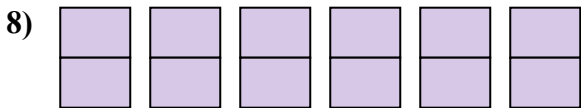
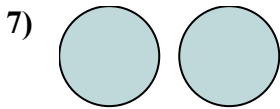
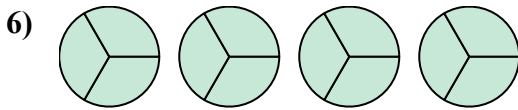
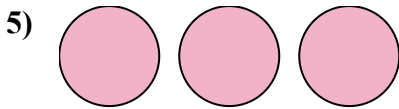

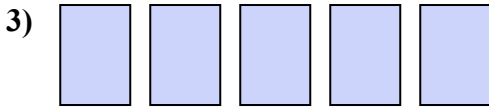
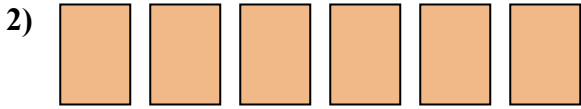
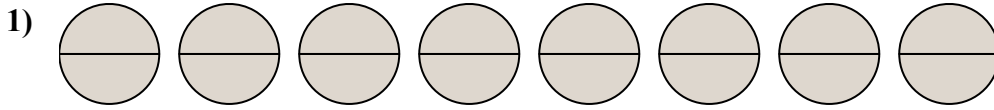




Viết số tiền được tô bóng dưới dạng phân số.

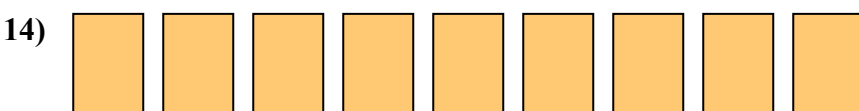
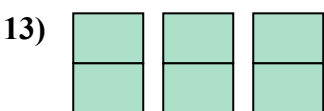
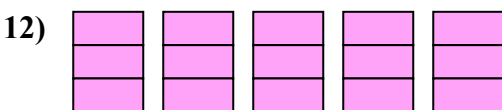
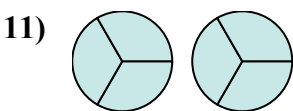
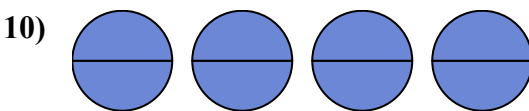
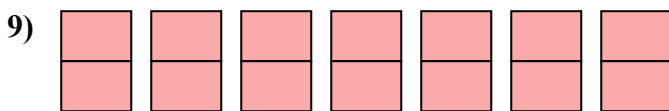
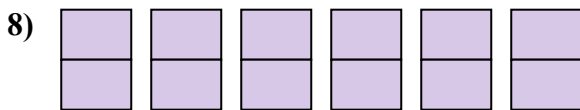
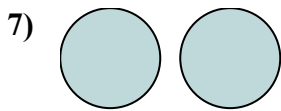
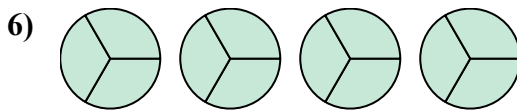
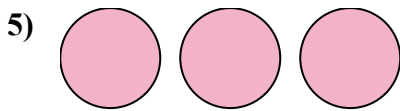

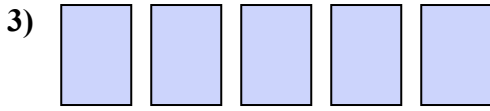
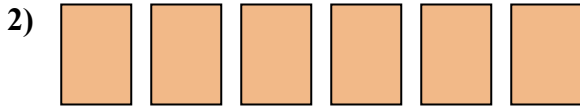
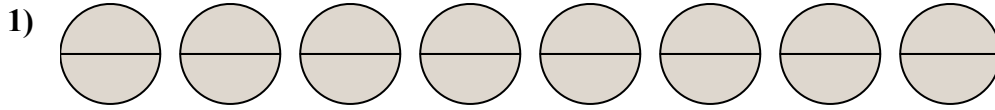


**Câu trả lời**

1. \_\_\_\_\_
2. \_\_\_\_\_
3. \_\_\_\_\_
4. \_\_\_\_\_
5. \_\_\_\_\_
6. \_\_\_\_\_
7. \_\_\_\_\_
8. \_\_\_\_\_
9. \_\_\_\_\_
10. \_\_\_\_\_
11. \_\_\_\_\_
12. \_\_\_\_\_
13. \_\_\_\_\_
14. \_\_\_\_\_



Viết số tiền được tô bóng dưới dạng phân số.



**Câu trả lời**

1.  $\frac{16}{2}$

2.  $\frac{6}{1}$

3.  $\frac{5}{1}$

4.  $\frac{4}{1}$

5.  $\frac{3}{1}$

6.  $\frac{12}{3}$

7.  $\frac{2}{1}$

8.  $\frac{12}{2}$

9.  $\frac{14}{2}$

10.  $\frac{8}{2}$

11.  $\frac{6}{3}$

12.  $\frac{15}{3}$

13.  $\frac{6}{2}$

14.  $\frac{9}{1}$