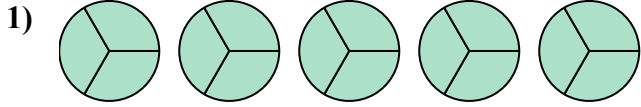


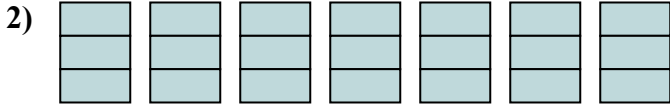


Viết số tiền được tô bóng dưới dạng phân số.

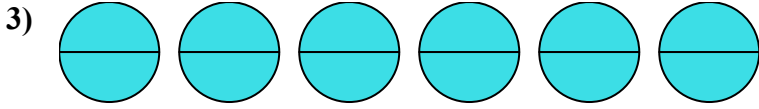
Câu trả lời



1. _____

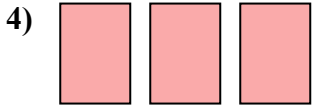


2. _____




3. _____

4. _____

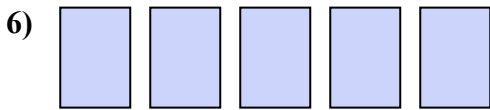


5. _____

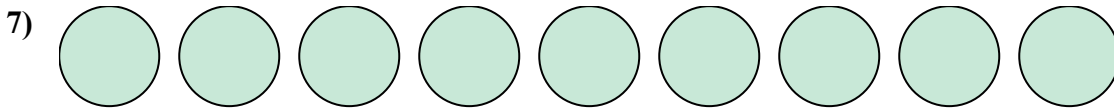


6. _____

7. _____

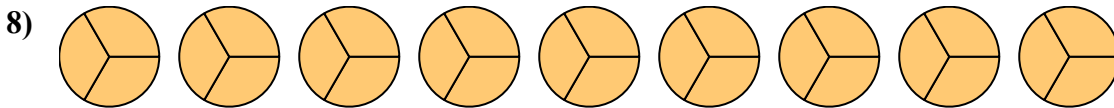


8. _____

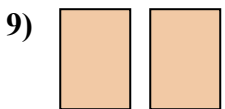


9. _____

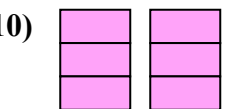
10. _____



11. _____

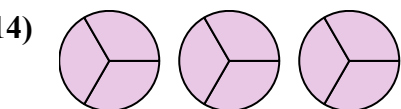
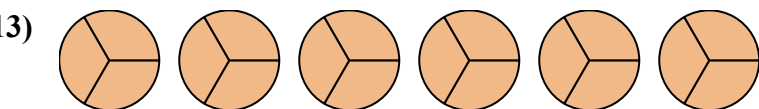

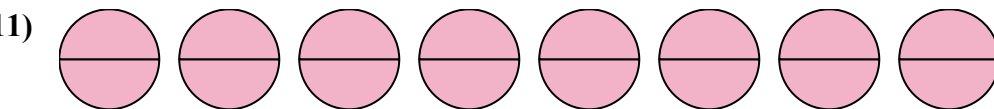


12. _____



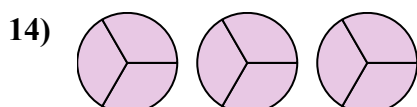
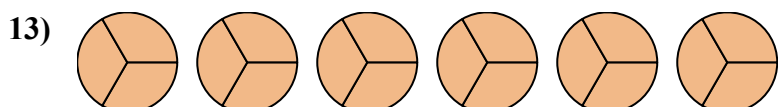
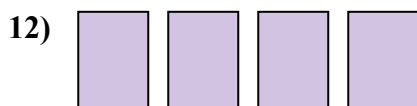
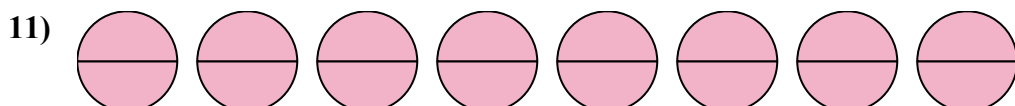
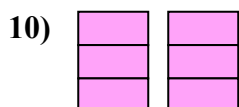
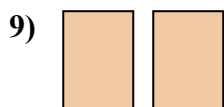
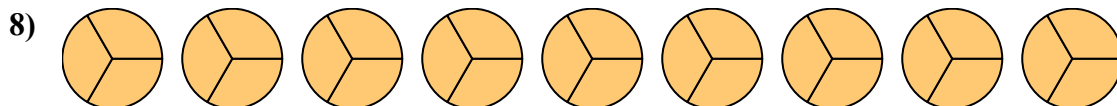
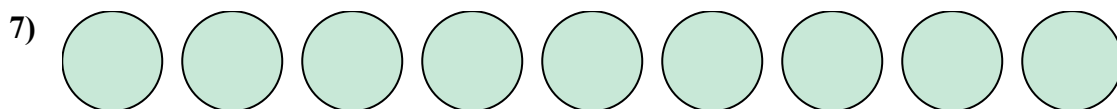
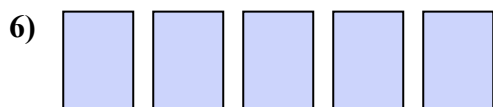

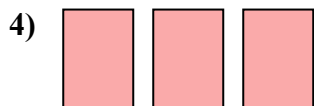
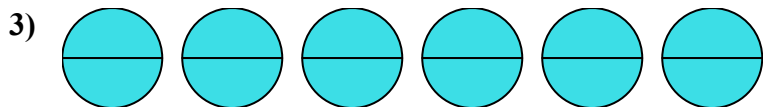
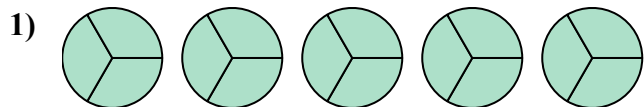
13. _____

14. _____





Viết số tiền được tô bóng dưới dạng phân số.



Câu trả lời

1. $\frac{15}{3}$

2. $\frac{21}{3}$

3. $\frac{12}{2}$

4. $\frac{3}{1}$

5. $\frac{4}{2}$

6. $\frac{5}{1}$

7. $\frac{9}{1}$

8. $\frac{27}{3}$

9. $\frac{2}{1}$

10. $\frac{6}{3}$

11. $\frac{16}{2}$

12. $\frac{4}{1}$

13. $\frac{18}{3}$

14. $\frac{9}{3}$