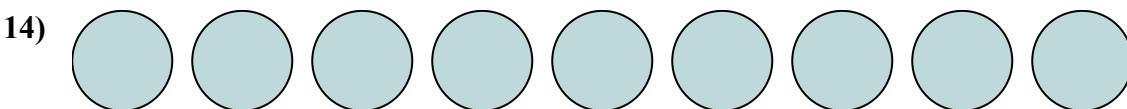
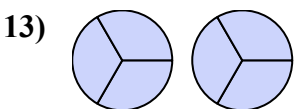
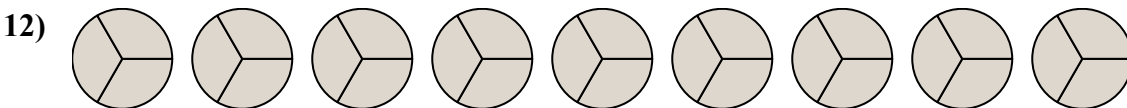
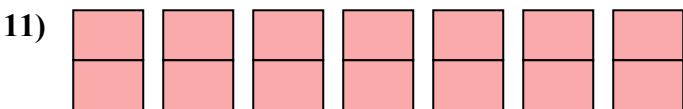
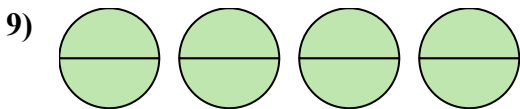
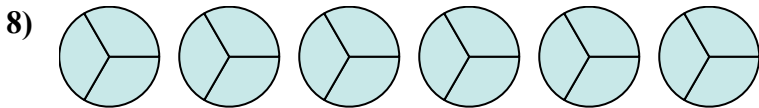
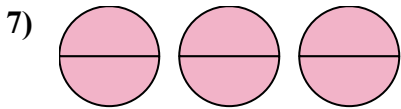

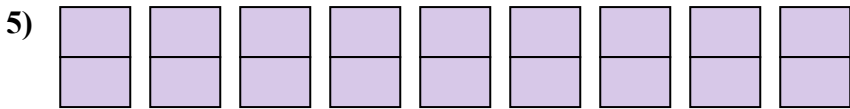
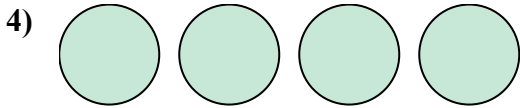
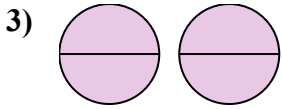
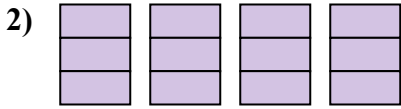
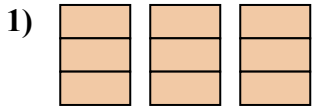




Viết số tiền được tô bóng dưới dạng phân số.

Câu trả lời



1. _____

2. _____

3. _____

4. _____

5. _____

6. _____

7. _____

8. _____

9. _____

10. _____

11. _____

12. _____

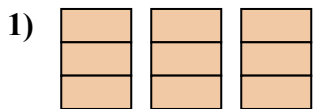
13. _____

14. _____

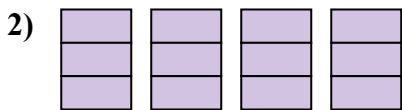


Viết số tiền được tô bóng dưới dạng phân số.

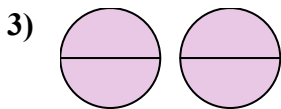
Câu trả lời



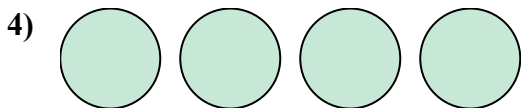
1. $\frac{9}{3}$



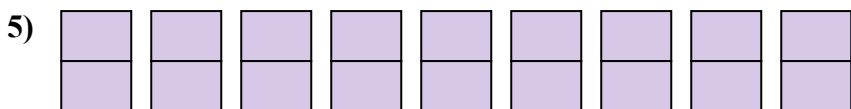
2. $\frac{12}{3}$



3. $\frac{4}{2}$



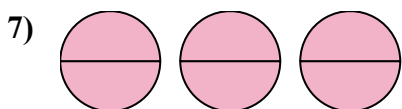
4. $\frac{4}{1}$



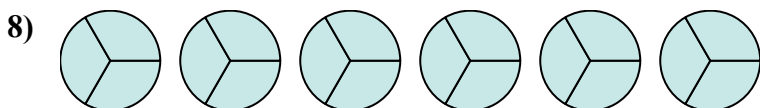
5. $\frac{18}{2}$



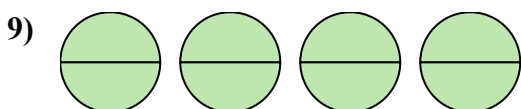
6. $\frac{6}{1}$




7. $\frac{6}{2}$



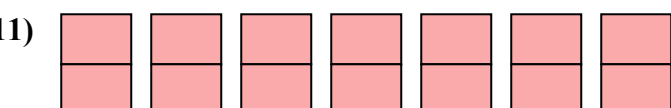
8. $\frac{18}{3}$



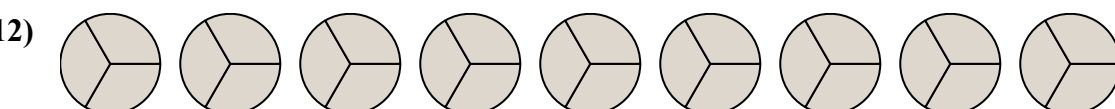
9. $\frac{8}{2}$



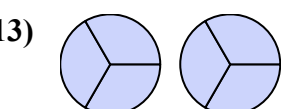
10. $\frac{2}{1}$



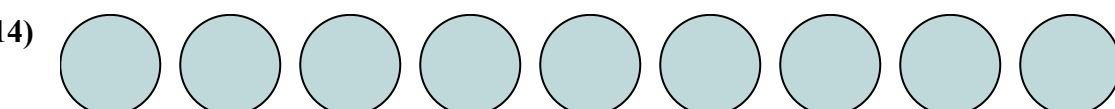
11. $\frac{14}{2}$



12. $\frac{27}{3}$



13. $\frac{6}{3}$



14. $\frac{9}{1}$