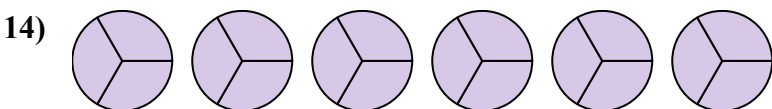
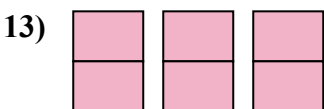
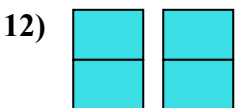
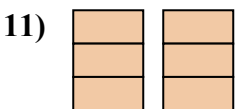
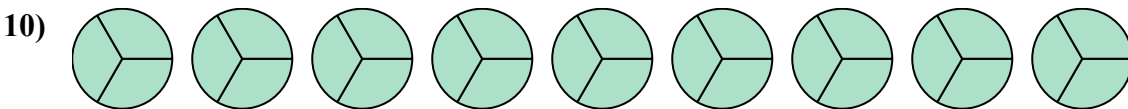

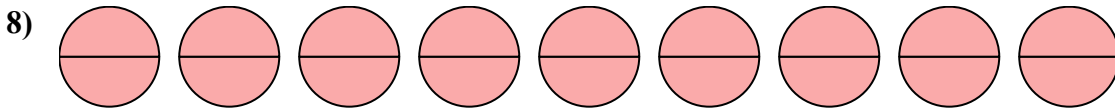
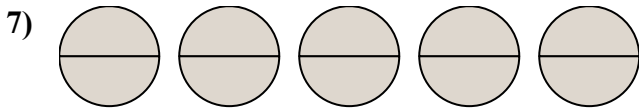
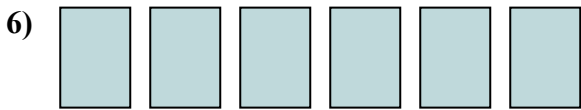
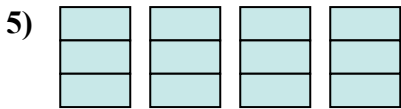
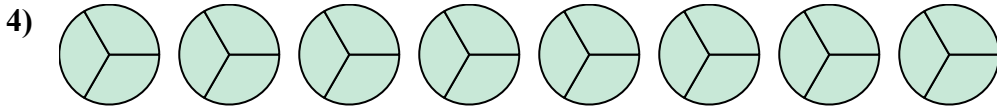

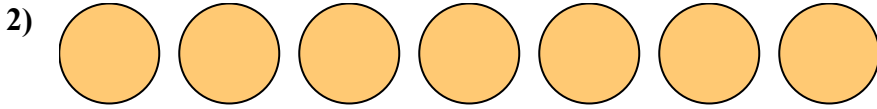





Viết số tiền được tô bóng dưới dạng phân số.

**Câu trả lời**



1. \_\_\_\_\_

2. \_\_\_\_\_

3. \_\_\_\_\_

4. \_\_\_\_\_

5. \_\_\_\_\_

6. \_\_\_\_\_

7. \_\_\_\_\_

8. \_\_\_\_\_

9. \_\_\_\_\_

10. \_\_\_\_\_

11. \_\_\_\_\_

12. \_\_\_\_\_


13. \_\_\_\_\_

14. \_\_\_\_\_

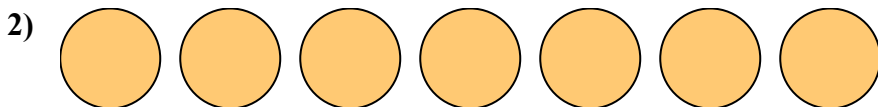


Viết số tiền được tô bóng dưới dạng phân số.


**Câu trả lời**



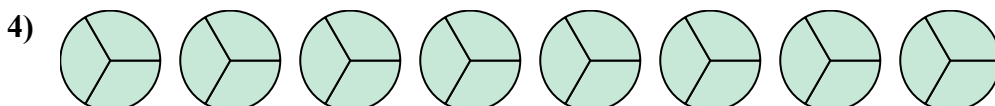
1.  $\frac{12}{2}$



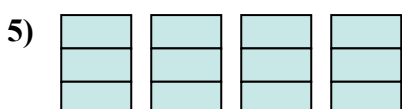
2.  $\frac{7}{1}$



3.  $\frac{4}{1}$



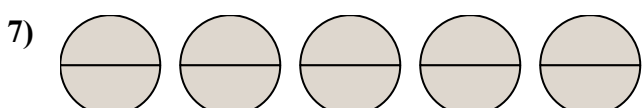
4.  $\frac{24}{3}$



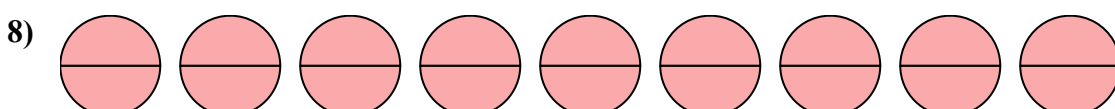
5.  $\frac{12}{3}$




6.  $\frac{6}{1}$



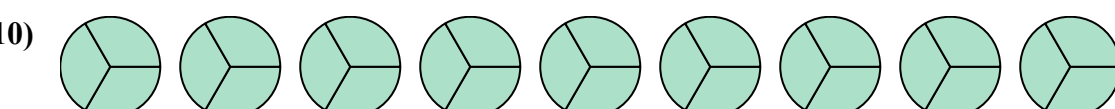
7.  $\frac{10}{2}$



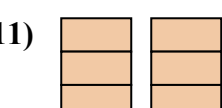
8.  $\frac{18}{2}$



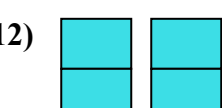
9.  $\frac{3}{1}$



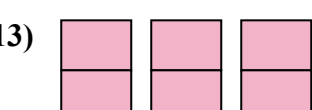
10.  $\frac{27}{3}$



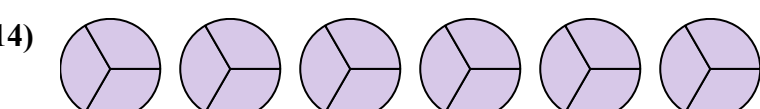
11.  $\frac{6}{3}$



12.  $\frac{4}{2}$



13.  $\frac{6}{2}$



14.  $\frac{18}{3}$