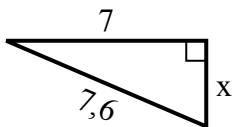


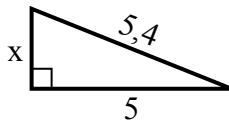


Tim giá trị của x.

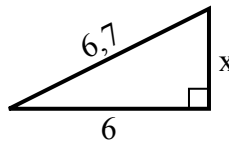
1) chu vi = 17,6 u



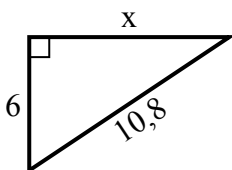
2) chu vi = 12,4 u



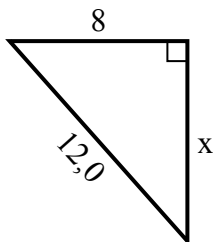
3) chu vi = 15,7 u



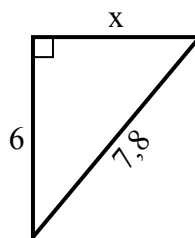
4) chu vi = 25,8 u



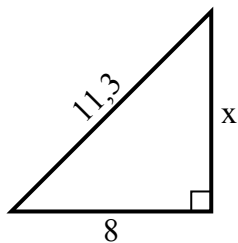
5) chu vi = 29 u



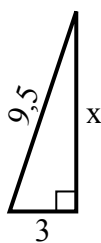
6) chu vi = 18,8 u



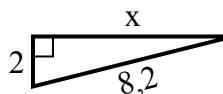
7) chu vi = 27,3 u



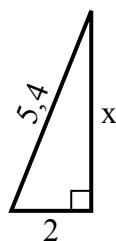
8) chu vi = 21,5 u



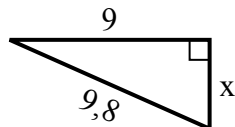
9) chu vi = 18,2 u



10) chu vi = 12,4 u



11) chu vi = 22,8 u



12) chu vi = 14,3 u



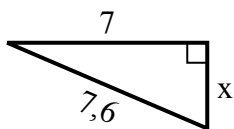
Câu trả lời

1. _____
2. _____
3. _____
4. _____
5. _____
6. _____
7. _____
8. _____
9. _____
10. _____
11. _____
12. _____

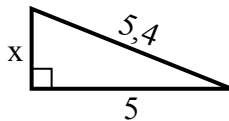


Tim giá trị của x.

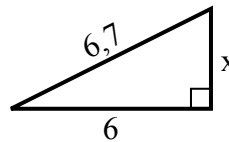
1) chu vi = 17,6 u



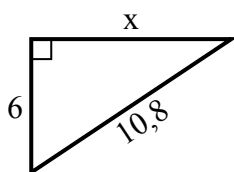
2) chu vi = 12,4 u



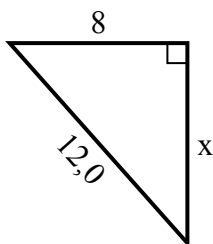
3) chu vi = 15,7 u



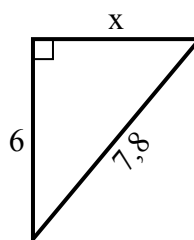
4) chu vi = 25,8 u



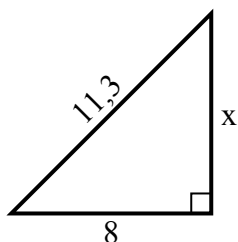
5) chu vi = 29 u



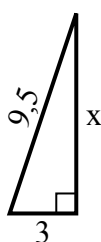
6) chu vi = 18,8 u



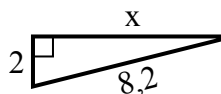
7) chu vi = 27,3 u



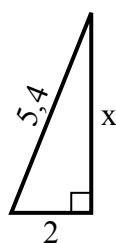
8) chu vi = 21,5 u



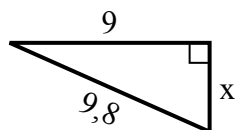
9) chu vi = 18,2 u



10) chu vi = 12,4 u



11) chu vi = 22,8 u



12) chu vi = 14,3 u



Câu trả lời

1. 3
2. 2
3. 3
4. 9
5. 9
6. 5
7. 8
8. 9
9. 8
10. 5
11. 4
12. 2