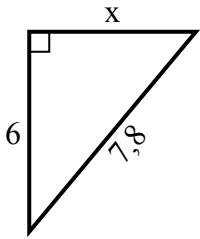


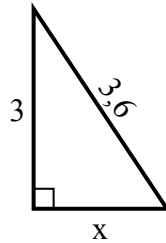


Tim giá trị của x.

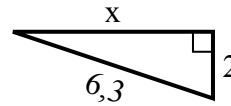
1) chu vi = 18,8 u



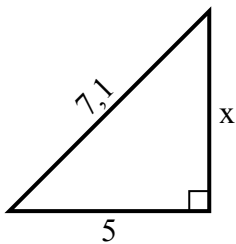
2) chu vi = 8,6 u



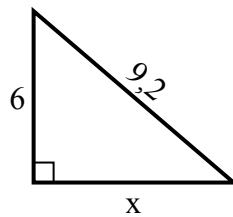
3) chu vi = 14,3 u



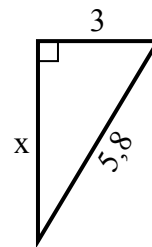
4) chu vi = 17,1 u



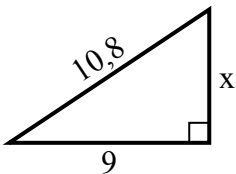
5) chu vi = 22,2 u



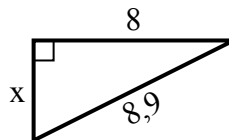
6) chu vi = 13,8 u



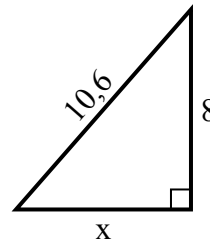
7) chu vi = 25,8 u



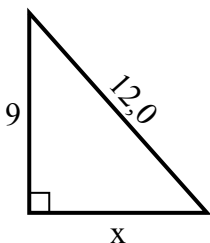
8) chu vi = 20,9 u



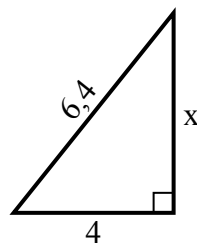
9) chu vi = 25,6 u



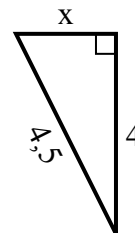
10) chu vi = 29 u



11) chu vi = 15,4 u



12) chu vi = 10,5 u



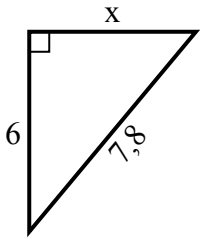
Câu trả lời

1. _____
2. _____
3. _____
4. _____
5. _____
6. _____
7. _____
8. _____
9. _____
10. _____
11. _____
12. _____

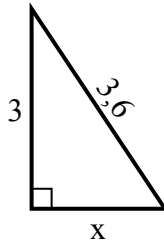


Tim giá trị của x.

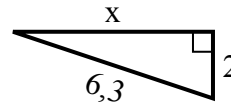
1) chu vi = 18,8 u



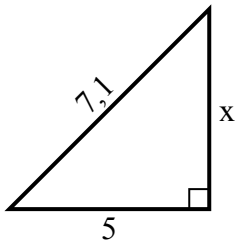
2) chu vi = 8,6 u



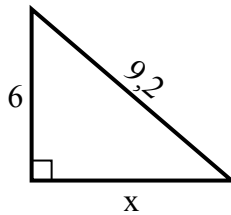
3) chu vi = 14,3 u



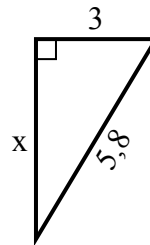
4) chu vi = 17,1 u



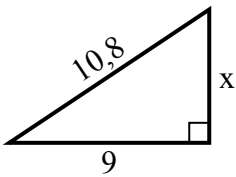
5) chu vi = 22,2 u



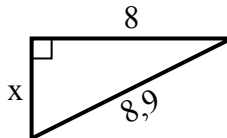
6) chu vi = 13,8 u



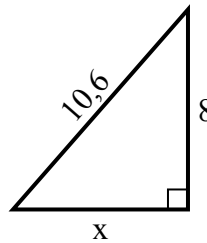
7) chu vi = 25,8 u



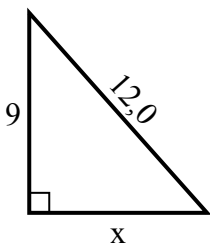
8) chu vi = 20,9 u



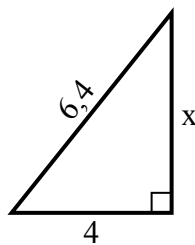
9) chu vi = 25,6 u



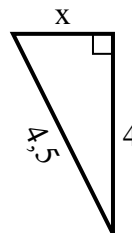
10) chu vi = 29 u



11) chu vi = 15,4 u



12) chu vi = 10,5 u



Câu trả lời

1. **5**

2. **2**

3. **6**

4. **5**

5. **7**

6. **5**

7. **6**

8. **4**

9. **7**

10. **8**

11. **5**

12. **2**