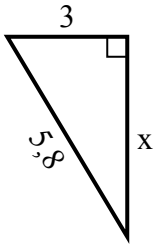


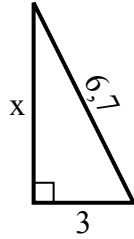


Tim giá trị của x.

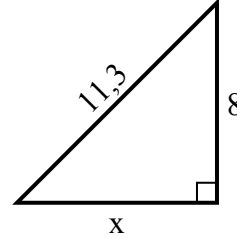
1) chu vi = 13,8 u



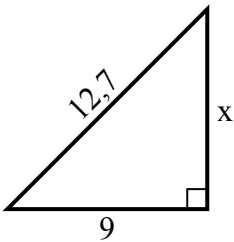
2) chu vi = 15,7 u



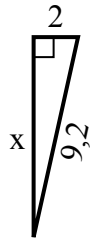
3) chu vi = 27,3 u



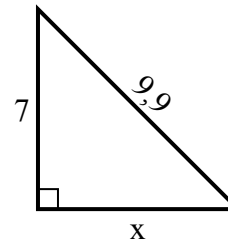
4) chu vi = 30,7 u



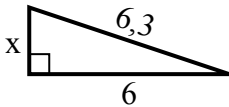
5) chu vi = 20,2 u



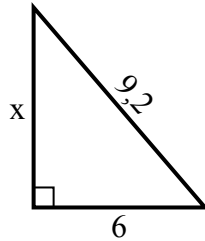
6) chu vi = 23,9 u



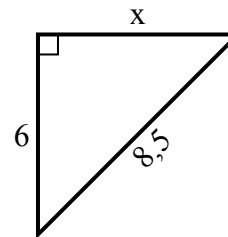
7) chu vi = 14,3 u



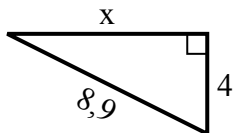
8) chu vi = 22,2 u



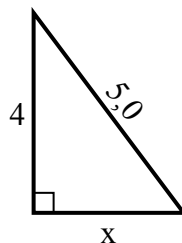
9) chu vi = 20,5 u



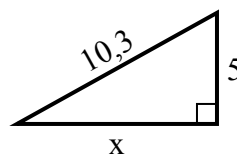
10) chu vi = 20,9 u



11) chu vi = 12 u



12) chu vi = 24,3 u



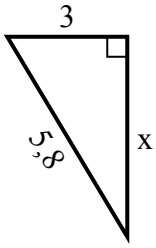
**Câu trả lời**

1. \_\_\_\_\_
2. \_\_\_\_\_
3. \_\_\_\_\_
4. \_\_\_\_\_
5. \_\_\_\_\_
6. \_\_\_\_\_
7. \_\_\_\_\_
8. \_\_\_\_\_
9. \_\_\_\_\_
10. \_\_\_\_\_
11. \_\_\_\_\_
12. \_\_\_\_\_

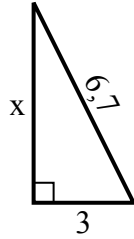


Tim giá trị của x.

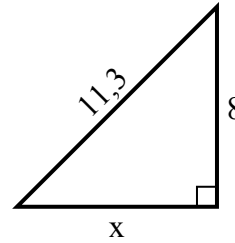
1) chu vi = 13,8 u



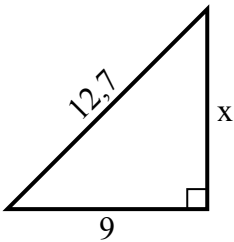
2) chu vi = 15,7 u



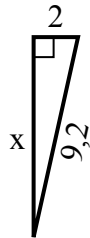
3) chu vi = 27,3 u



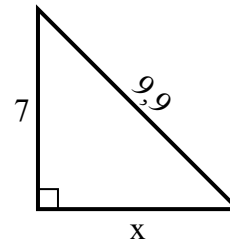
4) chu vi = 30,7 u



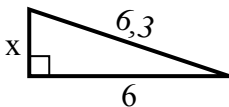
5) chu vi = 20,2 u



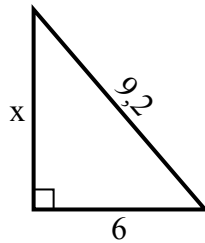
6) chu vi = 23,9 u



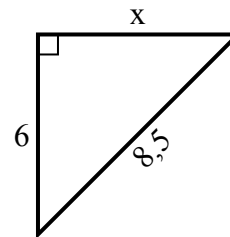
7) chu vi = 14,3 u



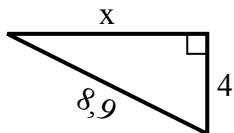
8) chu vi = 22,2 u



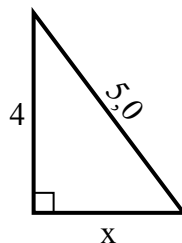
9) chu vi = 20,5 u



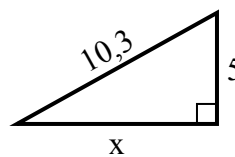
10) chu vi = 20,9 u



11) chu vi = 12 u



12) chu vi = 24,3 u



**Câu trả lời**

1. 5

2. 6

3. 8

4. 9

5. 9

6. 7

7. 2

8. 7

9. 6

10. 8

11. 3

12. 9