

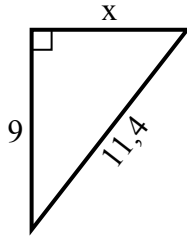


Tim giá trị của x.

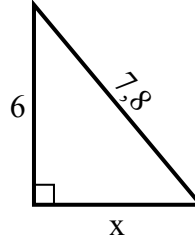
1) chu vi = 20,2 u



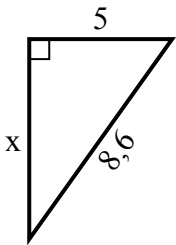
2) chu vi = 27,4 u



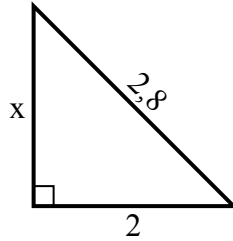
3) chu vi = 18,8 u



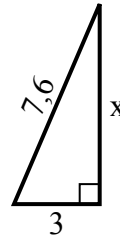
4) chu vi = 20,6 u



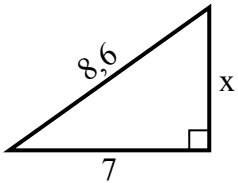
5) chu vi = 6,8 u



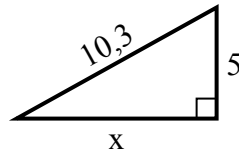
6) chu vi = 17,6 u



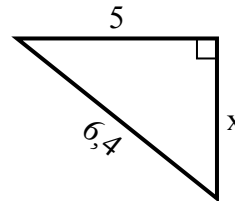
7) chu vi = 20,6 u



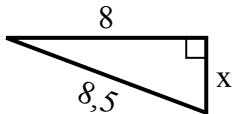
8) chu vi = 24,3 u



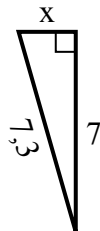
9) chu vi = 15,4 u



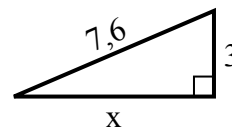
10) chu vi = 19,5 u



11) chu vi = 16,3 u



12) chu vi = 17,6 u



Câu trả lời

1. _____
2. _____
3. _____
4. _____
5. _____
6. _____
7. _____
8. _____
9. _____
10. _____
11. _____
12. _____

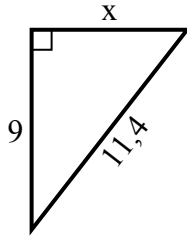


Tim giá trị của x.

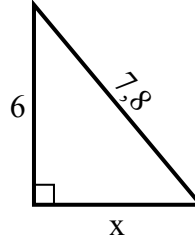
1) chu vi = 20,2 u



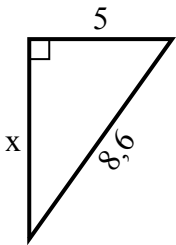
2) chu vi = 27,4 u



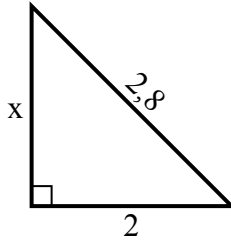
3) chu vi = 18,8 u



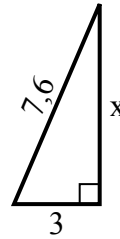
4) chu vi = 20,6 u



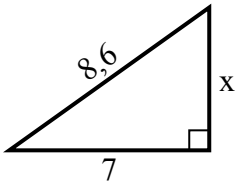
5) chu vi = 6,8 u



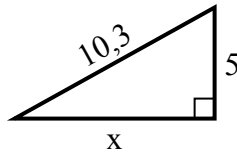
6) chu vi = 17,6 u



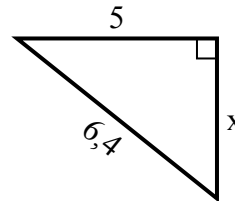
7) chu vi = 20,6 u



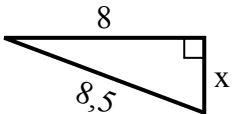
8) chu vi = 24,3 u



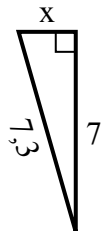
9) chu vi = 15,4 u



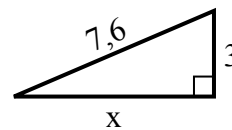
10) chu vi = 19,5 u



11) chu vi = 16,3 u



12) chu vi = 17,6 u



Câu trả lời

1. 9

2. 7

3. 5

4. 7

5. 2

6. 7

7. 5

8. 9

9. 4

10. 3

11. 2

12. 7