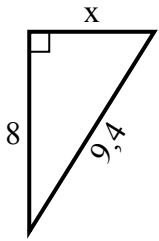


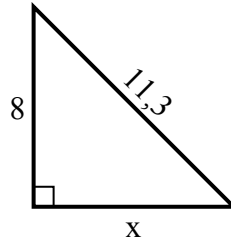


Tim giá trị của x.

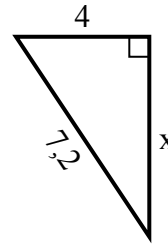
1) chu vi = 22,4 u



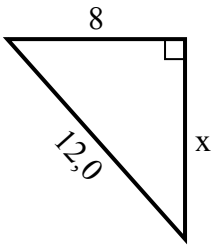
2) chu vi = 27,3 u



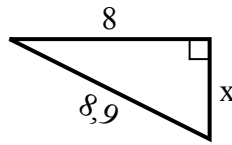
3) chu vi = 17,2 u



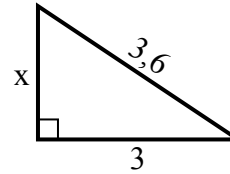
4) chu vi = 29 u



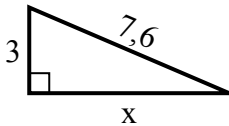
5) chu vi = 20,9 u



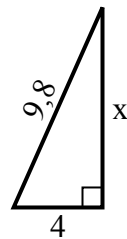
6) chu vi = 8,6 u



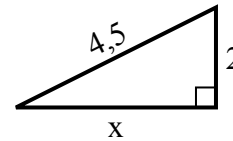
7) chu vi = 17,6 u



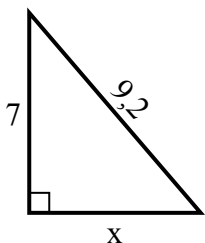
8) chu vi = 22,8 u



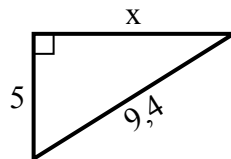
9) chu vi = 10,5 u



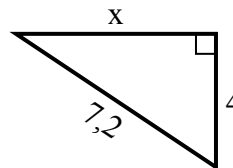
10) chu vi = 22,2 u



11) chu vi = 22,4 u



12) chu vi = 17,2 u



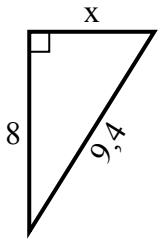
Câu trả lời

1. _____
2. _____
3. _____
4. _____
5. _____
6. _____
7. _____
8. _____
9. _____
10. _____
11. _____
12. _____

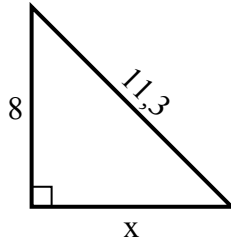


Tim giá trị của x.

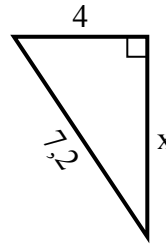
1) chu vi = 22,4 u



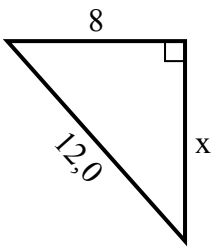
2) chu vi = 27,3 u



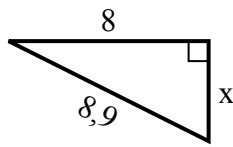
3) chu vi = 17,2 u



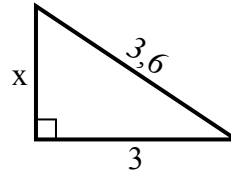
4) chu vi = 29 u



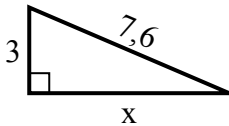
5) chu vi = 20,9 u



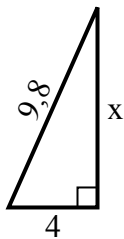
6) chu vi = 8,6 u



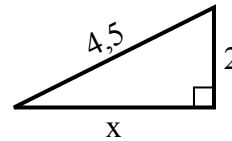
7) chu vi = 17,6 u



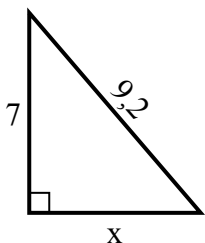
8) chu vi = 22,8 u



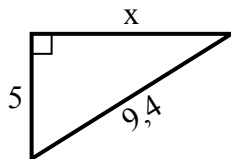
9) chu vi = 10,5 u



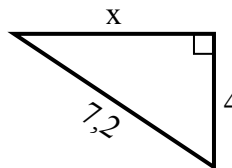
10) chu vi = 22,2 u



11) chu vi = 22,4 u



12) chu vi = 17,2 u



Câu trả lời

1. 5

2. 8

3. 6

4. 9

5. 4

6. 2

7. 7

8. 9

9. 4

10. 6

11. 8

12. 6