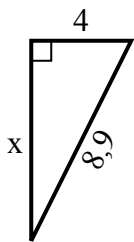


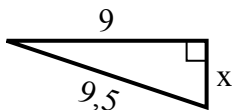


Tim giá trị của x.

1) chu vi = 20,9 u



2) chu vi = 21,5 u



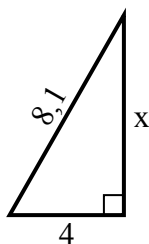
3) chu vi = 14,3 u



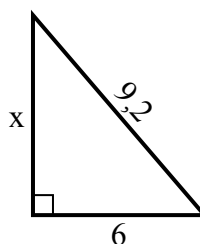
4) chu vi = 18,2 u



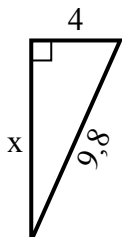
5) chu vi = 19,1 u



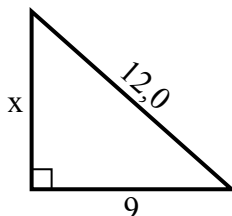
6) chu vi = 22,2 u



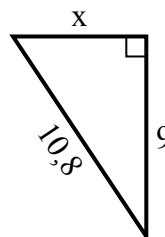
7) chu vi = 22,8 u



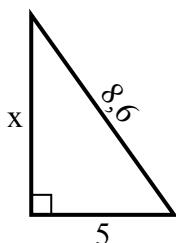
8) chu vi = 29 u



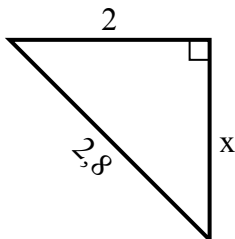
9) chu vi = 25,8 u



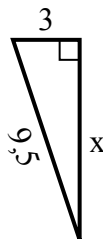
10) chu vi = 20,6 u



11) chu vi = 6,8 u



12) chu vi = 21,5 u



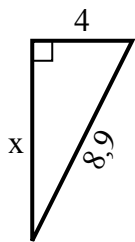
Câu trả lời

1. _____
2. _____
3. _____
4. _____
5. _____
6. _____
7. _____
8. _____
9. _____
10. _____
11. _____
12. _____

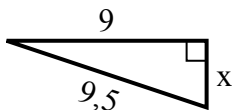


Tim giá trị của x.

1) chu vi = 20,9 u



2) chu vi = 21,5 u



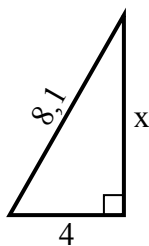
3) chu vi = 14,3 u



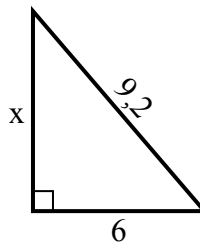
4) chu vi = 18,2 u



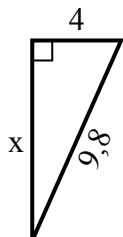
5) chu vi = 19,1 u



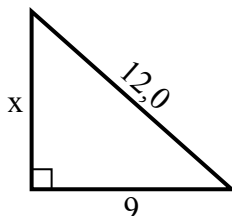
6) chu vi = 22,2 u



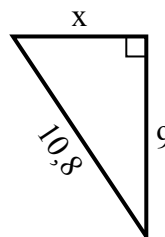
7) chu vi = 22,8 u



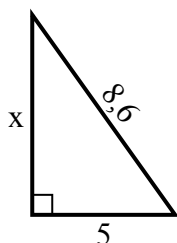
8) chu vi = 29 u



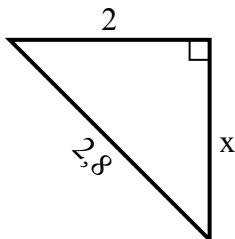
9) chu vi = 25,8 u



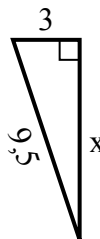
10) chu vi = 20,6 u



11) chu vi = 6,8 u



12) chu vi = 21,5 u



Câu trả lời

1. 8

2. 3

3. 2

4. 2

5. 7

6. 7

7. 9

8. 8

9. 6

10. 7

11. 2

12. 9