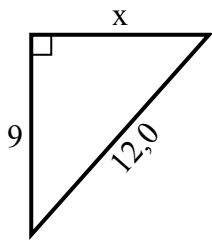


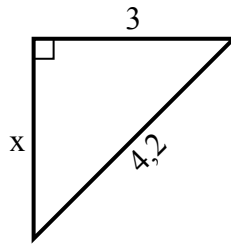


Tim giá trị của x.

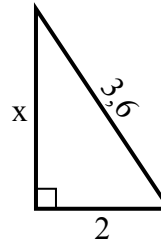
1) chu vi = 29 u



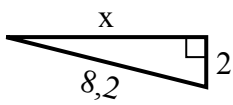
2) chu vi = 10,2 u



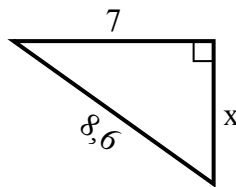
3) chu vi = 8,6 u



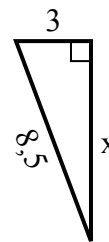
4) chu vi = 18,2 u



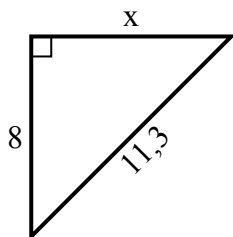
5) chu vi = 20,6 u



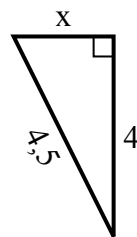
6) chu vi = 19,5 u



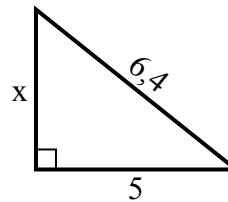
7) chu vi = 27,3 u



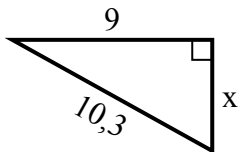
8) chu vi = 10,5 u



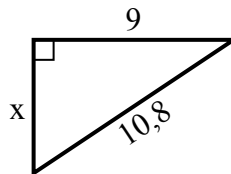
9) chu vi = 15,4 u



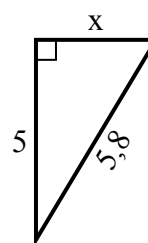
10) chu vi = 24,3 u



11) chu vi = 25,8 u



12) chu vi = 13,8 u



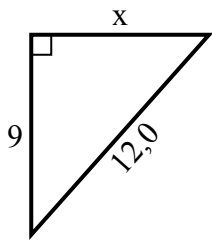
Câu trả lời

1. _____
2. _____
3. _____
4. _____
5. _____
6. _____
7. _____
8. _____
9. _____
10. _____
11. _____
12. _____

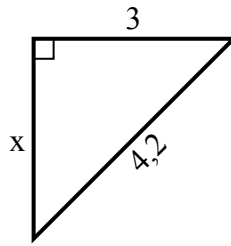


Tim giá trị của x.

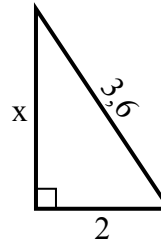
1) chu vi = 29 u



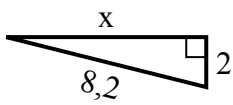
2) chu vi = 10,2 u



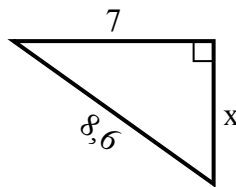
3) chu vi = 8,6 u



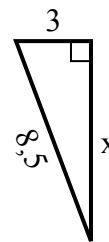
4) chu vi = 18,2 u



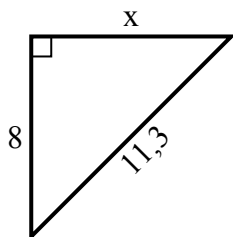
5) chu vi = 20,6 u



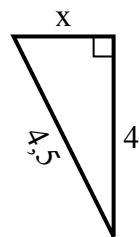
6) chu vi = 19,5 u



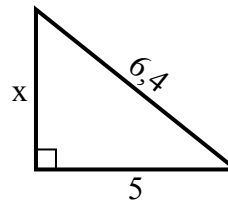
7) chu vi = 27,3 u



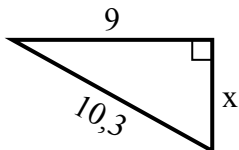
8) chu vi = 10,5 u



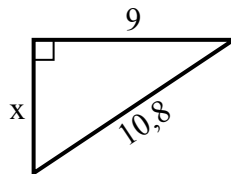
9) chu vi = 15,4 u



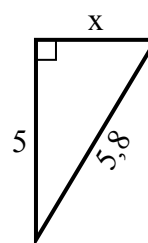
10) chu vi = 24,3 u



11) chu vi = 25,8 u



12) chu vi = 13,8 u



Câu trả lời

1. 8
2. 3
3. 3
4. 8
5. 5
6. 8
7. 8
8. 2
9. 4
10. 5
11. 6
12. 3