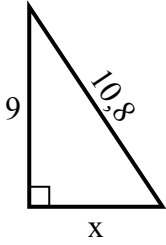


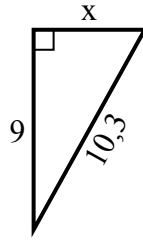


Tim giá trị của x.

1) chu vi = 25,8 u



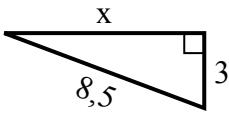
2) chu vi = 24,3 u



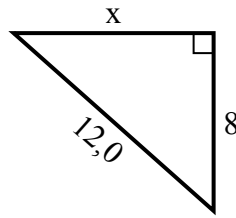
3) chu vi = 15,7 u



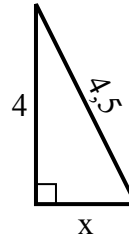
4) chu vi = 19,5 u



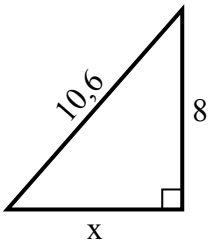
5) chu vi = 29 u



6) chu vi = 10,5 u



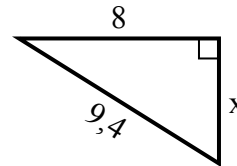
7) chu vi = 25,6 u



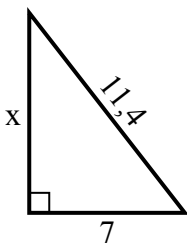
8) chu vi = 14,3 u



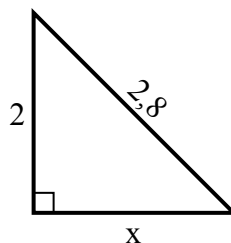
9) chu vi = 22,4 u



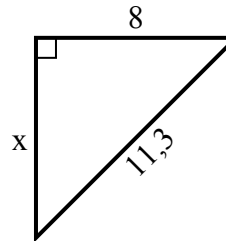
10) chu vi = 27,4 u



11) chu vi = 6,8 u



12) chu vi = 27,3 u



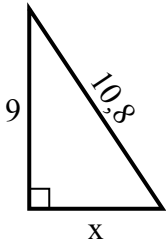
Câu trả lời

1. _____
2. _____
3. _____
4. _____
5. _____
6. _____
7. _____
8. _____
9. _____
10. _____
11. _____
12. _____

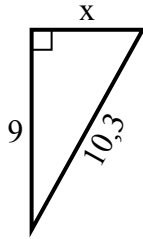


Tim giá trị của x.

1) chu vi = 25,8 u



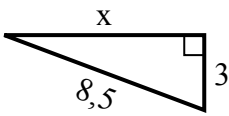
2) chu vi = 24,3 u



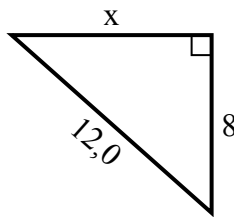
3) chu vi = 15,7 u



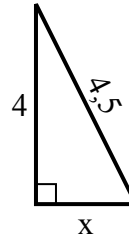
4) chu vi = 19,5 u



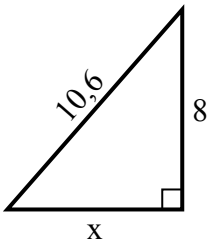
5) chu vi = 29 u



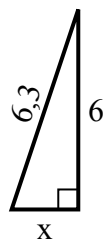
6) chu vi = 10,5 u



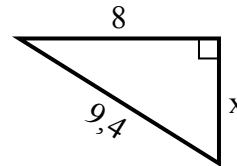
7) chu vi = 25,6 u



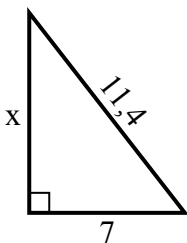
8) chu vi = 14,3 u



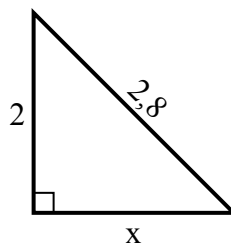
9) chu vi = 22,4 u



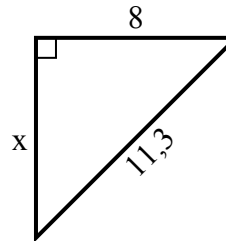
10) chu vi = 27,4 u



11) chu vi = 6,8 u



12) chu vi = 27,3 u



Câu trả lời

1. **6**

2. **5**

3. **3**

4. **8**

5. **9**

6. **2**

7. **7**

8. **2**

9. **5**

10. **9**

11. **2**

12. **8**