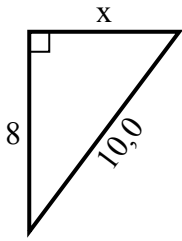


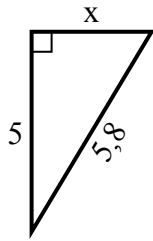


Tim giá trị của x.

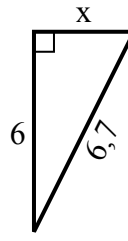
1) chu vi = 24 u



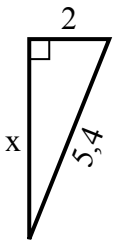
2) chu vi = 13,8 u



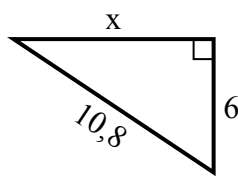
3) chu vi = 15,7 u



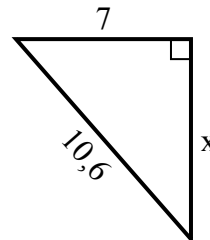
4) chu vi = 12,4 u



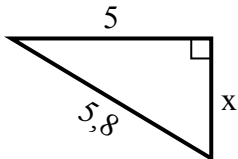
5) chu vi = 25,8 u



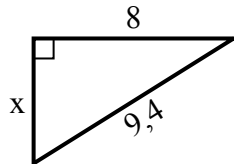
6) chu vi = 25,6 u



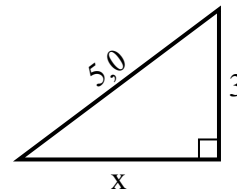
7) chu vi = 13,8 u



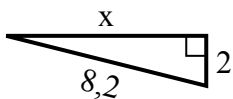
8) chu vi = 22,4 u



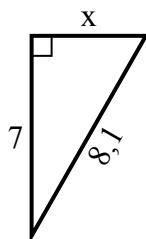
9) chu vi = 12 u



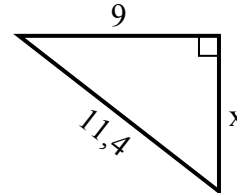
10) chu vi = 18,2 u



11) chu vi = 19,1 u



12) chu vi = 27,4 u



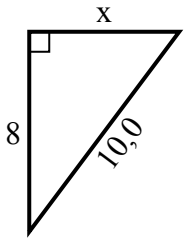
**Câu trả lời**

1. \_\_\_\_\_
2. \_\_\_\_\_
3. \_\_\_\_\_
4. \_\_\_\_\_
5. \_\_\_\_\_
6. \_\_\_\_\_
7. \_\_\_\_\_
8. \_\_\_\_\_
9. \_\_\_\_\_
10. \_\_\_\_\_
11. \_\_\_\_\_
12. \_\_\_\_\_

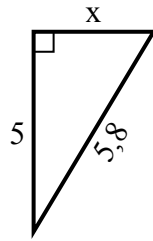


Tim giá trị của x.

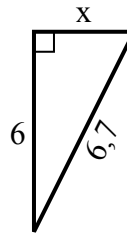
1) chu vi = 24 u



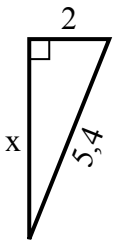
2) chu vi = 13,8 u



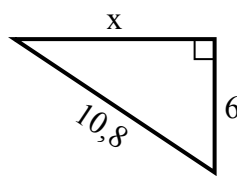
3) chu vi = 15,7 u



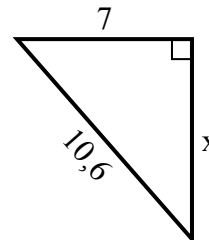
4) chu vi = 12,4 u



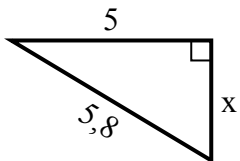
5) chu vi = 25,8 u



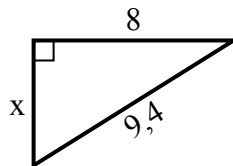
6) chu vi = 25,6 u



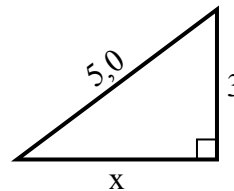
7) chu vi = 13,8 u



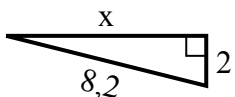
8) chu vi = 22,4 u



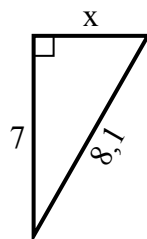
9) chu vi = 12 u



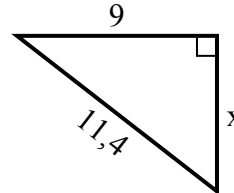
10) chu vi = 18,2 u



11) chu vi = 19,1 u



12) chu vi = 27,4 u



**Câu trả lời**

1. 6
2. 3
3. 3
4. 5
5. 9
6. 8
7. 3
8. 5
9. 4
10. 8
11. 4
12. 7