

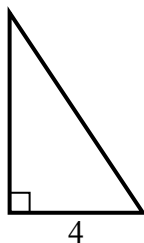


Tìm giá trị của x.

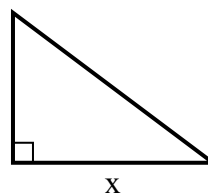
1) diện tích = $5 u^2$



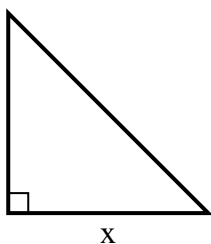
2) diện tích = $12 u^2$



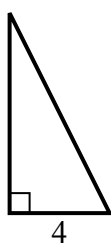
3) diện tích = $6 u^2$



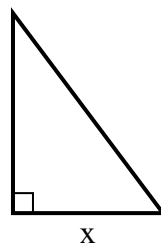
4) diện tích = $18 u^2$



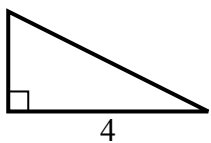
5) diện tích = $16 u^2$



6) diện tích = $24 u^2$



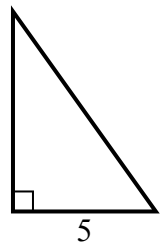
7) diện tích = $4 u^2$



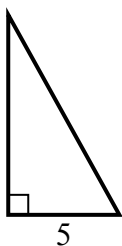
8) diện tích = $8 u^2$



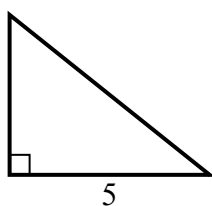
9) diện tích = $17.5 u^2$



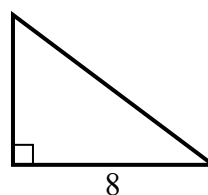
10) diện tích = $22.5 u^2$



11) diện tích = $10 u^2$



12) diện tích = $24 u^2$



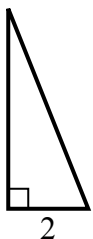
Câu trả lời

1. _____
2. _____
3. _____
4. _____
5. _____
6. _____
7. _____
8. _____
9. _____
10. _____
11. _____
12. _____

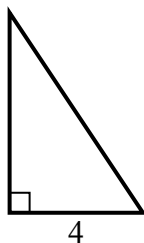


Tim giá trị của x.

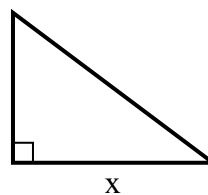
1) diện tích = $5 u^2$



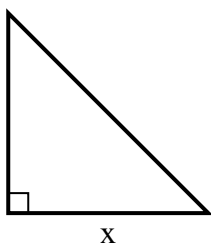
2) diện tích = $12 u^2$



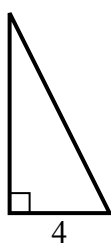
3) diện tích = $6 u^2$



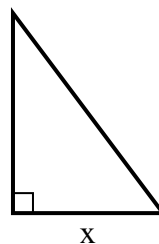
4) diện tích = $18 u^2$



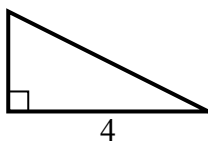
5) diện tích = $16 u^2$



6) diện tích = $24 u^2$



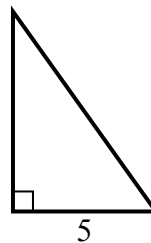
7) diện tích = $4 u^2$



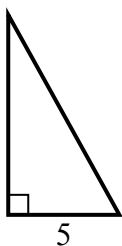
8) diện tích = $8 u^2$



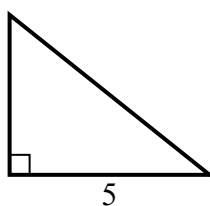
9) diện tích = $17.5 u^2$



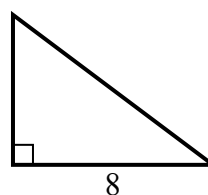
10) diện tích = $22.5 u^2$



11) diện tích = $10 u^2$



12) diện tích = $24 u^2$



Câu trả lời

1. 5

2. 6

3. 4

4. 6

5. 8

6. 6

7. 2

8. 8

9. 7

10. 9

11. 4

12. 6