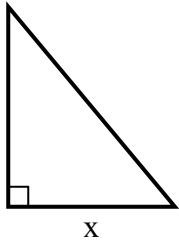


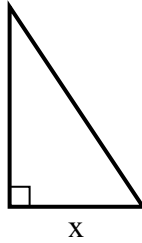


Tìm giá trị của x.

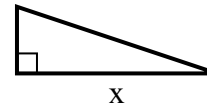
1) diện tích = $15 u^2$



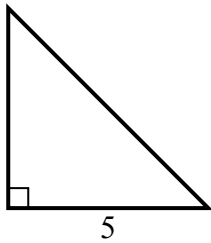
2) diện tích = $3 u^2$



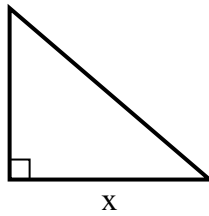
3) diện tích = $6 u^2$



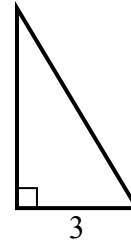
4) diện tích = $12.5 u^2$



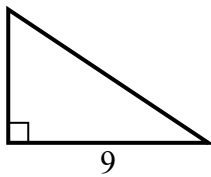
5) diện tích = $21 u^2$



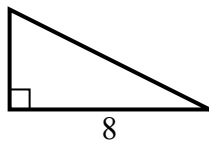
6) diện tích = $7.5 u^2$



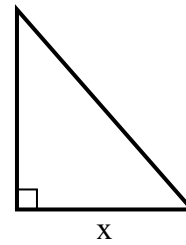
7) diện tích = $27 u^2$



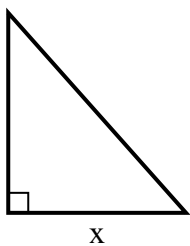
8) diện tích = $16 u^2$



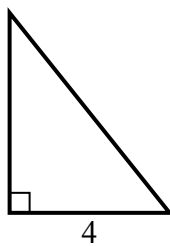
9) diện tích = $28 u^2$



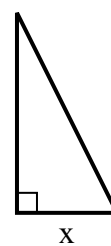
10) diện tích = $36 u^2$



11) diện tích = $10 u^2$



12) diện tích = $4 u^2$



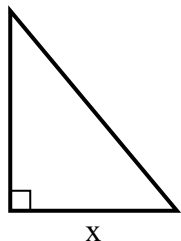
Câu trả lời

1. _____
2. _____
3. _____
4. _____
5. _____
6. _____
7. _____
8. _____
9. _____
10. _____
11. _____
12. _____

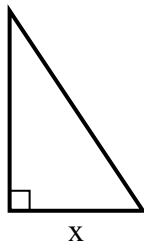


Tim giá trị của x.

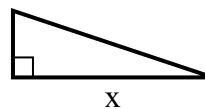
1) diện tích = $15 u^2$



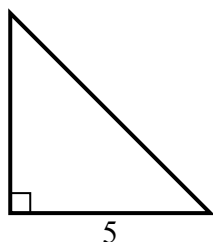
2) diện tích = $3 u^2$



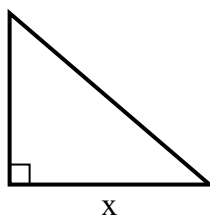
3) diện tích = $6 u^2$



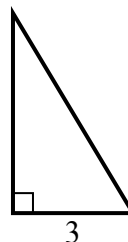
4) diện tích = $12.5 u^2$



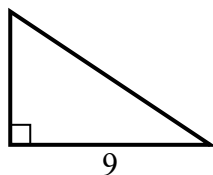
5) diện tích = $21 u^2$



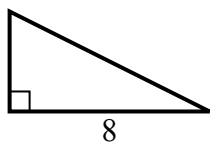
6) diện tích = $7.5 u^2$



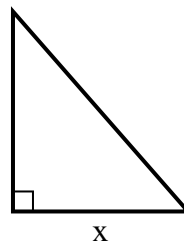
7) diện tích = $27 u^2$



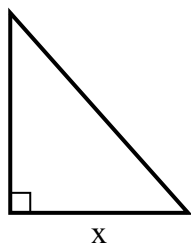
8) diện tích = $16 u^2$



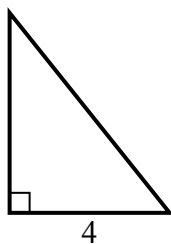
9) diện tích = $28 u^2$



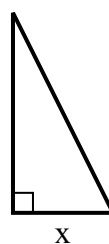
10) diện tích = $36 u^2$



11) diện tích = $10 u^2$



12) diện tích = $4 u^2$



Câu trả lời

1. 5

2. 2

3. 6

4. 5

5. 7

6. 5

7. 6

8. 4

9. 7

10. 8

11. 5

12. 2