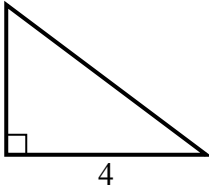


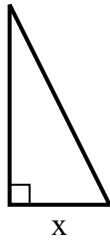


Tim giá trị của x.

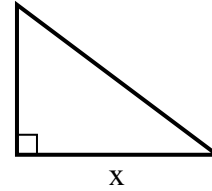
1) diện tích = $6 u^2$



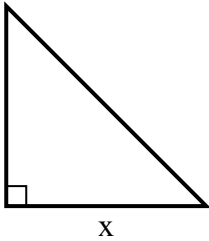
2) diện tích = $4 u^2$



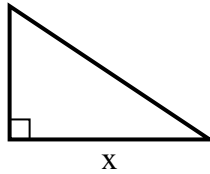
3) diện tích = $24 u^2$



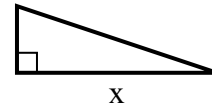
4) diện tích = $8 u^2$



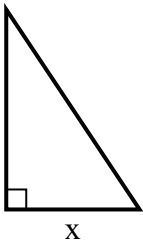
5) diện tích = $12 u^2$



6) diện tích = $6 u^2$



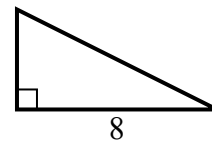
7) diện tích = $12 u^2$



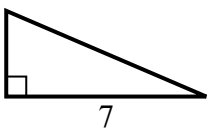
8) diện tích = $13.5 u^2$



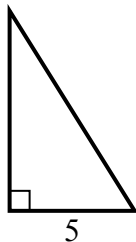
9) diện tích = $16 u^2$



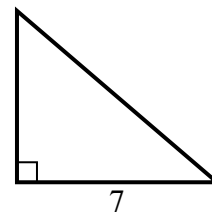
10) diện tích = $10.5 u^2$



11) diện tích = $20 u^2$



12) diện tích = $21 u^2$



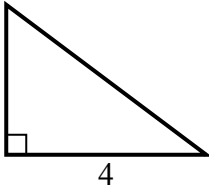
Câu trả lời

1. _____
2. _____
3. _____
4. _____
5. _____
6. _____
7. _____
8. _____
9. _____
10. _____
11. _____
12. _____

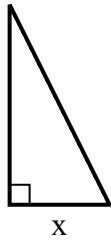


Tim giá trị của x.

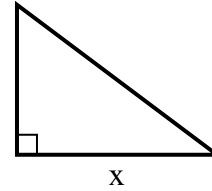
1) diện tích = $6 u^2$



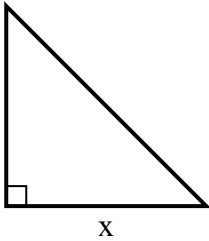
2) diện tích = $4 u^2$



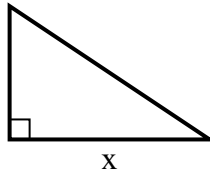
3) diện tích = $24 u^2$



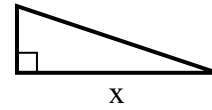
4) diện tích = $8 u^2$



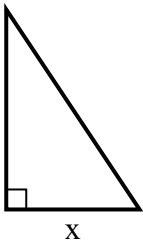
5) diện tích = $12 u^2$



6) diện tích = $6 u^2$



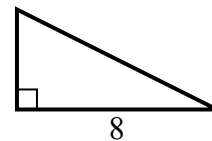
7) diện tích = $12 u^2$



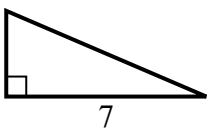
8) diện tích = $13.5 u^2$



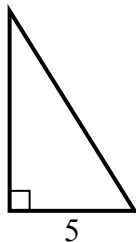
9) diện tích = $16 u^2$



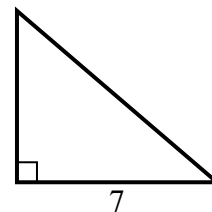
10) diện tích = $10.5 u^2$



11) diện tích = $20 u^2$



12) diện tích = $21 u^2$



Câu trả lời

1. 3

2. 2

3. 8

4. 4

5. 6

6. 6

7. 4

8. 3

9. 4

10. 3

11. 8

12. 6