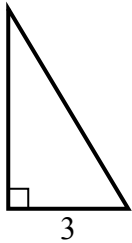


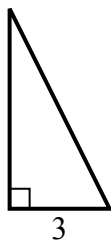


Tim giá trị của x.

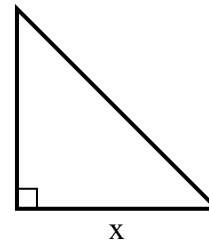
1) diện tích = $7.5 u^2$



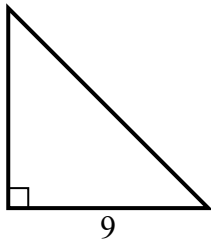
2) diện tích = $9 u^2$



3) diện tích = $32 u^2$



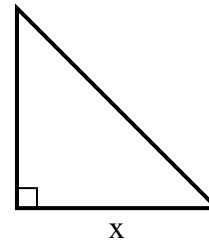
4) diện tích = $40.5 u^2$



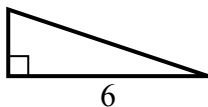
5) diện tích = $9 u^2$



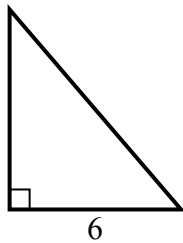
6) diện tích = $24.5 u^2$



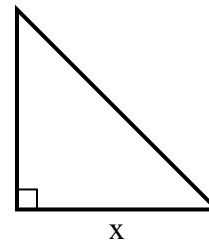
7) diện tích = $6 u^2$



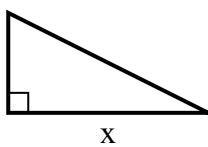
8) diện tích = $21 u^2$



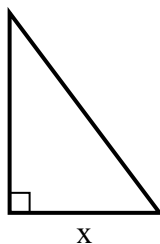
9) diện tích = $18 u^2$



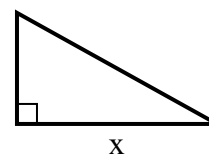
10) diện tích = $16 u^2$



11) diện tích = $6 u^2$



12) diện tích = $22.5 u^2$



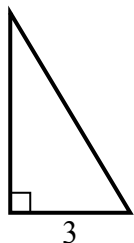
Câu trả lời

1. _____
2. _____
3. _____
4. _____
5. _____
6. _____
7. _____
8. _____
9. _____
10. _____
11. _____
12. _____

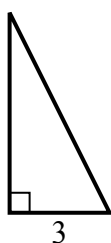


Tim giá trị của x.

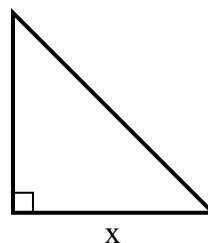
1) diện tích = $7.5 u^2$



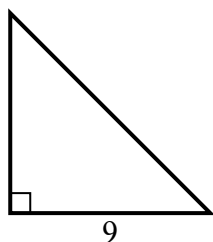
2) diện tích = $9 u^2$



3) diện tích = $32 u^2$



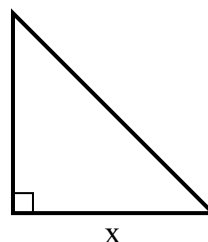
4) diện tích = $40.5 u^2$



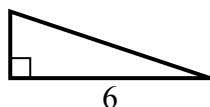
5) diện tích = $9 u^2$



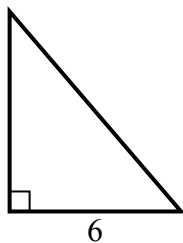
6) diện tích = $24.5 u^2$



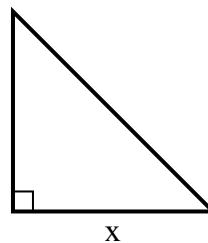
7) diện tích = $6 u^2$



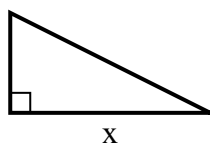
8) diện tích = $21 u^2$



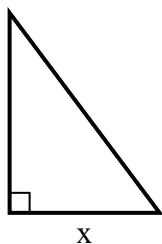
9) diện tích = $18 u^2$



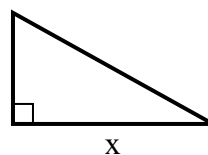
10) diện tích = $16 u^2$



11) diện tích = $6 u^2$



12) diện tích = $22.5 u^2$



Câu trả lời

1. 5

2. 6

3. 8

4. 9

5. 9

6. 7

7. 2

8. 7

9. 6

10. 8

11. 3

12. 9