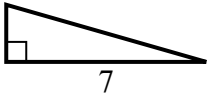


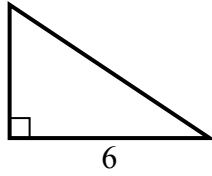


Tim giá trị của x.

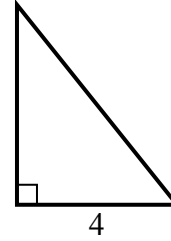
1) diện tích =  $7 u^2$



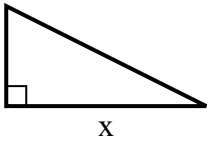
2) diện tích =  $12 u^2$



3) diện tích =  $10 u^2$



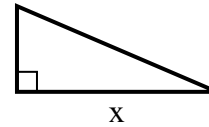
4) diện tích =  $16 u^2$



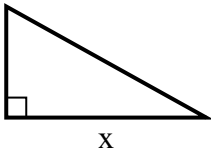
5) diện tích =  $18 u^2$



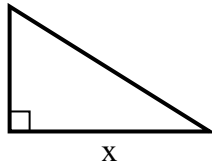
6) diện tích =  $10.5 u^2$



7) diện tích =  $22.5 u^2$



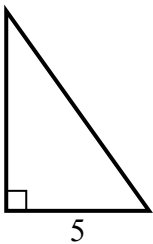
8) diện tích =  $20 u^2$



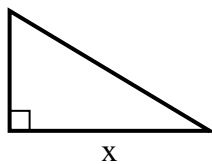
9) diện tích =  $5 u^2$



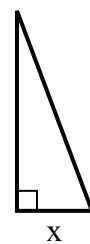
10) diện tích =  $17.5 u^2$



11) diện tích =  $7.5 u^2$



12) diện tích =  $12 u^2$



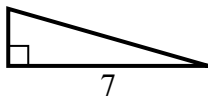
**Câu trả lời**

1. \_\_\_\_\_
2. \_\_\_\_\_
3. \_\_\_\_\_
4. \_\_\_\_\_
5. \_\_\_\_\_
6. \_\_\_\_\_
7. \_\_\_\_\_
8. \_\_\_\_\_
9. \_\_\_\_\_
10. \_\_\_\_\_
11. \_\_\_\_\_
12. \_\_\_\_\_

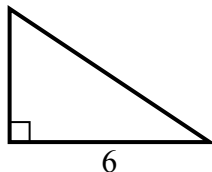


Tim giá trị của x.

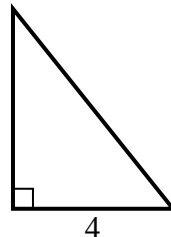
1) diện tích =  $7 u^2$



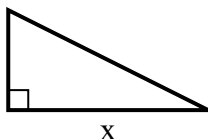
2) diện tích =  $12 u^2$



3) diện tích =  $10 u^2$



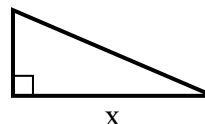
4) diện tích =  $16 u^2$



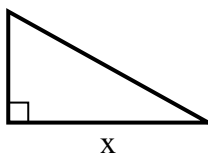
5) diện tích =  $18 u^2$



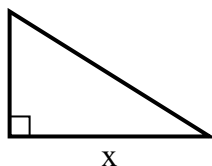
6) diện tích =  $10.5 u^2$



7) diện tích =  $22.5 u^2$



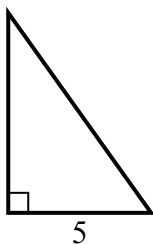
8) diện tích =  $20 u^2$



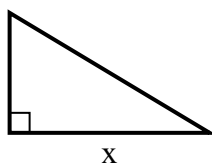
9) diện tích =  $5 u^2$



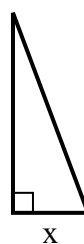
10) diện tích =  $17.5 u^2$



11) diện tích =  $7.5 u^2$



12) diện tích =  $12 u^2$



**Câu trả lời**

1. 2

2. 4

3. 5

4. 8

5. 4

6. 7

7. 9

8. 8

9. 2

10. 7

11. 5

12. 3