

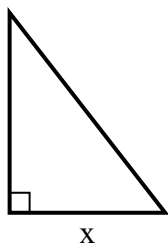


Tìm giá trị của x.

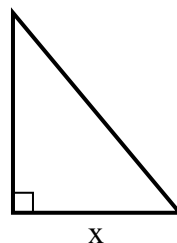
1) diện tích =  $9 u^2$



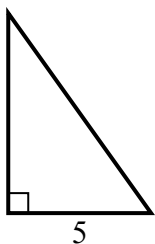
2) diện tích =  $31.5 u^2$



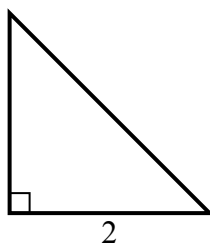
3) diện tích =  $15 u^2$



4) diện tích =  $17.5 u^2$



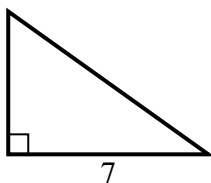
5) diện tích =  $2 u^2$



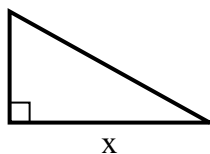
6) diện tích =  $10.5 u^2$



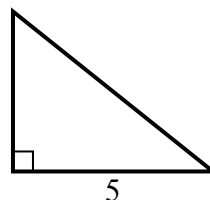
7) diện tích =  $17.5 u^2$



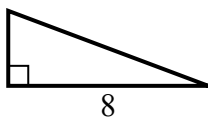
8) diện tích =  $22.5 u^2$



9) diện tích =  $10 u^2$



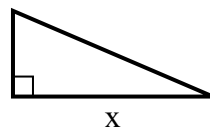
10) diện tích =  $12 u^2$



11) diện tích =  $7 u^2$



12) diện tích =  $10.5 u^2$



**Câu trả lời**

1. \_\_\_\_\_
2. \_\_\_\_\_
3. \_\_\_\_\_
4. \_\_\_\_\_
5. \_\_\_\_\_
6. \_\_\_\_\_
7. \_\_\_\_\_
8. \_\_\_\_\_
9. \_\_\_\_\_
10. \_\_\_\_\_
11. \_\_\_\_\_
12. \_\_\_\_\_

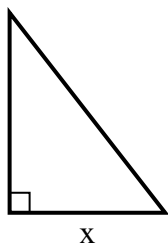


Tìm giá trị của x.

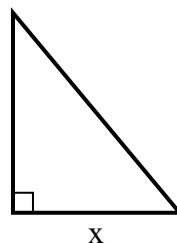
1) diện tích =  $9 u^2$



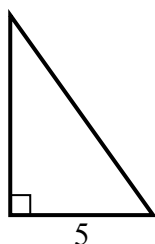
2) diện tích =  $31.5 u^2$



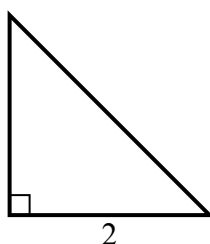
3) diện tích =  $15 u^2$



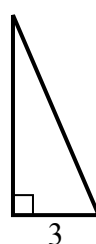
4) diện tích =  $17.5 u^2$



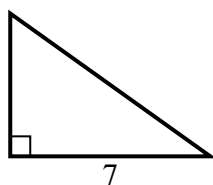
5) diện tích =  $2 u^2$



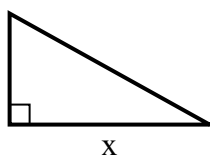
6) diện tích =  $10.5 u^2$



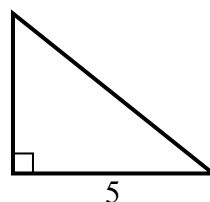
7) diện tích =  $17.5 u^2$



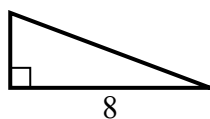
8) diện tích =  $22.5 u^2$



9) diện tích =  $10 u^2$



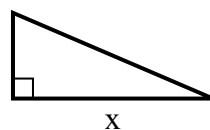
10) diện tích =  $12 u^2$



11) diện tích =  $7 u^2$



12) diện tích =  $10.5 u^2$



**Câu trả lời**

1. 9

2. 7

3. 5

4. 7

5. 2

6. 7

7. 5

8. 9

9. 4

10. 3

11. 2

12. 7