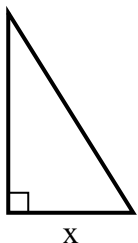


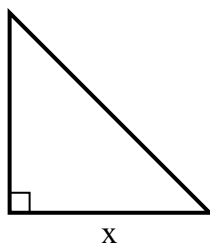


**Tìm giá trị của x.**

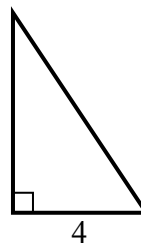
1) diện tích =  $20 u^2$



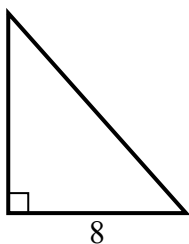
2) diện tích =  $32 u^2$



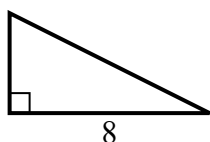
3) diện tích =  $12 u^2$



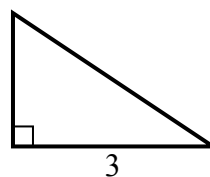
4) diện tích =  $36 u^2$



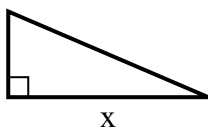
5) diện tích =  $16 u^2$



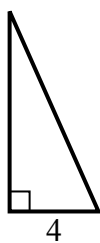
6) diện tích =  $3 u^2$



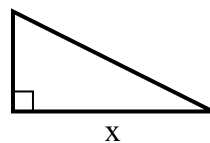
7) diện tích =  $10.5 u^2$



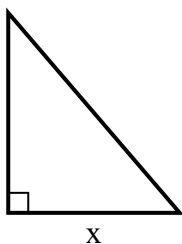
8) diện tích =  $18 u^2$



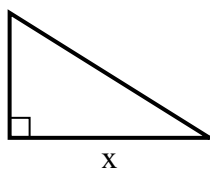
9) diện tích =  $4 u^2$



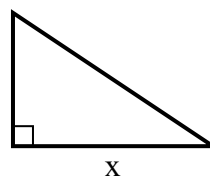
10) diện tích =  $21 u^2$



11) diện tích =  $20 u^2$



12) diện tích =  $12 u^2$



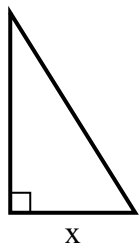
**Câu trả lời**

1. \_\_\_\_\_
2. \_\_\_\_\_
3. \_\_\_\_\_
4. \_\_\_\_\_
5. \_\_\_\_\_
6. \_\_\_\_\_
7. \_\_\_\_\_
8. \_\_\_\_\_
9. \_\_\_\_\_
10. \_\_\_\_\_
11. \_\_\_\_\_
12. \_\_\_\_\_

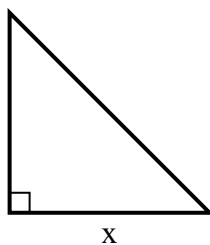


Tim giá trị của x.

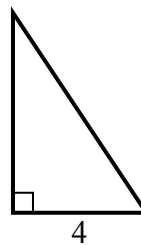
1) diện tích =  $20 u^2$



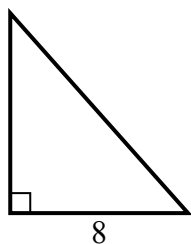
2) diện tích =  $32 u^2$



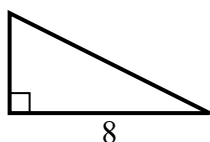
3) diện tích =  $12 u^2$



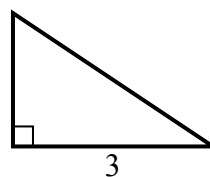
4) diện tích =  $36 u^2$



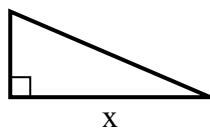
5) diện tích =  $16 u^2$



6) diện tích =  $3 u^2$



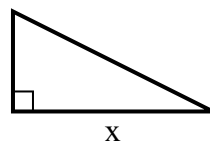
7) diện tích =  $10.5 u^2$



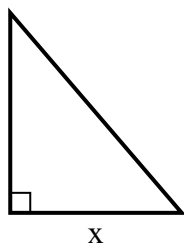
8) diện tích =  $18 u^2$



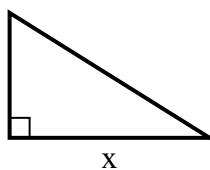
9) diện tích =  $4 u^2$



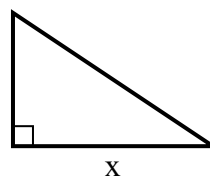
10) diện tích =  $21 u^2$



11) diện tích =  $20 u^2$



12) diện tích =  $12 u^2$



**Câu trả lời**

1. 5

2. 8

3. 6

4. 9

5. 4

6. 2

7. 7

8. 9

9. 4

10. 6

11. 8

12. 6