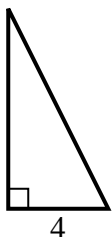


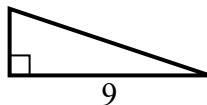


Tim giá trị của x.

1) diện tích = $16 u^2$



2) diện tích = $13.5 u^2$



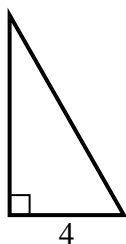
3) diện tích = $6 u^2$



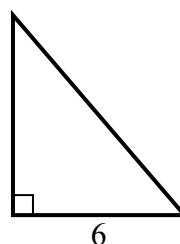
4) diện tích = $8 u^2$



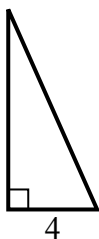
5) diện tích = $14 u^2$



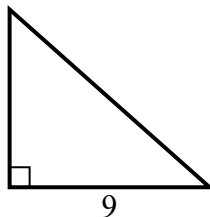
6) diện tích = $21 u^2$



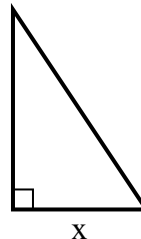
7) diện tích = $18 u^2$



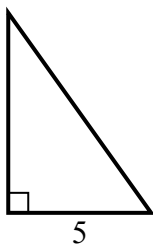
8) diện tích = $36 u^2$



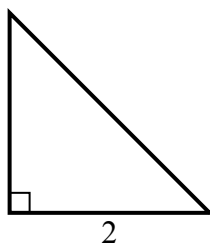
9) diện tích = $27 u^2$



10) diện tích = $17.5 u^2$



11) diện tích = $2 u^2$



12) diện tích = $13.5 u^2$



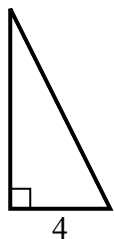
Câu trả lời

1. _____
2. _____
3. _____
4. _____
5. _____
6. _____
7. _____
8. _____
9. _____
10. _____
11. _____
12. _____

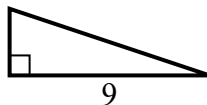


Tìm giá trị của x.

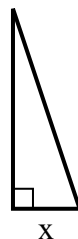
1) diện tích = $16 u^2$



2) diện tích = $13.5 u^2$



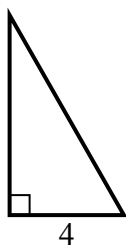
3) diện tích = $6 u^2$



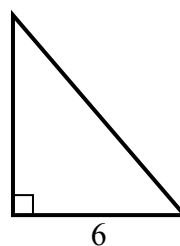
4) diện tích = $8 u^2$



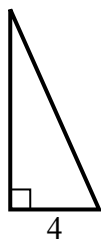
5) diện tích = $14 u^2$



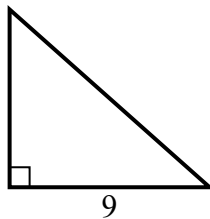
6) diện tích = $21 u^2$



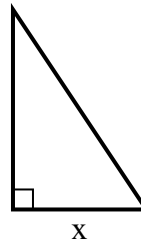
7) diện tích = $18 u^2$



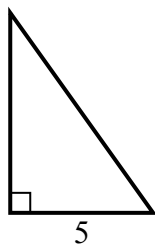
8) diện tích = $36 u^2$



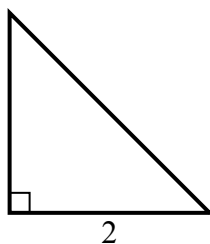
9) diện tích = $27 u^2$



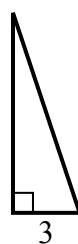
10) diện tích = $17.5 u^2$



11) diện tích = $2 u^2$



12) diện tích = $13.5 u^2$



Câu trả lời

1. 8

2. 3

3. 2

4. 2

5. 7

6. 7

7. 9

8. 8

9. 6

10. 7

11. 2

12. 9