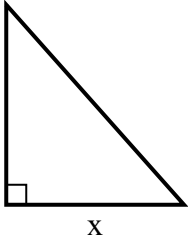


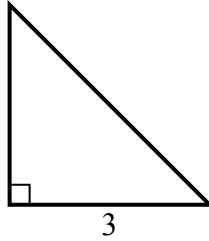


Tim giá trị của x.

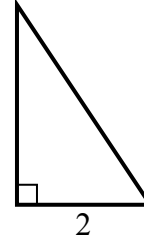
1) diện tích =  $36 u^2$



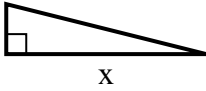
2) diện tích =  $4.5 u^2$



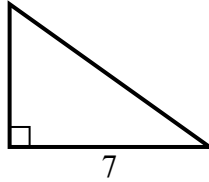
3) diện tích =  $3 u^2$



4) diện tích =  $8 u^2$



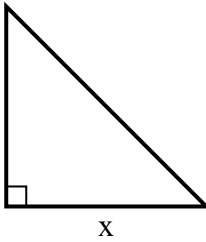
5) diện tích =  $17.5 u^2$



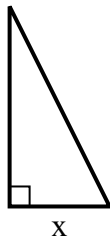
6) diện tích =  $12 u^2$



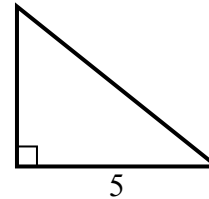
7) diện tích =  $32 u^2$



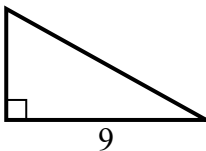
8) diện tích =  $4 u^2$



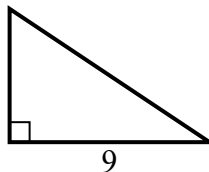
9) diện tích =  $10 u^2$



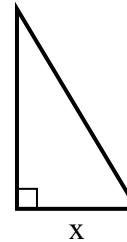
10) diện tích =  $22.5 u^2$



11) diện tích =  $27 u^2$



12) diện tích =  $7.5 u^2$



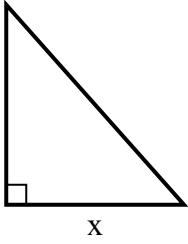
**Câu trả lời**

1. \_\_\_\_\_
2. \_\_\_\_\_
3. \_\_\_\_\_
4. \_\_\_\_\_
5. \_\_\_\_\_
6. \_\_\_\_\_
7. \_\_\_\_\_
8. \_\_\_\_\_
9. \_\_\_\_\_
10. \_\_\_\_\_
11. \_\_\_\_\_
12. \_\_\_\_\_

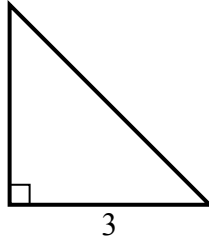


Tim giá trị của x.

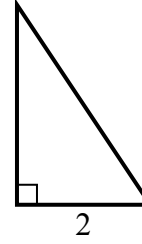
1) diện tích =  $36 u^2$



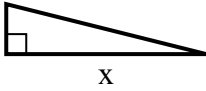
2) diện tích =  $4.5 u^2$



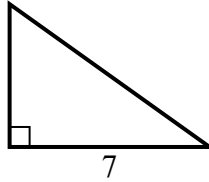
3) diện tích =  $3 u^2$



4) diện tích =  $8 u^2$



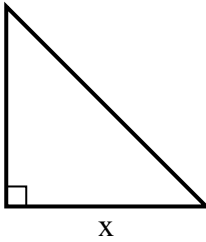
5) diện tích =  $17.5 u^2$



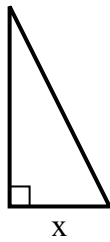
6) diện tích =  $12 u^2$



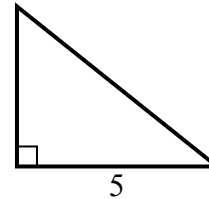
7) diện tích =  $32 u^2$



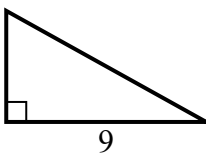
8) diện tích =  $4 u^2$



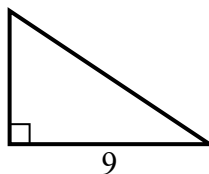
9) diện tích =  $10 u^2$



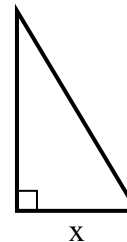
10) diện tích =  $22.5 u^2$



11) diện tích =  $27 u^2$



12) diện tích =  $7.5 u^2$



**Câu trả lời**

1. 8

2. 3

3. 3

4. 8

5. 5

6. 8

7. 8

8. 2

9. 4

10. 5

11. 6

12. 3