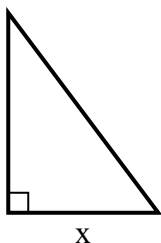


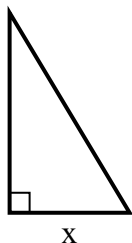


Tìm giá trị của x.

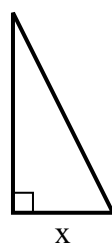
1) diện tích = $24 u^2$



2) diện tích = $7.5 u^2$



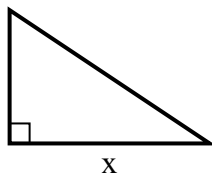
3) diện tích = $9 u^2$



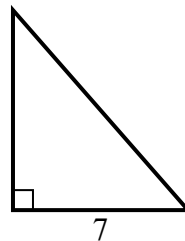
4) diện tích = $5 u^2$



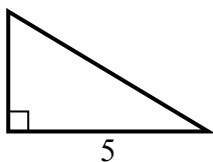
5) diện tích = $27 u^2$



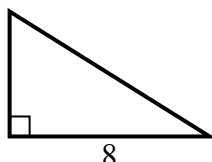
6) diện tích = $28 u^2$



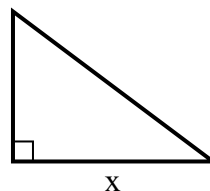
7) diện tích = $7.5 u^2$



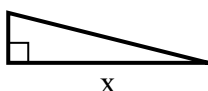
8) diện tích = $20 u^2$



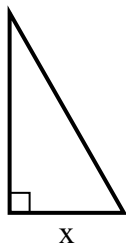
9) diện tích = $6 u^2$



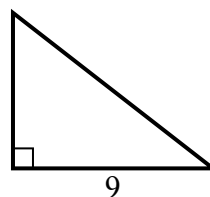
10) diện tích = $8 u^2$



11) diện tích = $14 u^2$



12) diện tích = $31.5 u^2$



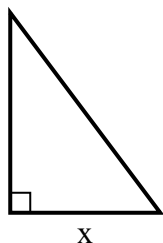
Câu trả lời

1. _____
2. _____
3. _____
4. _____
5. _____
6. _____
7. _____
8. _____
9. _____
10. _____
11. _____
12. _____

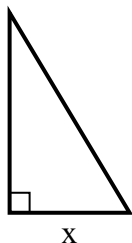


Tim giá trị của x.

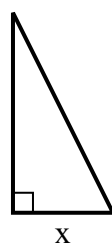
1) diện tích = $24 u^2$



2) diện tích = $7.5 u^2$



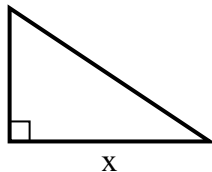
3) diện tích = $9 u^2$



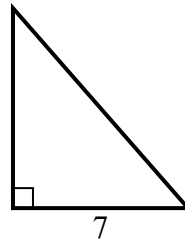
4) diện tích = $5 u^2$



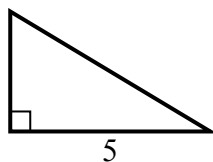
5) diện tích = $27 u^2$



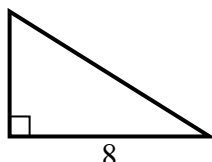
6) diện tích = $28 u^2$



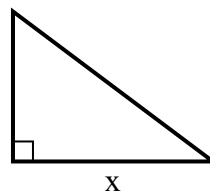
7) diện tích = $7.5 u^2$



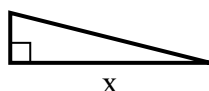
8) diện tích = $20 u^2$



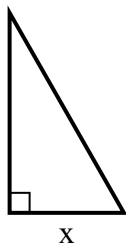
9) diện tích = $6 u^2$



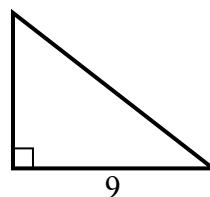
10) diện tích = $8 u^2$



11) diện tích = $14 u^2$



12) diện tích = $31.5 u^2$



Câu trả lời

1. 6

2. 3

3. 3

4. 5

5. 9

6. 8

7. 3

8. 5

9. 4

10. 8

11. 4

12. 7