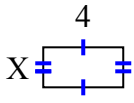




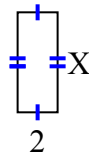
Tìm giá trị của X đối với mỗi hình. Mỗi hình tính bằng cm (cm). Không phải mở rộng quy mô.

Câu trả lời

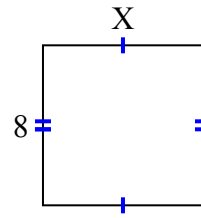
1) diện tích = 8 centimet²



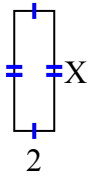
2) diện tích = 10 centimet²



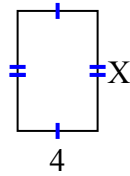
3) diện tích = 64 centimet²



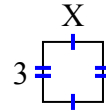
4) diện tích = 12 centimet²



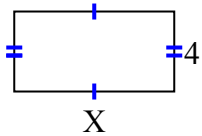
5) diện tích = 24 centimet²



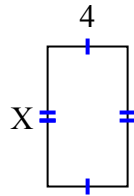
6) diện tích = 9 centimet²



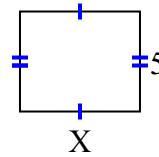
7) diện tích = 32 centimet²



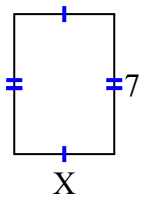
8) diện tích = 28 centimet²



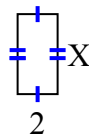
9) diện tích = 30 centimet²



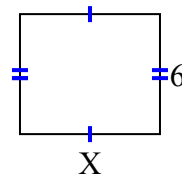
10) diện tích = 35 centimet²



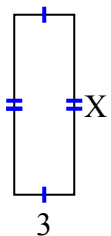
11) diện tích = 8 centimet²



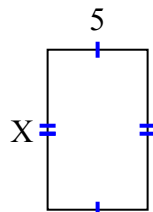
12) diện tích = 42 centimet²



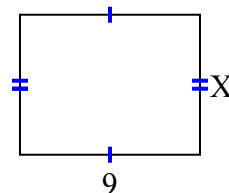
13) diện tích = 27 centimet²



14) diện tích = 40 centimet²



15) diện tích = 63 centimet²



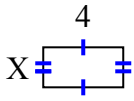
1. _____
2. _____
3. _____
4. _____
5. _____
6. _____
7. _____
8. _____
9. _____
10. _____
11. _____
12. _____
13. _____
14. _____
15. _____



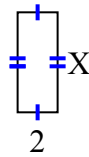
Tìm giá trị của X đối với mỗi hình. Mỗi hình tính bằng cm (cm). Không phải mở rộng quy mô.

Câu trả lời

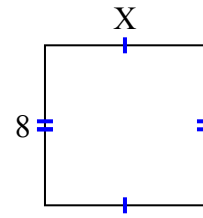
1) diện tích = 8 centimet²



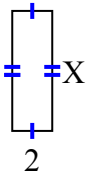
2) diện tích = 10 centimet²



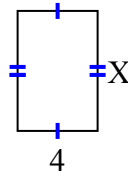
3) diện tích = 64 centimet²



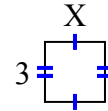
4) diện tích = 12 centimet²



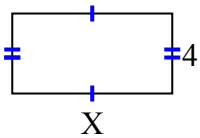
5) diện tích = 24 centimet²



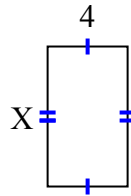
6) diện tích = 9 centimet²



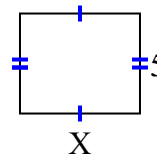
7) diện tích = 32 centimet²



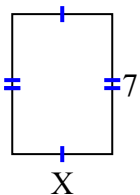
8) diện tích = 28 centimet²



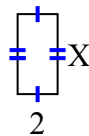
9) diện tích = 30 centimet²



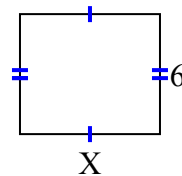
10) diện tích = 35 centimet²



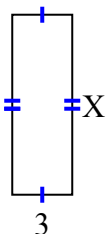
11) diện tích = 8 centimet²



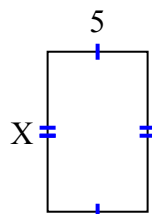
12) diện tích = 42 centimet²



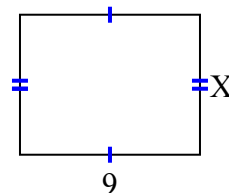
13) diện tích = 27 centimet²



14) diện tích = 40 centimet²



15) diện tích = 63 centimet²



1. 2
2. 5
3. 8
4. 6
5. 6
6. 3
7. 8
8. 7
9. 6
10. 5
11. 4
12. 7
13. 9
14. 8
15. 7