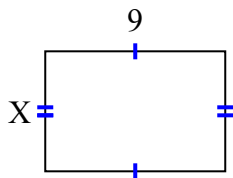




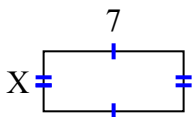
Tìm giá trị của X đối với mỗi hình. Mỗi hình tính bằng cm (cm). Không phải mở rộng quy mô.

**Câu trả lời**

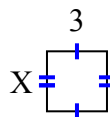
1) diện tích = 54 centimet<sup>2</sup>



2) diện tích = 21 centimet<sup>2</sup>



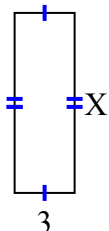
3) diện tích = 9 centimet<sup>2</sup>



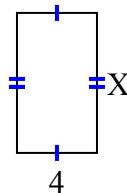
4) diện tích = 4 centimet<sup>2</sup>



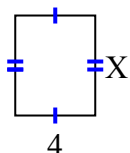
5) diện tích = 27 centimet<sup>2</sup>



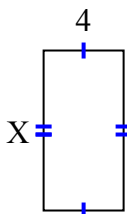
6) diện tích = 28 centimet<sup>2</sup>



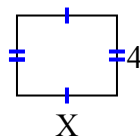
7) diện tích = 20 centimet<sup>2</sup>



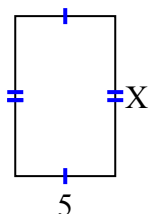
8) diện tích = 32 centimet<sup>2</sup>



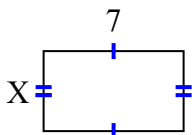
9) diện tích = 20 centimet<sup>2</sup>



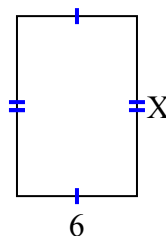
10) diện tích = 40 centimet<sup>2</sup>



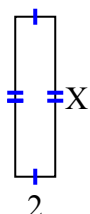
11) diện tích = 28 centimet<sup>2</sup>



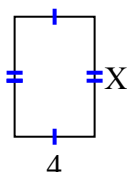
12) diện tích = 54 centimet<sup>2</sup>



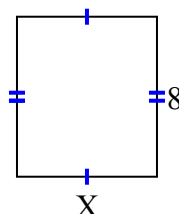
13) diện tích = 16 centimet<sup>2</sup>



14) diện tích = 24 centimet<sup>2</sup>



15) diện tích = 56 centimet<sup>2</sup>



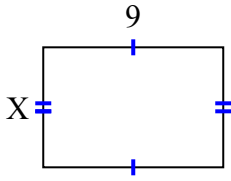
1. \_\_\_\_\_
2. \_\_\_\_\_
3. \_\_\_\_\_
4. \_\_\_\_\_
5. \_\_\_\_\_
6. \_\_\_\_\_
7. \_\_\_\_\_
8. \_\_\_\_\_
9. \_\_\_\_\_
10. \_\_\_\_\_
11. \_\_\_\_\_
12. \_\_\_\_\_
13. \_\_\_\_\_
14. \_\_\_\_\_
15. \_\_\_\_\_



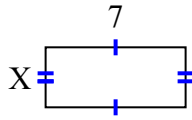
Tìm giá trị của X đối với mỗi hình. Mỗi hình tính bằng cm (cm). Không phải mở rộng quy mô.

**Câu trả lời**

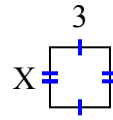
1) diện tích = 54 centimet<sup>2</sup>



2) diện tích = 21 centimet<sup>2</sup>



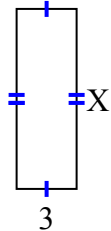
3) diện tích = 9 centimet<sup>2</sup>



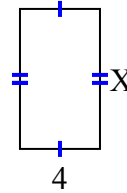
4) diện tích = 4 centimet<sup>2</sup>



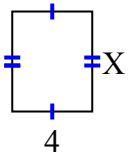
5) diện tích = 27 centimet<sup>2</sup>



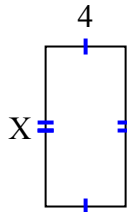
6) diện tích = 28 centimet<sup>2</sup>



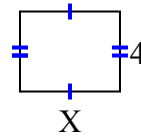
7) diện tích = 20 centimet<sup>2</sup>



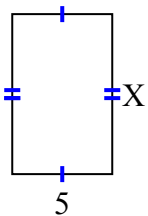
8) diện tích = 32 centimet<sup>2</sup>



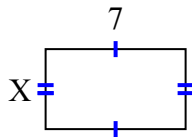
9) diện tích = 20 centimet<sup>2</sup>



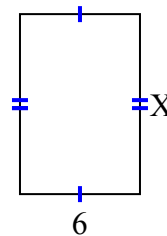
10) diện tích = 40 centimet<sup>2</sup>



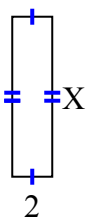
11) diện tích = 28 centimet<sup>2</sup>



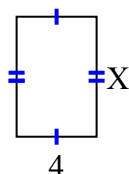
12) diện tích = 54 centimet<sup>2</sup>



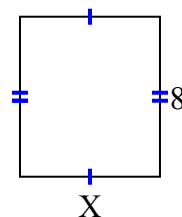
13) diện tích = 16 centimet<sup>2</sup>



14) diện tích = 24 centimet<sup>2</sup>



15) diện tích = 56 centimet<sup>2</sup>



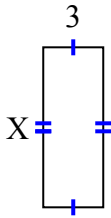
1. 6
2. 3
3. 3
4. 2
5. 9
6. 7
7. 5
8. 8
9. 5
10. 8
11. 4
12. 9
13. 8
14. 6
15. 7



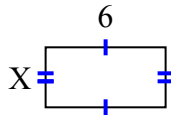
**Tìm giá trị của X đối với mỗi hình. Mỗi hình tính bằng cm (cm). Không phải mở rộng quy mô.**

**Câu trả lời**

1) diện tích = 24 centimet<sup>2</sup>



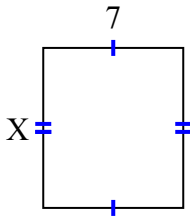
2) diện tích = 18 centimet<sup>2</sup>



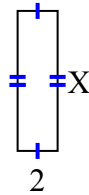
3) diện tích = 4 centimet<sup>2</sup>



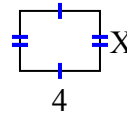
4) diện tích = 56 centimet<sup>2</sup>



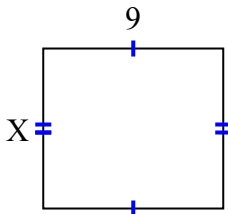
5) diện tích = 14 centimet<sup>2</sup>



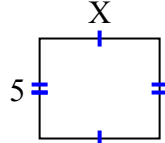
6) diện tích = 12 centimet<sup>2</sup>



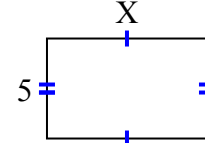
7) diện tích = 72 centimet<sup>2</sup>



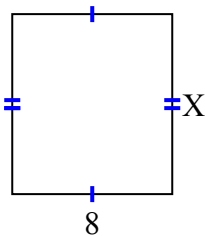
8) diện tích = 30 centimet<sup>2</sup>



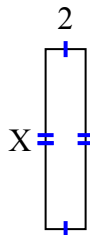
9) diện tích = 40 centimet<sup>2</sup>



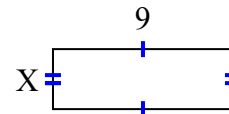
10) diện tích = 72 centimet<sup>2</sup>



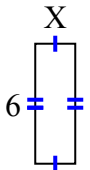
11) diện tích = 18 centimet<sup>2</sup>



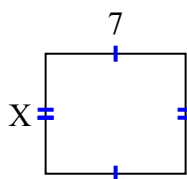
12) diện tích = 27 centimet<sup>2</sup>



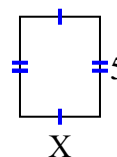
13) diện tích = 12 centimet<sup>2</sup>



14) diện tích = 42 centimet<sup>2</sup>



15) diện tích = 20 centimet<sup>2</sup>



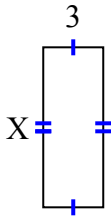
1. \_\_\_\_\_
2. \_\_\_\_\_
3. \_\_\_\_\_
4. \_\_\_\_\_
5. \_\_\_\_\_
6. \_\_\_\_\_
7. \_\_\_\_\_
8. \_\_\_\_\_
9. \_\_\_\_\_
10. \_\_\_\_\_
11. \_\_\_\_\_
12. \_\_\_\_\_
13. \_\_\_\_\_
14. \_\_\_\_\_
15. \_\_\_\_\_



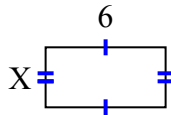
Tìm giá trị của X đối với mỗi hình. Mỗi hình tính bằng cm (cm). Không phải mở rộng quy mô.

**Câu trả lời**

1) diện tích = 24 centimet<sup>2</sup>



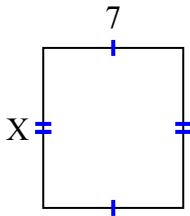
2) diện tích = 18 centimet<sup>2</sup>



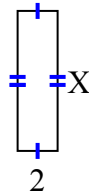
3) diện tích = 4 centimet<sup>2</sup>



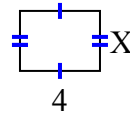
4) diện tích = 56 centimet<sup>2</sup>



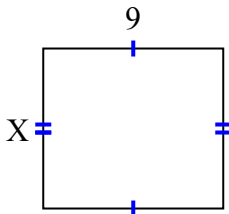
5) diện tích = 14 centimet<sup>2</sup>



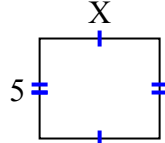
6) diện tích = 12 centimet<sup>2</sup>



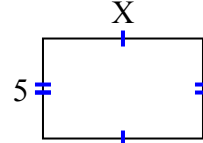
7) diện tích = 72 centimet<sup>2</sup>



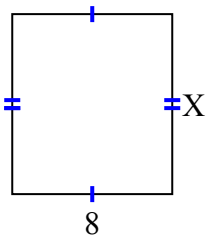
8) diện tích = 30 centimet<sup>2</sup>



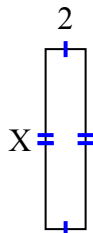
9) diện tích = 40 centimet<sup>2</sup>



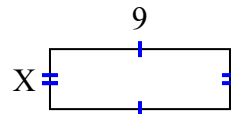
10) diện tích = 72 centimet<sup>2</sup>



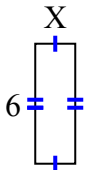
11) diện tích = 18 centimet<sup>2</sup>



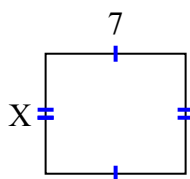
12) diện tích = 27 centimet<sup>2</sup>



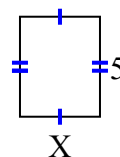
13) diện tích = 12 centimet<sup>2</sup>



14) diện tích = 42 centimet<sup>2</sup>



15) diện tích = 20 centimet<sup>2</sup>



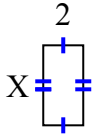
1. 8
2. 3
3. 2
4. 8
5. 7
6. 3
7. 8
8. 6
9. 8
10. 9
11. 9
12. 3
13. 2
14. 6
15. 4



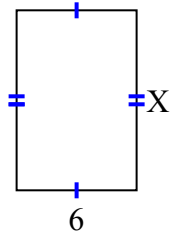
**Tìm giá trị của X đối với mỗi hình. Mỗi hình tính bằng cm (cm). Không phải mở rộng quy mô.**

**Câu trả lời**

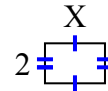
1) diện tích = 8 centimet<sup>2</sup>



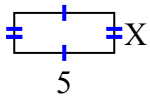
2) diện tích = 54 centimet<sup>2</sup>



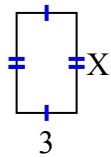
3) diện tích = 6 centimet<sup>2</sup>



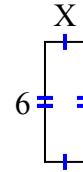
4) diện tích = 10 centimet<sup>2</sup>



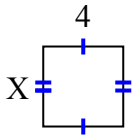
5) diện tích = 15 centimet<sup>2</sup>



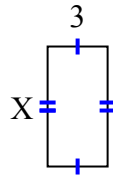
6) diện tích = 12 centimet<sup>2</sup>



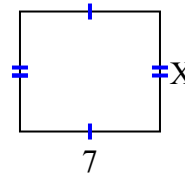
7) diện tích = 16 centimet<sup>2</sup>



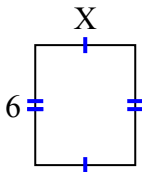
8) diện tích = 18 centimet<sup>2</sup>



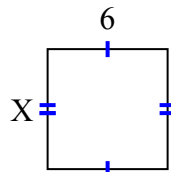
9) diện tích = 42 centimet<sup>2</sup>



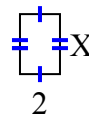
10) diện tích = 30 centimet<sup>2</sup>



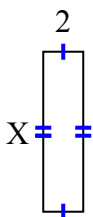
11) diện tích = 36 centimet<sup>2</sup>



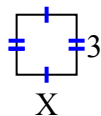
12) diện tích = 6 centimet<sup>2</sup>



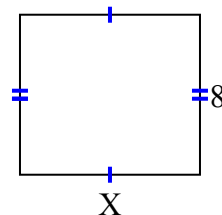
13) diện tích = 16 centimet<sup>2</sup>



14) diện tích = 9 centimet<sup>2</sup>



15) diện tích = 72 centimet<sup>2</sup>



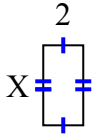
1. \_\_\_\_\_
2. \_\_\_\_\_
3. \_\_\_\_\_
4. \_\_\_\_\_
5. \_\_\_\_\_
6. \_\_\_\_\_
7. \_\_\_\_\_
8. \_\_\_\_\_
9. \_\_\_\_\_
10. \_\_\_\_\_
11. \_\_\_\_\_
12. \_\_\_\_\_
13. \_\_\_\_\_
14. \_\_\_\_\_
15. \_\_\_\_\_



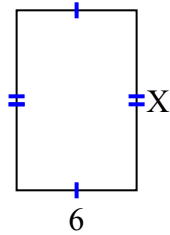
Tìm giá trị của X đối với mỗi hình. Mỗi hình tính bằng cm (cm). Không phải mở rộng quy mô.

**Câu trả lời**

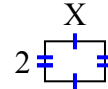
1) diện tích = 8 centimet<sup>2</sup>



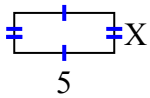
2) diện tích = 54 centimet<sup>2</sup>



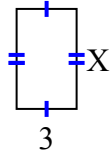
3) diện tích = 6 centimet<sup>2</sup>



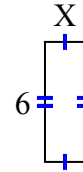
4) diện tích = 10 centimet<sup>2</sup>



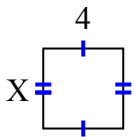
5) diện tích = 15 centimet<sup>2</sup>



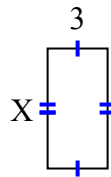
6) diện tích = 12 centimet<sup>2</sup>



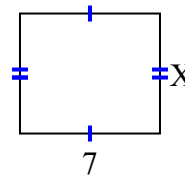
7) diện tích = 16 centimet<sup>2</sup>



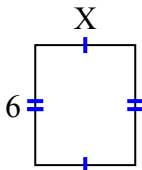
8) diện tích = 18 centimet<sup>2</sup>



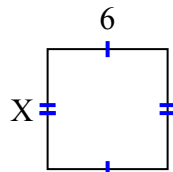
9) diện tích = 42 centimet<sup>2</sup>



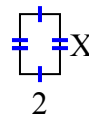
10) diện tích = 30 centimet<sup>2</sup>



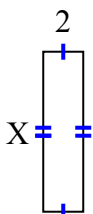
11) diện tích = 36 centimet<sup>2</sup>



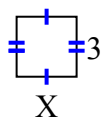
12) diện tích = 6 centimet<sup>2</sup>



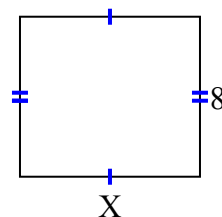
13) diện tích = 16 centimet<sup>2</sup>



14) diện tích = 9 centimet<sup>2</sup>



15) diện tích = 72 centimet<sup>2</sup>



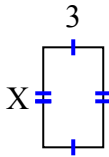
1. 4
2. 9
3. 3
4. 2
5. 5
6. 2
7. 4
8. 6
9. 6
10. 5
11. 6
12. 3
13. 8
14. 3
15. 9



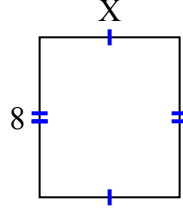
**Tìm giá trị của X đối với mỗi hình. Mỗi hình tính bằng cm (cm). Không phải mở rộng quy mô.**

**Câu trả lời**

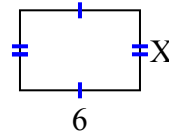
1) diện tích = 15 centimet<sup>2</sup>



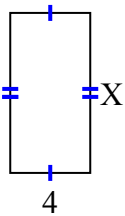
2) diện tích = 56 centimet<sup>2</sup>



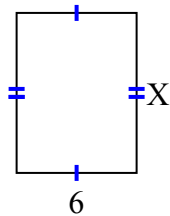
3) diện tích = 24 centimet<sup>2</sup>



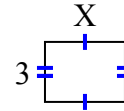
4) diện tích = 32 centimet<sup>2</sup>



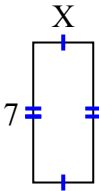
5) diện tích = 48 centimet<sup>2</sup>



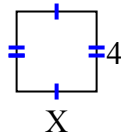
6) diện tích = 12 centimet<sup>2</sup>



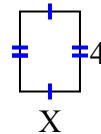
7) diện tích = 21 centimet<sup>2</sup>



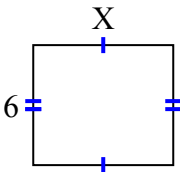
8) diện tích = 16 centimet<sup>2</sup>



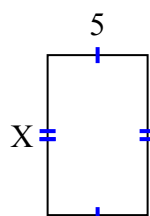
9) diện tích = 12 centimet<sup>2</sup>



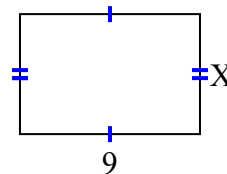
10) diện tích = 42 centimet<sup>2</sup>



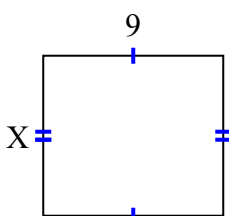
11) diện tích = 40 centimet<sup>2</sup>



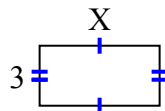
12) diện tích = 54 centimet<sup>2</sup>



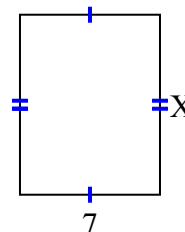
13) diện tích = 72 centimet<sup>2</sup>



14) diện tích = 18 centimet<sup>2</sup>



15) diện tích = 63 centimet<sup>2</sup>



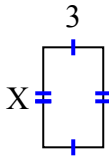
1. \_\_\_\_\_
2. \_\_\_\_\_
3. \_\_\_\_\_
4. \_\_\_\_\_
5. \_\_\_\_\_
6. \_\_\_\_\_
7. \_\_\_\_\_
8. \_\_\_\_\_
9. \_\_\_\_\_
10. \_\_\_\_\_
11. \_\_\_\_\_
12. \_\_\_\_\_
13. \_\_\_\_\_
14. \_\_\_\_\_
15. \_\_\_\_\_



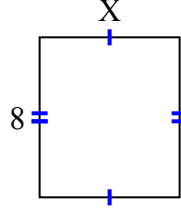
Tìm giá trị của X đối với mỗi hình. Mỗi hình tính bằng cm (cm). Không phải mở rộng quy mô.

**Câu trả lời**

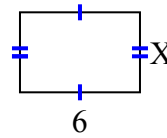
1) diện tích = 15 centimet<sup>2</sup>



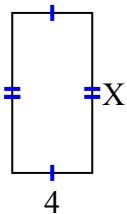
2) diện tích = 56 centimet<sup>2</sup>



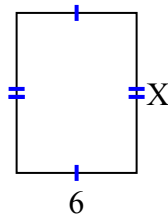
3) diện tích = 24 centimet<sup>2</sup>



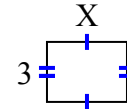
4) diện tích = 32 centimet<sup>2</sup>



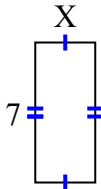
5) diện tích = 48 centimet<sup>2</sup>



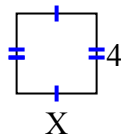
6) diện tích = 12 centimet<sup>2</sup>



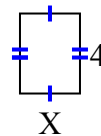
7) diện tích = 21 centimet<sup>2</sup>



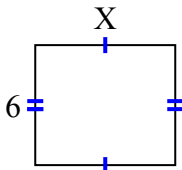
8) diện tích = 16 centimet<sup>2</sup>



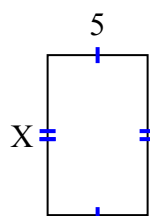
9) diện tích = 12 centimet<sup>2</sup>



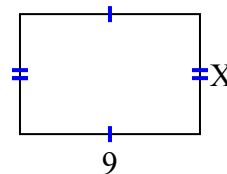
10) diện tích = 42 centimet<sup>2</sup>



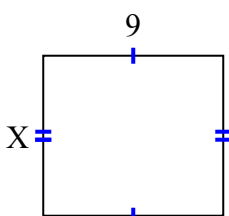
11) diện tích = 40 centimet<sup>2</sup>



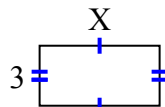
12) diện tích = 54 centimet<sup>2</sup>



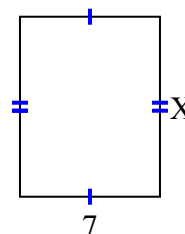
13) diện tích = 72 centimet<sup>2</sup>



14) diện tích = 18 centimet<sup>2</sup>



15) diện tích = 63 centimet<sup>2</sup>



1. 5
2. 7
3. 4
4. 8
5. 8
6. 4
7. 3
8. 4
9. 3
10. 7
11. 8
12. 6
13. 8
14. 6
15. 9

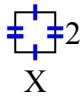




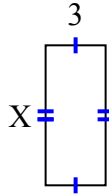
**Tìm giá trị của X đối với mỗi hình. Mỗi hình tính bằng cm (cm). Không phải mở rộng quy mô.**

**Câu trả lời**

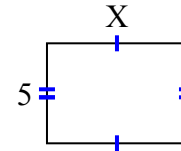
1) diện tích = 4 centimet<sup>2</sup>



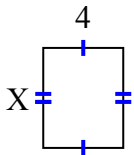
2) diện tích = 21 centimet<sup>2</sup>



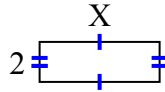
3) diện tích = 35 centimet<sup>2</sup>



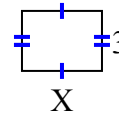
4) diện tích = 20 centimet<sup>2</sup>



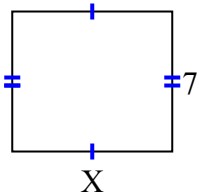
5) diện tích = 12 centimet<sup>2</sup>



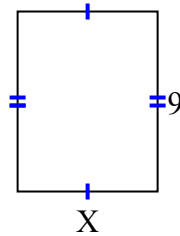
6) diện tích = 12 centimet<sup>2</sup>



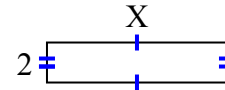
7) diện tích = 56 centimet<sup>2</sup>



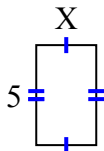
8) diện tích = 63 centimet<sup>2</sup>



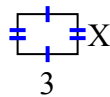
9) diện tích = 18 centimet<sup>2</sup>



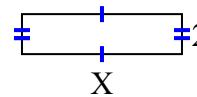
10) diện tích = 15 centimet<sup>2</sup>



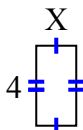
11) diện tích = 6 centimet<sup>2</sup>



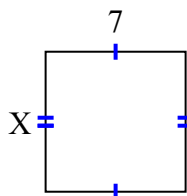
12) diện tích = 16 centimet<sup>2</sup>



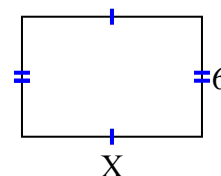
13) diện tích = 8 centimet<sup>2</sup>



14) diện tích = 49 centimet<sup>2</sup>



15) diện tích = 54 centimet<sup>2</sup>



1. \_\_\_\_\_
2. \_\_\_\_\_
3. \_\_\_\_\_
4. \_\_\_\_\_
5. \_\_\_\_\_
6. \_\_\_\_\_
7. \_\_\_\_\_
8. \_\_\_\_\_
9. \_\_\_\_\_
10. \_\_\_\_\_
11. \_\_\_\_\_
12. \_\_\_\_\_
13. \_\_\_\_\_
14. \_\_\_\_\_
15. \_\_\_\_\_



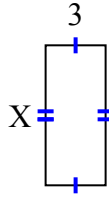
Tìm giá trị của X đối với mỗi hình. Mỗi hình tính bằng cm (cm). Không phải mở rộng quy mô.

**Câu trả lời**

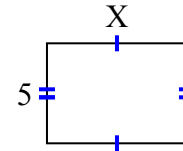
1) diện tích = 4 centimet<sup>2</sup>



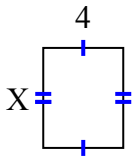
2) diện tích = 21 centimet<sup>2</sup>



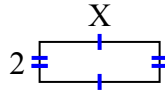
3) diện tích = 35 centimet<sup>2</sup>



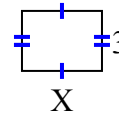
4) diện tích = 20 centimet<sup>2</sup>



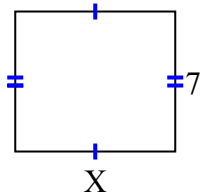
5) diện tích = 12 centimet<sup>2</sup>



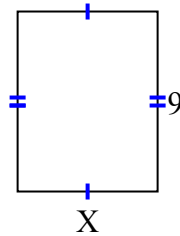
6) diện tích = 12 centimet<sup>2</sup>



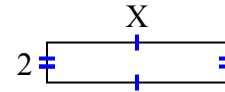
7) diện tích = 56 centimet<sup>2</sup>



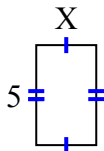
8) diện tích = 63 centimet<sup>2</sup>



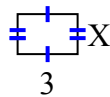
9) diện tích = 18 centimet<sup>2</sup>



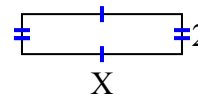
10) diện tích = 15 centimet<sup>2</sup>



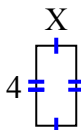
11) diện tích = 6 centimet<sup>2</sup>



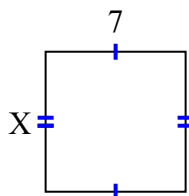
12) diện tích = 16 centimet<sup>2</sup>



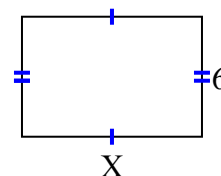
13) diện tích = 8 centimet<sup>2</sup>



14) diện tích = 49 centimet<sup>2</sup>



15) diện tích = 54 centimet<sup>2</sup>



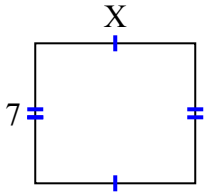
1. 2
2. 7
3. 7
4. 5
5. 6
6. 4
7. 8
8. 7
9. 9
10. 3
11. 2
12. 8
13. 2
14. 7
15. 9



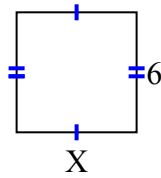
**Tìm giá trị của X đối với mỗi hình. Mỗi hình tính bằng cm (cm). Không phải mở rộng quy mô.**

**Câu trả lời**

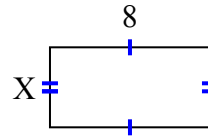
1) diện tích = 56 centimet<sup>2</sup>



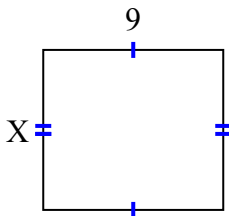
2) diện tích = 36 centimet<sup>2</sup>



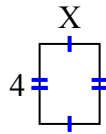
3) diện tích = 32 centimet<sup>2</sup>



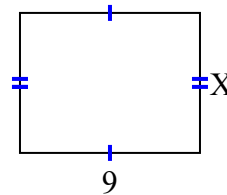
4) diện tích = 72 centimet<sup>2</sup>



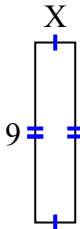
5) diện tích = 12 centimet<sup>2</sup>



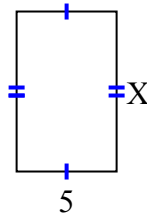
6) diện tích = 63 centimet<sup>2</sup>



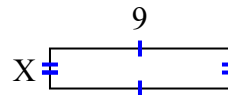
7) diện tích = 18 centimet<sup>2</sup>



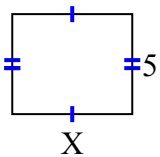
8) diện tích = 40 centimet<sup>2</sup>



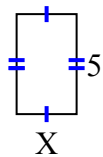
9) diện tích = 18 centimet<sup>2</sup>



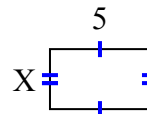
10) diện tích = 30 centimet<sup>2</sup>



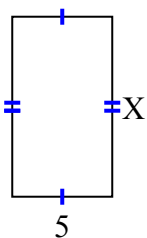
11) diện tích = 15 centimet<sup>2</sup>



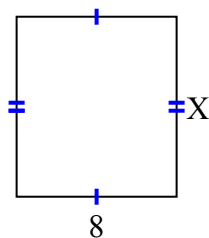
12) diện tích = 15 centimet<sup>2</sup>



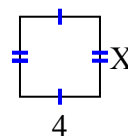
13) diện tích = 45 centimet<sup>2</sup>



14) diện tích = 72 centimet<sup>2</sup>



15) diện tích = 16 centimet<sup>2</sup>



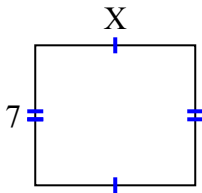
1. \_\_\_\_\_
2. \_\_\_\_\_
3. \_\_\_\_\_
4. \_\_\_\_\_
5. \_\_\_\_\_
6. \_\_\_\_\_
7. \_\_\_\_\_
8. \_\_\_\_\_
9. \_\_\_\_\_
10. \_\_\_\_\_
11. \_\_\_\_\_
12. \_\_\_\_\_
13. \_\_\_\_\_
14. \_\_\_\_\_
15. \_\_\_\_\_



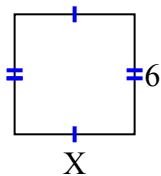
Tìm giá trị của X đối với mỗi hình. Mỗi hình tính bằng cm (cm). Không phải mở rộng quy mô.

**Câu trả lời**

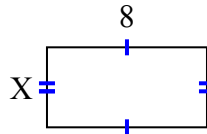
1) diện tích = 56 centimet<sup>2</sup>



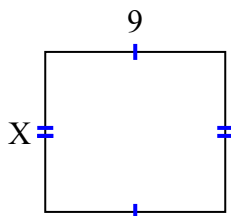
2) diện tích = 36 centimet<sup>2</sup>



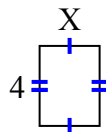
3) diện tích = 32 centimet<sup>2</sup>



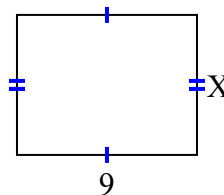
4) diện tích = 72 centimet<sup>2</sup>



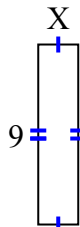
5) diện tích = 12 centimet<sup>2</sup>



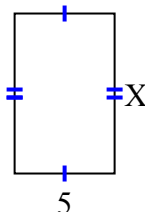
6) diện tích = 63 centimet<sup>2</sup>



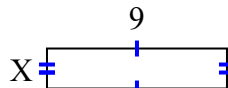
7) diện tích = 18 centimet<sup>2</sup>



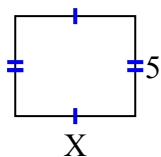
8) diện tích = 40 centimet<sup>2</sup>



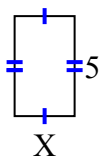
9) diện tích = 18 centimet<sup>2</sup>



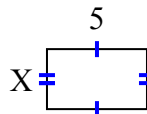
10) diện tích = 30 centimet<sup>2</sup>



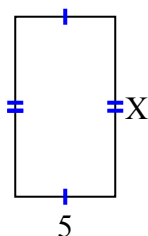
11) diện tích = 15 centimet<sup>2</sup>



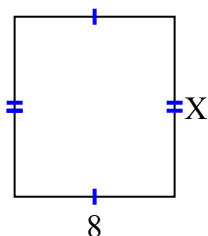
12) diện tích = 15 centimet<sup>2</sup>



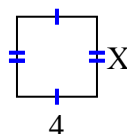
13) diện tích = 45 centimet<sup>2</sup>



14) diện tích = 72 centimet<sup>2</sup>



15) diện tích = 16 centimet<sup>2</sup>



1. 8

2. 6

3. 4

4. 8

5. 3

6. 7

7. 2

8. 8

9. 2

10. 6

11. 3

12. 3

13. 9

14. 9

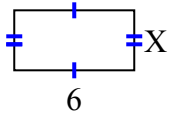
15. 4



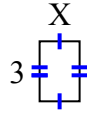
**Tìm giá trị của X đối với mỗi hình. Mỗi hình tính bằng cm (cm). Không phải mở rộng quy mô.**

**Câu trả lời**

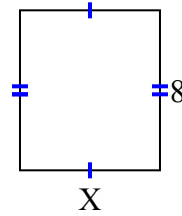
1) diện tích = 18 centimet<sup>2</sup>



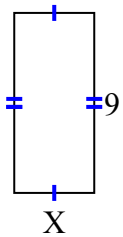
2) diện tích = 6 centimet<sup>2</sup>



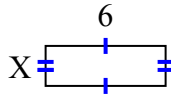
3) diện tích = 56 centimet<sup>2</sup>



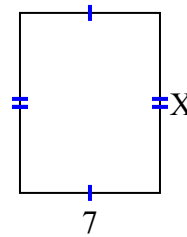
4) diện tích = 36 centimet<sup>2</sup>



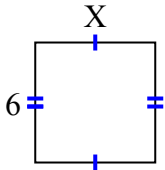
5) diện tích = 12 centimet<sup>2</sup>



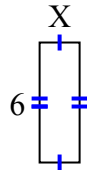
6) diện tích = 63 centimet<sup>2</sup>



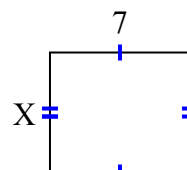
7) diện tích = 36 centimet<sup>2</sup>



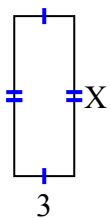
8) diện tích = 12 centimet<sup>2</sup>



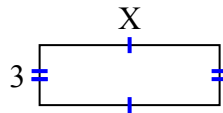
9) diện tích = 42 centimet<sup>2</sup>



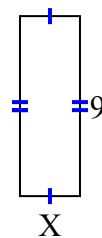
10) diện tích = 24 centimet<sup>2</sup>



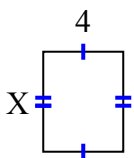
11) diện tích = 27 centimet<sup>2</sup>



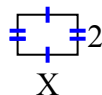
12) diện tích = 27 centimet<sup>2</sup>



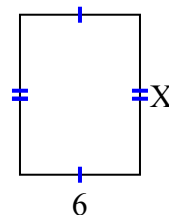
13) diện tích = 20 centimet<sup>2</sup>



14) diện tích = 6 centimet<sup>2</sup>



15) diện tích = 48 centimet<sup>2</sup>



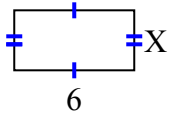
1. \_\_\_\_\_
2. \_\_\_\_\_
3. \_\_\_\_\_
4. \_\_\_\_\_
5. \_\_\_\_\_
6. \_\_\_\_\_
7. \_\_\_\_\_
8. \_\_\_\_\_
9. \_\_\_\_\_
10. \_\_\_\_\_
11. \_\_\_\_\_
12. \_\_\_\_\_
13. \_\_\_\_\_
14. \_\_\_\_\_
15. \_\_\_\_\_



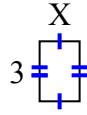
**Tìm giá trị của X đối với mỗi hình. Mỗi hình tính bằng cm (cm). Không phải mở rộng quy mô.**

**Câu trả lời**

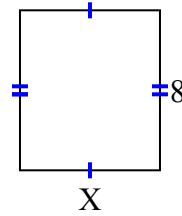
1) diện tích = 18 centimet<sup>2</sup>



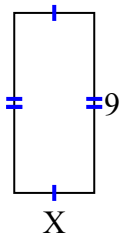
2) diện tích = 6 centimet<sup>2</sup>



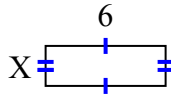
3) diện tích = 56 centimet<sup>2</sup>



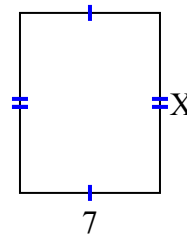
4) diện tích = 36 centimet<sup>2</sup>



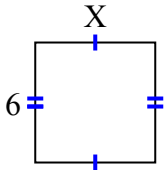
5) diện tích = 12 centimet<sup>2</sup>



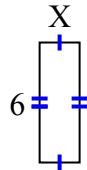
6) diện tích = 63 centimet<sup>2</sup>



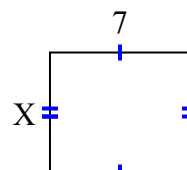
7) diện tích = 36 centimet<sup>2</sup>



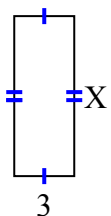
8) diện tích = 12 centimet<sup>2</sup>



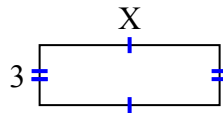
9) diện tích = 42 centimet<sup>2</sup>



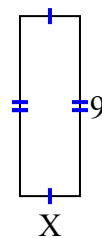
10) diện tích = 24 centimet<sup>2</sup>



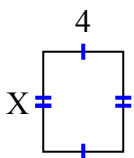
11) diện tích = 27 centimet<sup>2</sup>



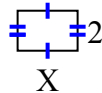
12) diện tích = 27 centimet<sup>2</sup>



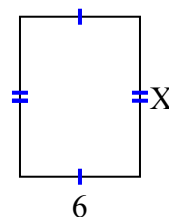
13) diện tích = 20 centimet<sup>2</sup>



14) diện tích = 6 centimet<sup>2</sup>



15) diện tích = 48 centimet<sup>2</sup>



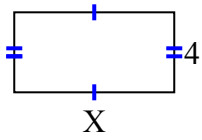
1. 3
2. 2
3. 7
4. 4
5. 2
6. 9
7. 6
8. 2
9. 6
10. 8
11. 9
12. 3
13. 5
14. 3
15. 8



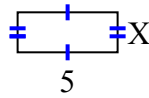
**Tìm giá trị của X đối với mỗi hình. Mỗi hình tính bằng cm (cm). Không phải mở rộng quy mô.**

**Câu trả lời**

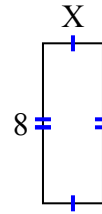
1) diện tích = 32 centimet<sup>2</sup>



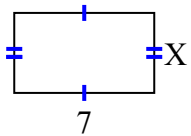
2) diện tích = 10 centimet<sup>2</sup>



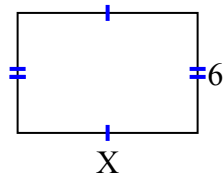
3) diện tích = 24 centimet<sup>2</sup>



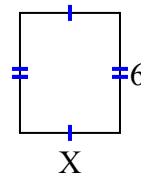
4) diện tích = 28 centimet<sup>2</sup>



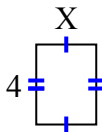
5) diện tích = 54 centimet<sup>2</sup>



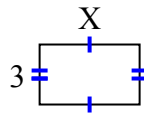
6) diện tích = 30 centimet<sup>2</sup>



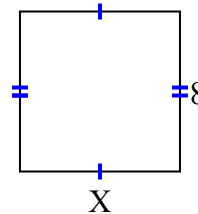
7) diện tích = 12 centimet<sup>2</sup>



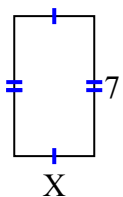
8) diện tích = 15 centimet<sup>2</sup>



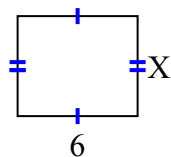
9) diện tích = 64 centimet<sup>2</sup>



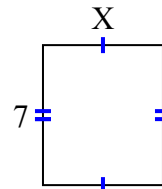
10) diện tích = 28 centimet<sup>2</sup>



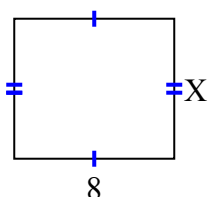
11) diện tích = 30 centimet<sup>2</sup>



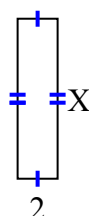
12) diện tích = 42 centimet<sup>2</sup>



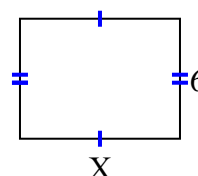
13) diện tích = 56 centimet<sup>2</sup>



14) diện tích = 16 centimet<sup>2</sup>



15) diện tích = 48 centimet<sup>2</sup>



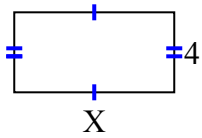
1. \_\_\_\_\_
2. \_\_\_\_\_
3. \_\_\_\_\_
4. \_\_\_\_\_
5. \_\_\_\_\_
6. \_\_\_\_\_
7. \_\_\_\_\_
8. \_\_\_\_\_
9. \_\_\_\_\_
10. \_\_\_\_\_
11. \_\_\_\_\_
12. \_\_\_\_\_
13. \_\_\_\_\_
14. \_\_\_\_\_
15. \_\_\_\_\_



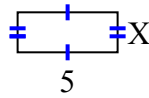
Tìm giá trị của X đối với mỗi hình. Mỗi hình tính bằng cm (cm). Không phải mở rộng quy mô.

**Câu trả lời**

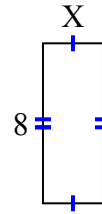
1) diện tích = 32 centimet<sup>2</sup>



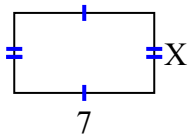
2) diện tích = 10 centimet<sup>2</sup>



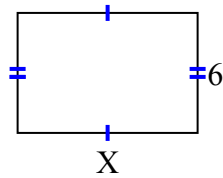
3) diện tích = 24 centimet<sup>2</sup>



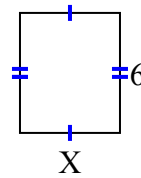
4) diện tích = 28 centimet<sup>2</sup>



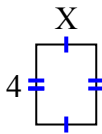
5) diện tích = 54 centimet<sup>2</sup>



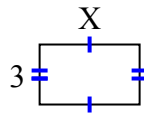
6) diện tích = 30 centimet<sup>2</sup>



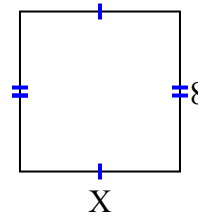
7) diện tích = 12 centimet<sup>2</sup>



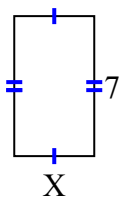
8) diện tích = 15 centimet<sup>2</sup>



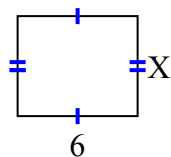
9) diện tích = 64 centimet<sup>2</sup>



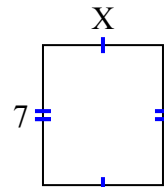
10) diện tích = 28 centimet<sup>2</sup>



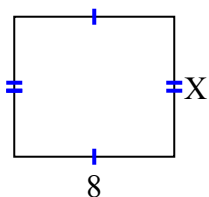
11) diện tích = 30 centimet<sup>2</sup>



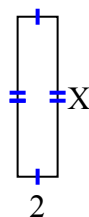
12) diện tích = 42 centimet<sup>2</sup>



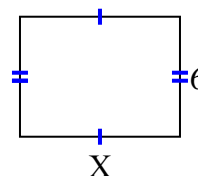
13) diện tích = 56 centimet<sup>2</sup>



14) diện tích = 16 centimet<sup>2</sup>



15) diện tích = 48 centimet<sup>2</sup>



1. 8
2. 2
3. 3
4. 4
5. 9
6. 5
7. 3
8. 5
9. 8
10. 4
11. 5
12. 6
13. 7
14. 8
15. 8

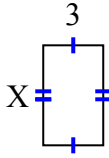




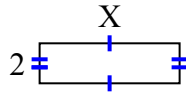
**Tìm giá trị của X đối với mỗi hình. Mỗi hình tính bằng cm (cm). Không phải mở rộng quy mô.**

**Câu trả lời**

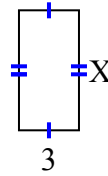
1) diện tích = 15 centimet<sup>2</sup>



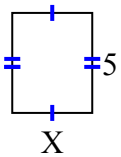
2) diện tích = 14 centimet<sup>2</sup>



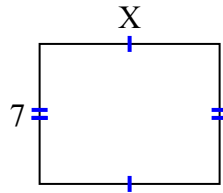
3) diện tích = 18 centimet<sup>2</sup>



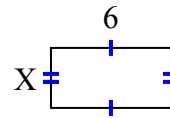
4) diện tích = 20 centimet<sup>2</sup>



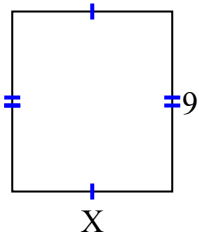
5) diện tích = 63 centimet<sup>2</sup>



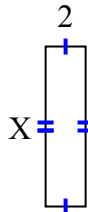
6) diện tích = 18 centimet<sup>2</sup>



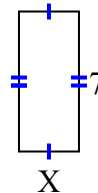
7) diện tích = 72 centimet<sup>2</sup>



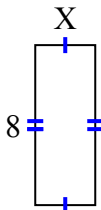
8) diện tích = 16 centimet<sup>2</sup>



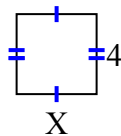
9) diện tích = 21 centimet<sup>2</sup>



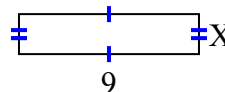
10) diện tích = 24 centimet<sup>2</sup>



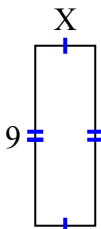
11) diện tích = 16 centimet<sup>2</sup>



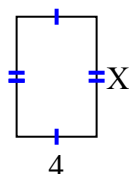
12) diện tích = 18 centimet<sup>2</sup>



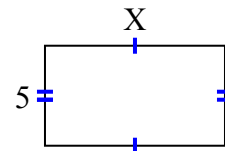
13) diện tích = 27 centimet<sup>2</sup>



14) diện tích = 24 centimet<sup>2</sup>



15) diện tích = 45 centimet<sup>2</sup>



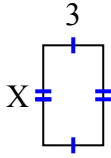
1. \_\_\_\_\_
2. \_\_\_\_\_
3. \_\_\_\_\_
4. \_\_\_\_\_
5. \_\_\_\_\_
6. \_\_\_\_\_
7. \_\_\_\_\_
8. \_\_\_\_\_
9. \_\_\_\_\_
10. \_\_\_\_\_
11. \_\_\_\_\_
12. \_\_\_\_\_
13. \_\_\_\_\_
14. \_\_\_\_\_
15. \_\_\_\_\_



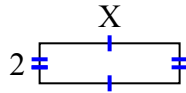
Tìm giá trị của X đối với mỗi hình. Mỗi hình tính bằng cm (cm). Không phải mở rộng quy mô.

**Câu trả lời**

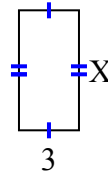
1) diện tích = 15 centimet<sup>2</sup>



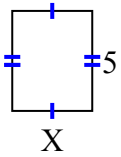
2) diện tích = 14 centimet<sup>2</sup>



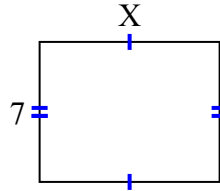
3) diện tích = 18 centimet<sup>2</sup>



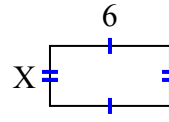
4) diện tích = 20 centimet<sup>2</sup>



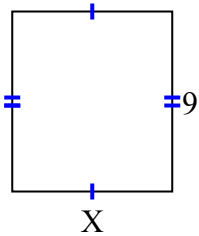
5) diện tích = 63 centimet<sup>2</sup>



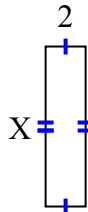
6) diện tích = 18 centimet<sup>2</sup>



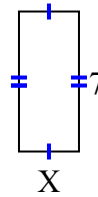
7) diện tích = 72 centimet<sup>2</sup>



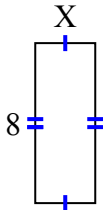
8) diện tích = 16 centimet<sup>2</sup>



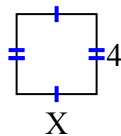
9) diện tích = 21 centimet<sup>2</sup>



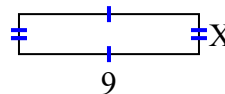
10) diện tích = 24 centimet<sup>2</sup>



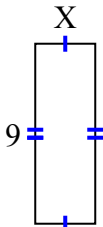
11) diện tích = 16 centimet<sup>2</sup>



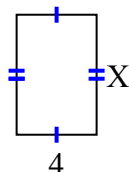
12) diện tích = 18 centimet<sup>2</sup>



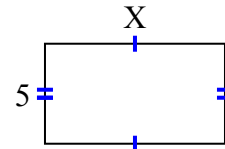
13) diện tích = 27 centimet<sup>2</sup>



14) diện tích = 24 centimet<sup>2</sup>



15) diện tích = 45 centimet<sup>2</sup>



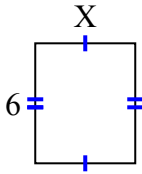
1. 5
2. 7
3. 6
4. 4
5. 9
6. 3
7. 8
8. 8
9. 3
10. 3
11. 4
12. 2
13. 3
14. 6
15. 9



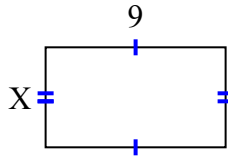
**Tìm giá trị của X đối với mỗi hình. Mỗi hình tính bằng cm (cm). Không phải mở rộng quy mô.**

**Câu trả lời**

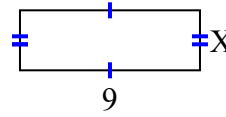
1) diện tích = 30 centimet<sup>2</sup>



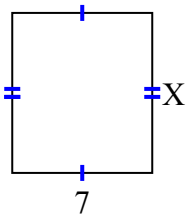
2) diện tích = 45 centimet<sup>2</sup>



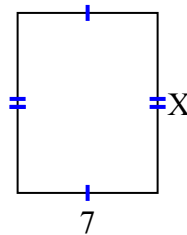
3) diện tích = 27 centimet<sup>2</sup>



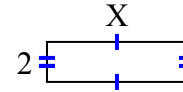
4) diện tích = 56 centimet<sup>2</sup>



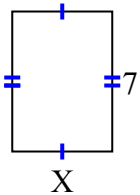
5) diện tích = 63 centimet<sup>2</sup>



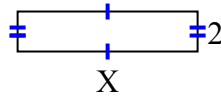
6) diện tích = 14 centimet<sup>2</sup>



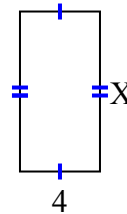
7) diện tích = 35 centimet<sup>2</sup>



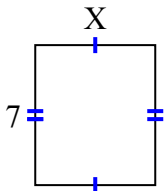
8) diện tích = 18 centimet<sup>2</sup>



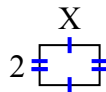
9) diện tích = 32 centimet<sup>2</sup>



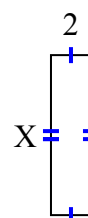
10) diện tích = 42 centimet<sup>2</sup>



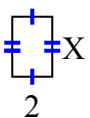
11) diện tích = 6 centimet<sup>2</sup>



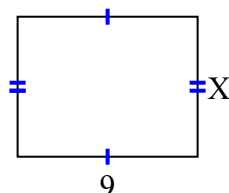
12) diện tích = 16 centimet<sup>2</sup>



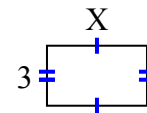
13) diện tích = 6 centimet<sup>2</sup>



14) diện tích = 63 centimet<sup>2</sup>



15) diện tích = 15 centimet<sup>2</sup>



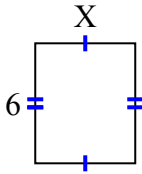
1. \_\_\_\_\_
2. \_\_\_\_\_
3. \_\_\_\_\_
4. \_\_\_\_\_
5. \_\_\_\_\_
6. \_\_\_\_\_
7. \_\_\_\_\_
8. \_\_\_\_\_
9. \_\_\_\_\_
10. \_\_\_\_\_
11. \_\_\_\_\_
12. \_\_\_\_\_
13. \_\_\_\_\_
14. \_\_\_\_\_
15. \_\_\_\_\_



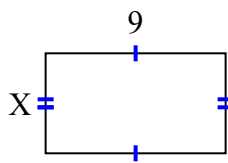
Tìm giá trị của X đối với mỗi hình. Mỗi hình tính bằng cm (cm). Không phải mở rộng quy mô.

**Câu trả lời**

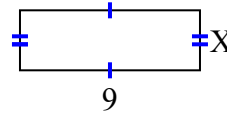
1) diện tích = 30 centimet<sup>2</sup>



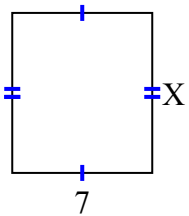
2) diện tích = 45 centimet<sup>2</sup>



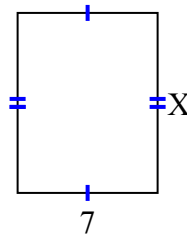
3) diện tích = 27 centimet<sup>2</sup>



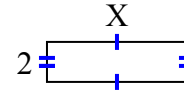
4) diện tích = 56 centimet<sup>2</sup>



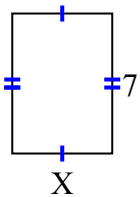
5) diện tích = 63 centimet<sup>2</sup>



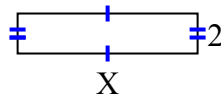
6) diện tích = 14 centimet<sup>2</sup>



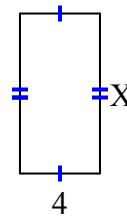
7) diện tích = 35 centimet<sup>2</sup>



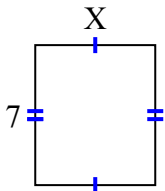
8) diện tích = 18 centimet<sup>2</sup>



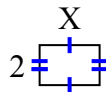
9) diện tích = 32 centimet<sup>2</sup>



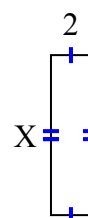
10) diện tích = 42 centimet<sup>2</sup>



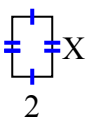
11) diện tích = 6 centimet<sup>2</sup>



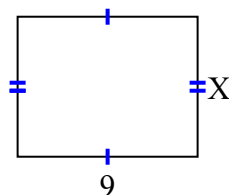
12) diện tích = 16 centimet<sup>2</sup>



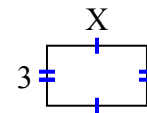
13) diện tích = 6 centimet<sup>2</sup>



14) diện tích = 63 centimet<sup>2</sup>



15) diện tích = 15 centimet<sup>2</sup>



1. 5
2. 5
3. 3
4. 8
5. 9
6. 7
7. 5
8. 9
9. 8
10. 6
11. 3
12. 8
13. 3
14. 7
15. 5