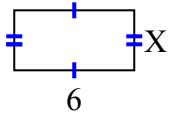




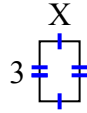
Tìm giá trị của X đối với mỗi hình. Mỗi hình tính bằng cm (cm). Không phải mở rộng quy mô.

Câu trả lời

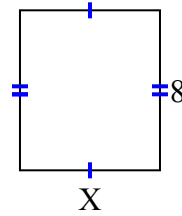
1) diện tích = 18 centimet²



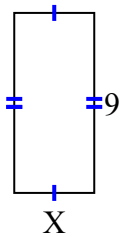
2) diện tích = 6 centimet²



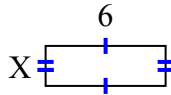
3) diện tích = 56 centimet²



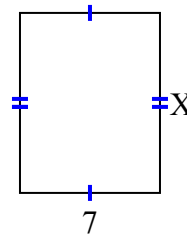
4) diện tích = 36 centimet²



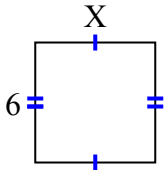
5) diện tích = 12 centimet²



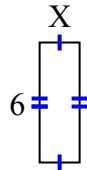
6) diện tích = 63 centimet²



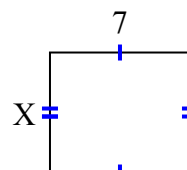
7) diện tích = 36 centimet²



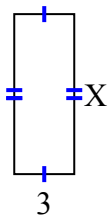
8) diện tích = 12 centimet²



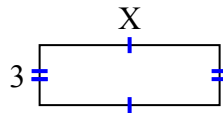
9) diện tích = 42 centimet²



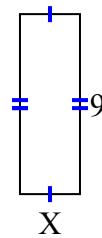
10) diện tích = 24 centimet²



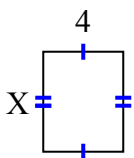
11) diện tích = 27 centimet²



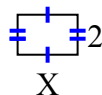
12) diện tích = 27 centimet²



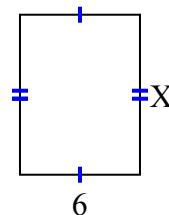
13) diện tích = 20 centimet²



14) diện tích = 6 centimet²



15) diện tích = 48 centimet²



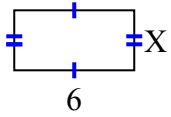
1. _____
2. _____
3. _____
4. _____
5. _____
6. _____
7. _____
8. _____
9. _____
10. _____
11. _____
12. _____
13. _____
14. _____
15. _____



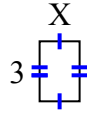
Tìm giá trị của X đối với mỗi hình. Mỗi hình tính bằng cm (cm). Không phải mở rộng quy mô.

Câu trả lời

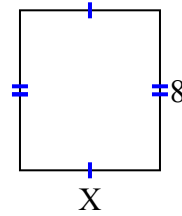
1) diện tích = 18 centimet²



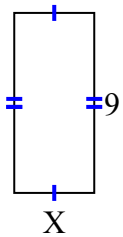
2) diện tích = 6 centimet²



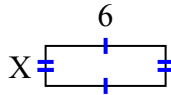
3) diện tích = 56 centimet²



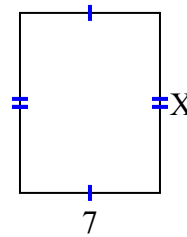
4) diện tích = 36 centimet²



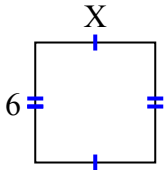
5) diện tích = 12 centimet²



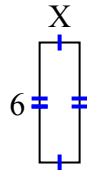
6) diện tích = 63 centimet²



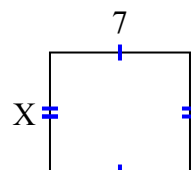
7) diện tích = 36 centimet²



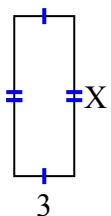
8) diện tích = 12 centimet²



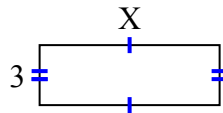
9) diện tích = 42 centimet²



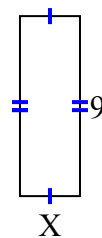
10) diện tích = 24 centimet²



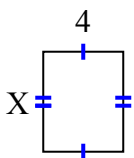
11) diện tích = 27 centimet²



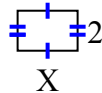
12) diện tích = 27 centimet²



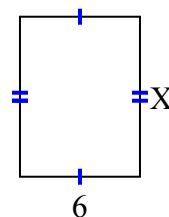
13) diện tích = 20 centimet²



14) diện tích = 6 centimet²



15) diện tích = 48 centimet²



1. 3
2. 2
3. 7
4. 4
5. 2
6. 9
7. 6
8. 2
9. 6
10. 8
11. 9
12. 3
13. 5
14. 3
15. 8