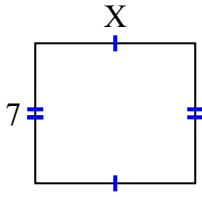




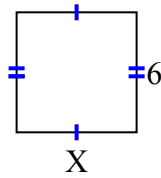
Tìm giá trị của X đối với mỗi hình. Mỗi hình tính bằng cm (cm). Không phải mở rộng quy mô.

**Câu trả lời**

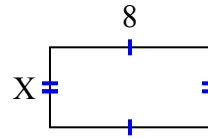
1) diện tích = 56 centimet<sup>2</sup>



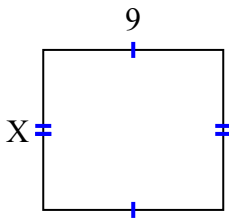
2) diện tích = 36 centimet<sup>2</sup>



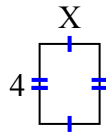
3) diện tích = 32 centimet<sup>2</sup>



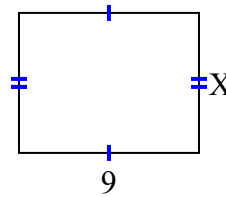
4) diện tích = 72 centimet<sup>2</sup>



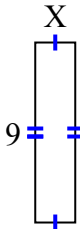
5) diện tích = 12 centimet<sup>2</sup>



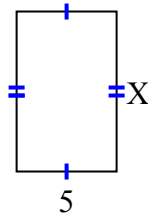
6) diện tích = 63 centimet<sup>2</sup>



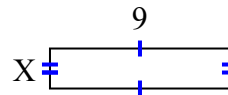
7) diện tích = 18 centimet<sup>2</sup>



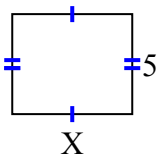
8) diện tích = 40 centimet<sup>2</sup>



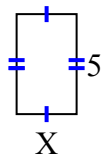
9) diện tích = 18 centimet<sup>2</sup>



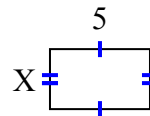
10) diện tích = 30 centimet<sup>2</sup>



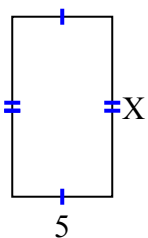
11) diện tích = 15 centimet<sup>2</sup>



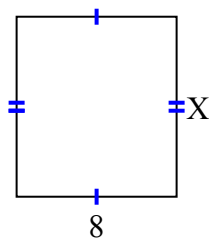
12) diện tích = 15 centimet<sup>2</sup>



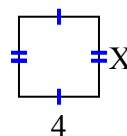
13) diện tích = 45 centimet<sup>2</sup>



14) diện tích = 72 centimet<sup>2</sup>



15) diện tích = 16 centimet<sup>2</sup>



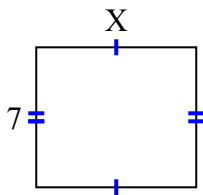
1. \_\_\_\_\_
2. \_\_\_\_\_
3. \_\_\_\_\_
4. \_\_\_\_\_
5. \_\_\_\_\_
6. \_\_\_\_\_
7. \_\_\_\_\_
8. \_\_\_\_\_
9. \_\_\_\_\_
10. \_\_\_\_\_
11. \_\_\_\_\_
12. \_\_\_\_\_
13. \_\_\_\_\_
14. \_\_\_\_\_
15. \_\_\_\_\_



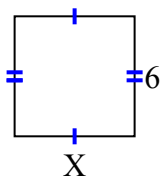
**Tìm giá trị của X đối với mỗi hình. Mỗi hình tính bằng cm (cm). Không phải mở rộng quy mô.**

**Câu trả lời**

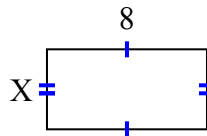
1) diện tích = 56 centimet<sup>2</sup>



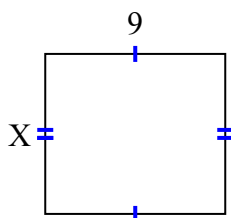
2) diện tích = 36 centimet<sup>2</sup>



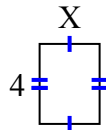
3) diện tích = 32 centimet<sup>2</sup>



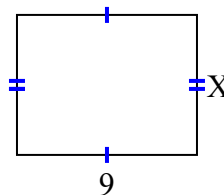
4) diện tích = 72 centimet<sup>2</sup>



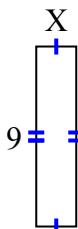
5) diện tích = 12 centimet<sup>2</sup>



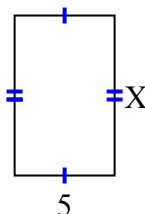
6) diện tích = 63 centimet<sup>2</sup>



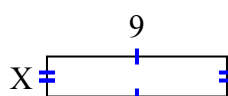
7) diện tích = 18 centimet<sup>2</sup>



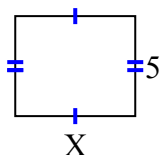
8) diện tích = 40 centimet<sup>2</sup>



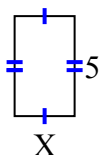
9) diện tích = 18 centimet<sup>2</sup>



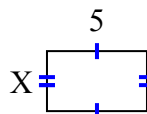
10) diện tích = 30 centimet<sup>2</sup>



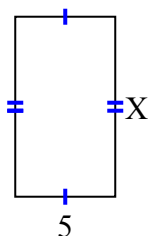
11) diện tích = 15 centimet<sup>2</sup>



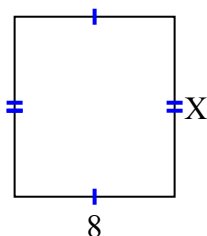
12) diện tích = 15 centimet<sup>2</sup>



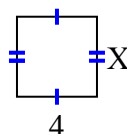
13) diện tích = 45 centimet<sup>2</sup>



14) diện tích = 72 centimet<sup>2</sup>



15) diện tích = 16 centimet<sup>2</sup>



1. 8
2. 6
3. 4
4. 8
5. 3
6. 7
7. 2
8. 8
9. 2
10. 6
11. 3
12. 3
13. 9
14. 9
15. 4