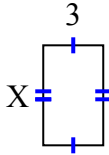




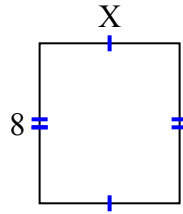
Tìm giá trị của X đối với mỗi hình. Mỗi hình tính bằng cm (cm). Không phải mở rộng quy mô.

Câu trả lời

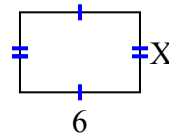
1) diện tích = 15 centimet²



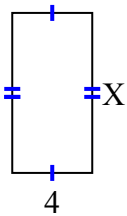
2) diện tích = 56 centimet²



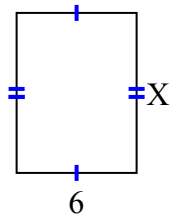
3) diện tích = 24 centimet²



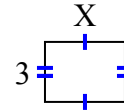
4) diện tích = 32 centimet²



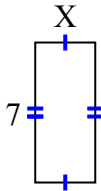
5) diện tích = 48 centimet²



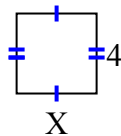
6) diện tích = 12 centimet²



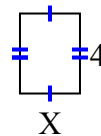
7) diện tích = 21 centimet²



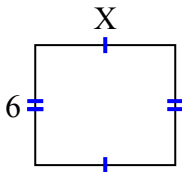
8) diện tích = 16 centimet²



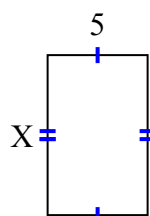
9) diện tích = 12 centimet²



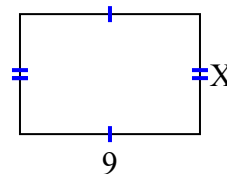
10) diện tích = 42 centimet²



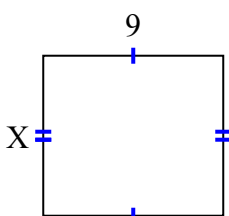
11) diện tích = 40 centimet²



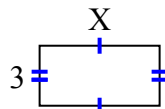
12) diện tích = 54 centimet²



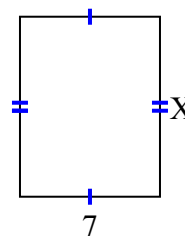
13) diện tích = 72 centimet²



14) diện tích = 18 centimet²



15) diện tích = 63 centimet²



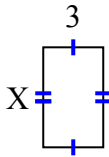
1. _____
2. _____
3. _____
4. _____
5. _____
6. _____
7. _____
8. _____
9. _____
10. _____
11. _____
12. _____
13. _____
14. _____
15. _____



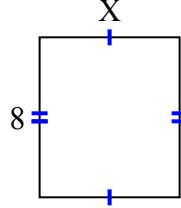
Tim giá trị của X đối với mỗi hình. Mỗi hình tính bằng cm (cm). Không phải mở rộng quy mô.

Câu trả lời

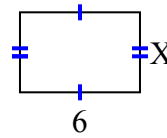
1) diện tích = 15 centimet²



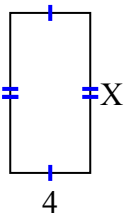
2) diện tích = 56 centimet²



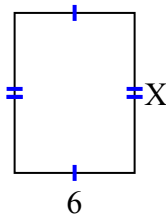
3) diện tích = 24 centimet²



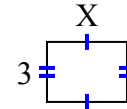
4) diện tích = 32 centimet²



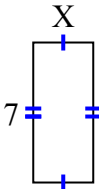
5) diện tích = 48 centimet²



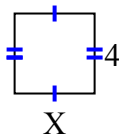
6) diện tích = 12 centimet²



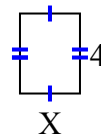
7) diện tích = 21 centimet²



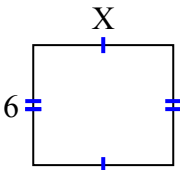
8) diện tích = 16 centimet²



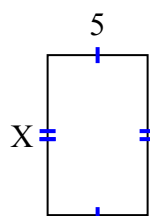
9) diện tích = 12 centimet²



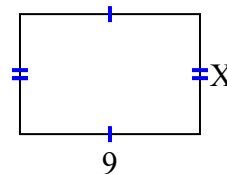
10) diện tích = 42 centimet²



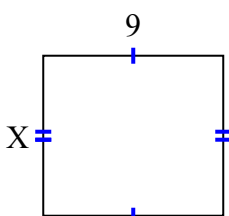
11) diện tích = 40 centimet²



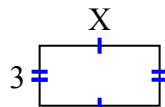
12) diện tích = 54 centimet²



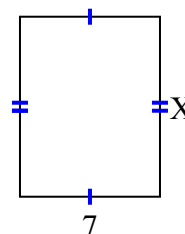
13) diện tích = 72 centimet²



14) diện tích = 18 centimet²



15) diện tích = 63 centimet²



1. 5
2. 7
3. 4
4. 8
5. 8
6. 4
7. 3
8. 4
9. 3
10. 7
11. 8
12. 6
13. 8
14. 6
15. 9